



let's crack defence exams  
www.ssbcrackexams.com

# THE MOST POPULAR DEFENCE EXAM APP OF ALL TIME

Prepare for defence exams like NDA, CDS, AFCAT, INET, TA, GROUP X&Y, MNS, ACC and more.



## BEST FEATURES

SSB Crack Exams is the exclusive online platform for the candidates aspiring to make the Nation proud.



### DETAILED LECTURES

Start enjoying your learning experience by the rock-solid video lessons specially designed for your easy understanding & higher scores in the exam.



### PYQs & TEST SERIES

Get ready for your D-Day with unlimited practice papers & previous years' questions made easy with our insightful video classes & extra notes prepared



### SMART ANALYTICS

Get your own personalized Performance Tracker where you can check your Learning Footprints, Digital Notes, All-India Ranking, Timed Tests, Mind-blowing Quizzes, Prompt Videos, quick & accurate Mock Test Results, Self-Analytic Progress Reports and more.

 **SSB Crack**  
EXAMS

 [support@ssbcrackexams.com](mailto:support@ssbcrackexams.com)

 [www.ssbcrackexams.com](http://www.ssbcrackexams.com)

# Top 300 Most Expected Questions

## AFCAT 2021 – Reasoning

<b>ANALOGY</b>	
<b>1.</b>	<p><b>Cup is to coffee as bowl is to</b></p> <p>(a) Dish (b) Soup (c) Spoon (d) Food</p> <p><b>Ans. (b)</b></p>
<b>2.</b>	<p><b>Play is to actor as concert is to</b></p> <p>(a) Symphony (b) Musician (c) Piano (d) Percussion</p> <p><b>Ans. (b)</b></p>
<b>3.</b>	<p><b>Palette Easel Brush</b> <b>Textbook Lessonplan ?</b></p> <p>(a) Artist (b) Teacher (c) Report Card (d) Paint</p> <p><b>Ans. (c)</b></p>
<b>4.</b>	<p>Select the related word pair from the given alternatives.</p> <p><b>EXPLORE : DISCOVER</b></p> <p>(a) Read: Skim (b) Research: Learn (c) Write:print (d) Think:Relate</p> <p><b>Ans. (b)</b></p>
<b>5.</b>	<p><b>Pituitary: brain :: thymus :?</b></p> <p>(a) Throat (b) Chest (c) Spinal cord (d) Larynx</p>

	<b>Ans. (b)</b>
6.	Forecast : Future :: Regret : ? (a) Present (b) Atone (c) Past (d) Sins  <b>Ans. (c)</b>
7.	Family : Home :: Colleagues : ? (a) Work (b) Office (c) Building (d) Friends  <b>Ans. (b)</b>
8.	INDIA : PEACOCK :: USA : ? (a) Red Kite (b) Bald Eagle (c) Mute swan (d) Robin  <b>Ans. (b)</b>
9.	Microphone : Loud :: Microscope : ? (a) Elongate (b) Investigate (c) Magnify (d) Examine  <b>Ans. (c)</b>
10.	Sound : Medium :: Light : ? (a) Air (b) Vacuum (c) Water (d) Glass  <b>Ans. (b)</b>
11.	Democracy : India :: Communism : ? (a) France (b) China (c) Britain (d) America  <b>Ans. (b)</b>

<p><b>12.</b></p>	<p>School : Education :: ? : ?</p> <p>(a) Scalpel : Teacher                      (b) Hospital : Treatment</p> <p>(c) Teacher : School                        (d) Class : College</p> <p><b>Ans. (b)</b></p>
<p><b>13.</b></p>	<p>5 : 125 :: 7 : ?</p> <p>(a) 343    (b) 512</p> <p>(c) 243    (d) 729</p> <p><b>Ans. (a)</b></p>
<p><b>14.</b></p>	<p>Sheep : Lamb :: Insect : ?</p> <p>(a) Cub    (b) Larva</p> <p>(c) Bull    (d) Tadpole</p> <p><b>Ans. (b)</b></p>
<p><b>15.</b></p>	<p>Monk : Nun :: Bachelor : ?</p> <p>(a) Spinster                                      (b) Woman</p> <p>(c) Lady    (d) Man</p> <p><b>Ans. (a)</b></p>
<p><b>16.</b></p>	<p>'China' is related to 'Yuan' in the same way as 'Japan' is related to '_____'. (a) Rand                      (b) Sushi                      (c) Lira                      (d) Yen</p> <p><b>Ans. (d)</b></p>
<p><b>17.</b></p>	<p>Select the word pair in which the two words are related in the same way as the two words in the following word-pair. Season : Winter</p> <p>(a) Week : Calendar                      (b) Summer : Autumn</p> <p>(c) Year : Century                        (d) Month : April</p> <p><b>Ans. (d)</b></p>



<b>18.</b>	<p>Medicine : Patient :: Education : ?</p> <p>(a) Teacher                      (b) School (c) Student                      (d) Tuition</p> <p><b>Ans. (c)</b></p>
<b>19.</b>	<p>LAMP : IXJM :: FISH : ?</p> <p>(a) CGPF                      (b) CFQE (c) CFPE                      (d) CGQF</p> <p><b>Ans. (c)</b></p>
<b>20.</b>	<p>13 : 20 :: 17 : ?</p> <p>(a) 25                      (b) 26 (c) 27                      (d) 28</p> <p><b>Ans. (d)</b></p>
<b>21.</b>	<p>Fire : Burn :: ? : ?</p> <p>(a) Water : Drink              (b) Wood : Tress (c) Ice : Freeze              (d) Flower : Rose</p> <p><b>Ans. (c)</b></p>
<b>22.</b>	<p>3 : 27 :: 4 : ?</p> <p>(a) 63                      (b) 64 (c) 65                      (d) 15</p> <p><b>Ans. (b)</b></p>
<b>23.</b>	<p>KLMN : IJKL :: TUVW : ?</p> <p>(a) RSUT                      (b) VWXY (c) STUV                      (d) RSTU</p> <p><b>Ans. (d)</b></p>
<b>24.</b>	<p>Select the option that is related to the third number in the same way as the second number is related to the first number.</p> <p>12 : 192 :: 15 : ?</p> <p>(a) 245                      (b) 240 (c) 225                      (d) 250</p>

	<b>Ans. (b)</b>
<b>25.</b>	Select the word-pair in which the two words are related in the same way as the two words in the following word-pair. Dirty : Filthy (a) Perfect : Unique      (b) Shy : Timid (c) Cute : Child          (d) Bright : Sunlight  <b>Ans. (b)</b>
<b>26.</b>	'Heart' is related to 'Circulation' in the same way as 'Kidney' is related to _____.  (a) Reproduction      (b) Respiration (c) Energy Production (d) Excretion  <b>Ans. (d)</b>
<b>27.</b>	Haematology : Blood :: Phycology : ? (a) Fungi                      (b) Fishes (c) Algae                      (d) Diseases  <b>Ans. (c)</b>
<b>28.</b>	Pride of Lions :: _____ of cats (a) Herd                      (b) School (c) Clowder                  (d) Bunch  <b>Ans. (c)</b>
<b>29.</b>	$D \times H : 4 \times 8$ as $M \times Q : ?$ (a) $12 \times 17$ (b) $12 \times 16$ (c) $13 \times 17$ (d) $14 \times 18$  <b>Ans. (c)</b>
<b>30.</b>	TOMATO : MTOOTA :: 123412 : ? (a) 312214                  (b) 123456 (c) 321124                  (d) 213314

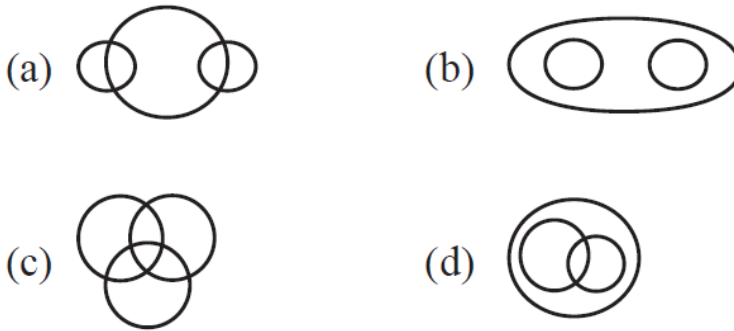
	<b>Ans. (a)</b>	
<b>CLASSIFICATION</b>		
<b>31.</b>	(a) Parsley (c) Dill	(b) Basil (d) mayonnaise
	<b>Ans. (d)</b>	
<b>32.</b>	(a) Tulip (c) Bud	(b) Rose (d) Daisy
	<b>Ans. (c)</b>	
<b>33.</b>	(a) Rye (c) Pumpernickel	(b) Sourdough (d) Loaf
	<b>Ans. (a)</b>	
<b>34.</b>	(a) Scythe (c) Pliers	(b) Knife (d) Saw
	<b>Ans. (c)</b>	
<b>35.</b>	(a) Biology (c) Theology	(b) Chemistry (d) Zoology
	<b>Ans. (c)</b>	
<b>36.</b>	(a) Albatross (c) Pelican	(b) Ostrich (d) Penguin
	<b>Ans. (b)</b>	
<b>37.</b>	(a) Internet Banking (b) Mobile Banking (c) Automated Teller Machine (d) Personal Banking	
	<b>Ans. (c)</b>	

38.	(a) Cathedral (c) Temple	(b) Mosque (d) Monastery
	<b>Ans. (d)</b>	
39.	(a) Daring : Timid (c) Clear : Vague	(b) Beautiful : Pretty (d) Youth : Adult
	<b>Ans. (b)</b>	
40.	(a) Fish : Shoal (c) Sheep : Flock	(b) Cow : Herd (d) Man : Mob
	<b>Ans. (d)</b>	
41.	(a) Rival (c) Foe	(b) Opponent (d) Ally
	<b>Ans. (d)</b>	
42.	(a) POCG (c) BUDX	(b) KLIZ (d) FQMV
	<b>Ans. (d)</b>	
43.	(a) Farmer (c) Cobbler	(b) Blacksmith (d) Helper
	<b>Ans. (d)</b>	
44.	(a) APRIL (c) JULY	(b) JUNE (d) SEPTEMBER
	<b>Ans. (c)</b>	
45.	(a) Anther (c) Ovary	(b) Retina (d) Petal

	<b>Ans. (c)</b>
46.	(a) Big (b) Expensive (c) Costly (d) Valuable <b>Ans. (a)</b>
47.	(a) Indigo (b) Silver (c) Orange (d) Violet <b>Ans. (b)</b>
48.	(a) 4:27 (b) 49:218 (c) 16:125 (d) 9:64 <b>Ans. (b)</b>
49.	(a) 31 (b) 37 (c) 43 (d) 49 <b>Ans. (d)</b>
50.	(a) Medium (b) Average (c) Mediocre (d) Terrible <b>Ans. (d)</b>
51.	(a) Food : Hunger (b) Water : Thirst (c) Air : Suffocation (d) Talent : Education <b>Ans. (d)</b>
52.	(a) Jowar (b) Wheat (c) Mustard (d) Bajra <b>Ans. (c)</b>
53.	(a) Coriander (b) Potato (c) Beetroot (d) Onion <b>Ans. (a)</b>
54.	(a) Atom : Electron (b) Train : Engine (c) House : Room (d) Curd : Milk

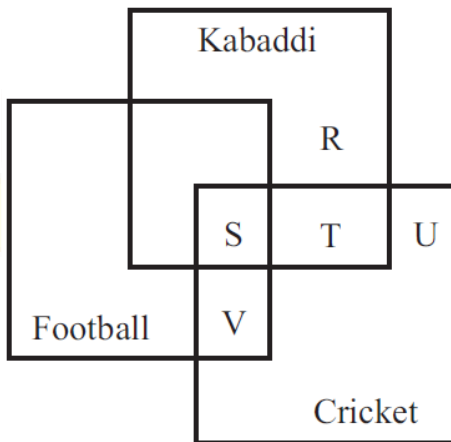
	<b>Ans. (d)</b>	
55.	(a) Nephrology (c) Astrology	(b) Entomology (d) Mycology
	<b>Ans. (c)</b>	
56.	(a) Ornithology : Birds (c) Biology : Botany	(b) Mycology : Fungi (d) Phycology : Algae
	<b>Ans. (c)</b>	
57.	(a) Microbe (c) Microphone	(b) Microfilm (d) Microscope
	<b>Ans. (a)</b>	
58.	(a) Advice (c) Direct	(b) Counsel (d) Suggest
	<b>Ans. (c)</b>	
59.	(a) Cry - Laugh (c) Increase - Decrease	(b) Up - Down (d) Walking - Running
	<b>Ans. (d)</b>	
60.	(a) Chennai (c) Raipur	(b) Daman (d) Shimla
	<b>Ans. (b)</b>	
<b>VENN DIAGRAMS</b>		

61. Which of the following diagrams indicates the best relation between Profit, Dividend and Bonus ?



Ans. (b)

62. The diagram given below represents those students who play Cricket, Football and Kabaddi.

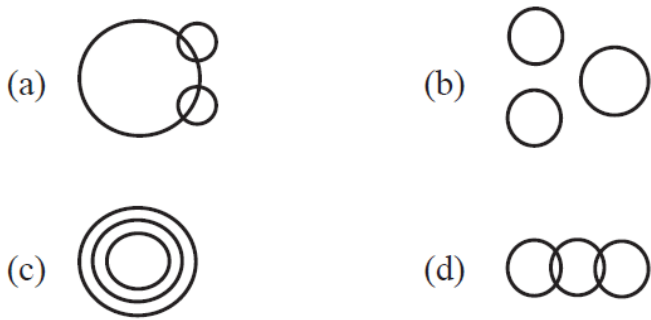


Study the diagram and identify the students who play all the three games.

- (a) P+Q+R                      (b) V+T  
(c) S+T+V                      (d) S

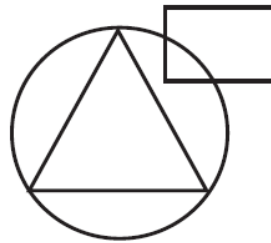
Ans. (d)

63. Which of the following diagrams indicates the best relation between Hockey, Football and Cricket ?



Ans. (b)

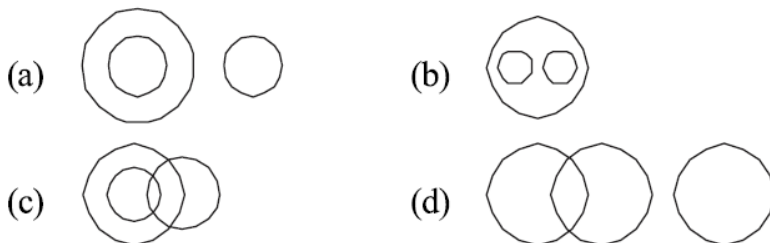
64. In an organization of pollution control board, engineers are represented by a circle, legal experts by a square and environmentalist by a triangle. Who is most represented in the board as shown in the following figure ?



- (a) Environmentalists
- (b) Legal Experts
- (c) Engineers with legal background
- (d) Environmentalists with Engineering background

Ans. (d)

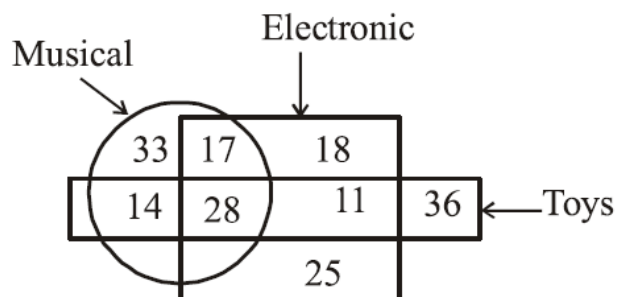
65. Which of the following diagrams represents the correct relationship between Doctors, Specialist Doctors and Patients?





**Ans. (c)**

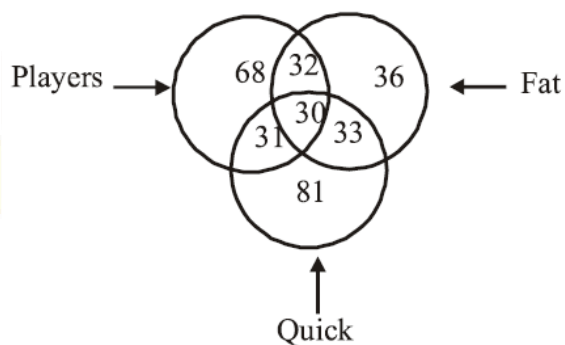
**66.** In the given figure, how many are musical toys?



- (a) 53                                      (b) 61  
(c) 42                                      (d) 45

**Ans. (c)**

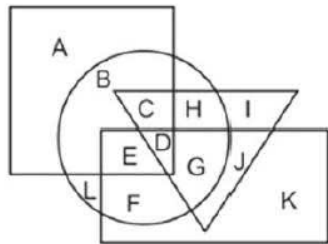
**67.** In the given figure, how many players are quick and fat?



- (a) 31                                      (b) 30                                      (c) 32                                      (d) 33

**Ans. (b)**

68. In the following figure, rectangle represents Opticians, circle represents Art critics, triangle represents Riders and square represents Boxes. Which set of letters represents Art critics who are not Riders?



- (a) BLEF
- (b) IJ
- (c) CHDG
- (d) EDGJ

Ans. (a)

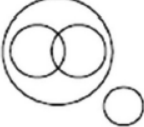

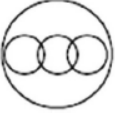


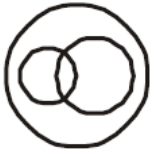


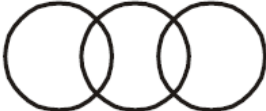
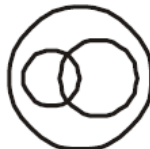


69. Which one of the following diagram represents the correct relationship among Professor, Male and Female.

- (a)
- (b)
- (c)
- (d)

Ans. (a)

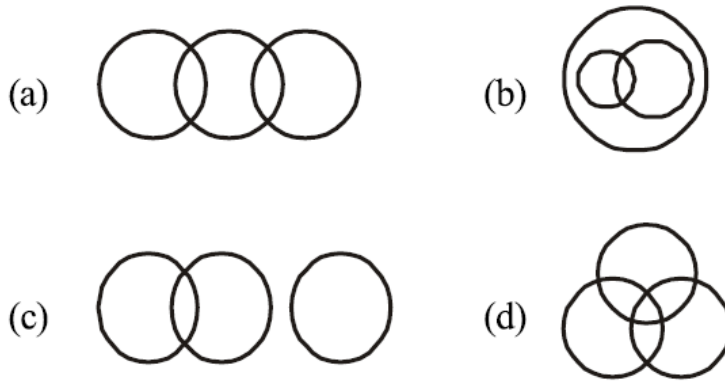
70. Which one of the following diagram represents the correct relationship among Pink, Blue and Fruit.

- (a)
- (b)
- (c)
- (d)

	<p><b>Ans. (d)</b></p>
<p><b>71.</b></p>	<p>Which one of the following diagram represents the correct relationship among Brain, Cerebrum, Liver and Human body.</p> <p>(a) </p> <p>(b) </p> <p>(c) </p> <p>(d) </p> <p><b>Ans. (d)</b></p>
<p><b>72.</b></p>	<p>Brick , House, Bridge</p> <p>(a) </p> <p>(b) </p> <p>(c) </p> <p>(d) </p> <p><b>Ans. (a)</b></p>
<p><b>73.</b></p>	<p>Student of law, Student of science, Men</p> <p>(a) </p> <p>(b) </p> <p>(c) </p> <p>(d) </p>

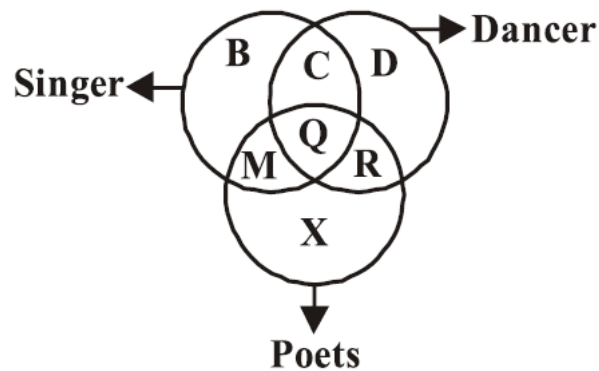
Ans. (a)

74. Antisocial, Pickpockets, Kidnappers



Ans. (b)

75. The following diagram represents the students who are singers, dancers and poets.



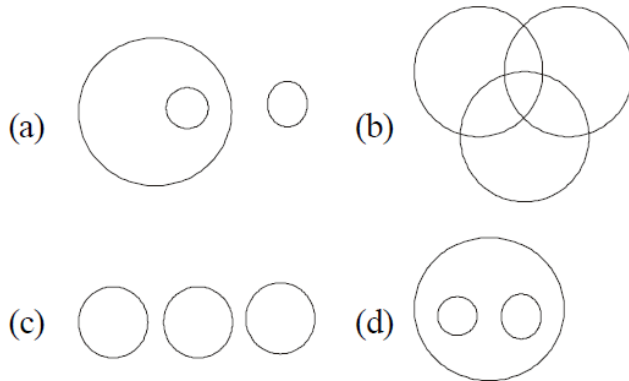
Study the diagram and identify the region which represents the students who are both poets and singers but not dancers.

- (a)  $B + C + D$                       (b) M  
(c)  $Q + R$                               (d)  $R + X$

Ans. (b)

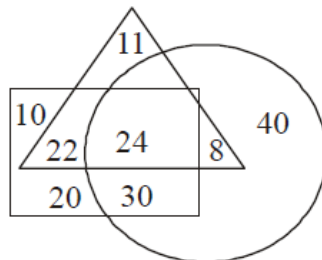
76. Select the Venn diagram that best represents the relationship among the given set of classes.

Students, Teachers, School



Ans. (d)

77. In the Venn diagram shown here, the triangle represent 'students', the circle represents 'diploma holders' and the quadrilateral represents 'graduates'. The numbers given in the diagram represents number of persons of that particular category.

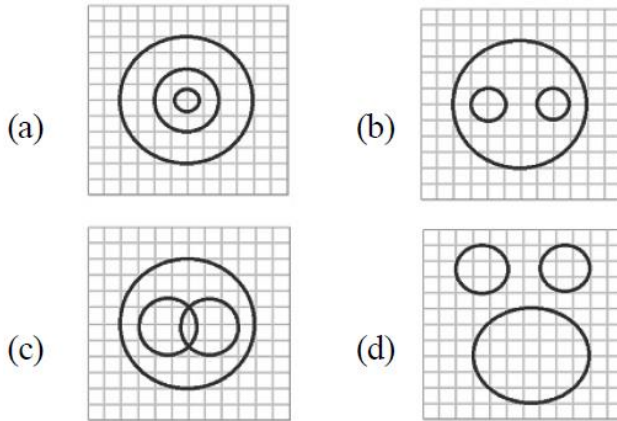


How many students are diploma holders but NOT graduates?

- (a) 8      (b) 11      (c) 40      (d) 30

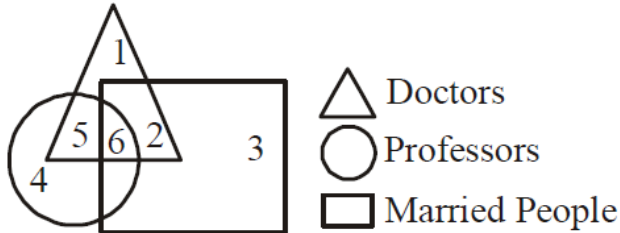
Ans. (a)

78. Identify the diagram that best represents the relationship among classes given below  
Delhi , Sri Lanka , Asia



Ans. (b)

79.

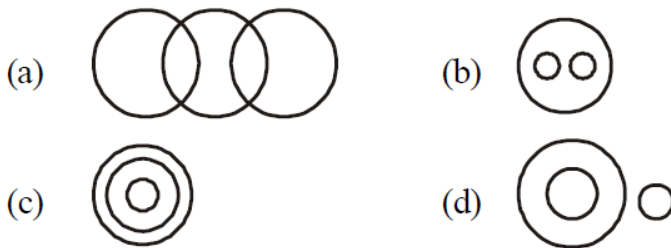


Which number indicates doctors who are not married ?

- (a) 6
- (b) 4
- (c) 2
- (d) 1

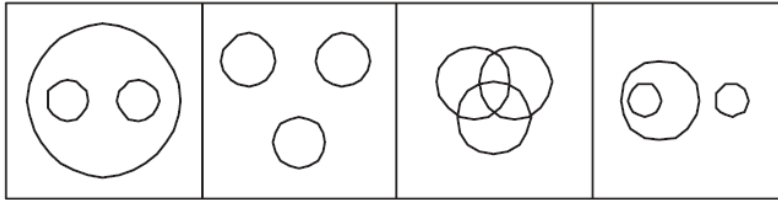
Ans. (d)

80. Identify the diagram that best represents the relationship among classes given below :  
Food, Curd, Spoons



Ans. (d)

81. Find out the figure which best represents the relationship among Garden, Rose and Jasmine.



(a)

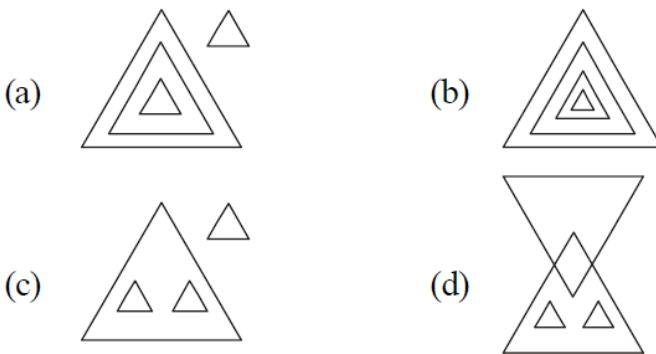
(b)

(c)

(d)

Ans. (a)

82. Identify the diagram that best represents the relationship among the given classes. Earth, Saturn, Planet, Star



(a)

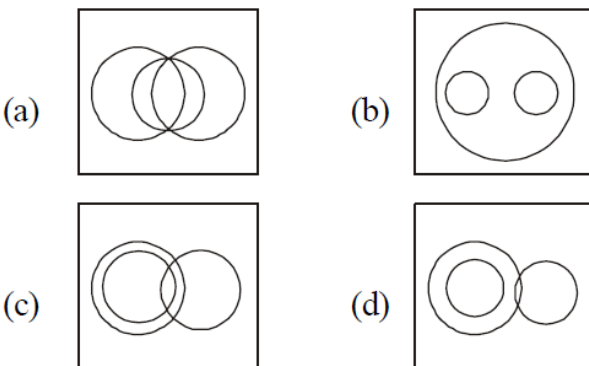
(b)

(c)

(d)

Ans. (c)

83. Identify the diagram that best represents the relationship among the given classes. Music Instrument, Piano, Guiter



(a)

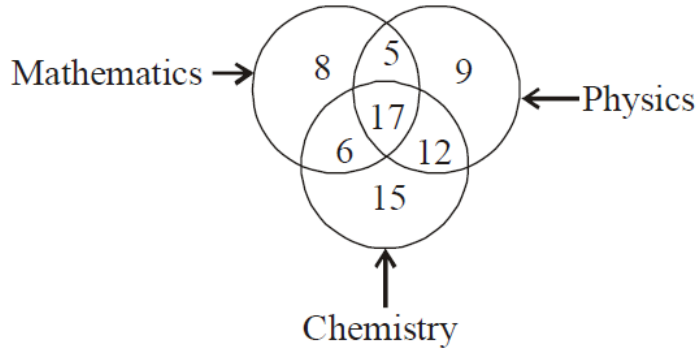
(b)

(c)

(d)

Ans. (b)

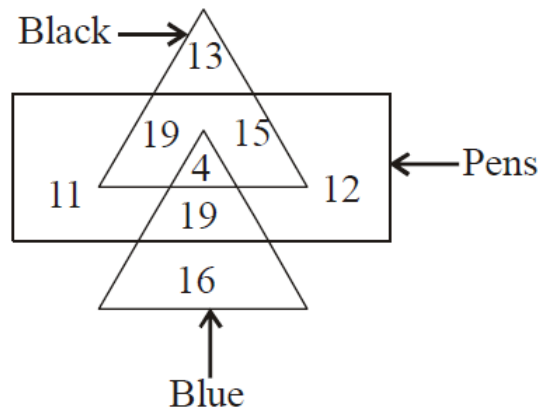
84. In the given figure, how many people study 2 subjects?



- (a) 11                      (b) 23  
(c) 12                      (d) 40

**Ans. (d)**

85. In the given figure, how many pens are blue?



- (a) 23      (b) 19      (c) 12      (d) 15

**Ans. (a)**





let's crack defence exams  
www.ssbcrackexams.com

# THE MOST POPULAR DEFENCE EXAM APP OF ALL TIME

Prepare for defence exams like NDA, CDS, AFCAT, INET, TA, GROUP X&Y, MNS, ACC and more.



## BEST FEATURES

SSB Crack Exams is the exclusive online platform for the candidates aspiring to make the Nation proud.



### DETAILED LECTURES

Start enjoying your learning experience by the rock-solid video lessons specially designed for your easy understanding & higher scores in the exam.



### PYQs & TEST SERIES

Get ready for your D-Day with unlimited practice papers & previous years' questions made easy with our insightful video classes & extra notes prepared



### SMART ANALYTICS

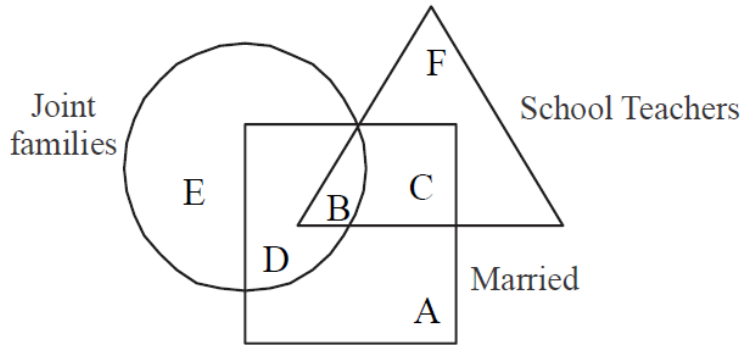
Get your own personalized Performance Tracker where you can check your Learning Footprints, Digital Notes, All-India Ranking, Timed Tests, Mind-blowing Quizzes, Prompt Videos, quick & accurate Mock Test Results, Self-Analytic Progress Reports and more.

 **SSB Crack**  
EXAMS

 [support@ssbcrackexams.com](mailto:support@ssbcrackexams.com)

 [www.ssbcrackexams.com](http://www.ssbcrackexams.com)

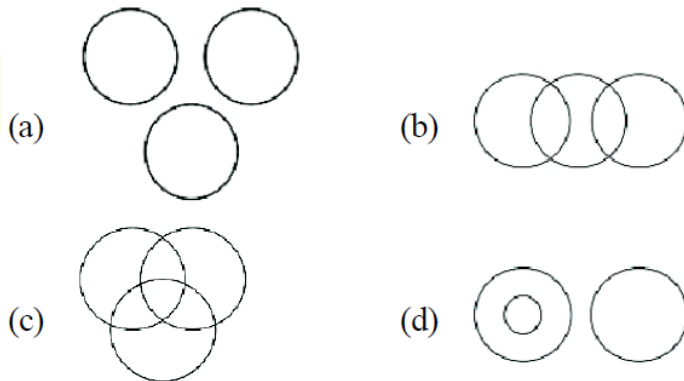
86. Triangle represents school teachers. Square represents married persons. Circles represents persons living in joint families. Married persons living in Joint families but not working as school teachers are represented by



- (a) D      (b) F      (c) A      (d) C

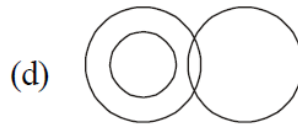
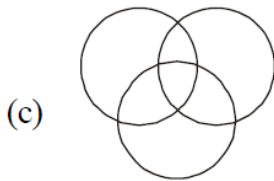
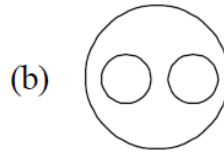
**Ans. (a)**

87. Which one of the following figures best represents the relationship among Kitchen, House and Garden?



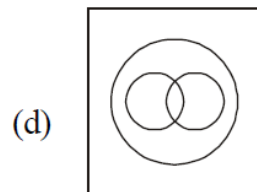
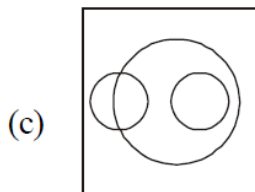
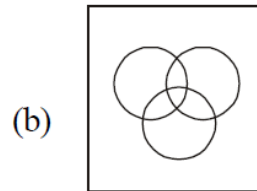
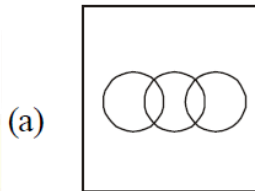
**Ans. (d)**

**88.** Which figure will best represent the relationship amongst the three classes ?  
Boy, Sportsman, Student



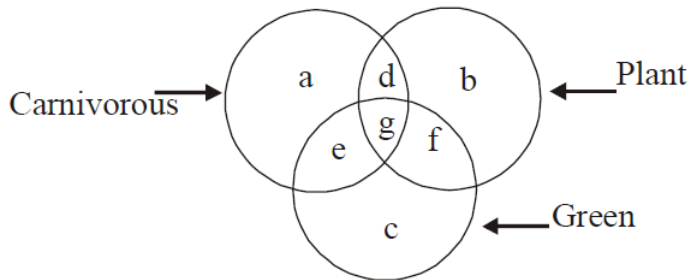
**Ans. (c)**

**89.** Identify the diagram that best represents the relationship among classes given below :  
Athletes, Sprinters, Marathon Runner



**Ans. (d)**

90. In the given figure, which letter represents carnivorous plants which are not green?

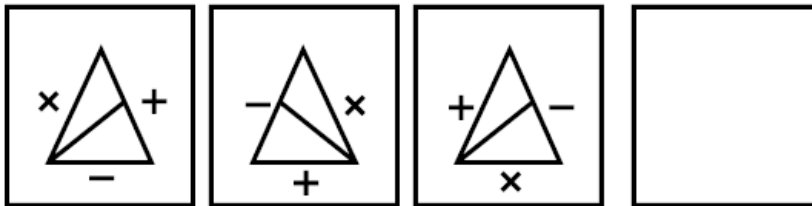


- (a) d                                      (b) g  
 (c) e                                      (d) f

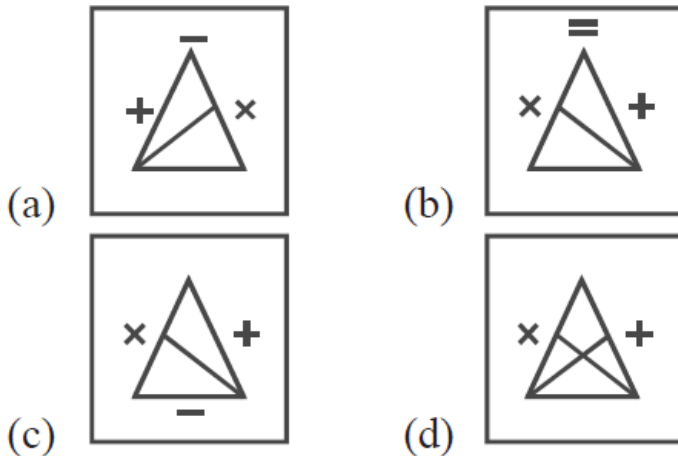
Ans. (a)

**FIGURE SERIES**

91. Question Figures




Answer Figures

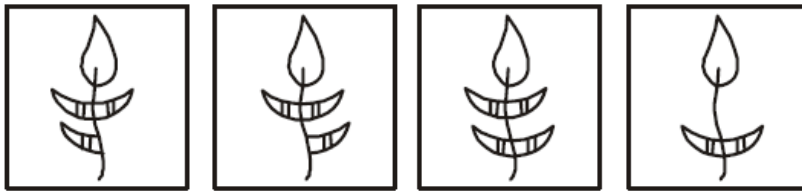


Ans. (c)

92. **Question Figure**



**Answer Figures**



(a)

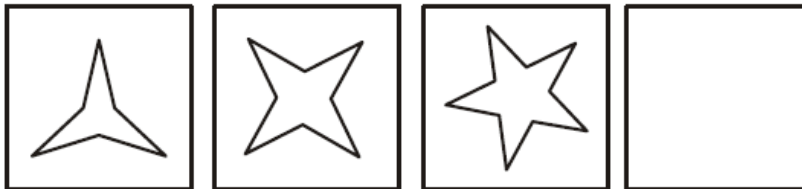
(b)

(c)

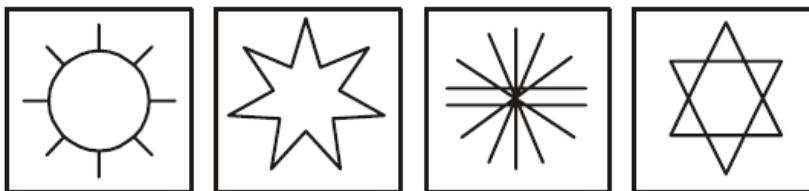
(d)

Ans. (b)

93. **Question Figure**



**Answer Figures**



(a)


(b)

(c)


(d)

Ans. (d)

94. Question Figure



Answer Figures



(a)

(b)

(c)

(d)

Ans. (b)

95.



(a)




(b)



(c)

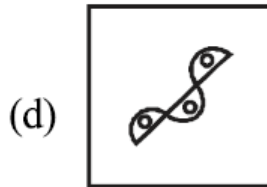
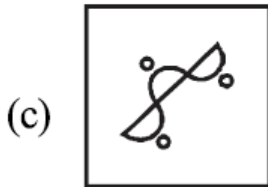
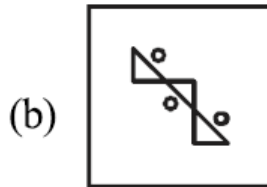
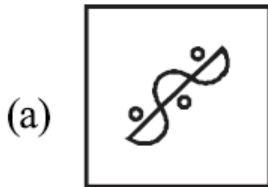
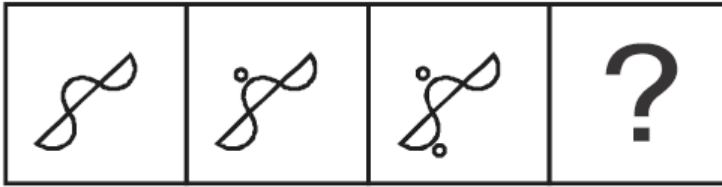


(d)



Ans. (c)

96.



Ans. (c)

97. Replace '?' by the appropriate figure from the given options.

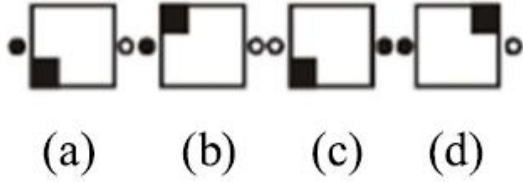


Ans. (c)

98. Question Figures:



**Answer Figures:**

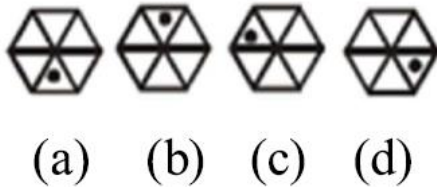


Ans. (c)

99. **Question Figures:**



**Answer Figures:**

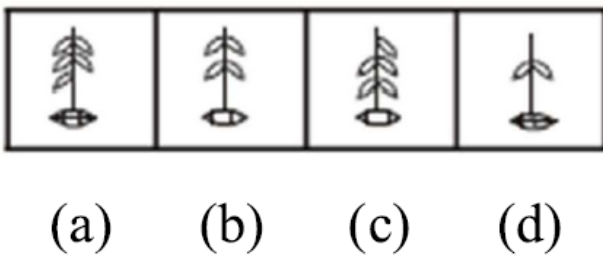


Ans. (d)

100. **Question Figures:**



**Answer Figures:**

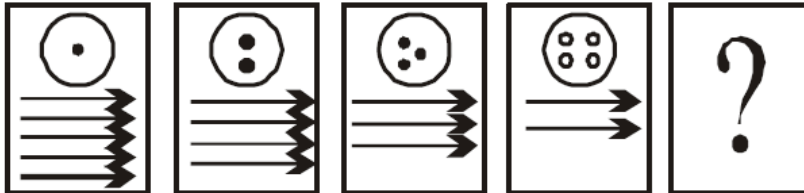




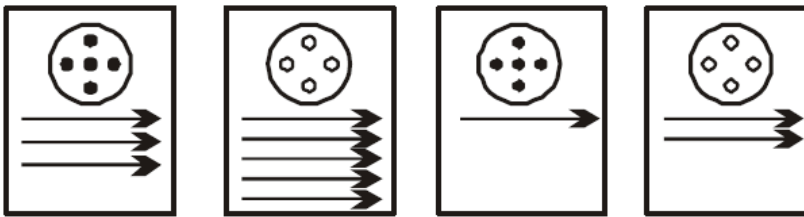
Ans. (c)

101. Find the missing figure from the given responses.

Question Figures:



Answer Figures:



(a)

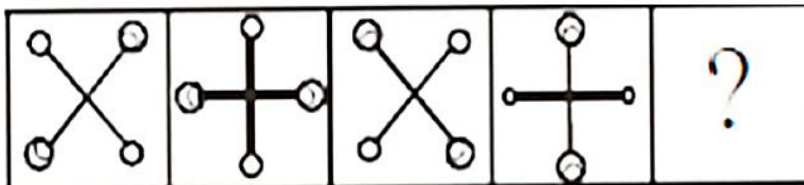
(b)

(c)

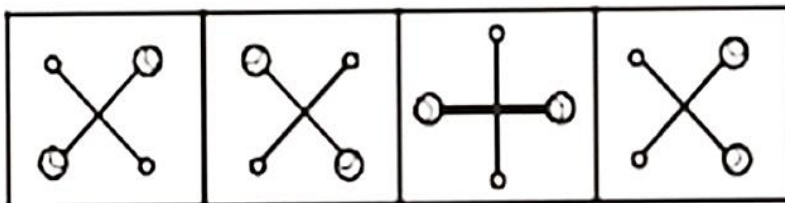
(d)

Ans. (c)

102. Question Figure:



Answer Figure:



(a)

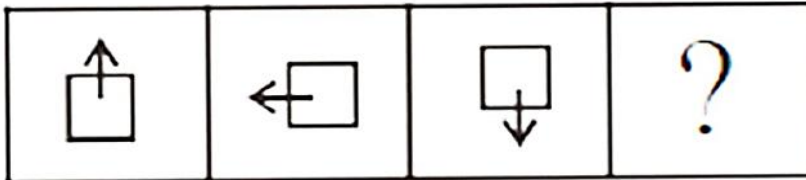
(b)

(c)

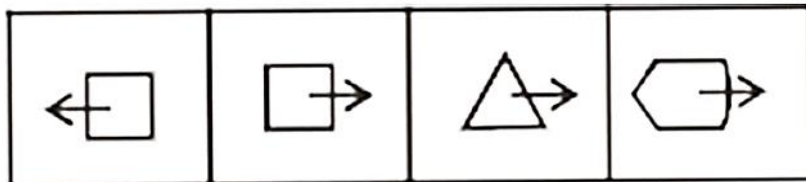
(d)

Ans. (a)

103. Question Figure:



Answer Figure:



(a)

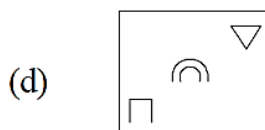
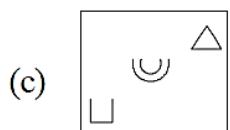
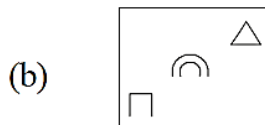
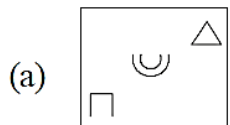
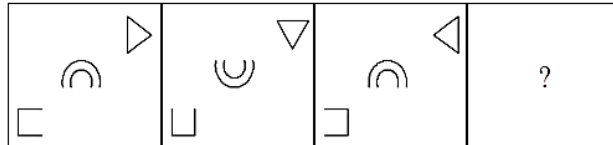
(b)

(c)

(d)

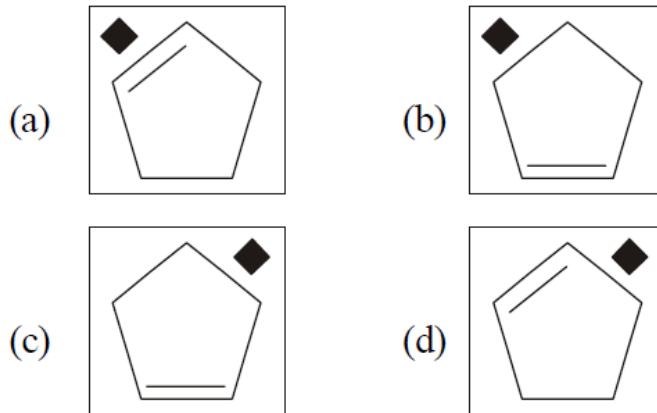
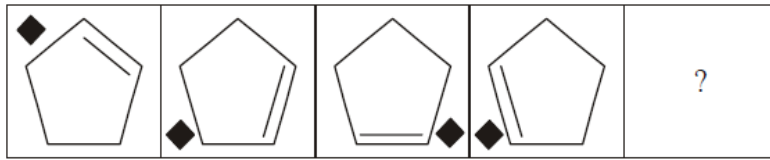
Ans. (b)

104. Select the figure that will come next in the following figure series.



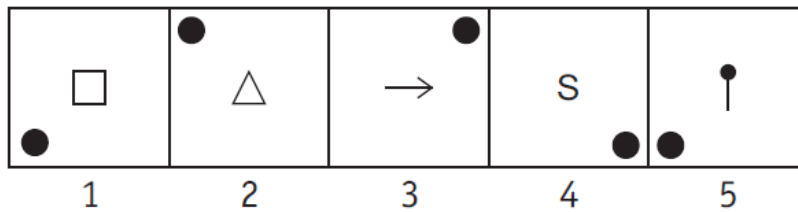
Ans. (a)

105.

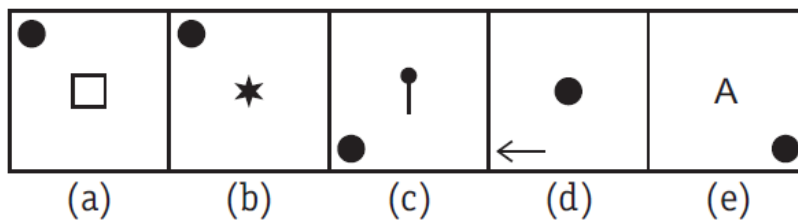


Ans. (a)

106. Problem Figures

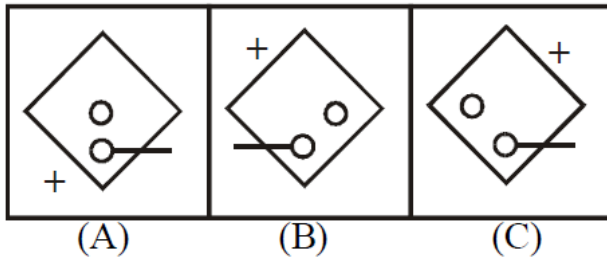


Answer Figures

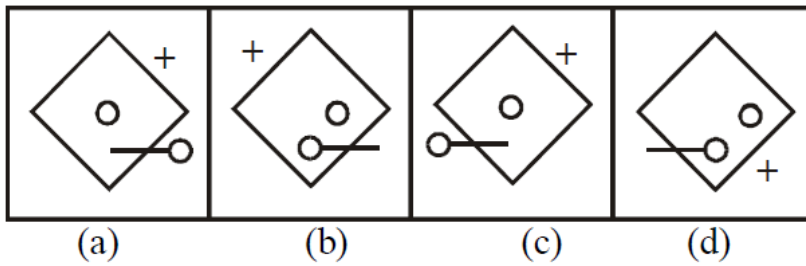


Ans. (b)

107. Problem Figures

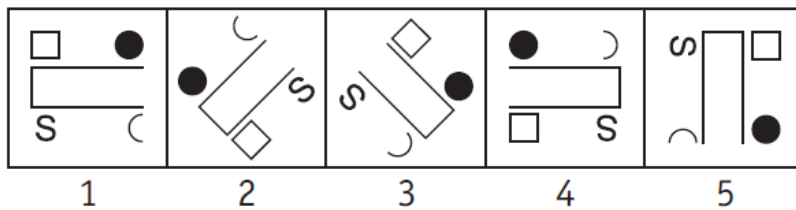


Answer Figures

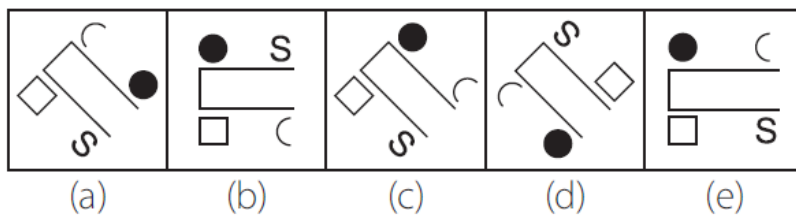


Ans. (d)

108. Problem Figures

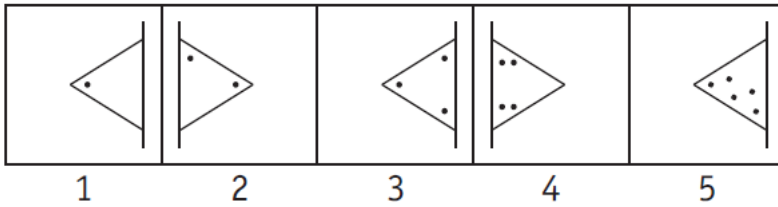


Answer Figures

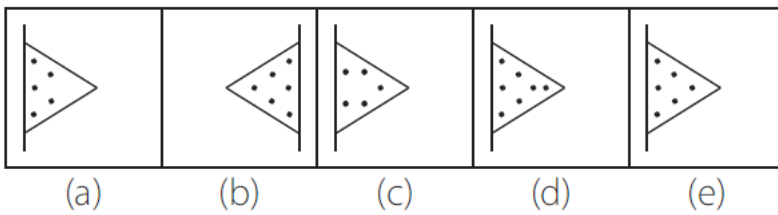


Ans. (c)

109. Problem Figures

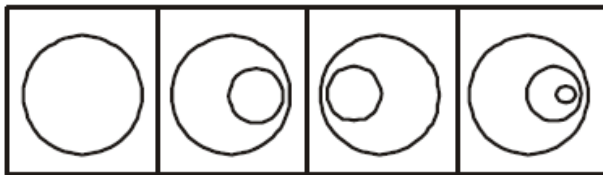


Answer Figures



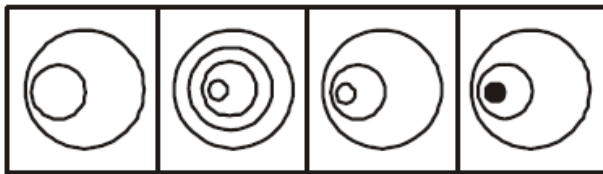
Ans. (e)

110. Problem Figures



(A) (B) (C) (D)

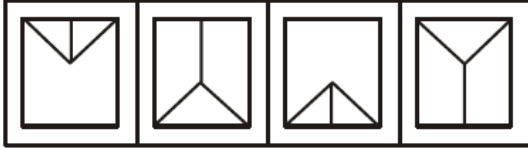
Answer Figures



(a) (b) (c) (d)

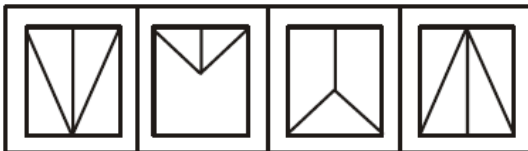
Ans. (c)

111. Problem Figures



(A) (B) (C) (D)

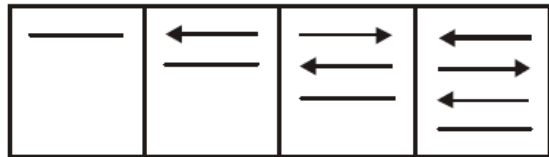
Answer Figures



(a) (b) (c) (d)

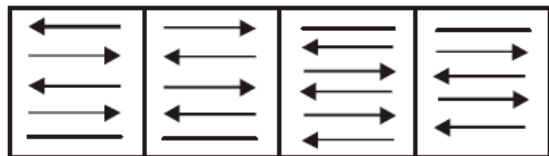
Ans. (b)

112. Problem Figures



(A) (B) (C) (D)

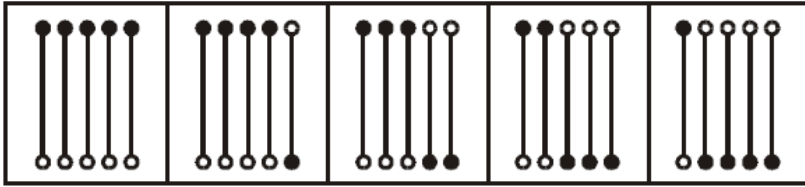
Answer Figures



(a) (b) (c) (d)

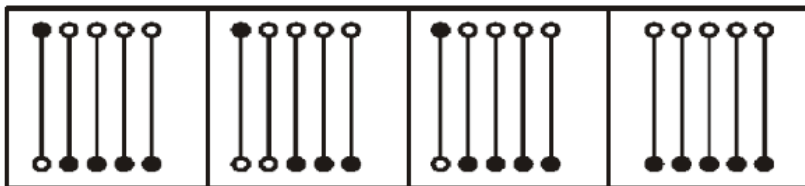
Ans. (b)

113. Problem Figures



(A) (B) (C) (D) (E)

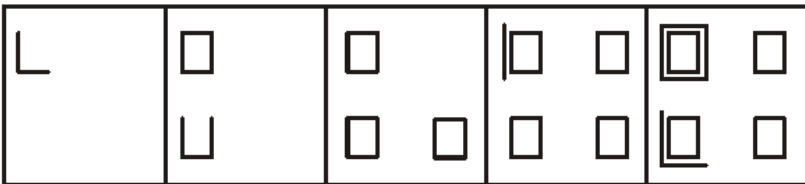
Answer Figures



(a) (b) (c) (d)

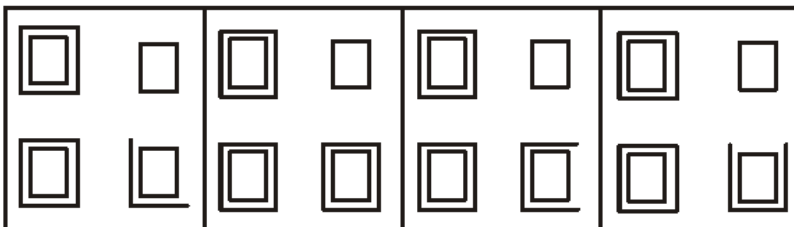
Ans. (d)

114. Problem Figures



(A) (B) (C) (D) (E)

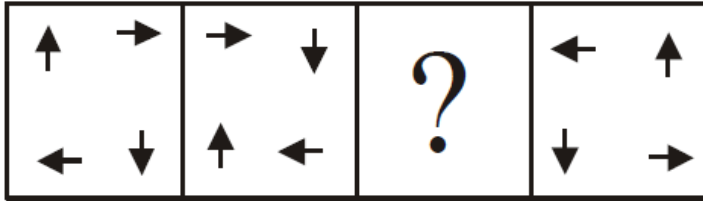
Answer Figures



(a) (b) (c) (d)

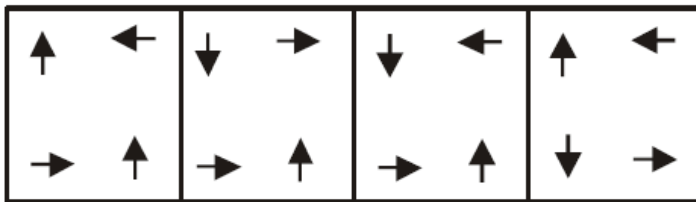
Ans. (d)

115. Problem Figures



(A) (B) (C) (D)

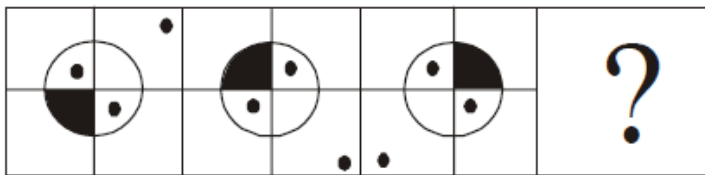
Answer Figures



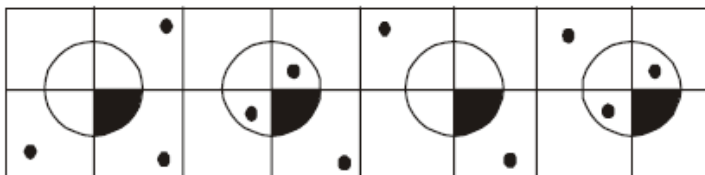
(a) (b) (c) (d)

Ans. (c)

116.



(A) (B) (C) (D)

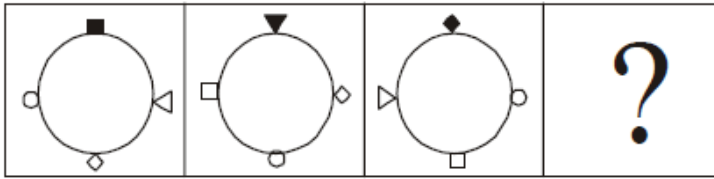


(a) (b) (c) (d)

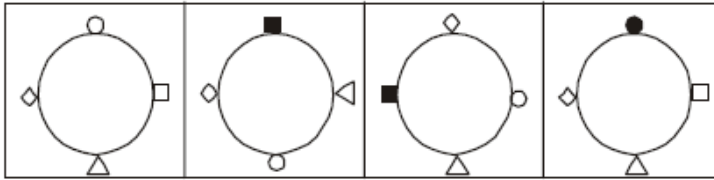
Ans. (d)



117.



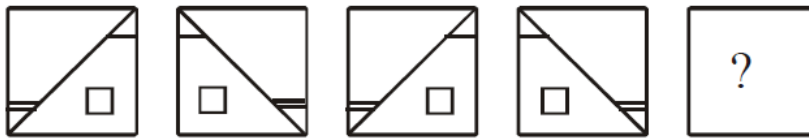
(A) (B) (C) (D)



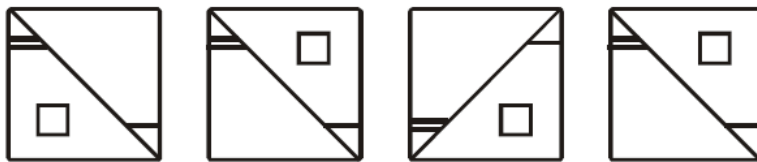
(a) (b) (c) (d)

Ans. (d)

118. Problem Figures



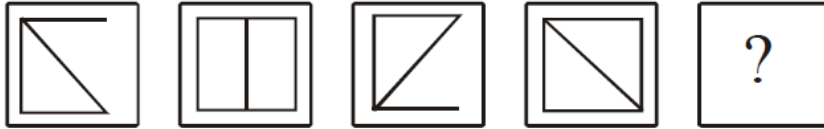
Answer Figures



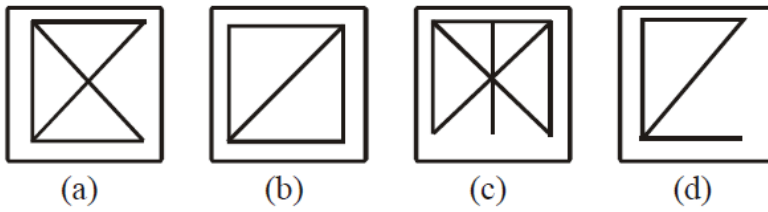
(a) (b) (c) (d)

Ans. (c)

119. Problem Figures

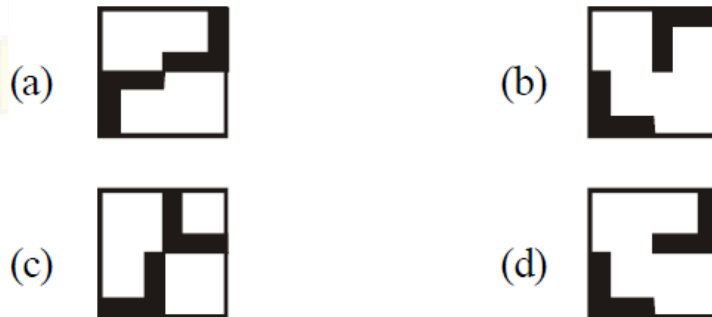


Answer Figures



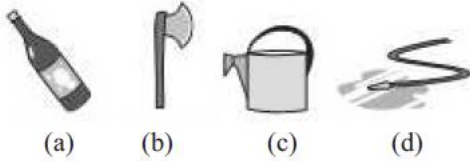

Ans. (d)

120.



Ans. (d)

121.




- (a) a
- (b) b
- (c) c
- (d) d

Ans. (c)

122. Question Figure



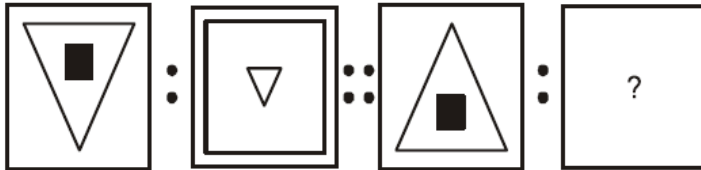
Answer Figures



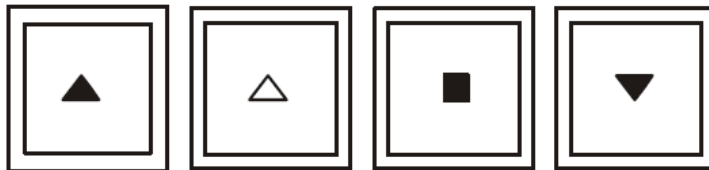
- (a)
- (b)
- (c)
- (d)

Ans. (b)

123. Question Figure



Answer Figures



(a)

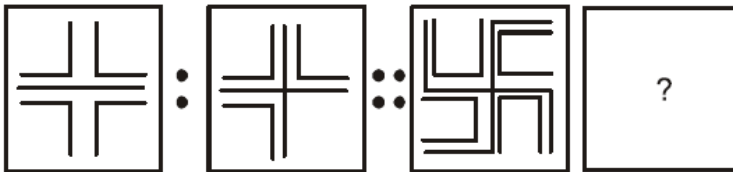
(b)

(c)

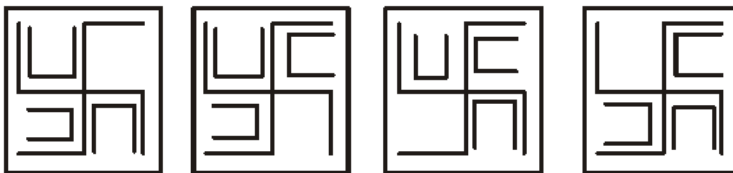
(d)

Ans. (b)

124. Question Figure



Answer Figures



(a)

(b)

(c)

(d)

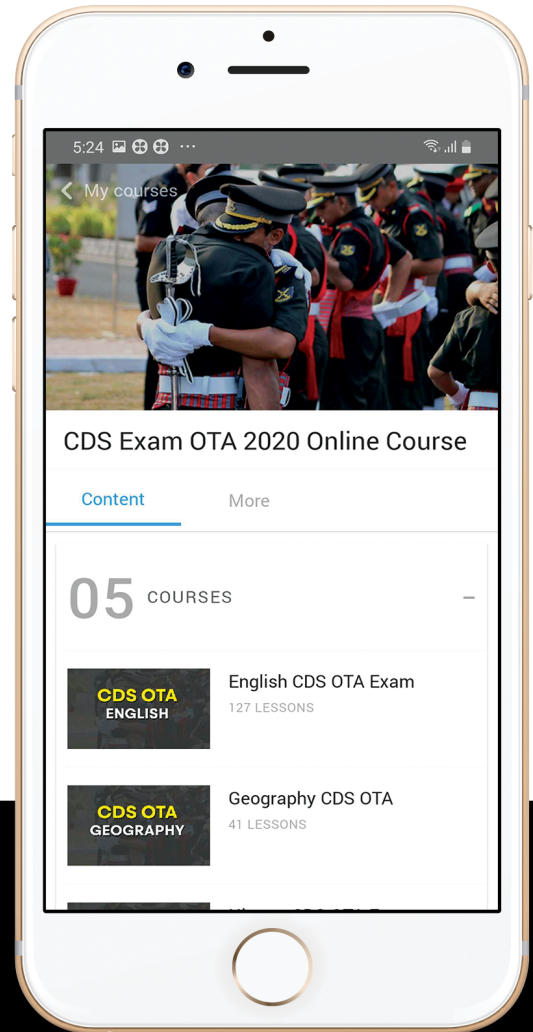
Ans. (b)



let's crack defence exams  
www.ssbcrackexams.com

# THE MOST POPULAR DEFENCE EXAM APP OF ALL TIME

Prepare for defence exams like NDA, CDS, AFCAT, INET, TA, GROUP X&Y, MNS, ACC and more.



## BEST FEATURES

SSB Crack Exams is the exclusive online platform for the candidates aspiring to make the Nation proud.



### DETAILED LECTURES

Start enjoying your learning experience by the rock-solid video lessons specially designed for your easy understanding & higher scores in the exam.



### PYQs & TEST SERIES

Get ready for your D-Day with unlimited practice papers & previous years' questions made easy with our insightful video classes & extra notes prepared



### SMART ANALYTICS

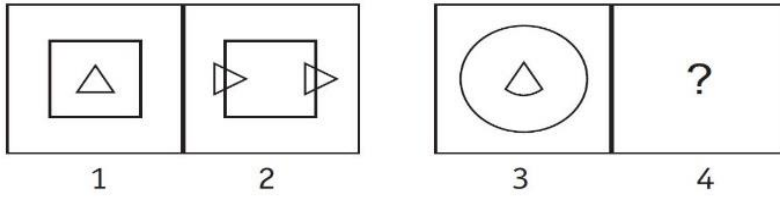
Get your own personalized Performance Tracker where you can check your Learning Footprints, Digital Notes, All-India Ranking, Timed Tests, Mind-blowing Quizzes, Prompt Videos, quick & accurate Mock Test Results, Self-Analytic Progress Reports and more.

 **SSB Crack**  
EXAMS

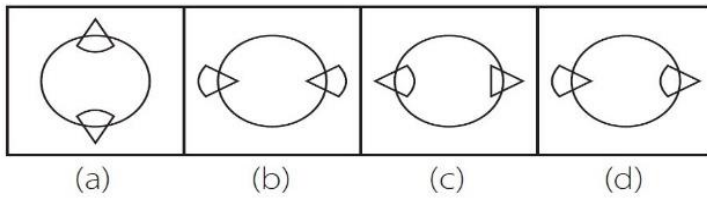
 [support@ssbcrackexams.com](mailto:support@ssbcrackexams.com)

 [www.ssbcrackexams.com](http://www.ssbcrackexams.com)

**125. Problem Figures**

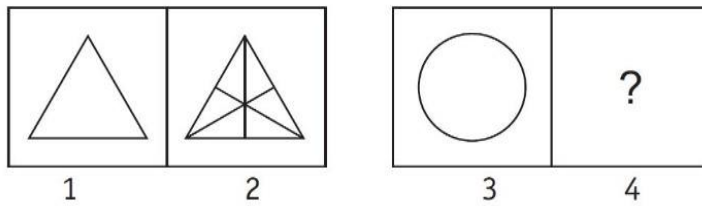


**Answer Figures**

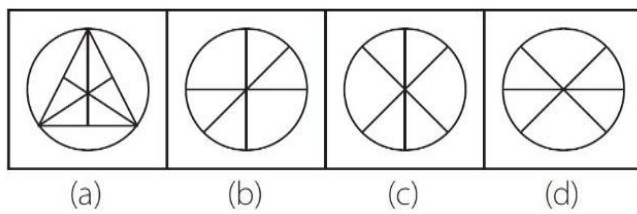


**Ans. (d)**

**126. Problem Figures**

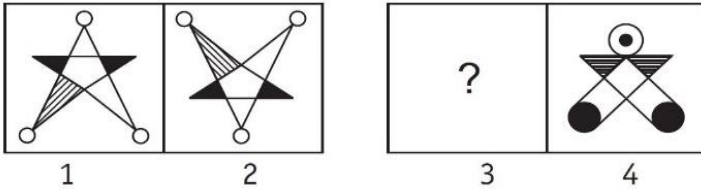


**Answer Figures**

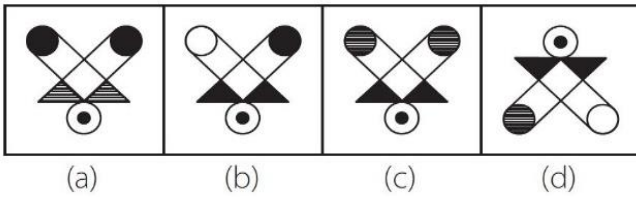


**Ans. (c)**

127. Problem Figures

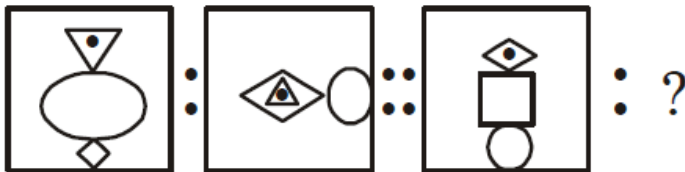


Answer Figures

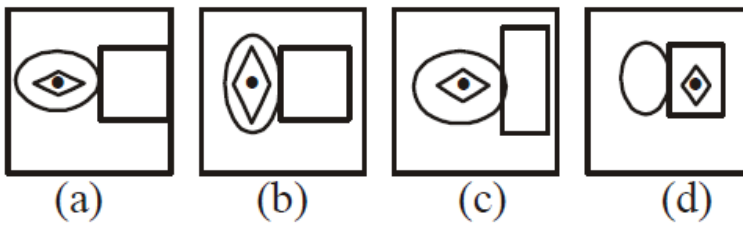


Ans. (a)

128. Question Figures :

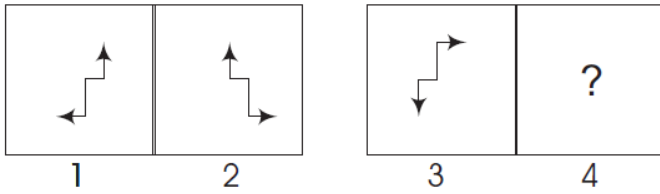


Answer Figures :

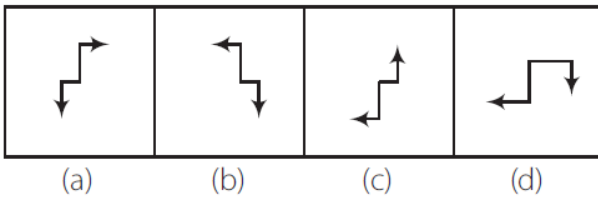


Ans. (a)

129. Problem Figures

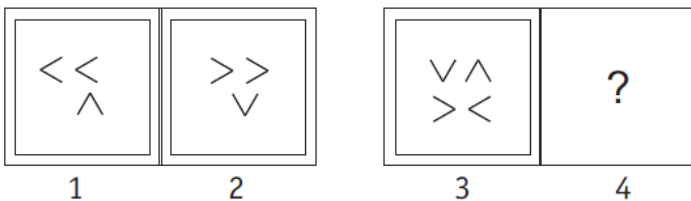


Answer Figures

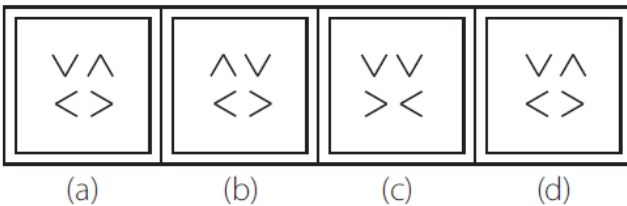


Ans. (b)

130. Problem Figures



Answer Figures

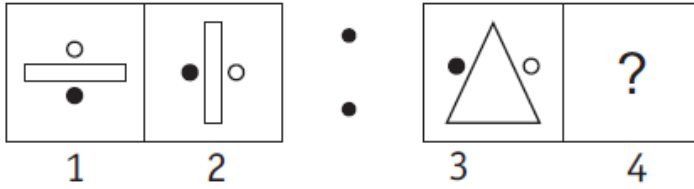


Ans. (b)

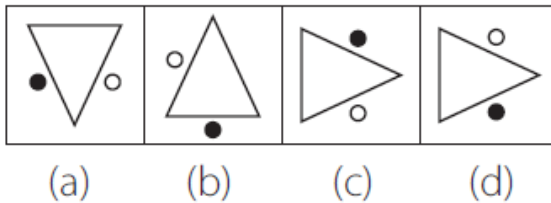
rack  
EXAMS



131. Problem Figures

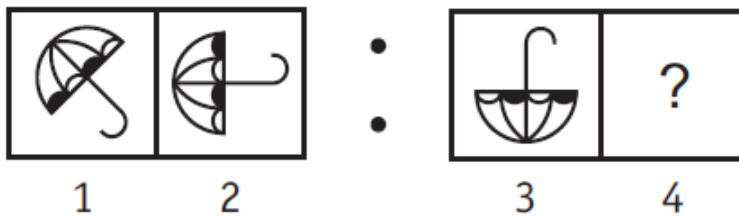


Answer Figures

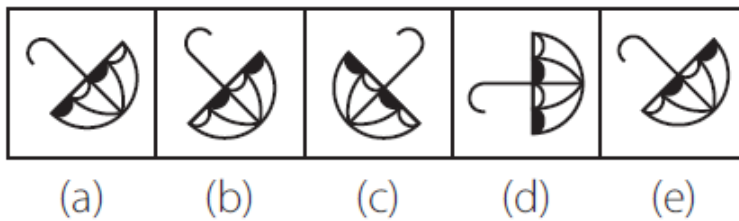


Ans. (c)

132. Problem Figures



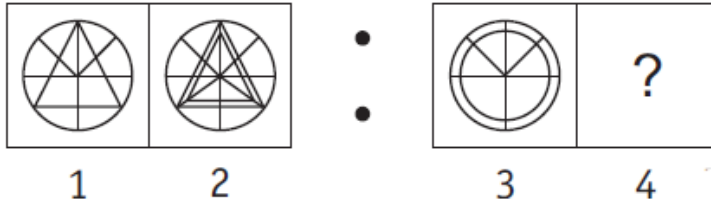
Answer Figures



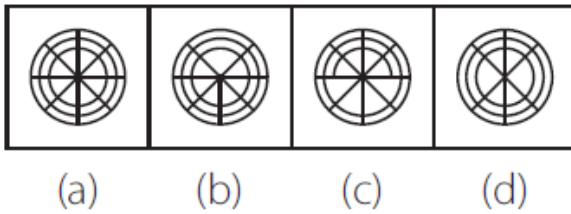
Ans. (a)

ack  
EXAMS

133. **Problem Figures**

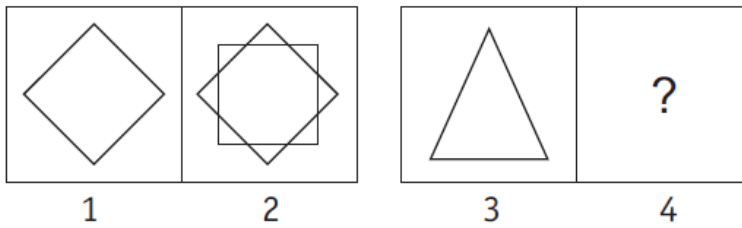


**Answer Figures**

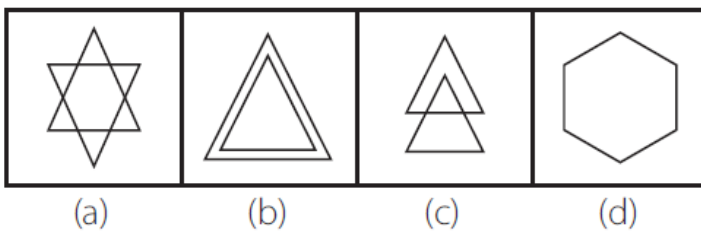


Ans. (a)

134. **Problem Figures**

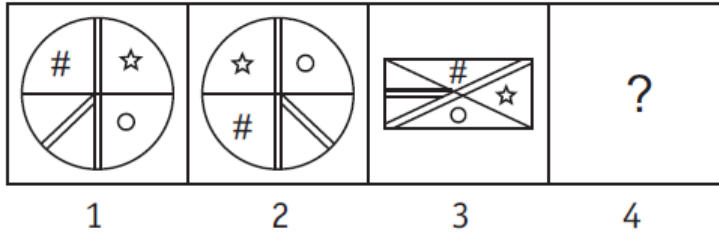


**Answer Figures**

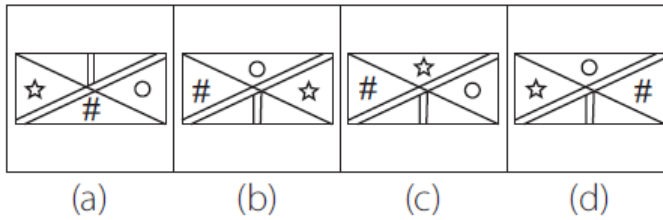


Ans. (a)

135. Problem Figures

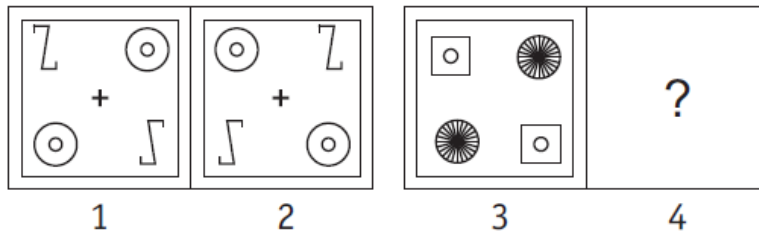


Answer Figures

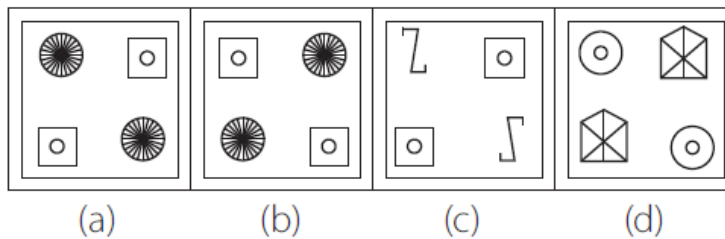


Ans. (c)

136. Problem Figures

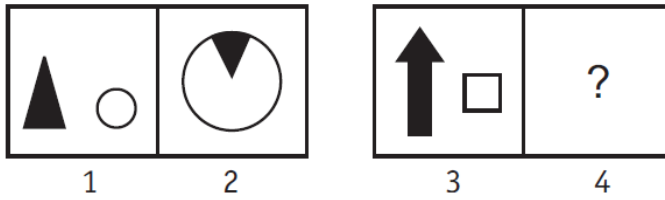


Answer Figures

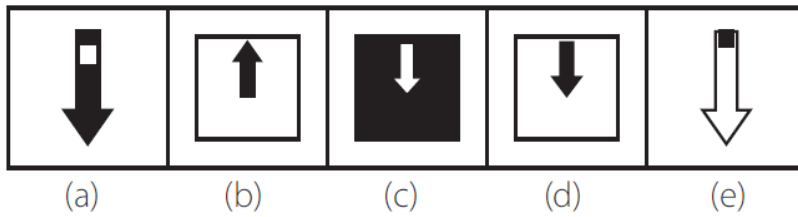


Ans. (a)

137. Problem Figures

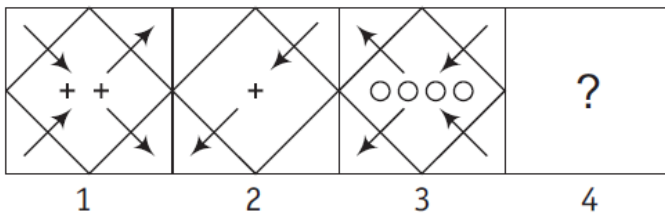


Answer Figures

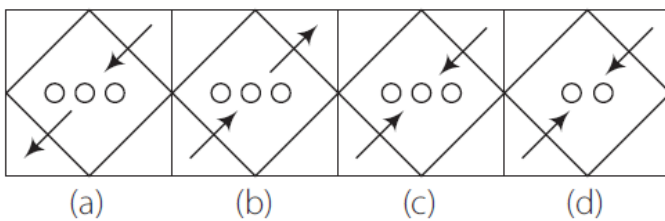


Ans. (c)

138. Problem Figures

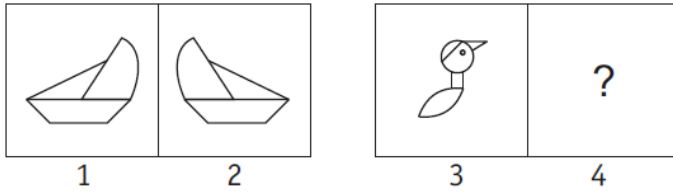


Answer Figures

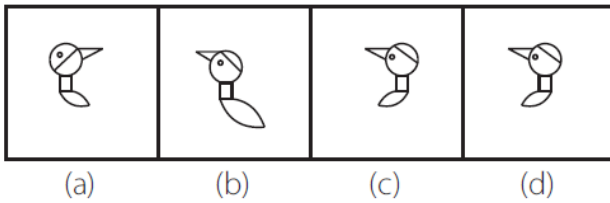


Ans. (b)

139. Problem Figures

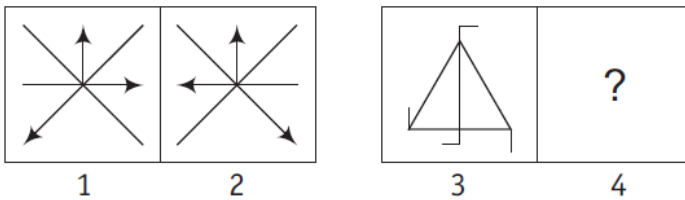


Answer Figures

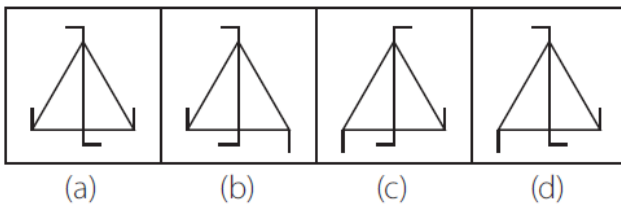


Ans. (b)

140. Problem Figures



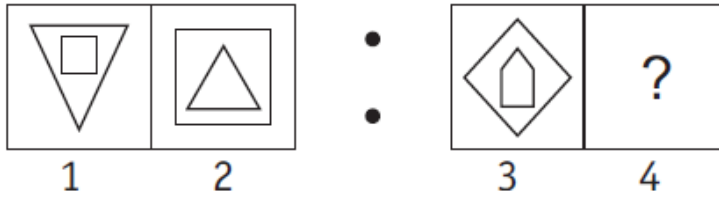
Answer Figures



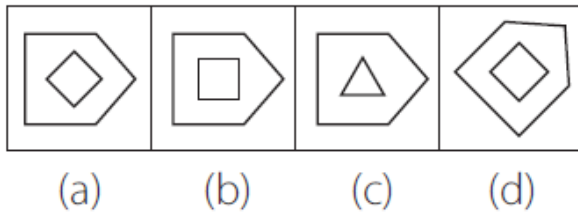
Ans. (d)

rack  
EXAMS

141. **Problem Figures**




**Answer Figures**

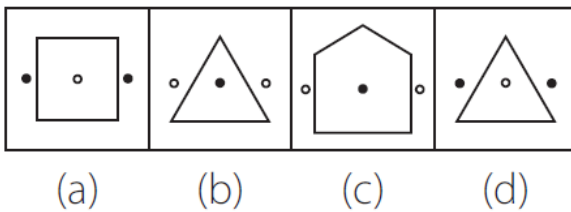


Ans. (b)

142. **Problem Figures**



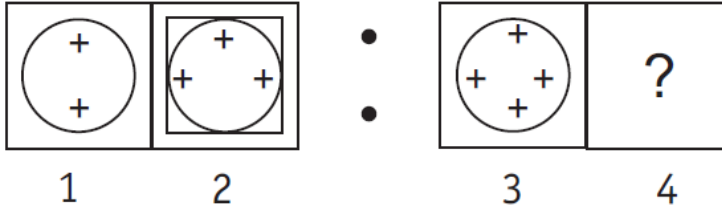
**Answer Figures**



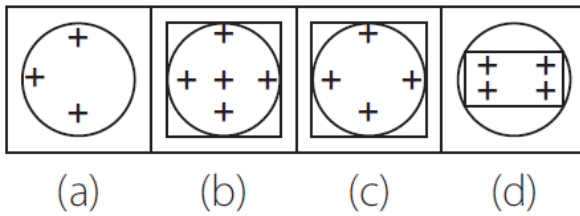
Ans. (d)

SSBCrack  
EXAMS

143. **Problem Figures**

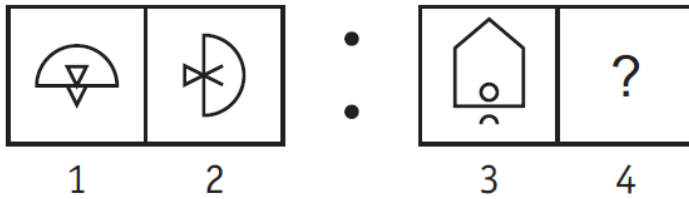


**Answer Figures**

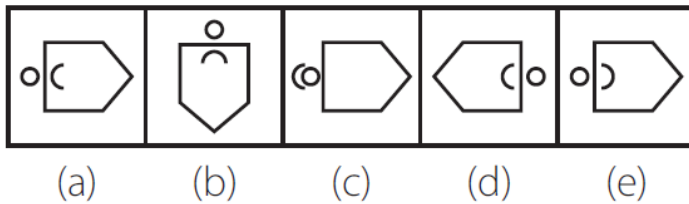


Ans. (b)

144. **Problem Figures**

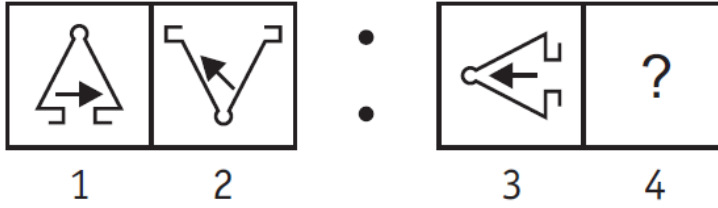


**Answer Figures**

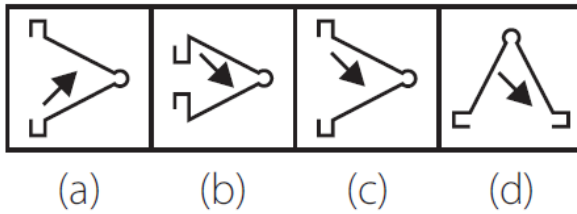


Ans. (e)

145. **Problem Figures**

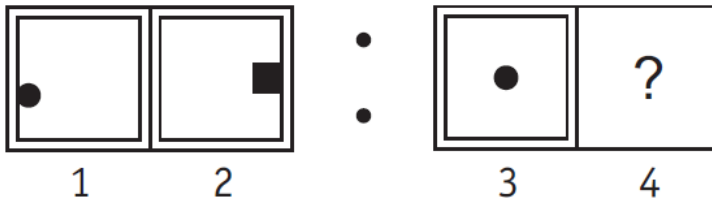


**Answer Figures**

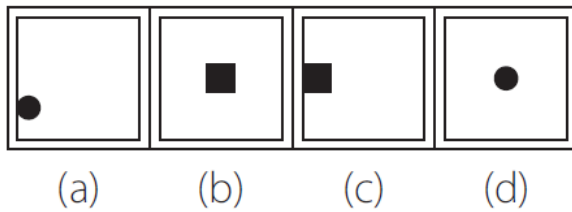


Ans. (c)

146. **Problem Figures**



**Answer Figures**



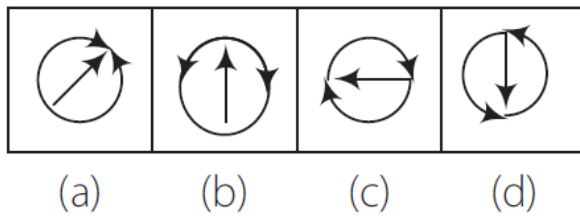
Ans. (b)



147. **Problem Figures**

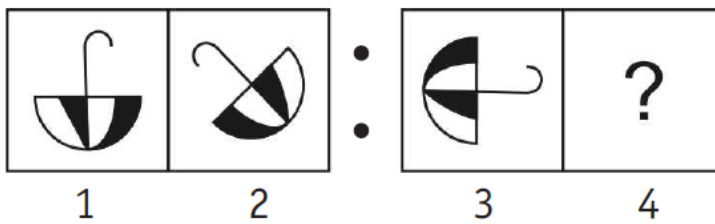


**Answer Figures**

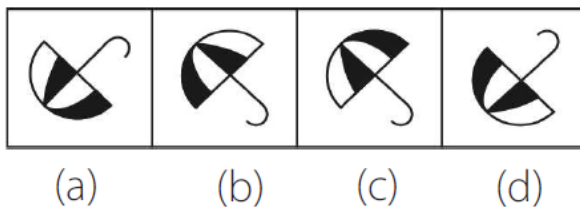


Ans. (d)

148. **Problem Figures**

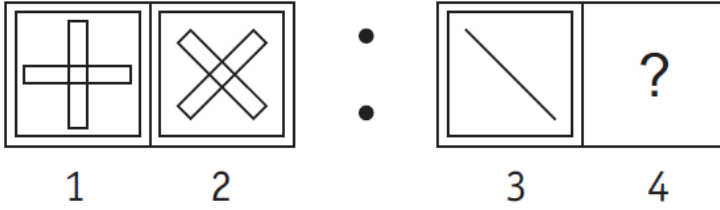


**Answer Figures**

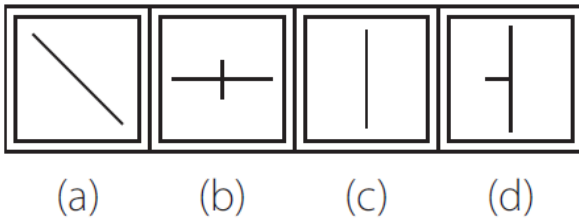


Ans. (a)

149. **Problem Figures**

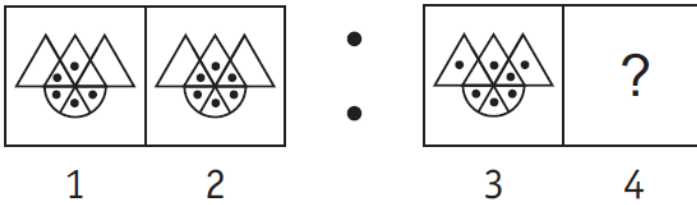


**Answer Figures**

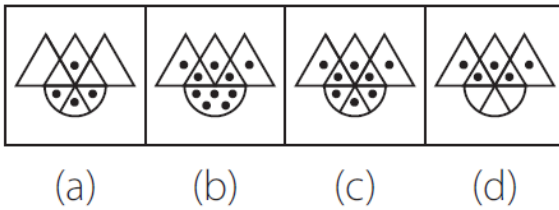


Ans. (c)

150. **Problem Figures**

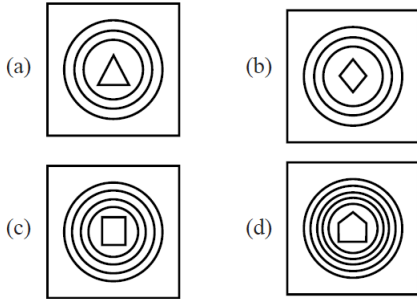


**Answer Figures**



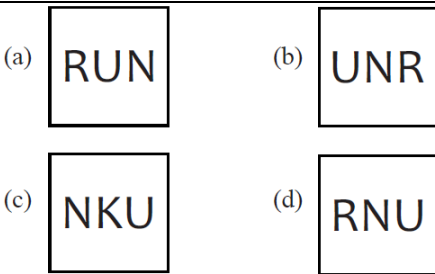
Ans. (c)

151.



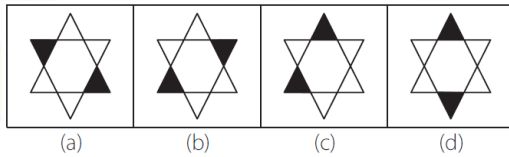
Ans. (b)

152.



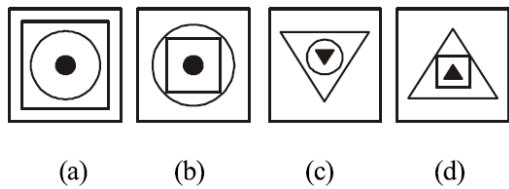
Ans. (c)

153.



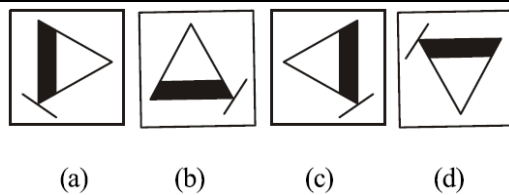
Ans. (c)

154.



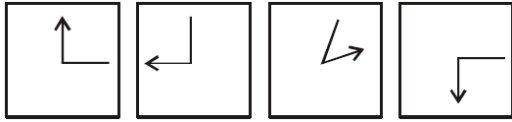
Ans. (a)

155.



Ans. (c)

156.



(a) (b) (c) (d)

Ans. (c)

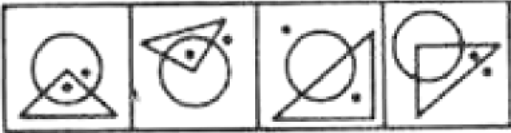
157.



(a) (b) (c) (d)

Ans. (b)

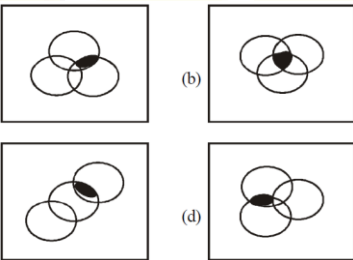
158.



(a) (b) (c) (d)

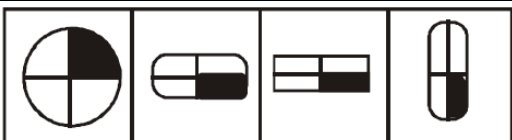
Ans. (a)

159.



Ans. (c)

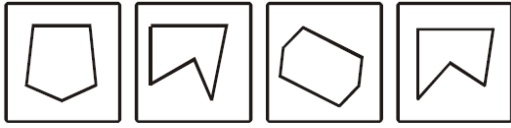
160.



(a) (b) (c) (d)

Ans. (a)

161.



A

B

C

D

(a) C

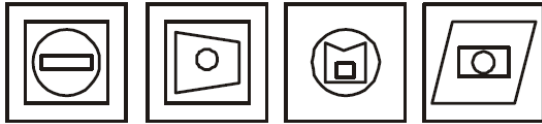
(b) A

(c) B

(d) D

Ans. (a)

162.



(a)

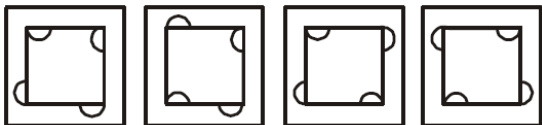
(b)

(c)

(d)

Ans. (c)

163.



(a)

(b)

(c)

(d)

Ans. (a)

164.



(a)

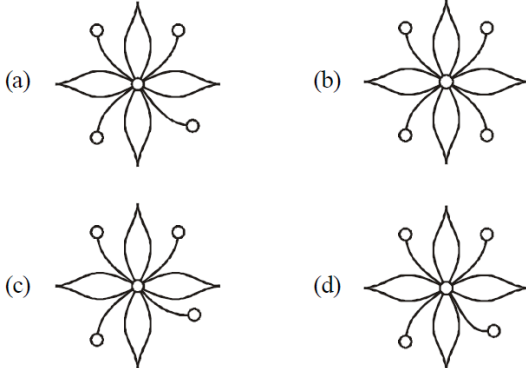
(b)

(c)

(d)

Ans. (d)

165.



(a)

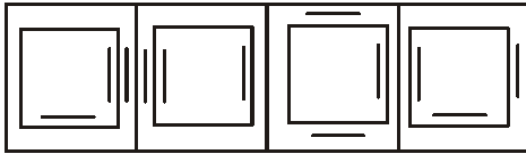
(b)

(c)

(d)

Ans. (b)

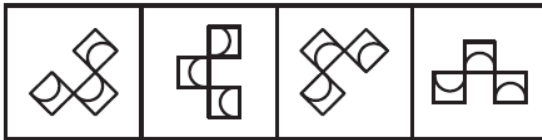
166.



(a) (b) (c) (d)

Ans. (c)

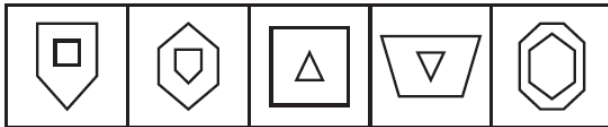
167.



(a) (b) (c) (d)

Ans. (b)

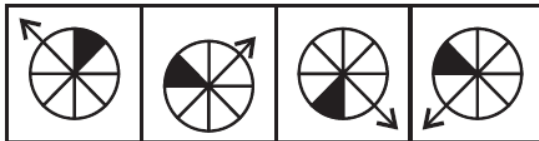
168.



(a) (b) (c) (d) (e)

Ans. (e)

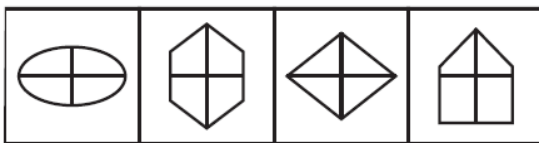
169.



(a) (b) (c) (d)

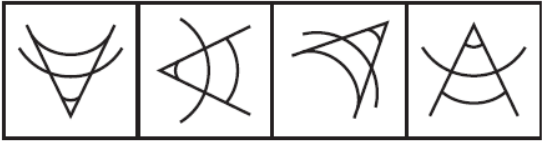
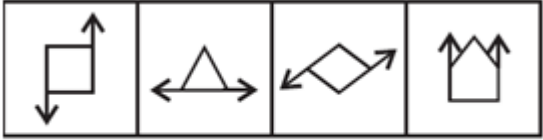
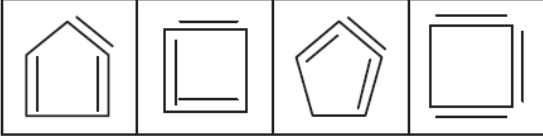
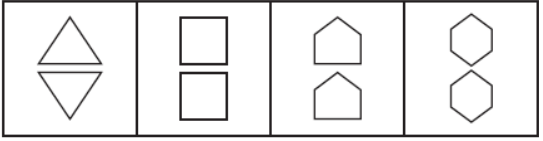
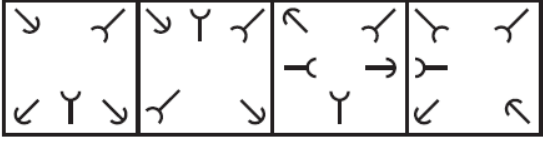
Ans. (b)

170.

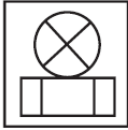


(a) (b) (c) (d)

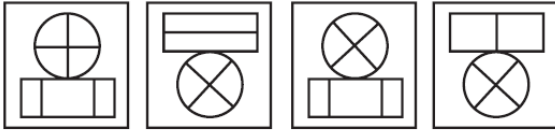
Ans. (d)

<p>171.</p>	 <p>(a) (b) (c) (d)</p> <p><b>Ans. (b)</b></p>
<p>172.</p>	 <p>(a) (b) (c) (d)</p> <p><b>Ans. (d)</b></p>
<p>173.</p>	 <p>(a) (b) (c) (d)</p> <p><b>Ans. (d)</b></p>
<p>174.</p>	 <p>(a) (b) (c) (d)</p> <p><b>Ans. (c)</b></p>
<p>175.</p>	 <p>(a) (b) (c) (d)</p> <p><b>Ans. (a)</b></p>
<p>176.</p>	<p><b>Which is the similar figure as that of question figure?</b></p>

**Question Figure**



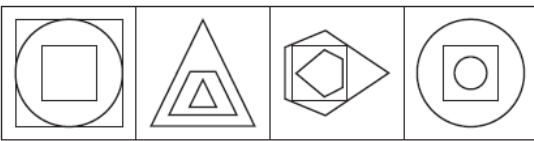
**Answer Figures**




- (a) (b) (c) (d)

**Ans. (c)**

**177. Problem Figures**



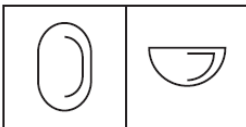
**Answer Figures**



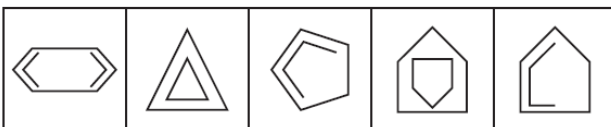
- (a) (b) (c) (d)

**Ans. (c)**

**178. Problem Figures**



**Answer Figures**



- (a) (b) (c) (d) (e)

**Ans. (e)**





let's crack defence exams  
www.ssbcrackexams.com

# THE MOST POPULAR DEFENCE EXAM APP OF ALL TIME

Prepare for defence exams like NDA, CDS, AFCAT, INET, TA, GROUP X&Y, MNS, ACC and more.



## BEST FEATURES

SSB Crack Exams is the exclusive online platform for the candidates aspiring to make the Nation proud.



### DETAILED LECTURES

Start enjoying your learning experience by the rock-solid video lessons specially designed for your easy understanding & higher scores in the exam.



### PYQAs & TEST SERIES

Get ready for your D-Day with unlimited practice papers & previous years' questions made easy with our insightful video classes & extra notes prepared



### SMART ANALYTICS

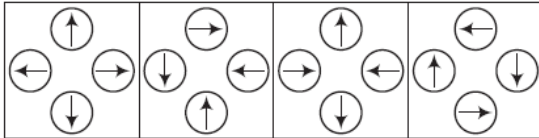
Get your own personalized Performance Tracker where you can check your Learning Footprints, Digital Notes, All-India Ranking, Timed Tests, Mind-blowing Quizzes, Prompt Videos, quick & accurate Mock Test Results, Self-Analytic Progress Reports and more.

 **SSB Crack**  
EXAMS

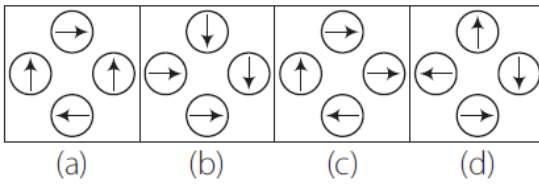
 [support@ssbcrackexams.com](mailto:support@ssbcrackexams.com)

 [www.ssbcrackexams.com](http://www.ssbcrackexams.com)

179. Problem Figures

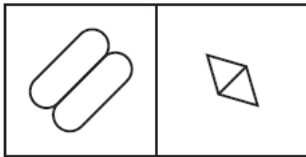


Answer Figures

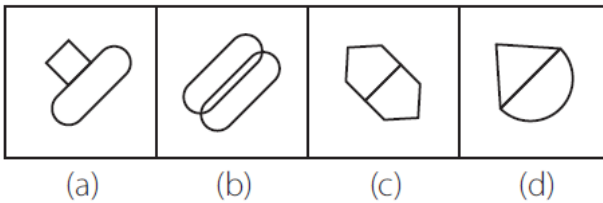


Ans. (d)

180. Problem Figures

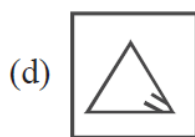
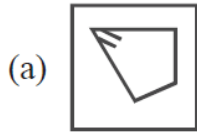
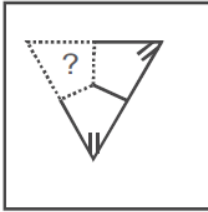


Answer Figures



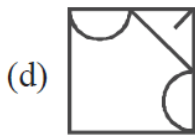
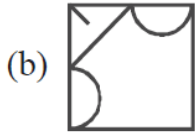
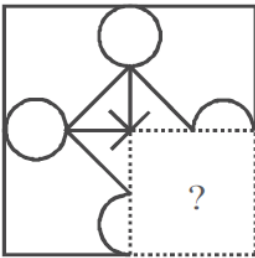
Ans. (c)

181.



Ans. (a)

182.



Ans. (b)

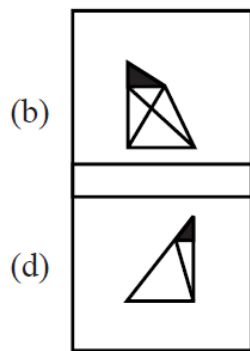
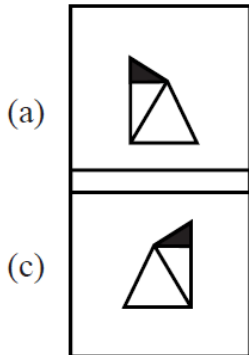
Crack  
EXAMS

183.

Question Figure

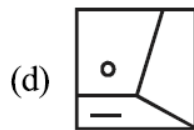
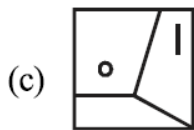
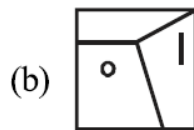
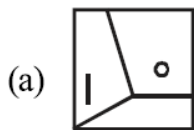
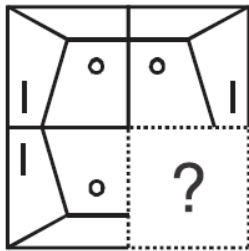


Answer Figures



Ans. (a)

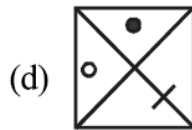
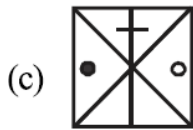
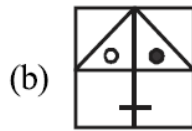
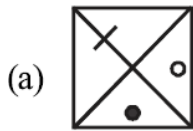
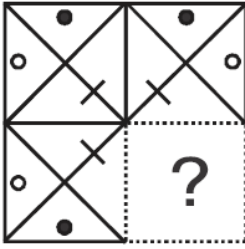
184.



Ans. (c)

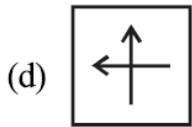
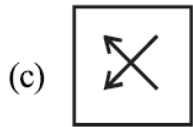
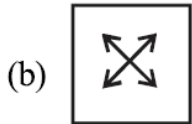
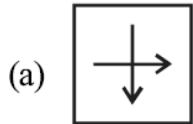
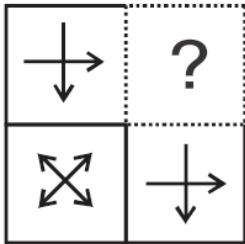
Crack  
EXAMS

185.



Ans. (a)

186.



Ans. (b)

Crack  
EXAMS

187.

Question Figure:



Answer Figure:



(a)

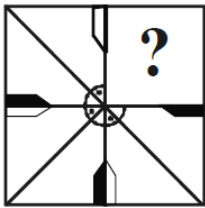
(b)

(c)

(d)

Ans. (d)

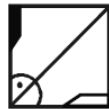
188.



(a)



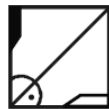
(b)



(c)

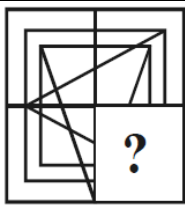


(d)



Ans. (d)

189.



X



(a)



(b)



(c)



(d)

Ans. (d)

190.



X



(a)

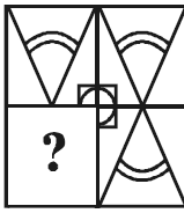
(b)

(c)

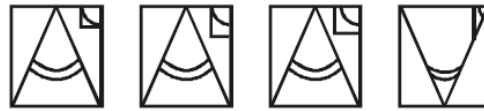
(d)

Ans. (c)

191.



X



(a)

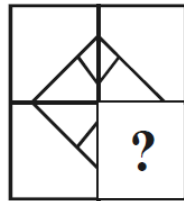
(b)

(c)

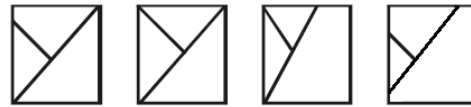
(d)

Ans. (a)

192.



X



(a)

(b)


(c)

(d)

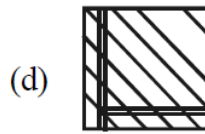
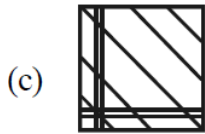
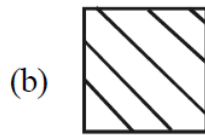
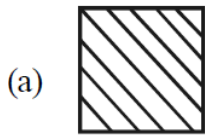
Ans. (d)

rack  
EXAMS

193.

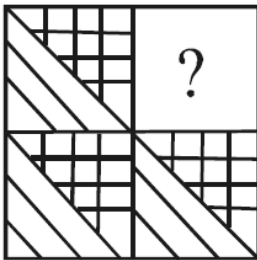


(X)

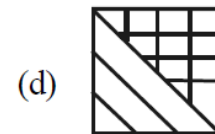
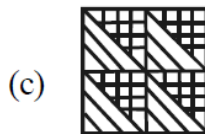
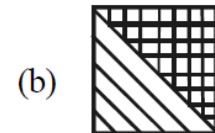
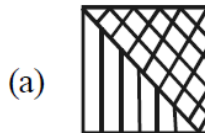


Ans. (b)

194.



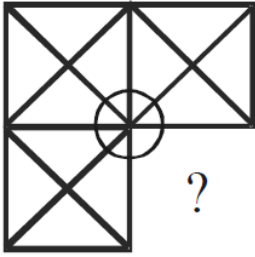
(X)



Ans. (d)



195.

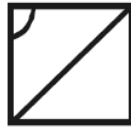


(X)

(a)



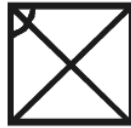
(b)



(c)

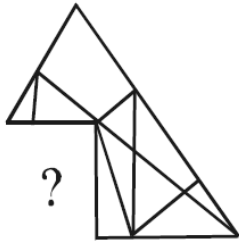


(d)



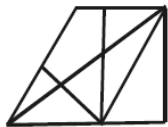
Ans. (d)

196.

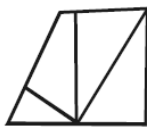


(X)

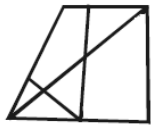
(a)



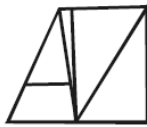
(b)



(c)

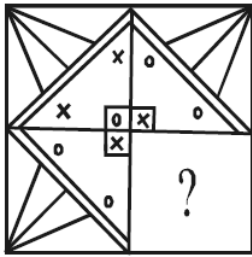


(d)

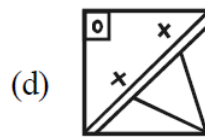
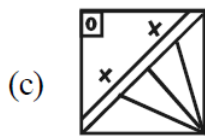
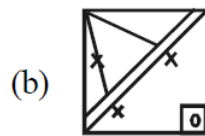
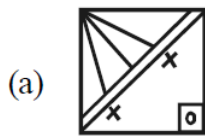


Ans. (a)

197.

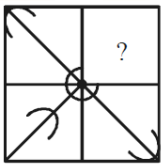


(X)

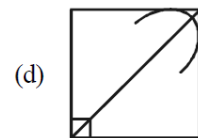
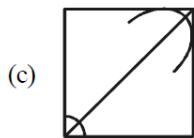
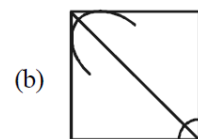
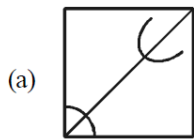


Ans. (c)

198.

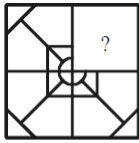


(X)

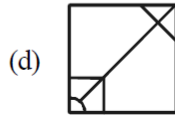
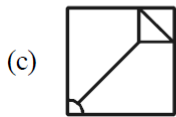
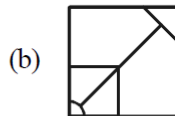
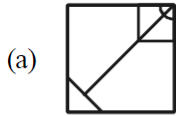


Ans. (a)

199.

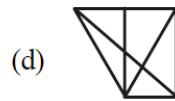
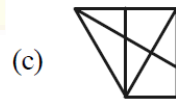
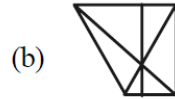
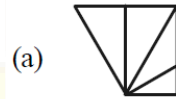
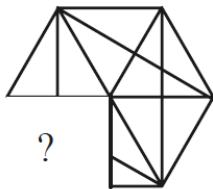


(X)



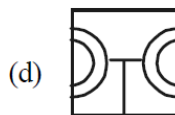
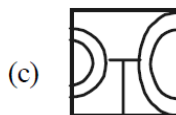
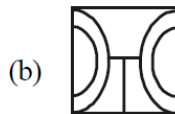
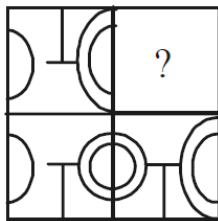
Ans. (b)

200.



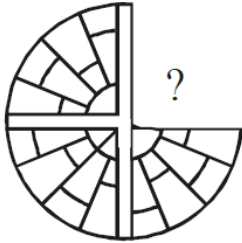
Ans. (c)

201.

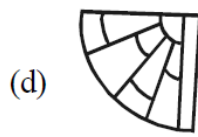
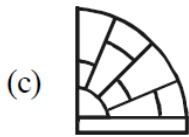
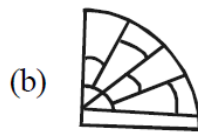


Ans. (a)

202. Question Figure :

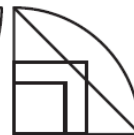
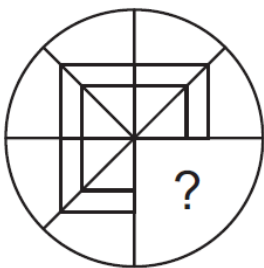


Answer Figures :



Ans. (b)

203.



(a)

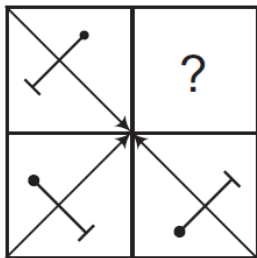
(b)

(c)

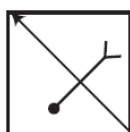
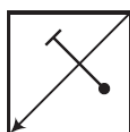
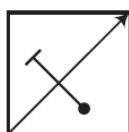
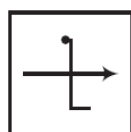
(d)

Ans. (c)

204.



(X)



(a)

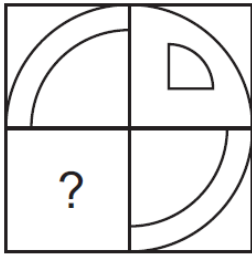
(b)

(c)

(d)

Ans. (c)

205.



(X)



(a)

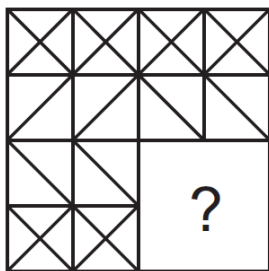
(b)

(c)

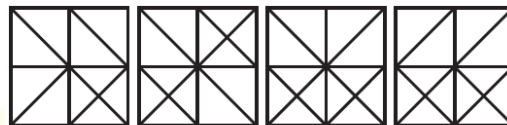
(d)

Ans. (a)

206.



(X)



(a)

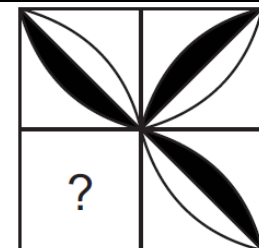
(b)

(c)

(d)

Ans. (d)

207.



(a)

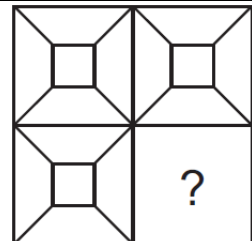
(b)

(c)

(d)

Ans. (b)

208.



(a)

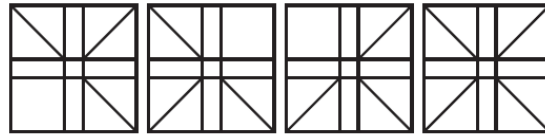
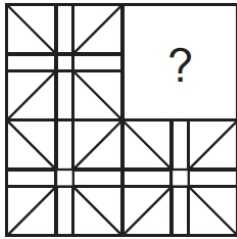
(b)

(c)

(d)

Ans. (b)


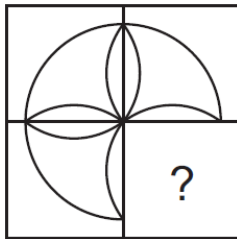
209.



(a) (b) (c) (d)

Ans. (d)

210.

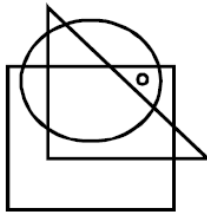


(a) (b) (c) (d)

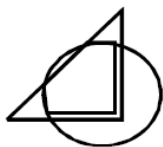
Ans. (a)

**DOT PROBLEMS**

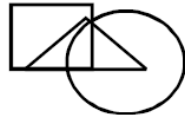
211.



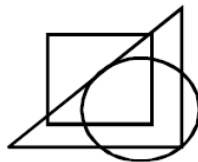
(X)



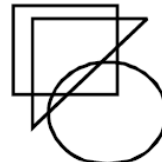
(a)



(b)



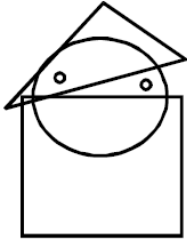
(c)



(d)

Ans. (d)

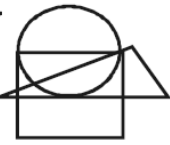
212.



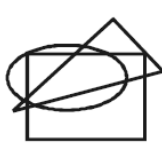
(X)



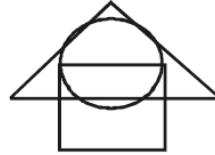
(a)



(b)



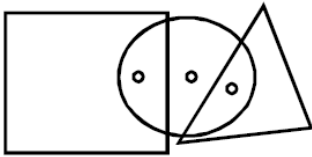
(c)



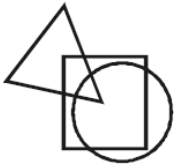
(d)

Ans. (c)

213.



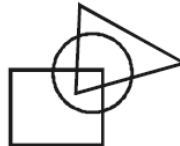
(X)



(a)



(b)



(c)

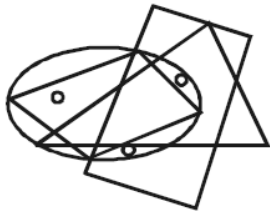


(d)

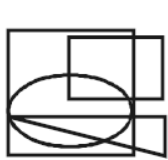
Ans. (c)

ack  
EXAMS

214.



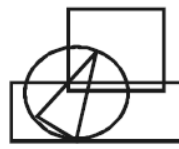
(X)



(a)



(b)



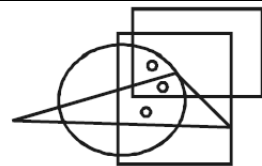
(c)



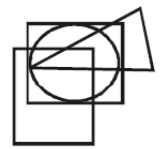
(d)

Ans. (c)

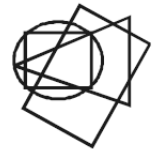
215.



(X)



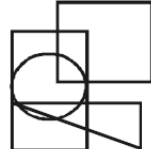
(a)



(b)



(c)



(d)

Ans. (b)

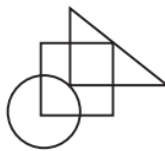
216.



(A)



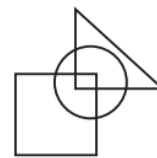
(a)



(b)



(c)

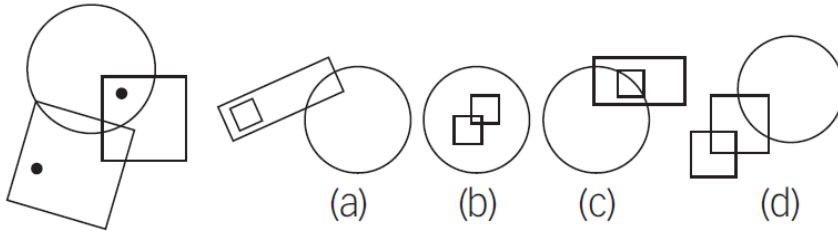


(d)

Ans. (b)

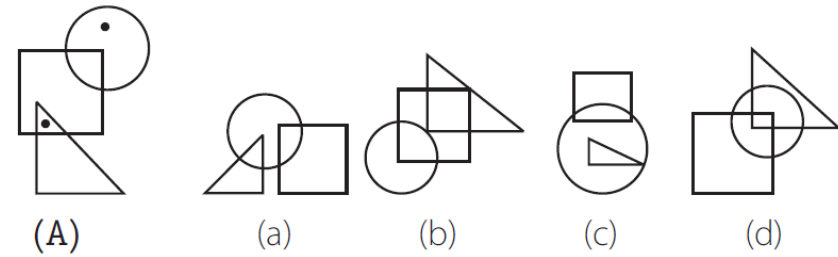


217.



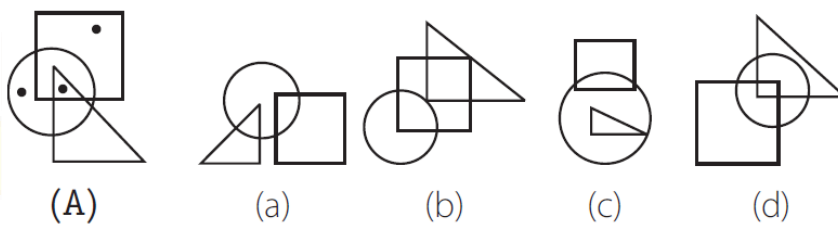
Ans. (d)

218.



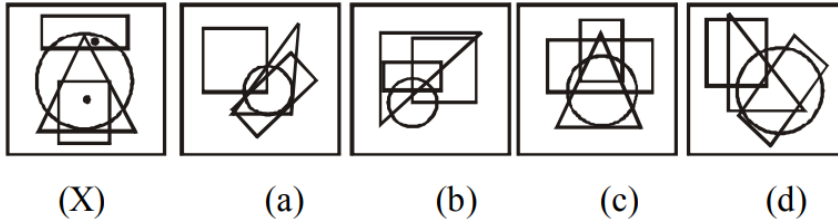
Ans. (b)

219.



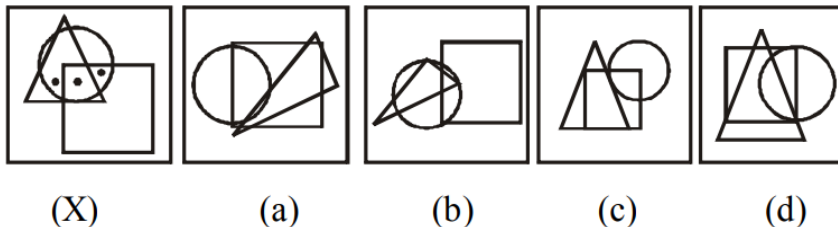
Ans. (d)

220.



Ans. (d)

221.







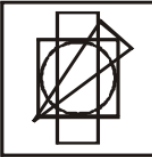
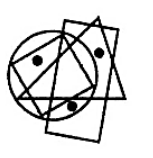
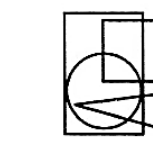
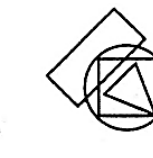
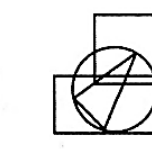
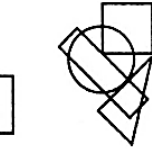
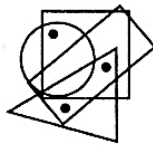
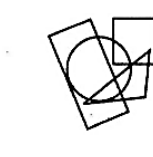
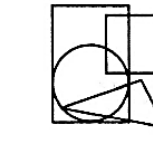
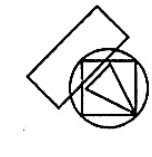
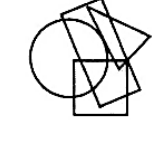
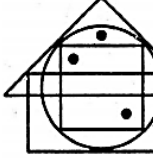
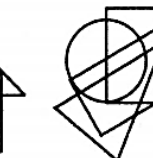
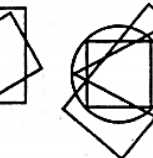
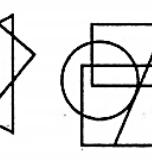
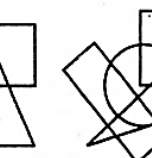





(X)

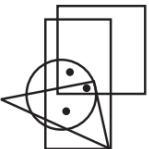






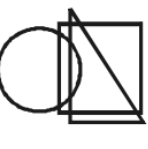







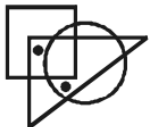









(a)

(b)

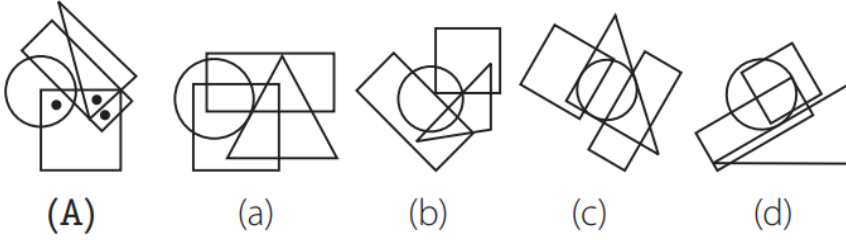
(c)

(d)

	<b>Ans. (b)</b>				
222.					
	(X)	(a)	(b)	(c)	(d)
	<b>Ans. (c)</b>				
223.					
	(X)	(a)	(b)	(c)	(d)
	<b>Ans. (d)</b>				
224.					
	(X)	(a)	(b)	(c)	(d)
	<b>Ans. (d)</b>				
225.					
	(X)	(a)	(b)	(c)	(d)
	<b>Ans. (b)</b>				
226.					
	(X)	(a)	(b)	(c)	(d)

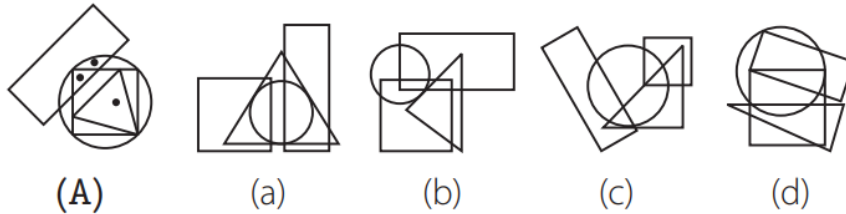
	<b>Ans. (b)</b>				
227.	 (x)	 (a)	 (b)	 (c)	 (d)
	<b>Ans. (b)</b>				
228.	 (X)	 (a)	 (b)	 (c)	 (d)
	<b>Ans. (c)</b>				
229.	 (X)	 (a)	 (b)	 (c)	 (d)
	<b>Ans. (c)</b>				
230.	 (X)	 (a)	 (b)	 (c)	 (d)
	<b>Ans. (c)</b>				
231.	 (X)	 (a)	 (b)	 (c)	 (d)
	<b>Ans. (a)</b>				

232.



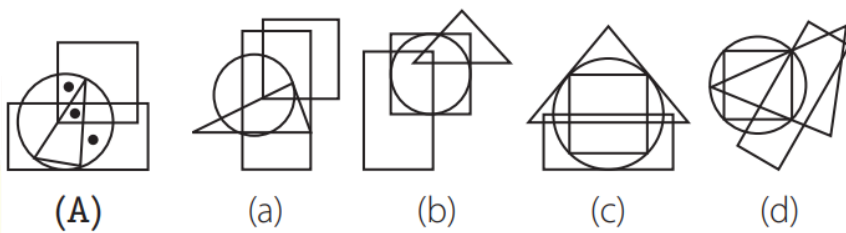
Ans. (a)

233.



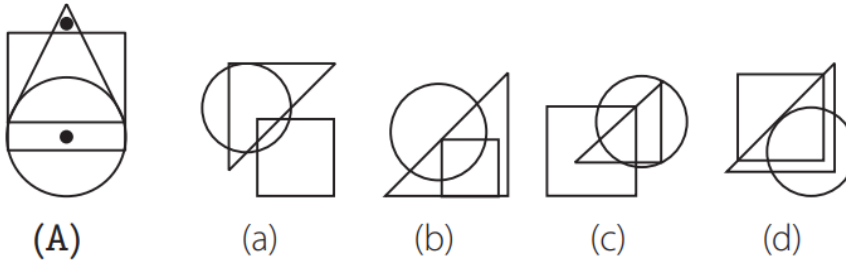
Ans. (d)

234.



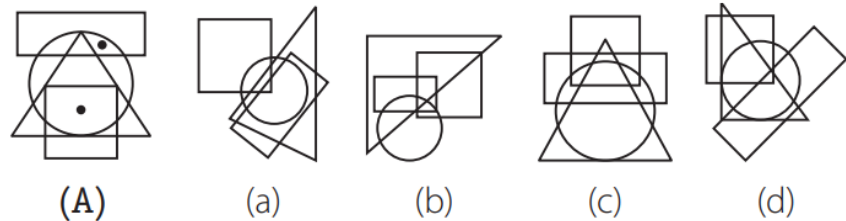
Ans. (d)

235.



Ans. (a)

236.

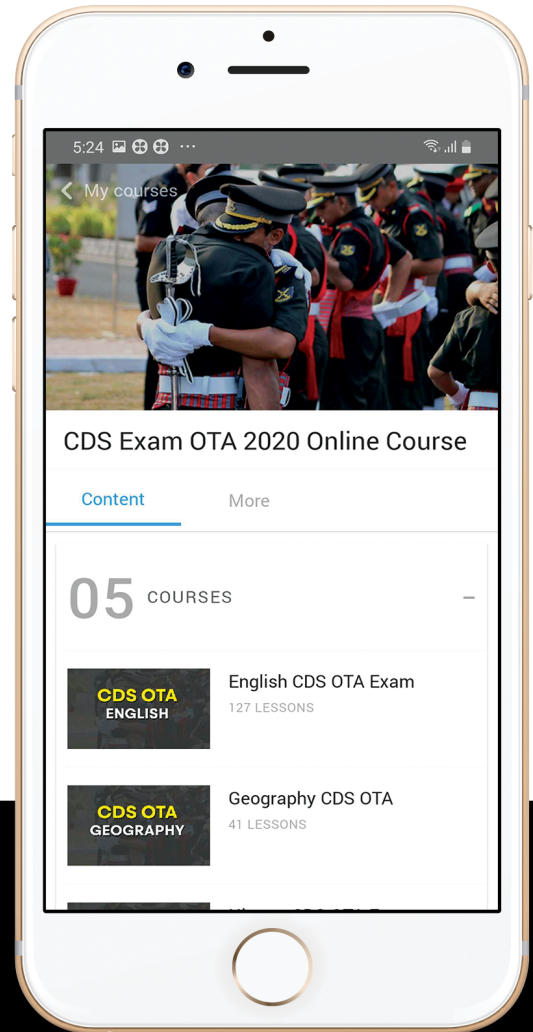




let's crack defence exams  
www.ssbcrackexams.com

# THE MOST POPULAR DEFENCE EXAM APP OF ALL TIME

Prepare for defence exams like NDA, CDS, AFCAT, INET, TA, GROUP X&Y, MNS, ACC and more.



## BEST FEATURES

SSB Crack Exams is the exclusive online platform for the candidates aspiring to make the Nation proud.



### DETAILED LECTURES

Start enjoying your learning experience by the rock-solid video lessons specially designed for your easy understanding & higher scores in the exam.



### PYQAs & TEST SERIES

Get ready for your D-Day with unlimited practice papers & previous years' questions made easy with our insightful video classes & extra notes prepared




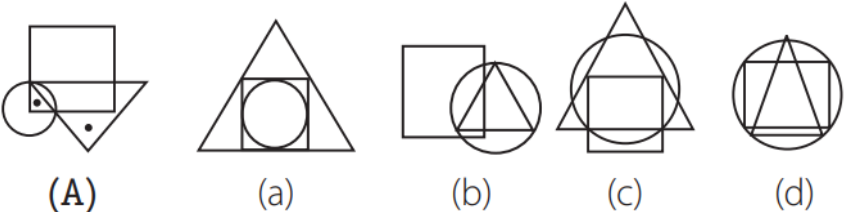
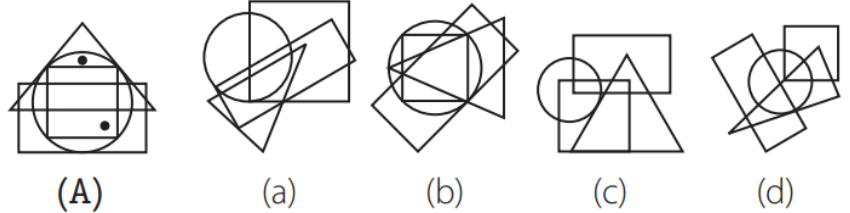
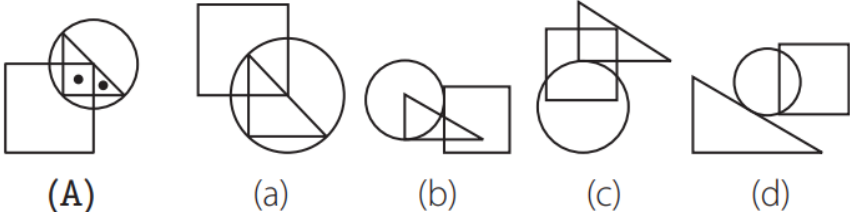
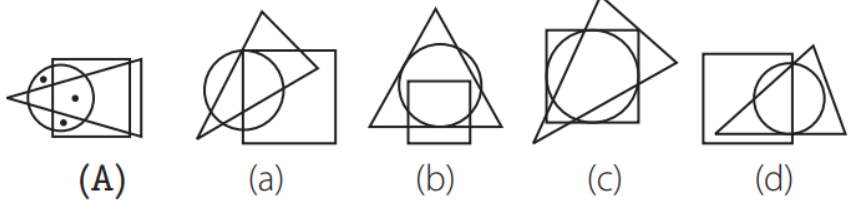
### SMART ANALYTICS

Get your own personalized Performance Tracker where you can check your Learning Footprints, Digital Notes, All-India Ranking, Timed Tests, Mind-blowing Quizzes, Prompt Videos, quick & accurate Mock Test Results, Self-Analytic Progress Reports and more.

 **SSB Crack**  
EXAMS

 [support@ssbcrackexams.com](mailto:support@ssbcrackexams.com)

 [www.ssbcrackexams.com](http://www.ssbcrackexams.com)

	<p><b>Ans. (d)</b></p>
<p><b>237.</b></p>	 <p>(A) (a) (b) (c) (d)</p> <p><b>Ans. (c)</b></p>
<p><b>238.</b></p>	 <p>(A) (a) (b) (c) (d)</p> <p><b>Ans. (b)</b></p>
<p><b>239.</b></p>	 <p>(A) (a) (b) (c) (d)</p> <p><b>Ans. (a)</b></p>
<p><b>240.</b></p>	 <p>(A) (a) (b) (c) (d)</p> <p><b>Ans. (a)</b></p>
<p><b>MISCELLANEOUS</b></p>	

<p><b>241.</b></p>	<p>Read all the conclusions and then decide which of the given conclusions logically follows from the given statements disregarding commonly known facts.</p> <p>(a) If only conclusion I follows. (b) If only conclusion II follows. (c) If either conclusion I or II follows. (d) If both conclusions I and II follow.</p> <p><b>Statements:</b> Some Noise are steel No steel is Blood Some steel is Free</p> <p><b>Conclusion:</b> I: Some noise are not Blood II: All Blood is noise</p> <p><b>Ans. (a)</b></p>
<p><b>242.</b></p>	<p><b>Statements:</b> All shirts are skirts. No skirt is top. All tops are kurta.</p> <p><b>Conclusions:</b> <b>I</b> All shirts are kurta <b>II</b> Some kurta are skirts.</p> <p><b>Give answer</b></p> <p>(a) If only conclusion I follows. (b) If only conclusion II follows. (c) If either conclusion I or II follows. (d) If neither conclusion I nor II follows.</p> <p><b>Ans. (d)</b></p>

<p><b>243.</b></p>	<p><b>Statements:</b></p> <p>All September are October.          No October is November.          No November is December.</p> <p><b>Conclusions:</b></p> <p><b>I</b> Some September are not Novembers  <b>II</b> No October is December.</p> <p><b>Give answer</b></p> <p>(a) If only conclusion I follows.          (b) If only conclusion II follows.          (c) If either conclusion I or II follows.          (d) If neither conclusion I nor II follows.</p> <p><b>Ans. (a)</b></p>
<p><b>244.</b></p>	<p><b>Statement:</b></p> <p>No right is a left.          All up are left.          Some down are up.</p> <p><b>Conclusions:</b></p> <p><b>I</b> No up is a right.  <b>II</b> At least some down are left.</p> <p>(a) Only conclusion I is true          (b) Neither conclusion I nor II is true          (c) Only conclusion II is true          (d) Both conclusions I and II are true</p> <p><b>Ans. (d)</b></p>



<p>245.</p>	<p><b>Statements:</b> Some cricketers are footballers All footballers are boxers. Some boxers are players.</p> <p><b>Conclusions:</b> I. At least some boxers are cricketers. II. No player is a cricketer.</p> <p>(a) Only conclusion I is true (b) Neither conclusion I nor II is true (c) Only conclusion II is true (d) Both conclusions I and II are true</p> <p><b>Ans. (a)</b></p>
<p>246.</p>	<p><b>Statements</b> Some symbols are figures. All symbols are graphics. No graphic is a picture.</p> <p><b>Conclusions</b> I. Some graphics are figures. II. No symbol is a picture.</p> <p>(a) Only conclusion I is true (b) Neither conclusion I nor II is true (c) Only conclusion II is true (d) Both conclusions I and II are true</p> <p><b>Ans. (d)</b></p>
<p>247.</p>	<p><b>Statements</b> Some mobiles are telephones. All telephones are pagers. No pager is a camera.</p> <p><b>Conclusions</b> I. Some mobiles are definitely pagers. II. No mobile is a camera.</p>

	<p>(a) Only conclusion I is true          (b) Neither conclusion I nor II is true          (c) Only conclusion II is true          (d) Both conclusions I and II are true</p> <p><b>Ans. (a)</b></p>
<p>248.</p>	<p><b>Statements</b> No note is a coin.          Some coins are metals.          All plastics are notes.</p> <p><b>Conclusions</b> I. No coin is plastic.          II. All plastic is metal.</p> <p>(a) Only conclusion I is true          (b) Neither conclusion I nor II is true          (c) Only conclusion II is true          (d) Both conclusions I and II are true</p> <p><b>Ans. (a)</b></p>
<p>249.</p>	<p><b>Statements</b> All forces are energies.          All energies are powers.          No power is heat.</p> <p><b>Conclusions</b> I. Some forces are definitely not powers.          II. No heat is force.</p> <p>(a) Only conclusion I is true          (b) Neither conclusion I nor II is true          (c) Only conclusion II is true          (d) Both conclusions I and II are true</p> <p><b>Ans. (c)</b></p>

<p>250.</p>	<p><b>Statements</b> Some books are pens. Some pens are pencils. Some pencils are buttons.</p> <p><b>Conclusions</b> I. Some buttons are pens. II. Some pencils are books.</p> <p>(a) Only conclusion I is true (b) Neither conclusion I nor II is true (c) Only conclusion II is true (d) Both conclusions I and II are true</p> <p><b>Ans. (b)</b></p>
<p>251.</p>	<p><b>Statements</b> Some locks are keys. All keys are metals. Some metals are cards.</p> <p><b>Conclusions</b> I. Some cards are keys. II. Some metals are locks.</p> <p>(a) Only conclusion I is true (b) Neither conclusion I nor II is true (c) Only conclusion II is true (d) Both conclusions I and II are true</p> <p><b>Ans. (c)</b></p>
<p>252.</p>	<p><b>Statements</b> All desks are benches. No bench is a chair. All chairs are roads.</p> <p><b>Conclusions</b> I. Some roads are chairs. II. No chair is a desk.</p>

	<p>(a) Only conclusion I is true          (b) Neither conclusion I nor II is true          (c) Only conclusion II is true          (d) Both conclusions I and II are true</p> <p><b>Ans. (d)</b></p>
<p>253.</p>	<p><b>Statements</b> All pens are jungles.          All needles are jungles.          All boys are jungles.</p> <p><b>Conclusions</b> I. Some needles are pens.          II. Some boys are pens.</p> <p>(a) Only conclusion I is true          (b) Neither conclusion I nor II is true          (c) Only conclusion II is true          (d) Both conclusions I and II are true</p> <p><b>Ans. (b)</b></p>
<p>254.</p>	<p><b>Statements</b> No table is wood.          Some woods are chairs.          All chairs are stones.</p> <p><b>Conclusions</b> I. No stone is table.          II. Some stones are woods.</p> <p>(a) Only conclusion I is true          (b) Neither conclusion I nor II is true          (c) Only conclusion II is true          (d) Both conclusions I and II are true</p> <p><b>Ans. (c)</b></p>

<p>255.</p>	<p><b>Statements</b> All stones are tents. Some tents are stones. All stones are walls.</p> <p><b>Conclusions</b> I. Some walls are stones. II. Some walls are tents.</p> <p>(a) Only conclusion I is true (b) Neither conclusion I nor II is true (c) Only conclusion II is true (d) Both conclusions I and II are true</p> <p><b>Ans. (d)</b></p>
<p>256.</p>	<p>I. Mara runs faster than Gail. II. Lily runs faster than Mara. III. Gail runs faster than Lily</p> <p>If the two statements are true, the third statement is</p> <p>(a) True (b) False (c) Uncertain (d) None of these</p> <p><b>Ans. (b)</b></p>
<p>257.</p>	<p>If Arun's birthday is on May 25 which is Monday and his sister's birthday is on July 13. Which day of the week is his sister's birthday?</p> <p>(a) Monday (b) Wednesday (c) Thursday (d) Friday</p> <p><b>Ans. (a)</b></p>

<p><b>258.</b></p>	<p>Roshan is taller than Hardik who is shorter than Susheel. Niza is taller than Harry but shorter than Hardik. Susheel is shorter than Roshan. Who is the tallest ?</p> <p>(a) Roshan                                (b) Susheel (c) Hardik                                (d) Harry</p> <p><b>Ans. (a)</b></p>
<p><b>259.</b></p>	<p>Priyank ranks 6<sup>th</sup> from the bottom and 28<sup>th</sup> from the top in a class. How many students are there in the class?</p> <p>(a) 31                                        (b) 32 (c) 33                                        (d) 34</p> <p><b>Ans. (c)</b></p>
<p><b>260.</b></p>	<p>A's birthday is on Friday 30<sup>th</sup> June. Find the day of the week on which B's birthday in the same year if B was born 15<sup>th</sup> November ?</p> <p>(a) Tuesday                                (b) Wednesday (c) Monday                                (d) Sunday</p> <p><b>Ans. (b)</b></p>
<p><b>261.</b></p>	<p>In a row of 64 girls, Anu is 17<sup>th</sup> from the left. Jagrati is 11<sup>th</sup> to the right of Anu. What is Jagrati's position from the right end of the row?</p> <p>(a) 36<sup>th</sup>                                        (b) 37<sup>th</sup> (c) 38<sup>th</sup>                                        (d) 40<sup>th</sup></p> <p><b>Ans. (b)</b></p>

<p><b>262.</b></p>	<p>Sita is elder than Swapna. Lavanya is elder than Swapna but younger than Sita. Suvarna is younger than both Hari and Swapna, Swapna is elder than Hari. Who is the youngest?</p> <p>(a) Sita (b) Lavanya (c) Suvarna (d) Hari</p> <p><b>Ans. (c)</b></p>
<p><b>263.</b></p>	<p>In a row of trees, a tree is 7th from left end and 14th from the right end. How many trees are there in the row?</p> <p>(a) 18 (b) 19 (c) 20 (d) 21</p> <p><b>Ans. (c)</b></p>
<p><b>264.</b></p>	<p>Suppose today is Friday, what day of the week will it <u>be</u> 65 days from now?</p> <p>a) Saturday b) Sunday c) Friday d) Thursday</p> <p><b>Ans. (b)</b></p>
<p><b>265.</b></p>	<p>Keshav is taller than Vijay but shorter than Nitin, Nitin is taller than Kishan but shorter than Amar. If Vijay is taller than Kishan, then who is the shortest among them?</p> <p>a) Keshav b) Vijay c) Nitin d) Kishan</p>

	<b>Ans. (d)</b>
<b>266.</b>	<p>Sangeeta remembers that her father's birthday was certainly after 8th but before 13th of December. Her sister Natasha remembers that their father's birthday was definitely after 9th but before 14th of December. On which date of December was their father's birthday?</p> <p>a) 10th b) 11th c) 12th d) Cannot be determined</p> <p><b>Ans. (d)</b></p>
<b>267.</b>	<p>Sohan ranks seventh from the top and twenty-sixth from the bottom in a class. How many students are there in the class?</p> <p>a) 31 b) 32 c) 33 d) 34</p> <p><b>Ans. (b)</b></p>
<b>268.</b>	<p>If the 14th September of a year is a Tuesday, then which day of the week will the 17th October of the same year be?</p> <p>a) Thursday b) Saturday c) Sunday d) Monday</p> <p><b>Ans. (c)</b></p>



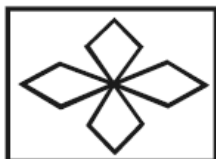
269. In a row of girls, Veena is 12th from the start and 19th from the end. In another row of girls, Sunita is 14th from the start and 20th from the end. How many girls are there in both the rows together?  
 (a) 72  
 (b) 65  
 (c) 63  
 (d) 61

Ans. (c)

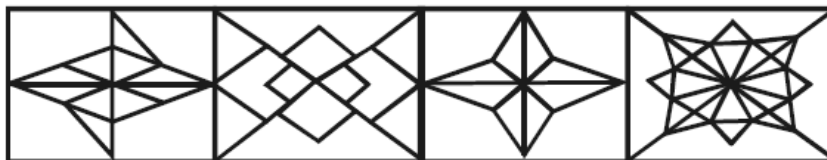
270. G is fatter than H but not as fat as M. Q is also not as fat as M. Who is the fattest person in the group?  
 (a) Q  
 (b) H  
 (c) G  
 (d) M

Ans. (d)

271.



(X)



(a)

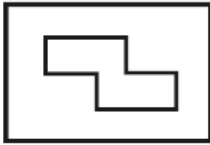
(b)

(c)

(d)

Ans. (d)

272.



(X)



(a)

(b)

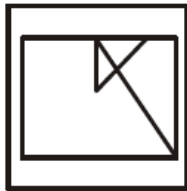
(c)

(d)

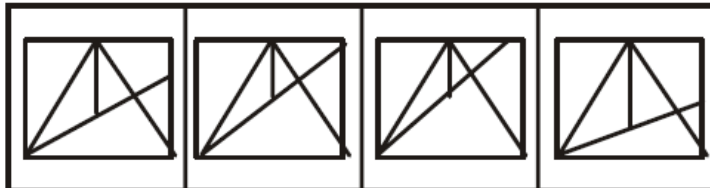
Ans. (c)

273.

Question Figure:



Answer Figures:



(a)

(b)

(c)


(d)

Ans. (c)


274. Question Figure



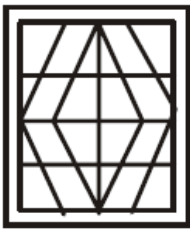
Answer Figures



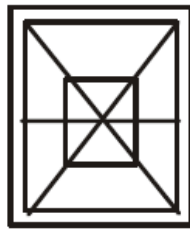
(a)



(b)



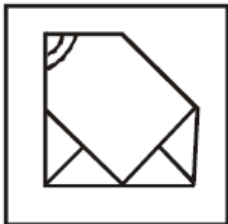
(c)



(d)

Ans. (c)

275. Question Figure



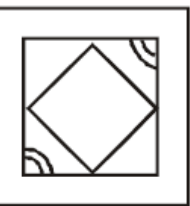
Answer Figures



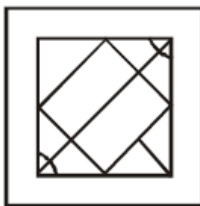
(a)



(b)



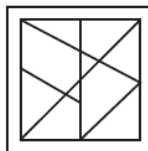
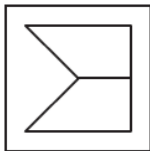
(c)



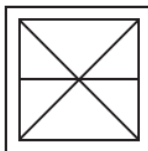
(d)

Ans. (b)

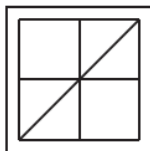
276.



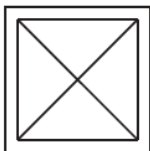
(a)



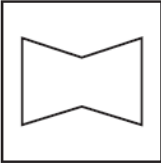
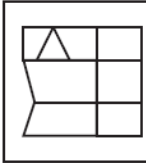
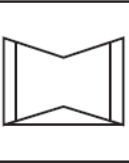


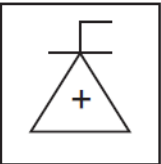
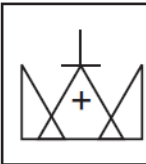
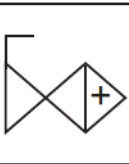
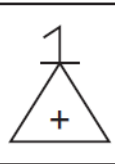
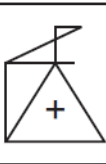

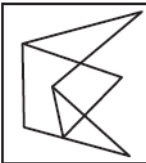



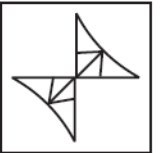
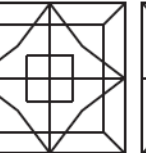
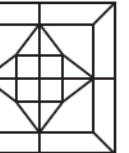


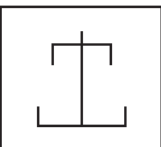
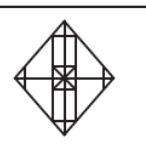



(b)

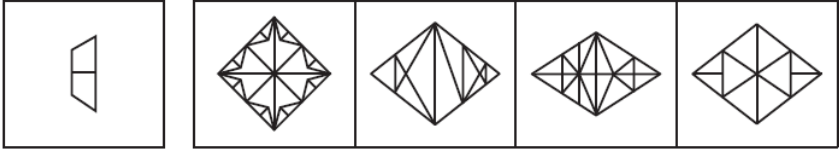
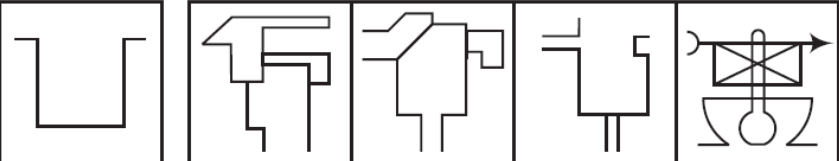
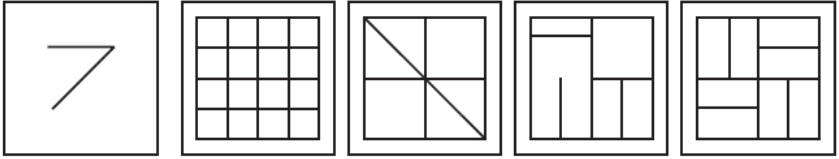
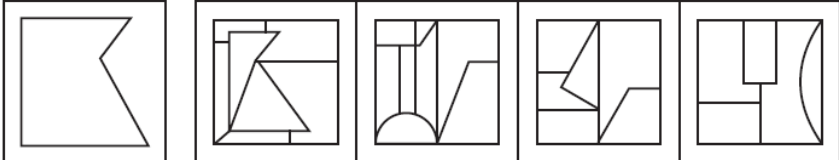


(c)



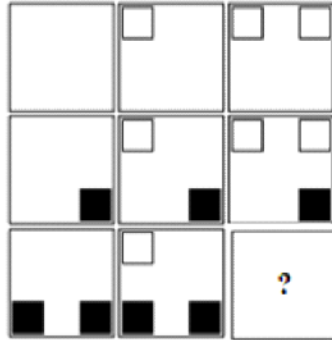
(d)

	<b>Ans. (b)</b>				
277.					
	(a)	(b)	(c)	(d)	
	<b>Ans. (b)</b>				
278.					
	(a)	(b)	(c)	(d)	
	<b>Ans. (d)</b>				
279.					
	(a)	(b)	(c)	(d)	
	<b>Ans. (d)</b>				
280.					
	(a)	(b)	(c)	(d)	
	<b>Ans. (d)</b>				
281.					
	(a)	(b)	(c)	(d)	
	<b>Ans. (a)</b>				

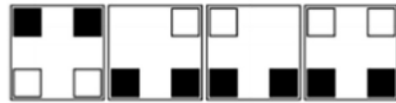
<p>282.</p>	 <p>(a) (b) (c) (d)</p> <p><b>Ans. (c)</b></p>
<p>283.</p>	 <p>(a) (b) (c) (d)</p> <p><b>Ans. (d)</b></p>
<p>284.</p>	 <p>(a) (b) (c) (d)</p> <p><b>Ans. (b)</b></p>
<p>285.</p>	 <p>(a) (b) (c) (d)</p> <p><b>Ans. (a)</b></p>
<p>286.</p>	<p>Fill the blank in the middle of the series or end of the series.</p> <p>DEF, DEF<sub>2</sub>, DE<sub>2</sub>F<sub>2</sub>, _____, D<sub>2</sub>E<sub>2</sub>F<sub>3</sub></p> <p>(a) DEF<sub>3</sub> (b) D<sub>3</sub>EF<sub>3</sub></p> <p>(c) D<sub>2</sub>E<sub>3</sub>F (d) D<sub>2</sub>E<sub>2</sub>F<sub>2</sub></p> <p><b>Ans. (d)</b></p>

<p>287.</p>	<p>14, 19, 29, 49, 89, ?                  (a) 139 (b) 149                  (c) 159 (d) 169  <b>Ans. (d)</b></p>
<p>288.</p>	<p>5, 21, 69, 213, 645, <u>?</u>.                  (a) 1670 (b) 1941                  (c) 720 (d) 1320  <b>Ans. (b)</b></p>
<p>289.</p>	<p>Which one set of letters when sequentially placed at the gaps in the given letter series shall complete it ?                  rtx _ sx _ z _ txy _ _ yz                  (a) yy r x s (b) yy s x r                  (c) yy r s x (d) yy x r s  <b>Ans. (c)</b></p>
<p>290.</p>	<p>198, 202, 211, 227, ?                  (a) 236 (b) 252                  (c) 275 (d) 245  <b>Ans. (b)</b></p>

291. Consider the following figure:



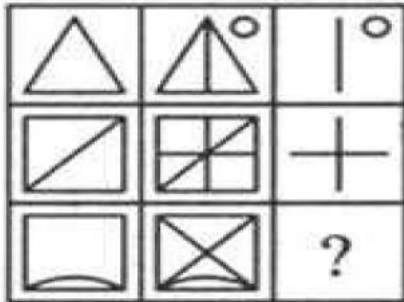
Which of the following alternatives should replace the question mark ?



(a) (b) (c) (d)

Ans. (d)

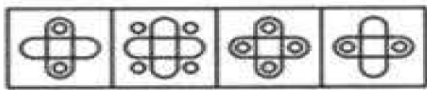
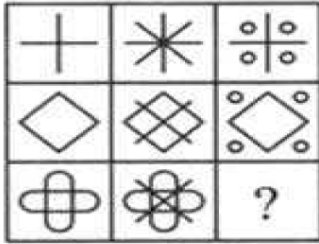
292.



(a) (b) (c) (d)

Ans. (b)

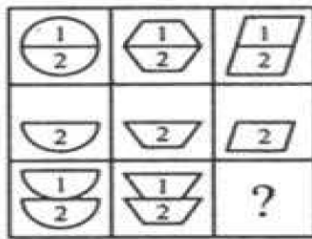
293. Select a suitable figure from the four alternatives that would complete the figure matrix.



(a) (b) (c) (d)

Ans. (b)

294. Select a suitable figure from the four alternatives that would complete the figure matrix.

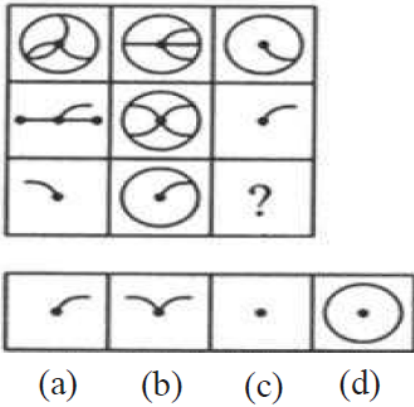


(a) (b) (c) (d)

Ans. (c)



295. Select a suitable figure from the four alternatives that would complete the figure matrix.



Ans. (c)

296. Nithya is Sam's Sister. Mogan is Sam's Father. Selvan is Rajan's Son. Rajan is Mogan's Brother. How is Nithya related to Selvan?

- (a) Daughter (b) Sister  
(c) Cousin (d) Wife

Ans. (c)

297. Pointing to a photograph, a man said, "I have no brother or sister but that man's father is my father's son." Whose photograph was it ?

- (a) His own (b) His son  
(c) His father (d) His grandfather

Ans. (b)

298. Pointing to a man in a photograph, a man said to a woman, "His mother is the only daughter of your father". How is the woman related to the man in the photograph?

- (a) Sister (b) Mother (c) Wife (d) Daughter

Ans. (b)

<b>299.</b>	Rajesh is the brother of Ankit. Shano is the sister of Shubham. Ankit is the son of Shano. How is Rajesh related to Shano? (a) Father (b) Brother (c) Son (d) Nephew  <b>Ans. (c)</b>
<b>300.</b>	C is the mother of A and B. If D is the husband of B, then what is C to D? (a) Mother (b) Aunt (c) Mother-in-law (d) Sister  <b>Ans. (c)</b>

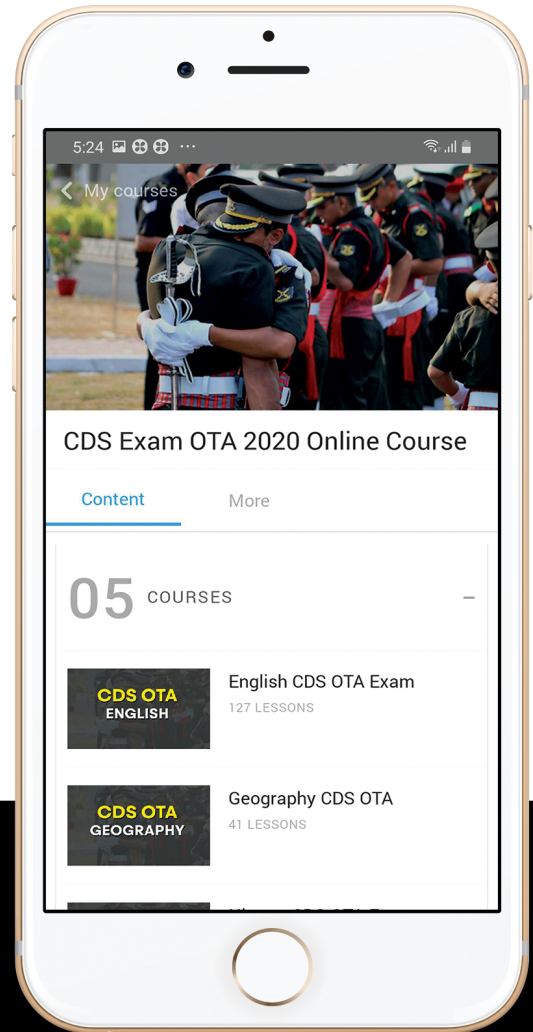




let's crack defence exams  
www.ssbcrackexams.com

# THE MOST POPULAR DEFENCE EXAM APP OF ALL TIME

Prepare for defence exams like NDA, CDS, AFCAT, INET, TA, GROUP X&Y, MNS, ACC and more.



## BEST FEATURES

SSB Crack Exams is the exclusive online platform for the candidates aspiring to make the Nation proud.



### DETAILED LECTURES

Start enjoying your learning experience by the rock-solid video lessons specially designed for your easy understanding & higher scores in the exam.



### PYQAs & TEST SERIES

Get ready for your D-Day with unlimited practice papers & previous years' questions made easy with our insightful video classes & extra notes prepared




### SMART ANALYTICS

Get your own personalized Performance Tracker where you can check your Learning Footprints, Digital Notes, All-India Ranking, Timed Tests, Mind-blowing Quizzes, Prompt Videos, quick & accurate Mock Test Results, Self-Analytic Progress Reports and more.

 **SSB Crack**  
EXAMS

 [support@ssbcrackexams.com](mailto:support@ssbcrackexams.com)

 [www.ssbcrackexams.com](http://www.ssbcrackexams.com)