

Courses

ACC (1) AFCAT (1) AIRMEN (2) CAPF (1) CDS EXAM (2) INET OFFICER (1) MNS (1) MOCK TEST (3) NDA EXAM (1) PC(SL) (1) SCO (1) SSB INTERVIEW (1) TERRITORIAL ARMY (1)

<p>HIGHEST RATED</p> <p>617 PEOPLE ONLINE NOW</p> <p>CDS Exam Online Course 2021 – 2022</p> <p>★★★★★ 5 (80)</p> <p>₹ 4,999.00</p>	<p>BEST SELLER</p> <p>997 PEOPLE ONLINE NOW</p> <p>CDS OTA Exam Online Course 2021 – 2022</p> <p>★★★★★ 5 (77)</p> <p>₹ 4,499.00</p>	<p>BEST SELLER</p> <p>206 PEOPLE ONLINE NOW</p> <p>AFCAT Exam Online Course 2022</p> <p>★★★★★ 5 (64)</p> <p>₹ 4,999.00</p>	<p>HIGHEST RATED</p> <p>561 PEOPLE ONLINE NOW</p> <p>NDA Exam Online Course 2021 – 2022</p> <p>★★★★★ 5 (72)</p> <p>₹ 4,999.00</p>	<p>HOT & NEW</p> <p>740 PEOPLE ONLINE NOW</p> <p>Territorial Army Exam Online Course 2021 – 2022</p> <p>★★★★★ 5 (53)</p> <p>₹ 4,999.00</p>	<p>HOT & NEW</p> <p>995 PEOPLE ONLINE NOW</p> <p>ACC Exam Online Course Army Cadet College 2021 – 2022</p> <p>★★★★★ 5 (53)</p> <p>₹ 6,999.00</p>
<p>HOT & NEW</p> <p>90 PEOPLE ONLINE NOW</p> <p>OIR Test and PPDT Online Course – Officers Intelligence Rating Test</p> <p>★★★★★ 5 (50)</p> <p>₹ 2,999.00</p>	<p>BEST SELLER</p> <p>98 PEOPLE ONLINE NOW</p> <p>MNS Military Nursing Service Exam Online Course 2022</p> <p>★★★★★ 5 (44)</p> <p>₹ 4,999.00</p>	<p>HOT & NEW</p> <p>37 PEOPLE ONLINE NOW</p> <p>AFCAT Exam Online Mock Test Series</p> <p>★★★★★ 5 (65)</p> <p>₹ 299.00</p>	<p>BEST SELLER</p> <p>36 PEOPLE ONLINE NOW</p> <p>CDS Exam Online Mock Test Series</p> <p>★★★★★ 5 (79)</p> <p>₹ 299.00</p>	<p>BEST SELLER</p> <p>18 PEOPLE ONLINE NOW</p> <p>NDA Exam Online Mock Test Series</p> <p>★★★★★ 5 (72)</p> <p>₹ 299.00</p>	<p>HOT & NEW</p> <p>37 PEOPLE ONLINE NOW</p> <p>UPSC CAPF Assistant Commandant Online Course 2022</p> <p>★★★★★ 5 (46)</p> <p>₹ 4,999.00</p>





AFCAT 2 2022



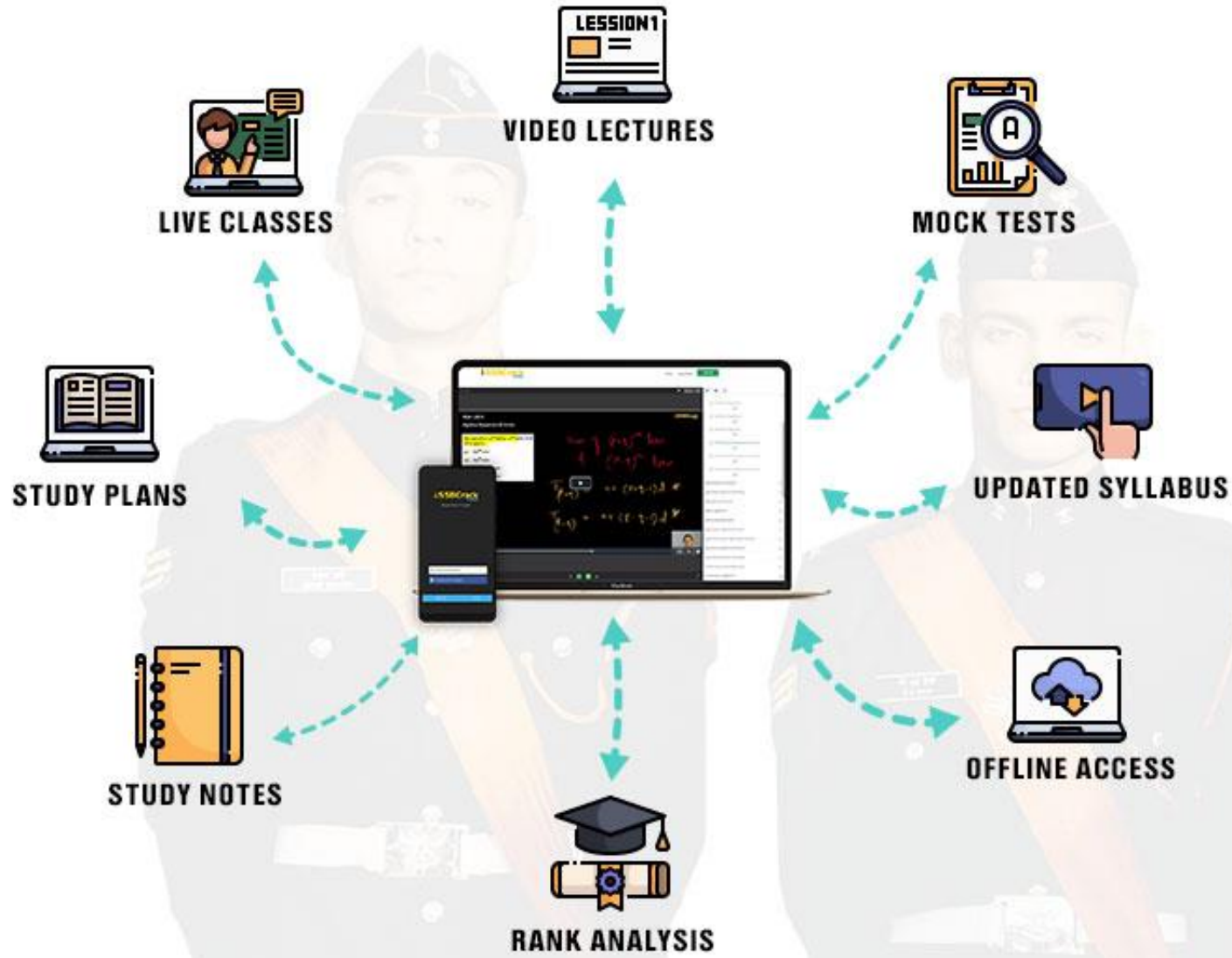
MEGA MARATHON

10 HRS

COMPLETE REVISION **LIVE**  **CLASS**

NUMERICAL ABILITY
GENERAL KNOWLEDGE

ENGLISH
REASONING



Choose from our Courses



SSB INTERVIEW
ONLINE COURSE

USE CODE: "WARRIOR10"
FOR 10% OFF ON SSB COURSE

SSB Interview Online Course

17 courses ₹4999 **₹3999**



USE CODE: "WARRIOR10"
FOR 10% OFF ON NDA COURSE

NDA Exam Online Course
2022

23 courses ₹4999 **₹3999**



USE CODE: "WARRIOR10"
FOR 10% OFF ON CDS COURSE

CDS Exam Online Course
2022

39 courses ₹4999 **₹3999**



USE CODE: "WARRIOR10"
FOR 10% OFF ON AFCAT COURSE

AFCAT Exam Online Course
2022

23 courses ₹4999 **₹3999**



USE CODE: "WARRIOR10"
FOR 10% OFF ON OTA COURSE

CDS OTA Exam Online Course
2022

33 courses ₹4499 **₹3499**



USE CODE: "WARRIOR10"
FOR 10% OFF ON TA COURSE

Territorial Army Exam
Online Course 2022

45 courses ₹4999 **₹3999**



USE CODE: "WARRIOR10"
FOR 10% OFF ON MNS COURSE

MNS Exam Online Course
2022

21 courses ₹4999 **₹3999**



USE CODE: "WARRIOR10"
FOR 10% OFF ON ACC COURSE

ACC Exam Online Course
2022

24 courses ₹5999 **₹4999**

[View All](#)

Bundles 16[View All](#)

SSB Interview Online Course

17 Courses

₹3,999 ₹4,999 20% OFF



NDA Exam Online Course 2022

23 Courses

₹3,999 ₹4,999 20% OFF



CDS Exam Online Course 2022

39 Courses

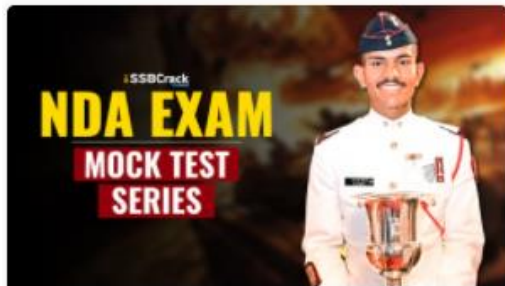
₹3,999 ₹4,999 20% OFF



AFCAT Exam Online Course 2022

23 Courses

₹3,999 ₹4,999 20% OFF

Test Series 07[View All](#)

NDA 2022 Mock Test Series

40 Tests

₹499 ₹999 50% OFF



CDS Exam 2022 Mock Test Series

30 Tests

₹499 ₹999 50% OFF



AFCAT 2022 Mock Test Series

20 Tests

₹499 ₹999 50% OFF

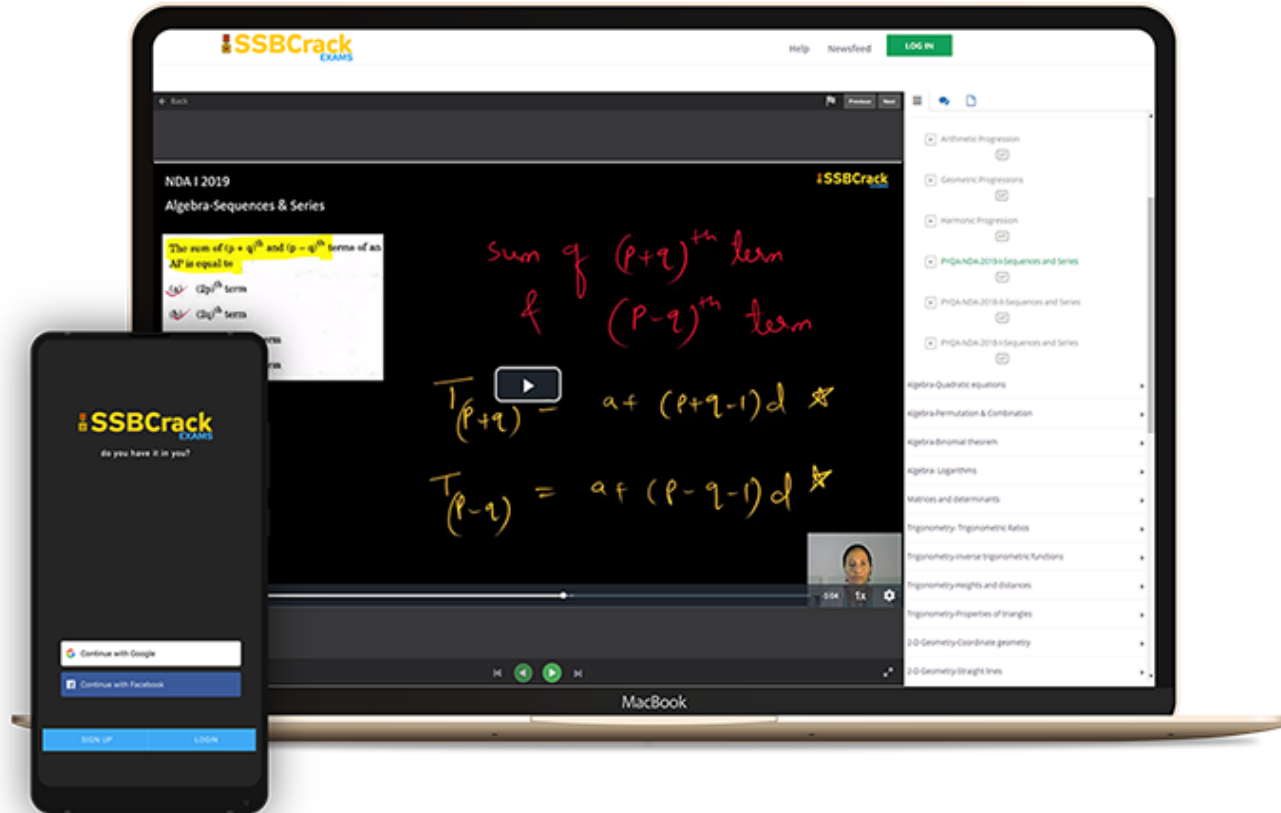


CDS Exam OTA 2022 Mock Test Series

20 Tests

₹499 ₹999 50% OFF

India's Most Popular Portal for Defence Exam Preparation



www.ssbcrackexams.com

CODE: WARRIOR10

get an extra **10%** off on all courses



AFCAT 2 2022

LIVE CLASS

TIME TABLE

DATE	TIME	SUBJECT
17 AUG 2022	10 AM TO 1 PM	General Awareness Part 1
17 AUG 2022	2 PM TO 5 PM	English Part 1
17 AUG 2022	6 PM TO 9 PM	Static GK Part 1
18 AUG 2022	10 AM TO 1 PM	General Awareness Part 2
18 AUG 2022	2 PM TO 5 PM	English Part 2
18 AUG 2022	6 PM TO 9 PM	Static GK Part 2
19 AUG 2022	10 AM TO 1 PM	Current Affairs
19 AUG 2022	2 PM TO 5 PM	English Part 3
19 AUG 2022	6 PM TO 9 PM	Defence Current Affairs
20 AUG 2022	10 AM TO 1 PM	Numerical Ability Part 1
20 AUG 2022	2 PM TO 5 PM	Reasoning Part 1
20 AUG 2022	6 PM TO 9 PM	General Sciences
22 AUG 2022	10 AM TO 1 PM	Numerical Ability Part 2
22 AUG 2022	2 PM TO 5 PM	Reasoning Part 2
23 AUG 2022	10 AM TO 1 PM	Numerical Ability Part 3
23 AUG 2022	2 PM TO 5 PM	Reasoning Part 3



Q) Select the word pair in which the two words are related to each other in the same way as the two words in the following word pair.


Butterflies : Lepidopterist

(a) Chromosome : Botanist

(b) Post card : Deltilogist

(c) Ornaments : Jeweller

(d) Map : Cartographer



Q) Select the word pair in which the two words are related to each other in the same way as the two words in the following word pair.

Butterflies : Lepidopterist

(a) Chromosome : Botanist

(b) Post card : Deltilogist

(c) Ornaments : Jeweller

(d) Map : Cartographer

Ans: (b)

Q) Select the related letter pair from the given alternatives.


ZX : AC :: VT : ?

(a) AB

(b) AE

(c) EG

(d) DF



Q) Select the related letter pair from the given alternatives.

ZX : AC :: VT : ?

(a) AB

(b) AE

(c) EG

(d) DF

Ans: (c)

Q) Select the related word/letter/number from the given alternatives.


64 : 8 :: 289 : ?

(a) 17

(b) 27

(c) 26

(d) 19



Q) Select the related word/letter/number from the given alternatives.

64 : 8 :: 289 : ?

(a) 17

(b) 27

(c) 26

(d) 19

Ans: (a)


Q) Optimist : Cheerful :: Pessimist : ?

(a) Gloomy

(b) Mean

(c) Petty

(d) Helpful



Q) Optimist : Cheerful :: Pessimist : ?

(a) Gloomy

(b) Mean


(c) Petty

(d) Helpful

Ans: (a)

Q) Red Blood Cells : Erythrocytes :: White Blood Cells : ?

- (a) Thrombocytes
- (b) Lymphocytes
- (c) Monocytes
- (d) Leucocytes




- Q) Red Blood Cells : Erythrocytes :: White Blood Cells : ?
- (a) Thrombocytes
 - (b) Lymphocytes
 - (c) Monocytes
 - (d) Leucocytes

Ans: (d)

Q) Eye : Ophthalmologist :: Music : ?

- (a) Player
- (c) Pianist

- (b) Conductor
- (d) Composer




Q) Eye : Ophthalmologist :: Music : ?

- | | |
|-------------|---------------|
| (a) Player | (b) Conductor |
| (c) Pianist | (d) Composer |

Ans: (d)

- Q) MUSCLE : SUMLEC :: OUT-PUT : _____
- (a) TOUTUP (b) UTOPUT
(c) PUTOUT (d) TUOUTP



- Q) MUSCLE : SUMLEC :: OUT-PUT : _____
- (a) TOUTUP (b) UTOPUT
(c) PUTOUT (d) TUOUTP

Ans: (d)


Q) Cricket : Bat :: Hockey : ?

(a) Field

(b) Stick

(c) Player

(d) Ball




Q) Cricket : Bat :: Hockey : ?

- | | |
|------------|-----------|
| (a) Field | (b) Stick |
| (c) Player | (d) Ball |

Ans: (b)

Q) 2, 4, 2, : 4, 16, 4 :: 1, 1, 1 : ?

- (a) 2, 4, 2
- (b) 1, 1, 1
- (c) 2, 2, 2
- (d) 2, 13, 2




Q) 2, 4, 2, : 4, 16, 4 :: 1, 1, 1 : ?

- (a) 2, 4, 2
- (b) 1, 1, 1
- (c) 2, 2, 2
- (d) 2, 13, 2

Ans: (b)

- Q) (a) Europe (b) Africa
(c) Asia (d) Canada



- Q) (a) Europe (b) Africa
 (c) Asia (d) Canada


Ans: (d)

Q) (a) 72-43

(b) 68-40

(c) 85-57

(d) 55-27




- Q) (a) 72-43 (b) 68-40
 (c) 85-57 (d) 55-27

Ans: (a)

Q) (a) QRS
(c) STU


(b) XYZ
(d) MLN



- Q) (a) QRS (b) XYZ
 (c) STU (d) MLN

Ans: (d)


- Q) (a) Beautician : Parlour (b) Chemist : Medicine
(c) Lawyer: Court (d) Engineer : Site



- Q) (a) Beautician : Parlour (b) Chemist : Medicine
(c) Lawyer: Court (d) Engineer : Site

Ans: (b)


- Q) (a) Fish : Pisciculture (b) Birds : Horticulture
(c) Bees : Apiculture (d) silkworm : Sericulture



- Q) (a) Fish : Pisciculture (b) Birds : Horticulture
(c) Bees : Apiculture (d) silkworm : Sericulture

Ans: (b)

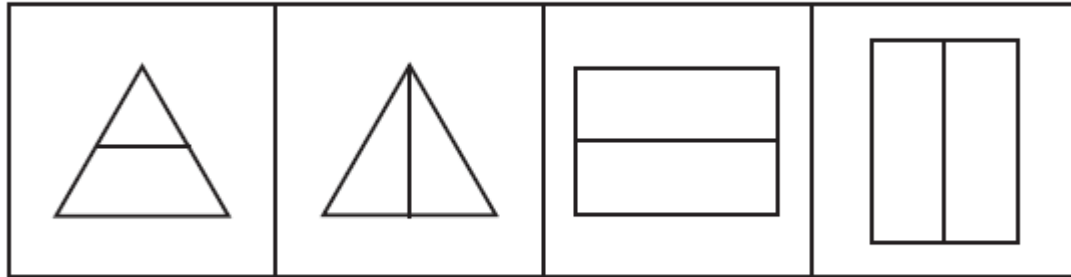
- Q) (a) Medium (b) Average
(c) Mediocre (d) Terrible



- Q) (a) Medium (b) Average
(c) Mediocre (d) Terrible

Ans: (d)

Q) Find the odd figure.




(a)

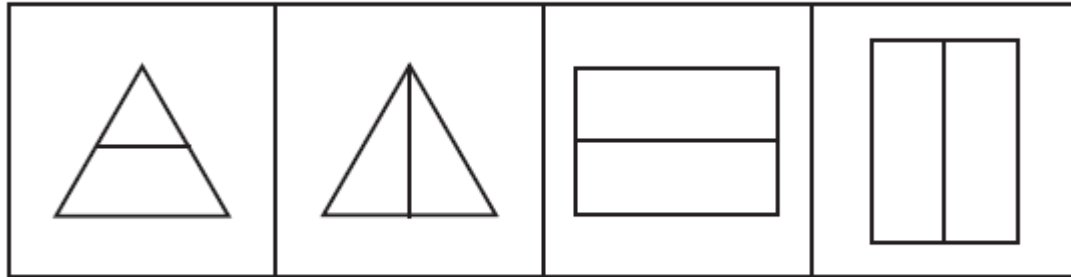
(b)

(c)

(d)



Q) Find the odd figure.



(a)

(b)

(c)

(d)

Ans: (a)

Q)

(a)




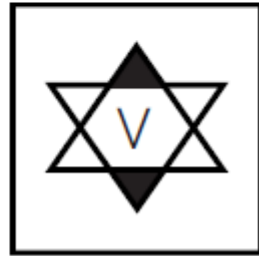
(b)



(c)



(d)



Q)

(a)



(b)



(c)

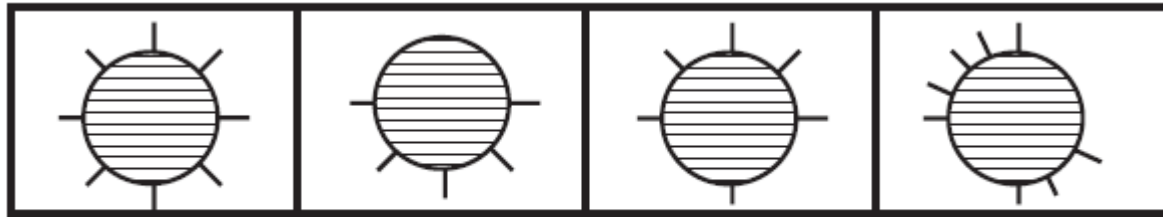


(d)



Ans: (a)

Q)




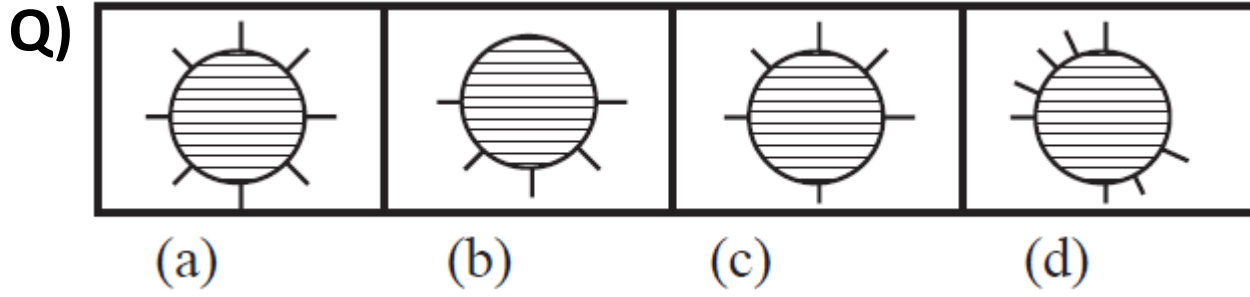
(a)

(b)

(c)

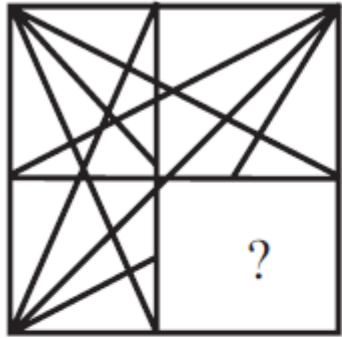
(d)




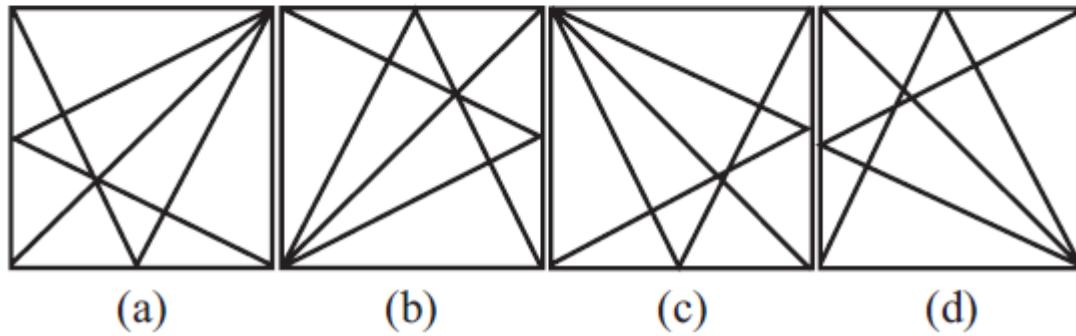


Ans: (b)

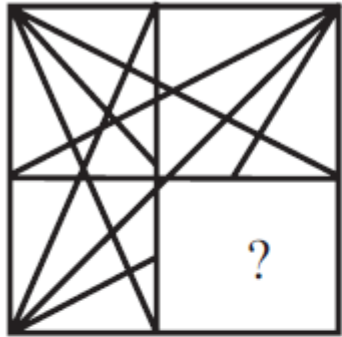
Q) Question Figure:



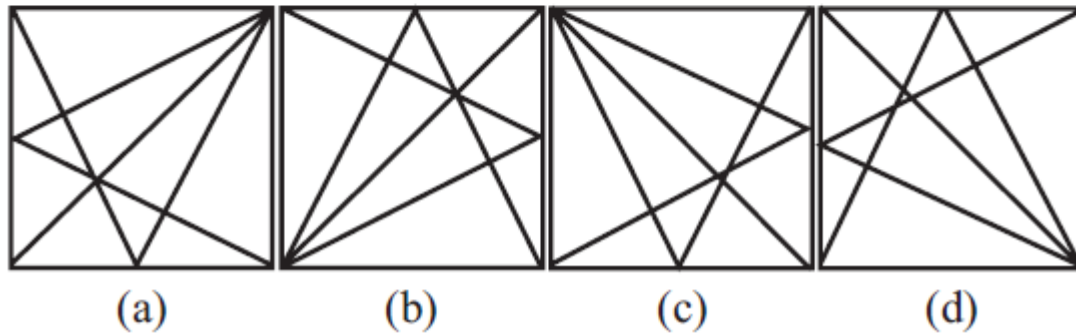
Answer Figures:



Q) Question Figure:




Answer Figures:




Ans: (d)


Q) Question Figure:



Answer Figures:



Q) Question Figure:

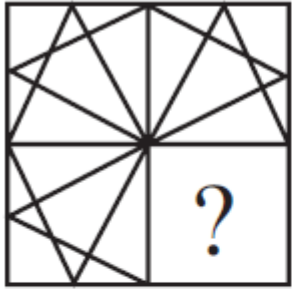


Answer Figures:



Ans: (a)

Q) Question Figure:



X

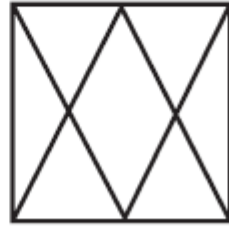
Answer Figures:



(a)




(b)



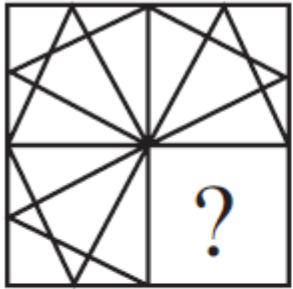
(c)



(d)



Q) Question Figure:



X

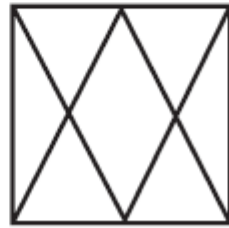
Answer Figures:



(a)



(b)



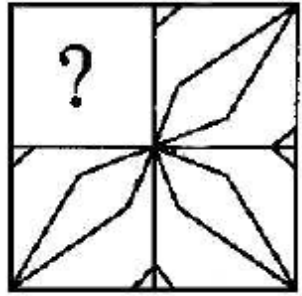
(c)



(d)

Ans: (a)

Q) Question Figure:



X

Answer Figures:



(a)




(b)



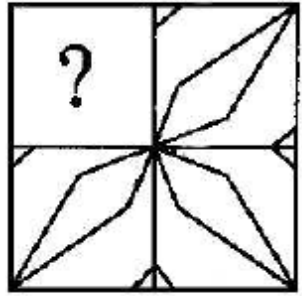
(c)



(d)



Q) Question Figure:



X

Answer Figures:



(a)



(b)




(c)



(d)

Ans: (a)

Q) Question Figure:



X

Answer Figures:



(a)




(b)




(c)



(d)



Q) Question Figure:



X

Answer Figures:



(a)



(b)



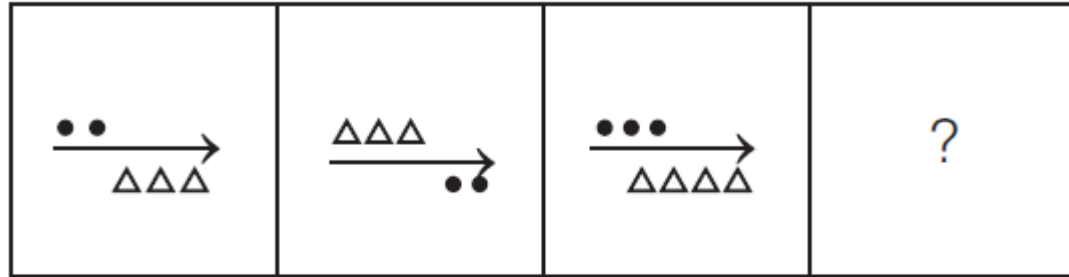
(c)



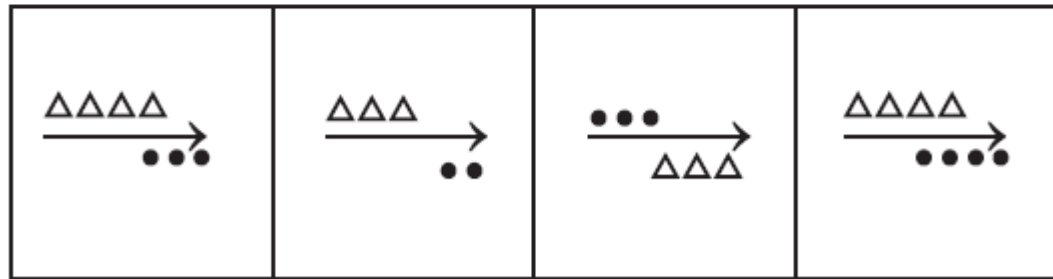
(d)

Ans: (c)

Q) Problem Figures



Answer Figures




(a)

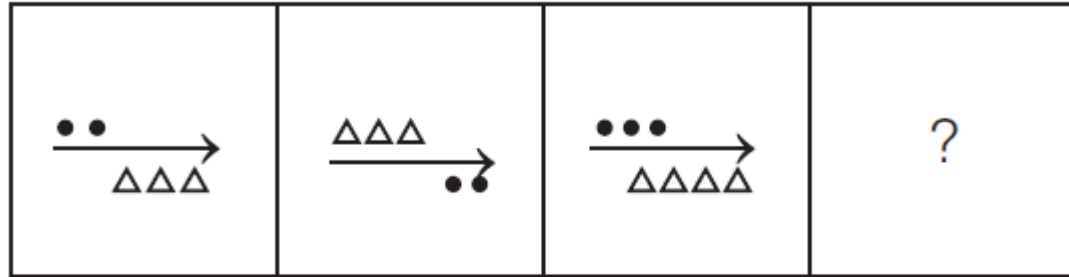
(b)

(c)

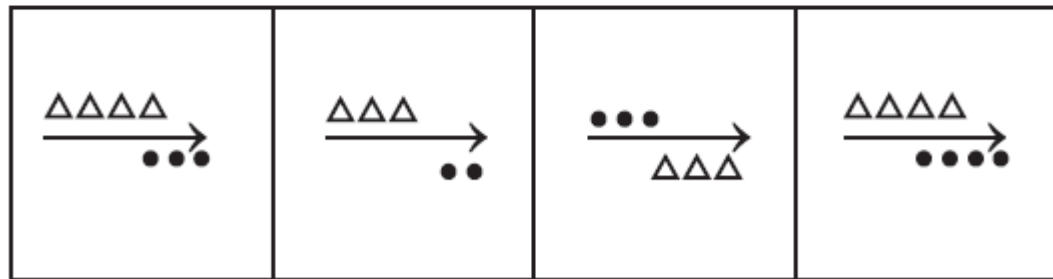
(d)



Q) Problem Figures



Answer Figures



(a)

(b)

(c)

(d)

Ans: (a)

Q) Problem Figures :

X □	△ T	★ ●	?	X T
△ ● S	★ □ X	S T △		△ □ S
T ★	● S	□ X		● ★

Answer Figures:

△ T	S □	S ●	S □	S □
★ □ X	X T ★	X T ★	X ● ★	★ ● X
● S	● △	□ △	T △	T △


(a)

(b)

(c)

(d)

(e)



Q) Problem Figures :

X □	△ T	★ ●	?	X T
△ ● S	★ □ X	S T △		△ □ S
T ★	● S	□ X		● ★

Answer Figures:

△ T	S □	S ●	S □	S □
★ □ X	X T ★	X T ★	X ● ★	★ ● X
● S	● △	□ △	T △	T △
(a)	(b)	(c)	(d)	(e)

Ans: (d)

1-YEAR FULL ACCESS SSB ONLINE COURSE 2022

START YOUR SSB INTERVIEW PREPARATION TODAY WITH SSBCRACKEXAMS

HOT & NEW



5 (132 ratings) 17,552 students enrolled

Includes:

 OIR Test

 PPDT

 Psychological Tests

 Personal Interview

 Group Tasks

 Conference

 Medical

 Live Class


 Success Stories

 Personal Guidance


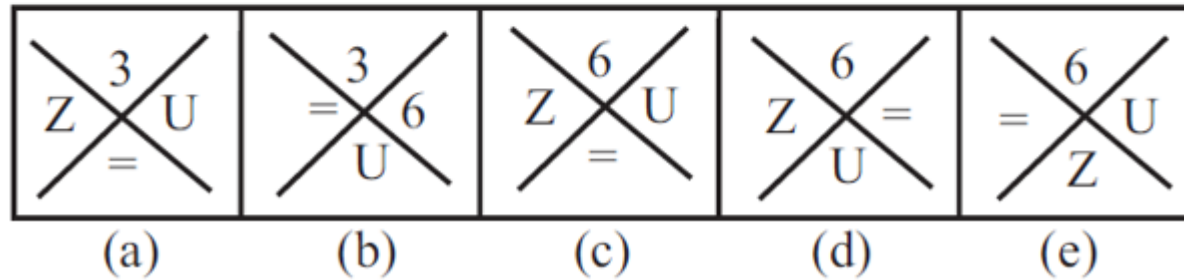
 SSB Trends




Q) Problem Figures :



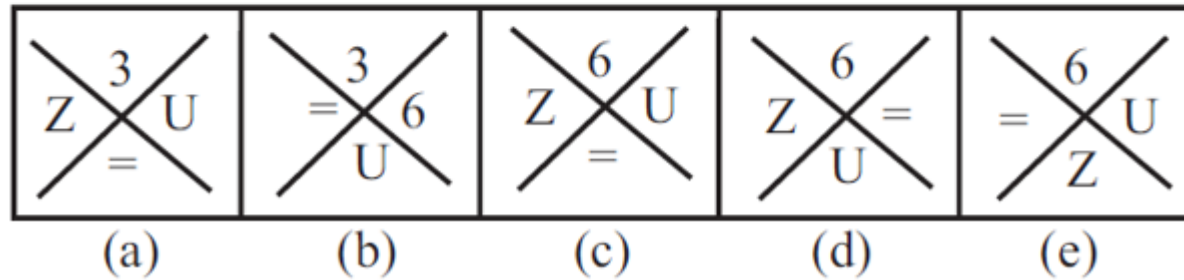
Answer Figures:



Q) Problem Figures :

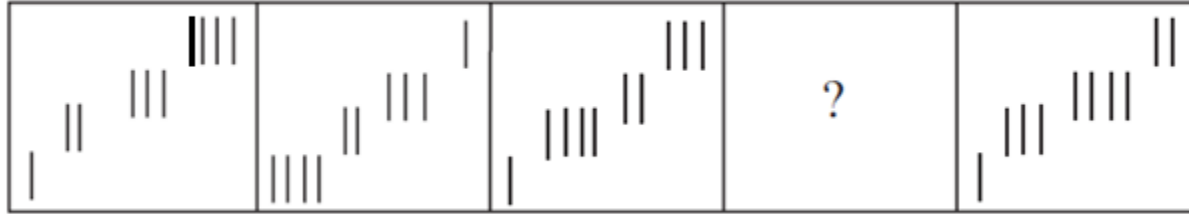


Answer Figures:



Ans: (c)

Q) Problem Figures :



Answer Figures:




(a)

(b)

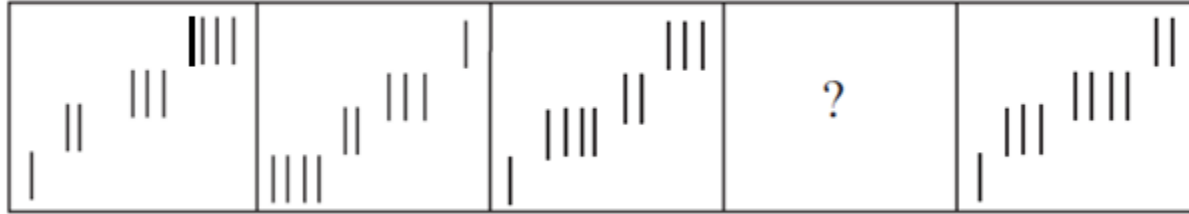
(c)

(d)

(e)



Q) Problem Figures :



Answer Figures:



(a)

(b)

(c)

(d)

(e)


Ans: (e)

Q) Problem Figures :


--	--	--	--	--

Answer Figures:

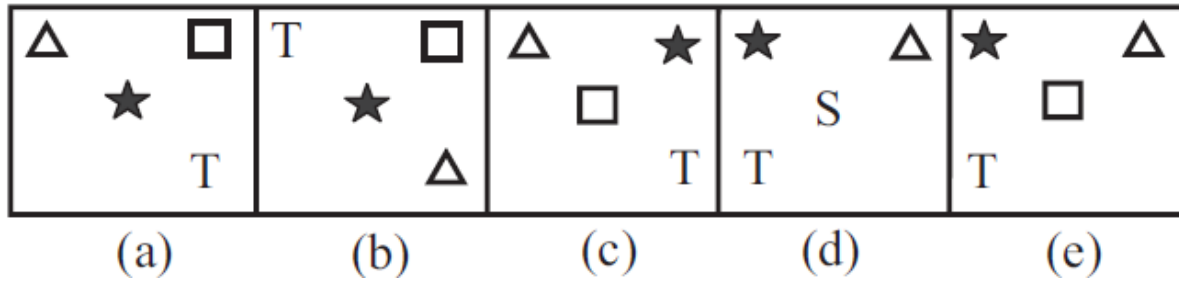
(a)	(b)	(c)	(d)	(e)



Q) Problem Figures :

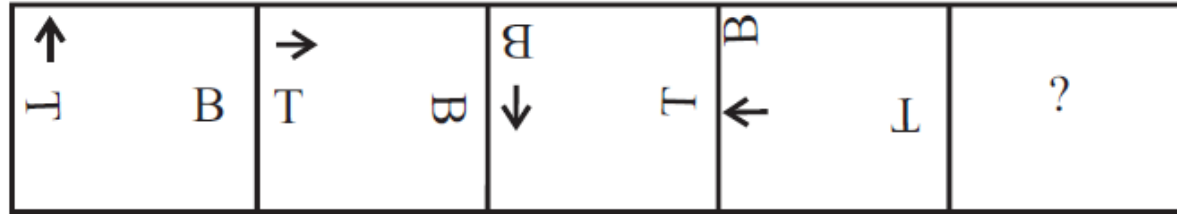


Answer Figures:

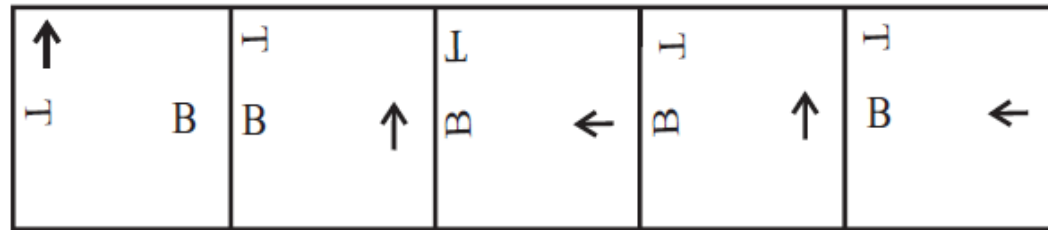


Ans: (a)

Q) Problem Figures :



Answer Figures:




(a)

(b)

(c)

(d)

(e)



Q) Problem Figures :

↑ ┌ B	→ ┌ B	┌ B ↓ T	┌ B ↓ T	?
----------	----------	------------	------------	---

Answer Figures:

↑ ┌ B	┌ B ↑	┌ B ←	┌ B ↑	┌ B ←
----------	----------	----------	----------	----------

(a)

(b)

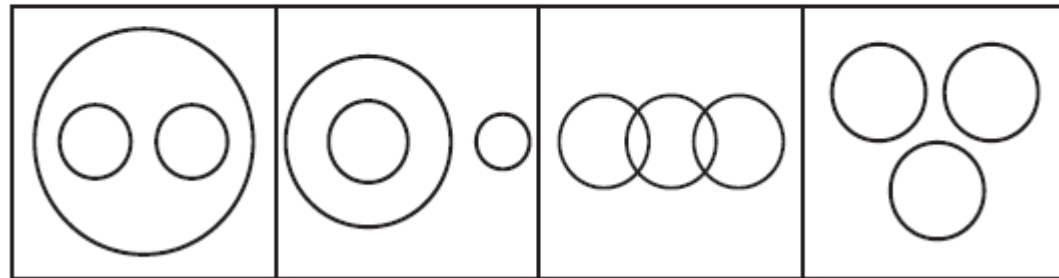
(c)

(d)

(e)

Ans: (b)

Q) Which of the following answer figure indicates best relation between Aeroplanes, Train, Travel?




(a)

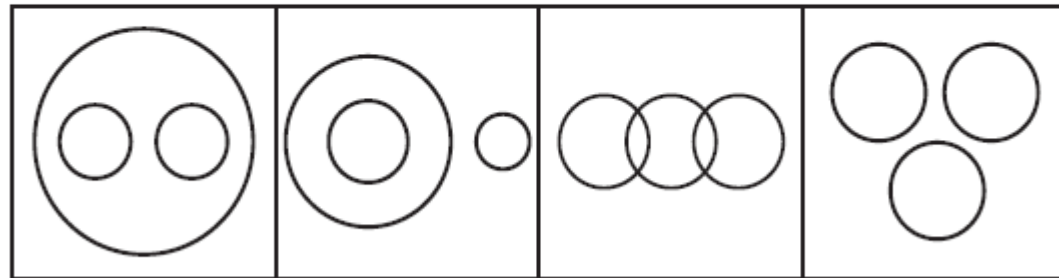
(b)

(c)

(d)



Q) Which of the following answer figure indicates best relation between Aeroplanes, Train, Travel?



(a)

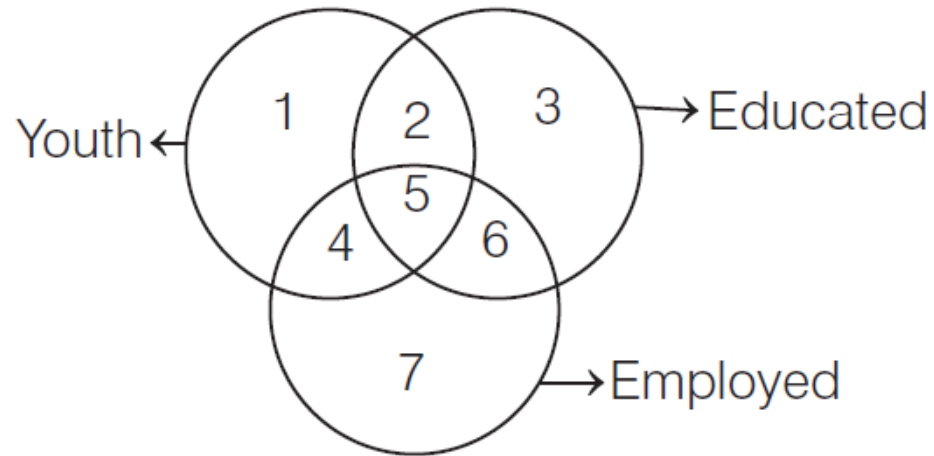
(b)

(c)


(d)

Ans: (a)

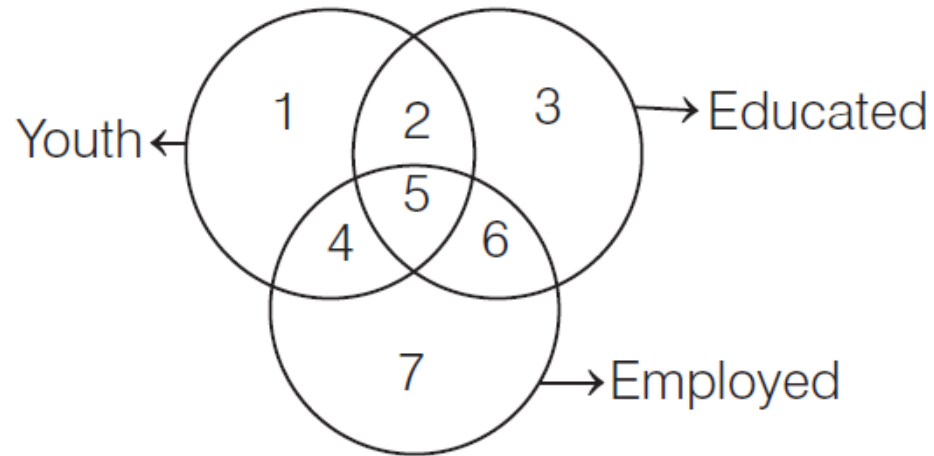
Q) Study the diagram below and identify the region representing youth who are employed but not educated.



- (a) 5, 6
- (b) 1 , 4 , 7
- (c) 4, 7
- (d) Only 4




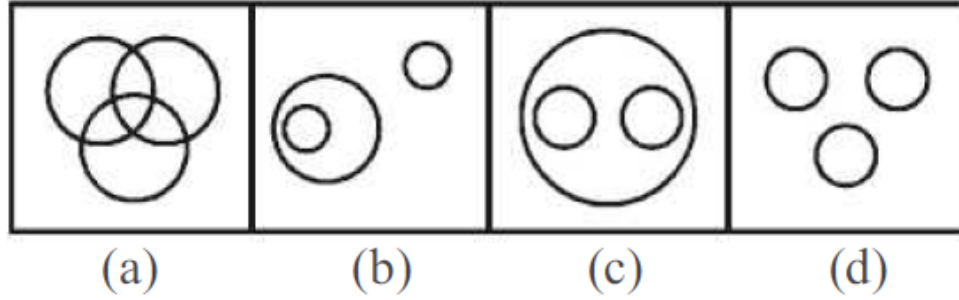
Q) Study the diagram below and identify the region representing youth who are employed but not educated.



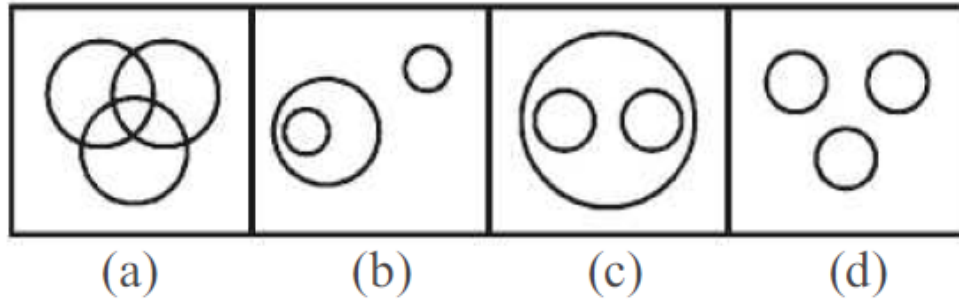
- (a) 5, 6
- (b) 1 , 4 , 7
- (c) 4, 7
- (d) Only 4

Ans: (d)

Q) Find out the figure which best represents the relationship among Garden, Rose and Jasmine.


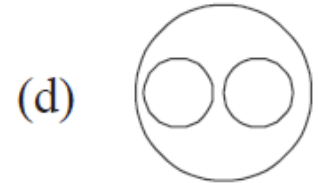
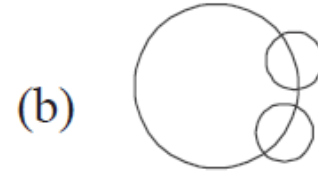
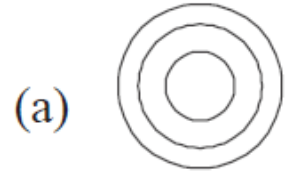


Q) Find out the figure which best represents the relationship among Garden, Rose and Jasmine.

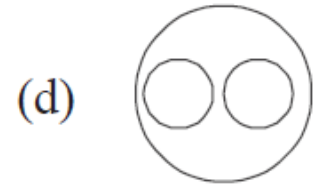
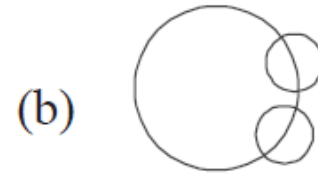
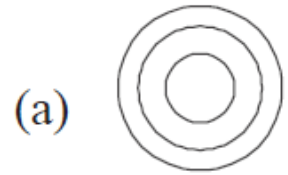


Ans: (c)

Q) Which of the following diagrams indicates the best relation among Gold, Metal and Zinc ?


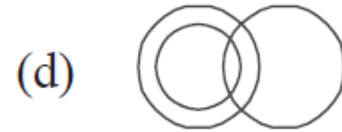
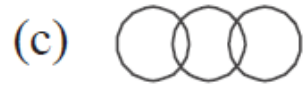
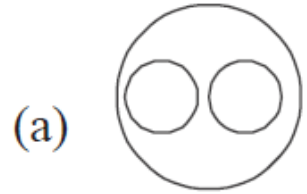


Q) Which of the following diagrams indicates the best relation among Gold, Metal and Zinc ?

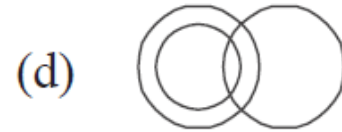
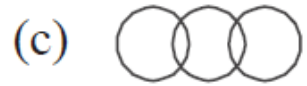
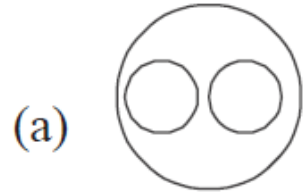


Ans: (d)

Q) Which of the following venn diagrams shows the relationship among women, widows and teachers?


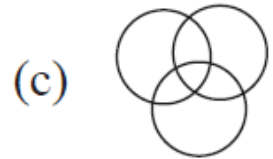
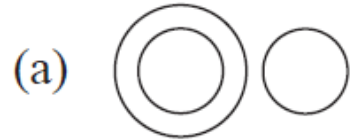


Q) Which of the following venn diagrams shows the relationship among women, widows and teachers?

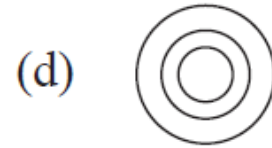
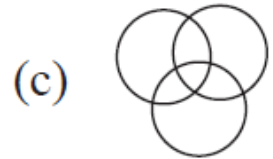


Ans: (d)

Q) Which one of the following diagrams best depicts the relationship among Pigeons, Birds and Dogs.



Q) Which one of the following diagrams best depicts the relationship among Pigeons, Birds and Dogs.



Ans: (a)

Q) Select the missing numbers from the given responses


43	25	?
21	40	35
35	34	28

(a) 36

(b) 46

(c) 40

(d) 26



Q) Select the missing numbers from the given responses

43	25	?
21	40	35
35	34	28

(a) 36

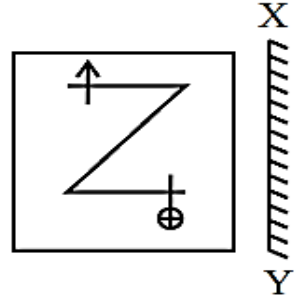
(b) 46

(c) 40


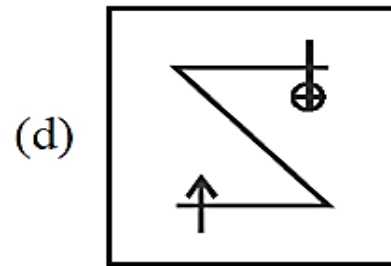
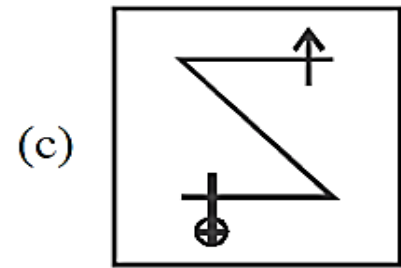
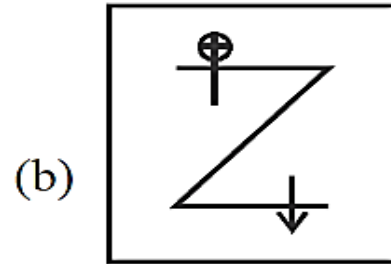
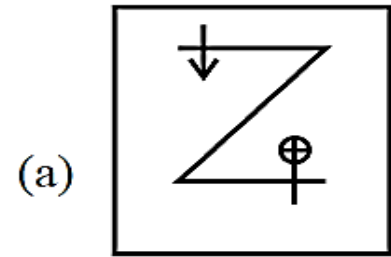
(d) 26

Ans: (a)

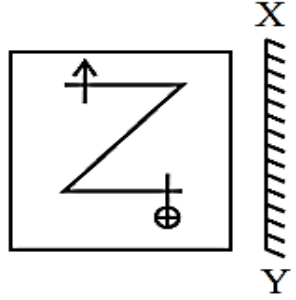
Q) Question Figure



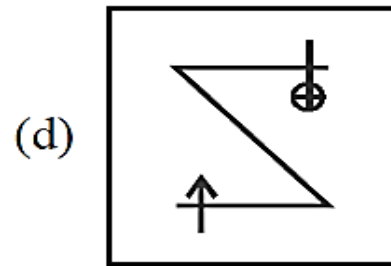
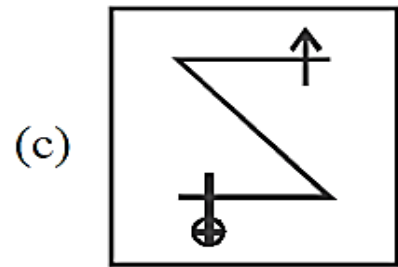
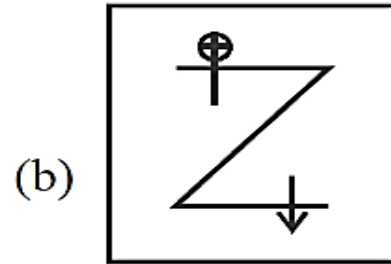
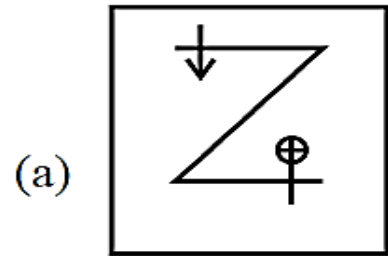
Answer Figures



Q) Question Figure


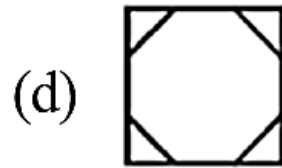
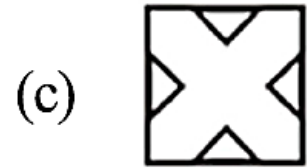
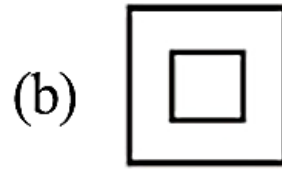
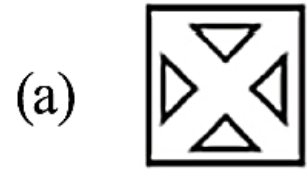
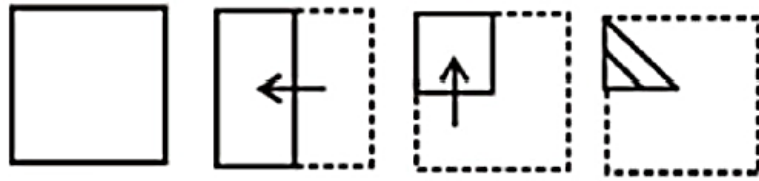


Answer Figures

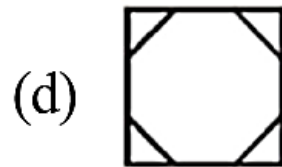
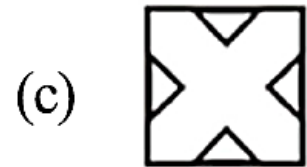
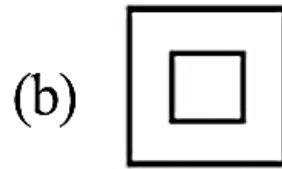
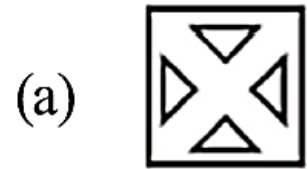
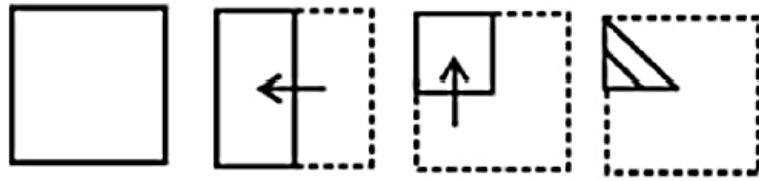


Ans: (c)

Q) A piece of paper is folded and cut. From the figures given, indicate how it will appear when opened



Q) A piece of paper is folded and cut. From the figures given, indicate how it will appear when opened



Ans: (c)

AFCAT 2 2022 – MAHAMARATHON – REASONING

Read all the conclusions and then decide which of the given
Q) conclusions logically follows from the given statements
disregarding commonly known facts.

- (a) If only conclusion I follows.
- (b) If only conclusion II follows.
- (c) If either conclusion I or II follows.
- (d) If both conclusions I and II follow.

Statements:

Some Noise are steel


No steel is Blood

Some steel is Free

Conclusion:

I: Some noise are not Blood

II: All Blood is noise



AFCAT 2 2022 – MAHAMARATHON – REASONING

Read all the conclusions and then decide which of the given
Q) conclusions logically follows from the given statements
disregarding commonly known facts.

- (a) If only conclusion I follows.
- (b) If only conclusion II follows.
- (c) If either conclusion I or II follows.
- (d) If both conclusions I and II follow.

Statements:

Some Noise are steel

No steel is Blood

Some steel is Free

Conclusion:

I: Some noise are not Blood

II: All Blood is noise

Ans: (a)

Q) Statements:

All shirts are skirts.

No skirt is top.

All tops are kurta.


Conclusions:

I. All shirts are kurta

II. Some kurta are skirts.

Give answer

- (a) If only conclusion I follows.
- (b) If only conclusion II follows.
- (c) If either conclusion I or II follows.
- (d) If neither conclusion I nor II follows.



Q) Statements:

All shirts are skirts.

No skirt is top.

All tops are kurta.

Conclusions:

I All shirts are kurta

II Some kurta are skirts.

Give answer

- (a) If only conclusion I follows.
- (b) If only conclusion II follows.
- (c) If either conclusion I or II follows.
- (d) If neither conclusion I nor II follows.

Ans: (d)

Q) Statements:

All September are October.

No October is November.

No November is December.


Conclusions:

I Some September are not Novembers

II No October is December.

Give answer

- (a) If only conclusion I follows.
- (b) If only conclusion II follows.
- (c) If either conclusion I or II follows.
- (d) If neither conclusion I nor II follows.



Q) Statements:

All September are October.

No October is November.

No November is December.

Conclusions:

I Some September are not Novembers

II No October is December.

Give answer

- (a) If only conclusion I follows.
- (b) If only conclusion II follows.
- (c) If either conclusion I or II follows.
- (d) If neither conclusion I nor II follows.

Ans: (a)

Q) Statement:

No right is a left.

All up are left.


Some down are up.

Conclusions:

I. No up is a right.

II. At least some down are left.

- (a) Only conclusion I is true
- (b) Neither conclusion I nor II is true
- (c) Only conclusion II is true
- (d) Both conclusions I and II are true



Q) Statement:

No right is a left.

All up are left.

Some down are up.

Conclusions:

I. No up is a right.

II. At least some down are left.

- (a) Only conclusion I is true
- (b) Neither conclusion I nor II is true
- (c) Only conclusion II is true
- (d) Both conclusions I and II are true

Ans: (d)

Q) Statements:

Some cricketers are footballers

All footballers are boxers.

Some boxers are players.

Conclusions:

I. At least some boxers are cricketers.


II. No player is a cricketer.

(a) Only conclusion I is true

(b) Neither conclusion I nor II is true

(c) Only conclusion II is true

(d) Both conclusions I and II are true



Q) Statements:

Some cricketers are footballers

All footballers are boxers.

Some boxers are players.

Conclusions:

I. At least some boxers are cricketers.

II. No player is a cricketer.

(a) Only conclusion I is true

(b) Neither conclusion I nor II is true

(c) Only conclusion II is true


(d) Both conclusions I and II are true

Ans: (a)

Q) Find the missing number

10	5	105
20	?	420
30	15	915

- a) 5
- b) 10
- c) 15
- d) 20



Q) Find the missing number

10	5	105
20	?	420
30	15	915

- a) 5
- b) 10
- c) 15
- d) 20

Ans: (d)


Q) 2, 5, 10, 17, 26, ?

a) 15

b) 37

c) 45

d) 47



Q) 2, 5, 10, 17, 26, ?

a) 15

b) 37

c) 45

d) 47

Ans: (b)


Q) Priyank ranks 6th from the bottom and 28th from the top in a class. How many students are there in the class?

(a) 31

(b) 32

(c) 33

(d) 34



Q) Priyank ranks 6th from the bottom and 28th from the top in a class. How many students are there in the class?

(a) 31

(b) 32

(c) 33

(d) 34

Ans: (c)


Q) In a row of 64 girls, Anu is 17th from the left. Jagrati is 11th to the right of Anu. What is Jagrati's position from the right end of the row?

(a) 36th

(b) 37th

(c) 38th

(d) 40th



Q) In a row of 64 girls, Anu is 17th from the left. Jagrati is 11th to the right of Anu. What is Jagrati's position from the right end of the row?

(a) 36th

(b) 37th


(c) 38th

(d) 40th

Ans: (b)

Q) Nithya is Sam's Sister. Mogan is Sam's Father. Selvan is Rajan's Son. Rajan is Mogan's Brother. How is Nithya related to Selvan?

- | | |
|--------------|------------|
| (a) Daughter | (b) Sister |
| (c) Cousin | (d) Wife |




Q) Nithya is Sam's Sister. Mogan is Sam's Father. Selvan is Rajan's Son. Rajan is Mogan's Brother. How is Nithya related to Selvan?

- | | |
|--------------|------------|
| (a) Daughter | (b) Sister |
| (c) Cousin | (d) Wife |

Ans: (c)

Q) Pointing to a photograph, a man said, “I have no brother or sister but that man’s father is my father’s son.” Whose photograph was it ?

- (a) His own
- (b) His son
- (c) His father
- (d) His grandfather



Q) Pointing to a photograph, a man said, “I have no brother or sister but that man’s father is my father’s son.” Whose photograph was it ?

- | | |
|----------------|---------------------|
| (a) His own | (b) His son |
| (c) His father | (d) His grandfather |

Ans: (b)

Bundles 16[View All](#)

SSB Interview Online Course

17 Courses

₹3,999 ₹4,999 20% OFF



NDA Exam Online Course 2022

23 Courses

₹3,999 ₹4,999 20% OFF



CDS Exam Online Course 2022

39 Courses

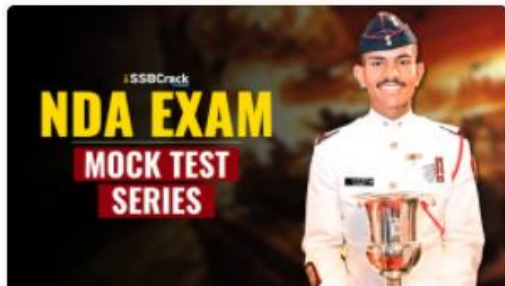
₹3,999 ₹4,999 20% OFF



AFCAT Exam Online Course 2022

23 Courses

₹3,999 ₹4,999 20% OFF

Test Series 07[View All](#)

NDA 2022 Mock Test Series

40 Tests

₹499 ₹999 50% OFF



CDS Exam 2022 Mock Test Series

30 Tests

₹499 ₹999 50% OFF



AFCAT 2022 Mock Test Series

20 Tests

₹499 ₹999 50% OFF



CDS Exam OTA 2022 Mock Test Series

20 Tests

₹499 ₹999 50% OFF

AFCAT 2 2022

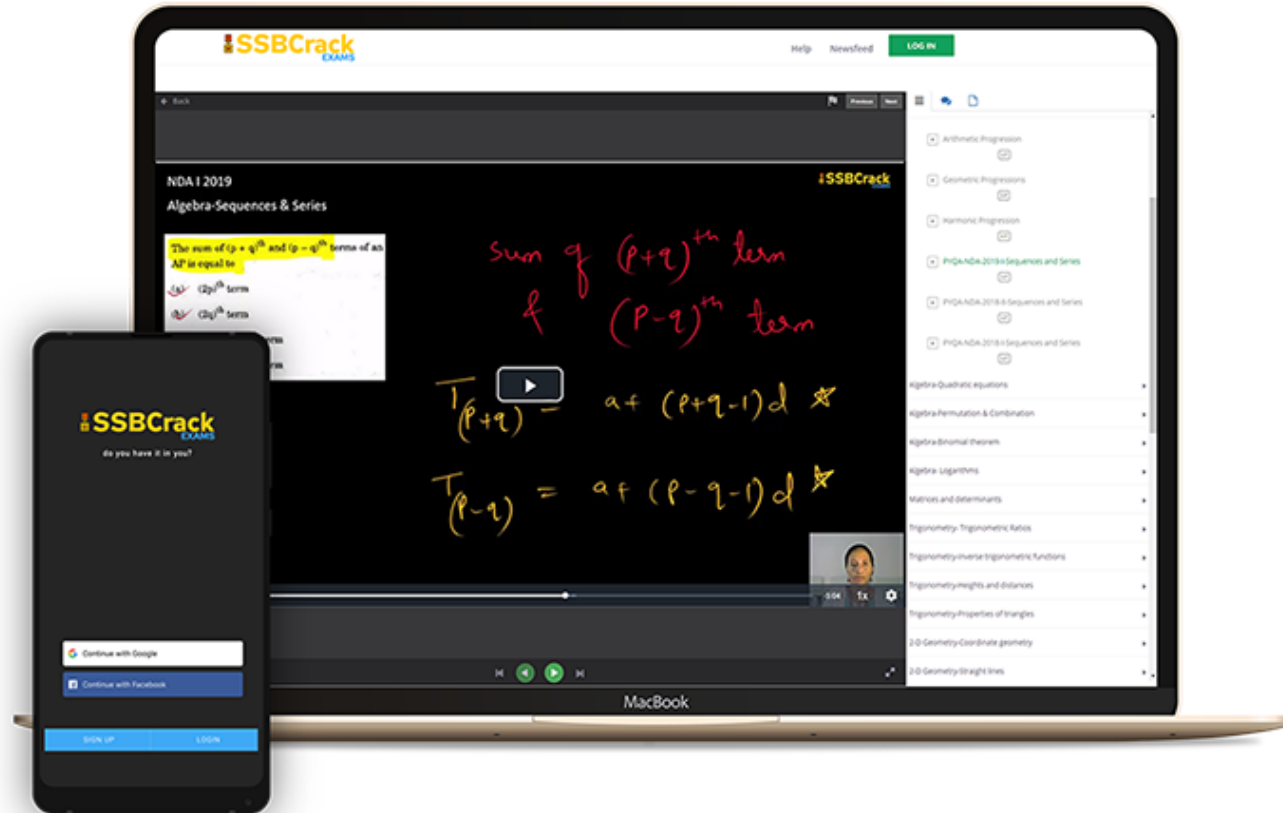
LIVE CLASS

TIME TABLE

DATE	TIME	SUBJECT
17 AUG 2022	10 AM TO 1 PM	General Awareness Part 1
17 AUG 2022	2 PM TO 5 PM	English Part 1
17 AUG 2022	6 PM TO 9 PM	Static GK Part 1
18 AUG 2022	10 AM TO 1 PM	General Awareness Part 2
18 AUG 2022	2 PM TO 5 PM	English Part 2
18 AUG 2022	6 PM TO 9 PM	Static GK Part 2
19 AUG 2022	10 AM TO 1 PM	Current Affairs
19 AUG 2022	2 PM TO 5 PM	English Part 3
19 AUG 2022	6 PM TO 9 PM	Defence Current Affairs
20 AUG 2022	10 AM TO 1 PM	Numerical Ability Part 1
20 AUG 2022	2 PM TO 5 PM	Reasoning Part 1
20 AUG 2022	6 PM TO 9 PM	General Sciences
22 AUG 2022	10 AM TO 1 PM	Numerical Ability Part 2
22 AUG 2022	2 PM TO 5 PM	Reasoning Part 2
23 AUG 2022	10 AM TO 1 PM	Numerical Ability Part 3
23 AUG 2022	2 PM TO 5 PM	Reasoning Part 3



India's Most Popular Portal for Defence Exam Preparation



www.ssbcrackexams.com

CODE: WARRIOR10

get an extra **10%** off on all courses





AFCAT 2 2022



MEGA MARATHON 10 HRS

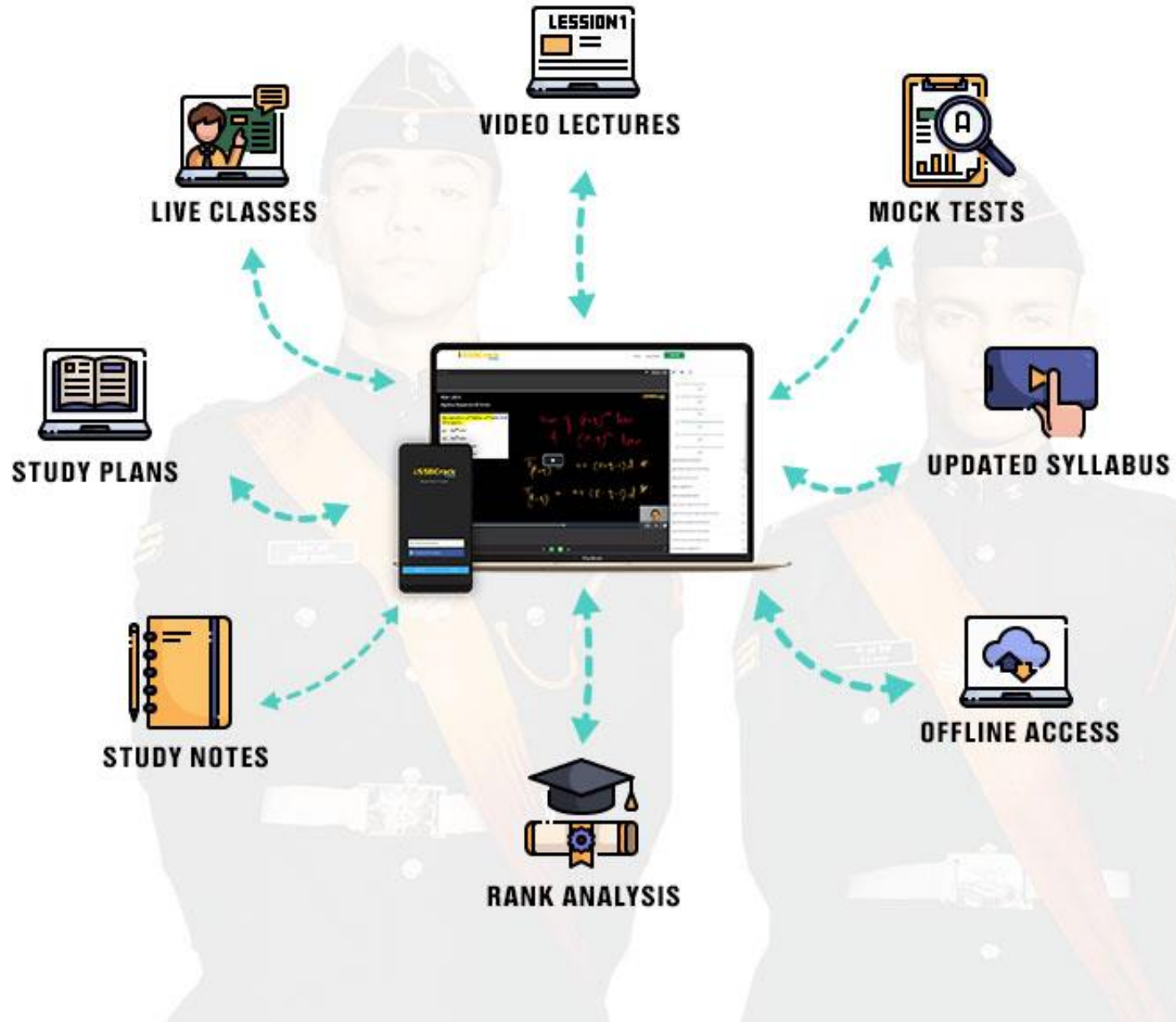
COMPLETE REVISION **LIVE**  **CLASS**

NUMERICAL ABILITY

ENGLISH

GENERAL KNOWLEDGE

REASONING



Choose from our Courses



SSB Interview Online Course

17 courses ₹4999 **₹3999**



NDA Exam Online Course 2022

23 courses ₹4999 **₹3999**



CDS Exam Online Course 2022

39 courses ₹4999 **₹3999**



AFCAT Exam Online Course 2022

23 courses ₹4999 **₹3999**



CDS OTA Exam Online Course 2022

33 courses ₹4499 **₹3499**



Territorial Army Exam Online Course 2022

45 courses ₹4999 **₹3999**



MNS Exam Online Course 2022

21 courses ₹4999 **₹3999**



ACC Exam Online Course 2022

24 courses ₹5999 **₹4999**

[View All](#)

Bundles 16[View All](#)

SSB Interview Online Course

17 Courses

₹3,999 ₹4,999 20% OFF



NDA Exam Online Course 2022

23 Courses

₹3,999 ₹4,999 20% OFF



CDS Exam Online Course 2022

39 Courses

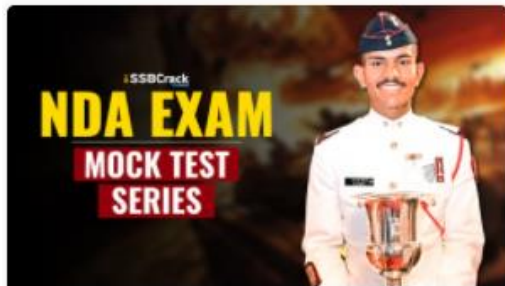
₹3,999 ₹4,999 20% OFF



AFCAT Exam Online Course 2022

23 Courses

₹3,999 ₹4,999 20% OFF

Test Series 07[View All](#)

NDA 2022 Mock Test Series

40 Tests

₹499 ₹999 50% OFF



CDS Exam 2022 Mock Test Series

30 Tests

₹499 ₹999 50% OFF



AFCAT 2022 Mock Test Series

20 Tests

₹499 ₹999 50% OFF

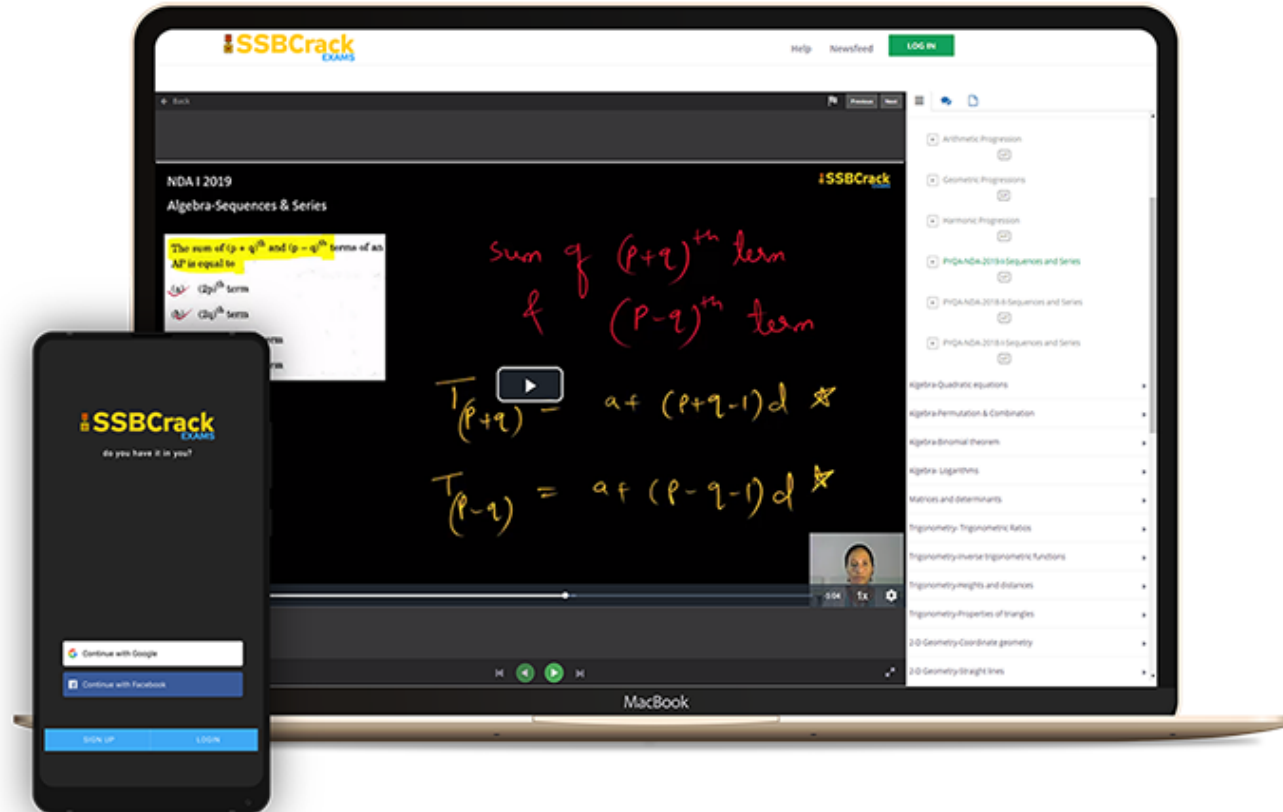


CDS Exam OTA 2022 Mock Test Series

20 Tests

₹499 ₹999 50% OFF

India's Most Popular Portal for Defence Exam Preparation



www.ssbcrackexams.com

CODE: WARRIOR10

get an extra **10%** off on all courses



COMPREHENSION


DIRECTIONS

Read the following passage carefully and answer the questions given below it:

Over four hundred years after his death, scholars are still unravelling the mysteries of Michelangelo's art. Recently one mystery that was revealed was that his famous drawing of a pensive Cleopatra included a hidden drawing of a different Cleopatra on the reverse side. This hidden Cleopatra shows a tormented woman, whose eyes stare out at the viewer and whose mouth is open, screaming in horror. The two images, drawn on two sides of the same paper, can be viewed simultaneously. A second mystery concerns Michelangelo's architectural plan for the dome of St. Peter's Basilica in Rome. Did he intend for the dome to look like the model he built between 1558 and 1561 ? Or did he change his mind after building the model and decide to elevate the dome in the way it is today? Scholars do not agree on the answer. A third mystery about one of the greatest artists who ever lived was why he destroyed hundreds or thousands of his drawings before he died. Did he feel they were unimportant? Did he want posterity to see only his finished products?

Q) The dome of St. Peter's Basilica:

- (a) bears no relation to the one in the model
- (b) was destroyed after the model was built
- (c) is raised more than the one in the model
- (d) follows the plan of the model




Q) The dome of St. Peter's Basilica:

- (a) bears no relation to the one in the model
- (b) was destroyed after the model was built
- (c) is raised more than the one in the model
- (d) follows the plan of the model

Ans. (c)

Q) According to the passage, Michelangelo is :

- (a) a private person
- (b) one of the greatest artists in the world
- (c) the most famous architect in Rome
- (d) screaming in horror




Q) According to the passage, Michelangelo is :

- (a) a private person
- (b) one of the greatest artists in the world
- (c) the most famous architect in Rome
- (d) screaming in horror

Ans. (b)

Q) Why did Michelangelo destroy so many drawings before he died?

- (a) Nobody knows
- (b) They were unimportant
- (c) They were only drafts
- (d) He had changed the drawings




Q) Why did Michelangelo destroy so many drawings before he died?

- (a) Nobody knows
- (b) They were unimportant
- (c) They were only drafts
- (d) He had changed the drawings

Ans. (a)

Q) Which of the following is meaning to word 'dome' as used in passage?

- (a) Floor
- (b) Arched part of ceiling
- (c) Foot
- (d) None of these



Q) Which of the following is meaning to word 'dome' as used in passage?

- (a) Floor
- (b) Arched part of ceiling
- (c) Foot
- (d) None of these

Ans. (b)

CLOZE COMPOSITION

DIRECTIONS

Select the most appropriate word from the options against each number :

Experienced climber Aron Ralston set out on a ____**(1)**____ hiking adventure, which proved to be a ____**(2)**____ event. Despite it being a common safety practice amongst climbers to inform others when undertaking unaccompanied hiking trips, Aron had not ____**(3)**____ anyone of his plans. During his climbing adventure Aron's right arm became pinned against the canyon wall by a 360 kg boulder. Aron was unable to free himself, and after six days of being ____**(4)**____ he made the decision to break the bones in his forearm and then amputate his arm below the elbow. Once free he made his way down a cliff and walked 8 km to seek assistance. Aron survived.

Q1) (a) breath-taking (b) fail-safe (c) stimulating (d) life-changing

0:20

Experienced climber Aron Ralston set out on a _____(1)_____ hiking adventure, which proved to be a _____(2)_____ event. Despite it being a common safety practice amongst climbers to inform others when undertaking unaccompanied hiking trips, Aron had not _____(3)_____ anyone of his plans. During his climbing adventure Aron's right arm became pinned against the canyon wall by a 360 kg boulder. Aron was unable to free himself, and after six days of being _____(4)_____ he made the decision to break the bones in his forearm and then amputate his arm below the elbow. Once free he made his way down a cliff and walked 8 km to seek assistance. Aron survived.

Q1) (a) breath-taking (b) fail-safe (c) stimulating (d) life-changing

Ans. (d)

Experienced climber Aron Ralston set out on a ____ (1) ____ hiking adventure, which proved to be a ____ (2) ____ event. Despite it being a common safety practice amongst climbers to inform others when undertaking unaccompanied hiking trips, Aron had not ____ (3) ____ anyone of his plans. During his climbing adventure Aron's right arm became pinned against the canyon wall by a 360 kg boulder. Aron was unable to free himself, and after six days of being ____ (4) ____ he made the decision to break the bones in his forearm and then amputate his arm below the elbow. Once free he made his way down a cliff and walked 8 km to seek assistance. Aron survived.

Q2) (a) supervised (b) solo (c) team (d) shared



0:20

Experienced climber Aron Ralston set out on a _____(1)_____ hiking adventure, which proved to be a _____(2)_____ event. Despite it being a common safety practice amongst climbers to inform others when undertaking unaccompanied hiking trips, Aron had not _____(3)_____ anyone of his plans. During his climbing adventure Aron's right arm became pinned against the canyon wall by a 360 kg boulder. Aron was unable to free himself, and after six days of being _____(4)_____ he made the decision to break the bones in his forearm and then amputate his arm below the elbow. Once free he made his way down a cliff and walked 8 km to seek assistance. Aron survived.

Q2) (a) supervised (b) solo (c) team (d) shared

Ans. (b)

Experienced climber Aron Ralston set out on a ____ (1) ____ hiking adventure, which proved to be a ____ (2) ____ event. Despite it being a common safety practice amongst climbers to inform others when undertaking unaccompanied hiking trips, Aron had not ____ (3) ____ anyone of his plans. During his climbing adventure Aron's right arm became pinned against the canyon wall by a 360 kg boulder. Aron was unable to free himself, and after six days of being ____ (4) ____ he made the decision to break the bones in his forearm and then amputate his arm below the elbow. Once free he made his way down a cliff and walked 8 km to seek assistance. Aron survived.

Q3) (a) authorised (b) signalled (c) notified (d) cautioned



0:20

Experienced climber Aron Ralston set out on a _____(1)_____ hiking adventure, which proved to be a _____(2)_____ event. Despite it being a common safety practice amongst climbers to inform others when undertaking unaccompanied hiking trips, Aron had not _____(3)_____ anyone of his plans. During his climbing adventure Aron's right arm became pinned against the canyon wall by a 360 kg boulder. Aron was unable to free himself, and after six days of being _____(4)_____ he made the decision to break the bones in his forearm and then amputate his arm below the elbow. Once free he made his way down a cliff and walked 8 km to seek assistance. Aron survived.

Q3) (a) authorised (b) signalled (c) notified (d) cautioned

Ans. (c)

Experienced climber Aron Ralston set out on a _____(1)_____ hiking adventure, which proved to be a _____(2)_____ event. Despite it being a common safety practice amongst climbers to inform others when undertaking unaccompanied hiking trips, Aron had not _____(3)_____ anyone of his plans. During his climbing adventure Aron's right arm became pinned against the canyon wall by a 360 kg boulder. Aron was unable to free himself, and after six days of being _____(4)_____ he made the decision to break the bones in his forearm and then amputate his arm below the elbow. Once free he made his way down a cliff and walked 8 km to seek assistance. Aron survived.

Q4) (a) suppressed (b) captive (c) trapped (d) entangled

0:20

Experienced climber Aron Ralston set out on a _____(1)_____ hiking adventure, which proved to be a _____(2)_____ event. Despite it being a common safety practice amongst climbers to inform others when undertaking unaccompanied hiking trips, Aron had not _____(3)_____ anyone of his plans. During his climbing adventure Aron's right arm became pinned against the canyon wall by a 360 kg boulder. Aron was unable to free himself, and after six days of being _____(4)_____ he made the decision to break the bones in his forearm and then amputate his arm below the elbow. Once free he made his way down a cliff and walked 8 km to seek assistance. Aron survived.

Q4) (a) suppressed (b) captive (c) trapped (d) entangled

Ans. (c)


ONE WORD SUBSTITUTION

DIRECTIONS

Choose the word which can be substituted for the given words/sentence :

Q) A person living permanently in a certain place

- (a) Resident
- (b) Native
- (c) Domicile
- (d) Subject




Q) A person living permanently in a certain place

- (a) Resident
- (b) Native
- (c) Domicile
- (d) Subject

Ans. (a)

Q) One who loves mankind is called

- (a) Optimist
- (b) Philanthropist
- (c) Optometrist
- (d) Truant




Q) One who loves mankind is called

- (a) Optimist
- (b) Philanthropist
- (c) Optometrist
- (d) Truant

Ans. (b)

Q) A Government run by a dictator is termed as

- (a) Autocracy
- (b) Democracy
- (c) Oligarchy
- (d) Theocracy




Q) A Government run by a dictator is termed as

- (a) Autocracy
- (b) Democracy
- (c) Oligarchy
- (d) Theocracy

Ans. (a)

Q) A remedy for all disease is

- (a) Medicine
- (b) Medical
- (c) Medica
- (d) Panacea




Q) A remedy for all disease is

- (a) Medicine
- (b) Medical
- (c) Medica
- (d) Panacea

Ans. (d)

Q) More than enough in amount or capacity

- (a) Derisory
- (b) Ample
- (c) Inadequate
- (d) Liberal




Q) More than enough in amount or capacity

- (a) Derisory
- (b) Ample
- (c) Inadequate
- (d) Liberal

Ans. (b)

Q) An office for which no salary is paid

- (a) Hospitable
- (b) Free
- (c) Honorary
- (d) Gratis




Q) An office for which no salary is paid

- (a) Hospitable
- (b) Free
- (c) Honorary
- (d) Gratis

Ans. (c)

Q) A handwriting which cannot be easily read

- (a) Illegible
- (b) Legible
- (c) Lucid
- (d) Edible




Q) A handwriting which cannot be easily read

- (a) Illegible
- (b) Legible
- (c) Lucid
- (d) Edible

Ans. (a)

Q) One who comes to settle in a country

- (a) Tourist
- (b) Emigrant
- (c) Immigrant
- (d) Visitor




Q) One who comes to settle in a country

- (a) Tourist
- (b) Emigrant
- (c) Immigrant
- (d) Visitor

Ans. (c)

Q) One who is habitually good to others:

- (a) Helper
- (b) Altruist
- (c) Angel
- (d) Humanitarian




Q) One who is habitually good to others:

- (a) Helper
- (b) Altruist
- (c) Angel
- (d) Humanitarian

Ans. (b)

Q) The cessation of warfare before signing a treaty:

- (a) Armistice
- (b) Truce
- (c) Ceasefire
- (d) Suspension



Q) The cessation of warfare before signing a treaty:

- (a) Armistice
- (b) Truce
- (c) Ceasefire
- (d) Suspension

Ans. (a)

AFCAT Exam Online Course 2022 – 2023

Start your AFCAT Exam preparation today with SSBCrackExams.

★★★★★ 5.0 (114)

Content 24

Search in bundle



FILTER BY TYPE ▾



AFCAT 2 2022 Exam Overview

Course • 27 Lessons



Success Stories

Course • 39 Lessons



AFCAT 2 2022 Study Plan And Analysis

Course • 24 Lessons



Notifications & Exam Dates

Course • 182 Lessons



🕒 90 Days validity

[Change Validity](#)

₹3,999 ~~₹4,999~~ 20% OFF

BUY BUNDLE

START A FREE TRIAL

What's included

📁 24 Courses


IDIOMS & PHRASES

DIRECTIONS

Which word or words explains the meaning of the following idioms :

Q) Lion's share

- (a) look angrily
- (b) major share
- (c) minor share
- (d) heart of the prey




Q) Lion's share

- (a) look angrily
- (b) major share
- (c) minor share
- (d) heart of the prey

Ans. (b)

Q) Bag and baggage

- (a) All the clothing
- (b) Without any belonging
- (c) Leave
- (d) With all one's belongings




Q) Bag and baggage

- (a) All the clothing
- (b) Without any belonging
- (c) Leave
- (d) With all one's belongings

Ans. (d)

Q) At arm's length

- (a) Length of arm
- (b) At a distance
- (c) Insult
- (d) Very near




Q) At arm's length

- (a) Length of arm
- (b) At a distance
- (c) Insult
- (d) Very near

Ans. (b)

Q) Lean and mean

- (a) To destroy something
- (b) To create something
- (c) Using only what is necessary
- (d) Not afraid dangerous situations




Q) Lean and mean

- (a) To destroy something
- (b) To create something
- (c) Using only what is necessary
- (d) Not afraid dangerous situations

Ans. (c)

Q) A cock and bull story

- (a) Interesting story
- (b) A detective story
- (c) An absurd tale
- (d) A relevant story




Q) A cock and bull story

- (a) Interesting story
- (b) A detective story
- (c) An absurd tale
- (d) A relevant story

Ans. (c)

Q) A bone of contention

- (a) Bone of lion
- (b) A reason for discord
- (c) Cause of friendship
- (d) Continued to bed



Q) A bone of contention

- (a) Bone of lion
- (b) A reason for discord
- (c) Cause of friendship
- (d) Continued to bed

Ans. (b)


Q) A hard nut to crack

(a) To be deceived

(b) Lazy

(c) To confirm

(d) A difficult problem



Q) A hard nut to crack

(a) To be deceived

(b) Lazy

(c) To confirm

(d) A difficult problem


Ans. (d)

SPOTTING ERRORS

DIRECTIONS

In each of the following questions, find out which part has an error.


Q) Hasan plays (a)/ both-cricket and billiards (b)/ at the national level. (c)/ No error
(d)



Q) Hasan plays (a)/ both-cricket and billiards (b)/ at the national level. (c)/ No error
(d)

Ans. (d)


Q) More you (a)/ think of it, (b)/ the worse it becomes.(c)/ No error (d)



Q) More you (a)/ think of it, (b)/ the worse it becomes.(c)/ No error (d)

Ans. (a)


Q) My father gave me (a)/ a pair of binocular (b)/ on my birthday. (c)/ No error (d)



Q) My father gave me (a)/ a pair of binocular (b)/ on my birthday. (c)/ No error (d)

Ans. (b)


Q) Kalidas is (a)/ a Shakespeare (b)/ of India. (c)/ No error. (d)



Q) Kalidas is (a)/ a Shakespeare (b)/ of India. (c)/ No error. (d)

Ans. (b)


Q) The teacher as well as his students, (a)/ all left (b)/ for the trip. (c)/ No error (d)



Q) The teacher as well as his students, (a)/ all left (b)/ for the trip. (c)/ No error (d)

Ans. (b)


Q) It was he who (a)/ came running in the house (b)/ with the news about the earthquake. (c)/ No Error (d)



Q) It was he who (a)/ came running in the house (b)/ with the news about the earthquake. (c)/ No Error (d)

Ans. (b)


Q) Riding across the battle field (a)/ the famous Bhishm (b)/ saw a large number of dead warriors. (c)/ No Error (d)



Q) Riding across the battle field (a)/ the famous Bhishm (b)/ saw a large number of dead warriors. (c)/ No Error (d)

Ans. (d)

Q) My Aunt (a)/ was first (b)/ to get a degree. (c)/ No Error (d)



Q) My Aunt (a)/ was first (b)/ to get a degree. (c)/ No Error (d)

Ans. (b)


FILL IN THE BLANKS

DIRECTIONS

Pick up the most effective word from the given words to fill in the blanks to make the sentence meaningfully complete.

Q) The human mind seems to have built-in _____ against original thought.

- (a) Prejudices
- (b) Ideas
- (c) Interests
- (d) Safeguards




Q) The human mind seems to have built-in _____ against original thought.

- (a) Prejudices
- (b) Ideas
- (c) Interests
- (d) Safeguards

Ans. (a)

Q) The statue _____ a global symbol of freedom

- (a) stands against
- (b) stands to
- (c) stands for
- (d) stands as




Q) The statue _____ a global symbol of freedom

- (a) stands against
- (b) stands to
- (c) stands for
- (d) stands as

Ans. (d)

Q) A child is the future of a family _____ nation.

- (a) just as
- (b) as a
- (c) like a
- (d) as well as of a




Q) A child is the future of a family _____ nation.

- (a) just as
- (b) as a
- (c) like a
- (d) as well as of a

Ans. (d)

Q) If strict security measures were taken, the tragedy might have been _____.

- (a) Restrained
- (b) Averted
- (c) Removed
- (d) Controlled



Q) If strict security measures were taken, the tragedy might have been _____.

- (a) Restrained
- (b) Averted
- (c) Removed
- (d) Controlled

Ans. (b)


Q) The deceased left _____ children.

(a) Behind

(b) For

(c) With

(d) By



Q) The deceased left _____ children.

(a) Behind

(b) For

(c) With

(d) By

Ans. (a)

1-YEAR FULL ACCESS SSB ONLINE COURSE 2022

START YOUR SSB INTERVIEW PREPARATION TODAY WITH SSBCRACKEXAMS

HOT & NEW



5 (132 ratings) 17,552 students enrolled

Includes:

 OIR Test

 PPDT

 Psychological Tests

 Personal Interview

 Group Tasks

 Conference

 Medical

 Live Class

 Success Stories

 Personal Guidance

 SSB Trends




SYNONYMS

DIRECTIONS

Choose the word which is nearest in meaning to the given word.

Q) ANIMATE

- (a) Kill
- (b) Dead
- (c) Energise
- (d) Calm




Q) ANIMATE

- (a) Kill
- (b) Dead
- (c) Energise
- (d) Calm

Ans. (c)

Q) NIGGARDLY

- (a) Penurious
- (b) Generous
- (c) Liberal
- (d) Nimbus




Q) NIGGARDLY

- (a) Penurious
- (b) Generous
- (c) Liberal
- (d) Nimbus

Ans. (a)

Q) DISCOMFIT

- (a) Litigate
- (b) Ease
- (c) Conflict
- (d) Frustrate



Q) DISCOMFIT

(a) Litigate

(b) Ease


(c) Conflict

(d) Frustrate

Ans. (d)

Q) ABSTINENCE

- (a) Synchronic
- (b) Torrential
- (c) Restraint
- (d) Gluttony




Q) ABSTINENCE

- (a) Synchronic
- (b) Torrential
- (c) Restraint
- (d) Gluttony

Ans. (c)

Q) APPRISE

- (a) Praise
- (b) Inform
- (c) Conceal
- (d) Assess




Q) APPRISE

- (a) Praise
- (b) Inform
- (c) Conceal
- (d) Assess

Ans. (b)

Q) GRUESOME

- (a) Sullen
- (b) Hideous
- (c) Exhausting
- (d) Insulting



Q) GRUESOME

- (a) Sullen
- (b) Hideous
- (c) Exhausting
- (d) Insulting

Ans. (b)


ANTONYMS

DIRECTIONS

Choose the word which is opposite in meaning to the given word.

Q) INSIPID

- (a) Tasty
- (b) Colourful
- (c) Colourless
- (d) Dull




Q) INSIPID

- (a) Tasty
- (b) Colourful
- (c) Colourless
- (d) Dull

Ans. (a)

Q) RELINQUISH

- (a) Relish
- (b) Continue
- (c) Vanish
- (d) Quench




Q) RELINQUISH

- (a) Relish
- (b) Continue
- (c) Vanish
- (d) Quench

Ans. (b)

Q) INDIGENTLY

- (a) Richly
- (b) Awfully
- (c) Completely
- (d) Diligently




Q) INDIGENTLY

- (a) Richly
- (b) Awfully
- (c) Completely
- (d) Diligently

Ans. (a)

Q) AUDACITY

- (a) Quivering
- (b) Patricide
- (c) Bravado
- (d) Cowardice




Q) AUDACITY

- (a) Quivering
- (b) Patricide
- (c) Bravado
- (d) Cowardice

Ans. (d)

Q) ELEVATION

- (a) Depression
- (b) Deflation
- (c) Depreciation
- (d) Recession




Q) ELEVATION

- (a) Depression
- (b) Deflation
- (c) Depreciation
- (d) Recession

Ans. (a)

Q) KNACK

- (a) Talent
- (b) Dullness
- (c) Dexterity
- (d) Balance



Q) KNACK

- (a) Talent
- (b) Dullness
- (c) Dexterity
- (d) Balance

Ans. (b)

AFCAT Exam Online Course 2022 – 2023

Start your AFCAT Exam preparation today with SSB Crack Exams.

★★★★★ 5.0 (114)

Content 24

Search in bundle



FILTER BY TYPE ▾



AFCAT 2 2022 Exam Overview

Course • 27 Lessons



Success Stories

Course • 39 Lessons



AFCAT 2 2022 Study Plan And Analysis

Course • 24 Lessons



Notifications & Exam Dates

Course • 182 Lessons



🕒 90 Days validity

[Change Validity](#)

₹3,999 ~~₹4,999~~ **20% OFF**

BUY BUNDLE

START A FREE TRIAL

What's included


📁 24 Courses

Bundles 16[View All](#)

SSB Interview Online Course

17 Courses

₹3,999 ₹4,999 20% OFF



NDA Exam Online Course 2022

23 Courses

₹3,999 ₹4,999 20% OFF



CDS Exam Online Course 2022

39 Courses

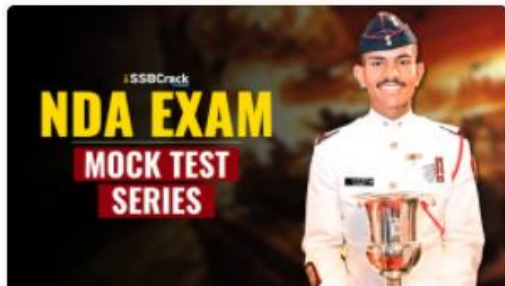
₹3,999 ₹4,999 20% OFF



AFCAT Exam Online Course 2022

23 Courses

₹3,999 ₹4,999 20% OFF

Test Series 07[View All](#)

NDA 2022 Mock Test Series

40 Tests

₹499 ₹999 50% OFF



CDS Exam 2022 Mock Test Series

30 Tests

₹499 ₹999 50% OFF



AFCAT 2022 Mock Test Series

20 Tests

₹499 ₹999 50% OFF

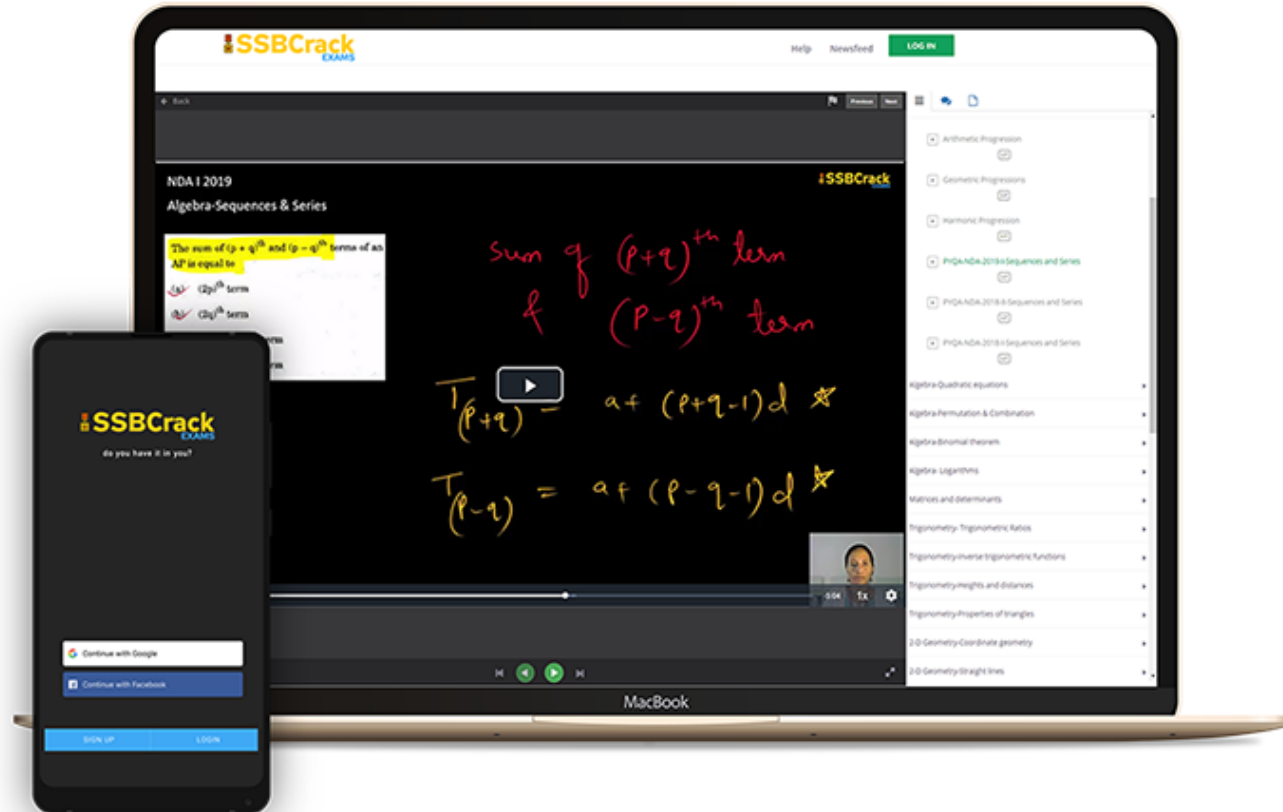


CDS Exam OTA 2022 Mock Test Series

20 Tests

₹499 ₹999 50% OFF

India's Most Popular Portal for Defence Exam Preparation



www.ssbcrackexams.com

CODE: WARRIOR10

get an extra **10%** off on all courses





AFCAT 2 2022



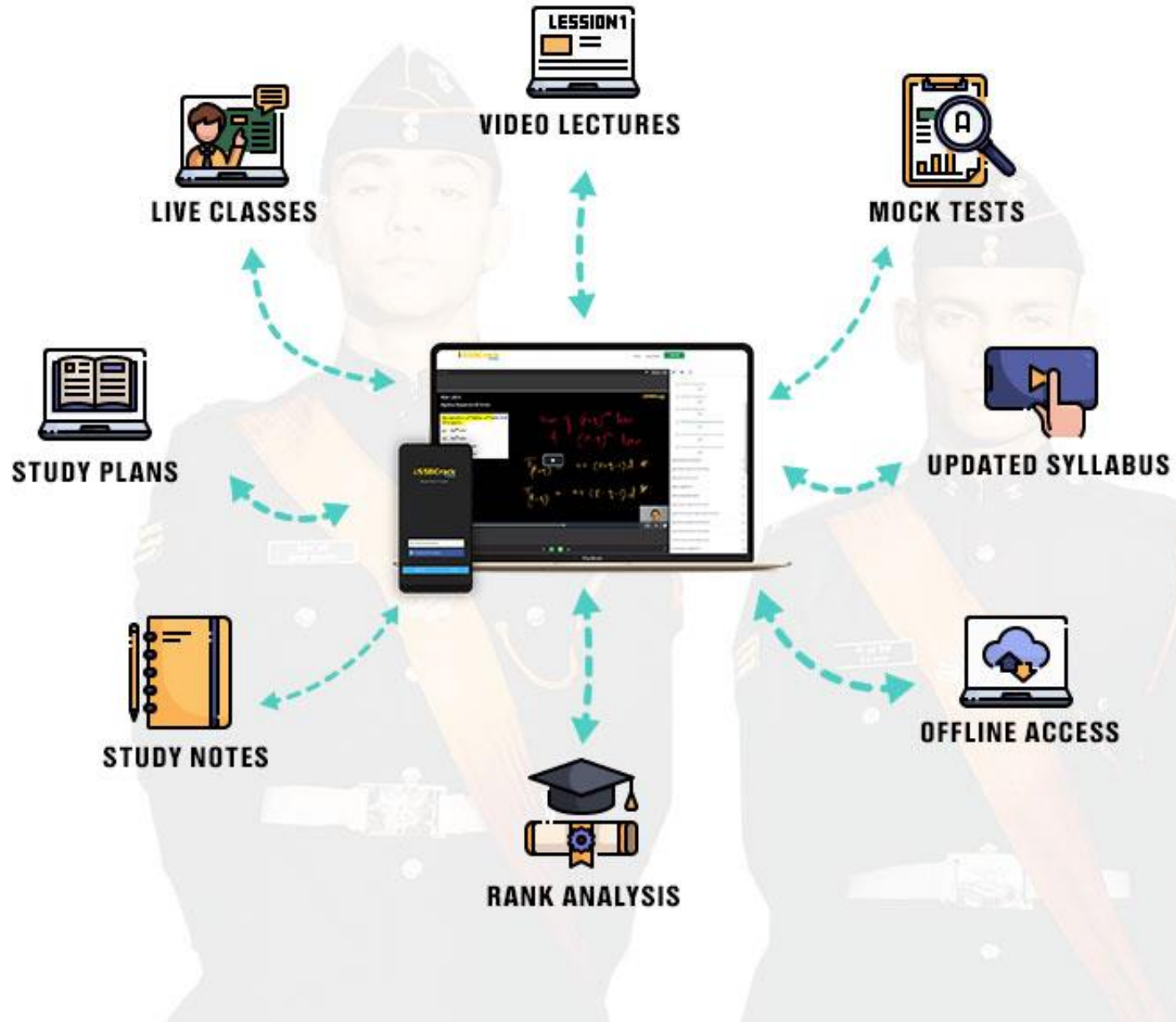
MEGA MARATHON

10 HRS

COMPLETE REVISION **LIVE**  **CLASS**

NUMERICAL ABILITY
GENERAL KNOWLEDGE

ENGLISH
REASONING



Choose from our Courses

SSB INTERVIEW ONLINE COURSE

USE CODE: "WARRIOR10"
FOR 10% OFF ON SSB COURSE

SSB Interview Online Course

17 courses ₹4999 **₹3999**



USE CODE: "WARRIOR10"
FOR 10% OFF ON NDA COURSE

NDA Exam Online Course
2022

23 courses ₹4999 **₹3999**



USE CODE: "WARRIOR10"
FOR 10% OFF ON CDS COURSE

CDS Exam Online Course
2022

39 courses ₹4999 **₹3999**



USE CODE: "WARRIOR10"
FOR 10% OFF ON AFCAT COURSE

AFCAT Exam Online Course
2022

23 courses ₹4999 **₹3999**



USE CODE: "WARRIOR10"
FOR 10% OFF ON OTA COURSE

CDS OTA Exam Online Course
2022

33 courses ₹4499 **₹3499**



USE CODE: "WARRIOR10"
FOR 10% OFF ON TA COURSE

Territorial Army Exam
Online Course 2022

45 courses ₹4999 **₹3999**



USE CODE: "WARRIOR10"
FOR 10% OFF ON MNS COURSE

MNS Exam Online Course
2022

21 courses ₹4999 **₹3999**



USE CODE: "WARRIOR10"
FOR 10% OFF ON ACC COURSE

ACC Exam Online Course
2022

24 courses ₹5999 **₹4999**

[View All](#)

Bundles 16[View All](#)

SSB Interview Online Course

17 Courses

₹3,999 ₹4,999 20% OFF



NDA Exam Online Course 2022

23 Courses

₹3,999 ₹4,999 20% OFF



CDS Exam Online Course 2022

39 Courses

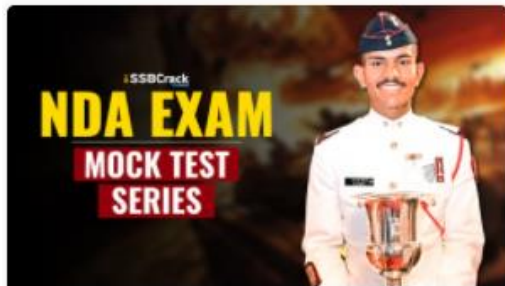
₹3,999 ₹4,999 20% OFF



AFCAT Exam Online Course 2022

23 Courses

₹3,999 ₹4,999 20% OFF

Test Series 07[View All](#)

NDA 2022 Mock Test Series

40 Tests

₹499 ₹999 50% OFF



CDS Exam 2022 Mock Test Series

30 Tests

₹499 ₹999 50% OFF



AFCAT 2022 Mock Test Series

20 Tests

₹499 ₹999 50% OFF

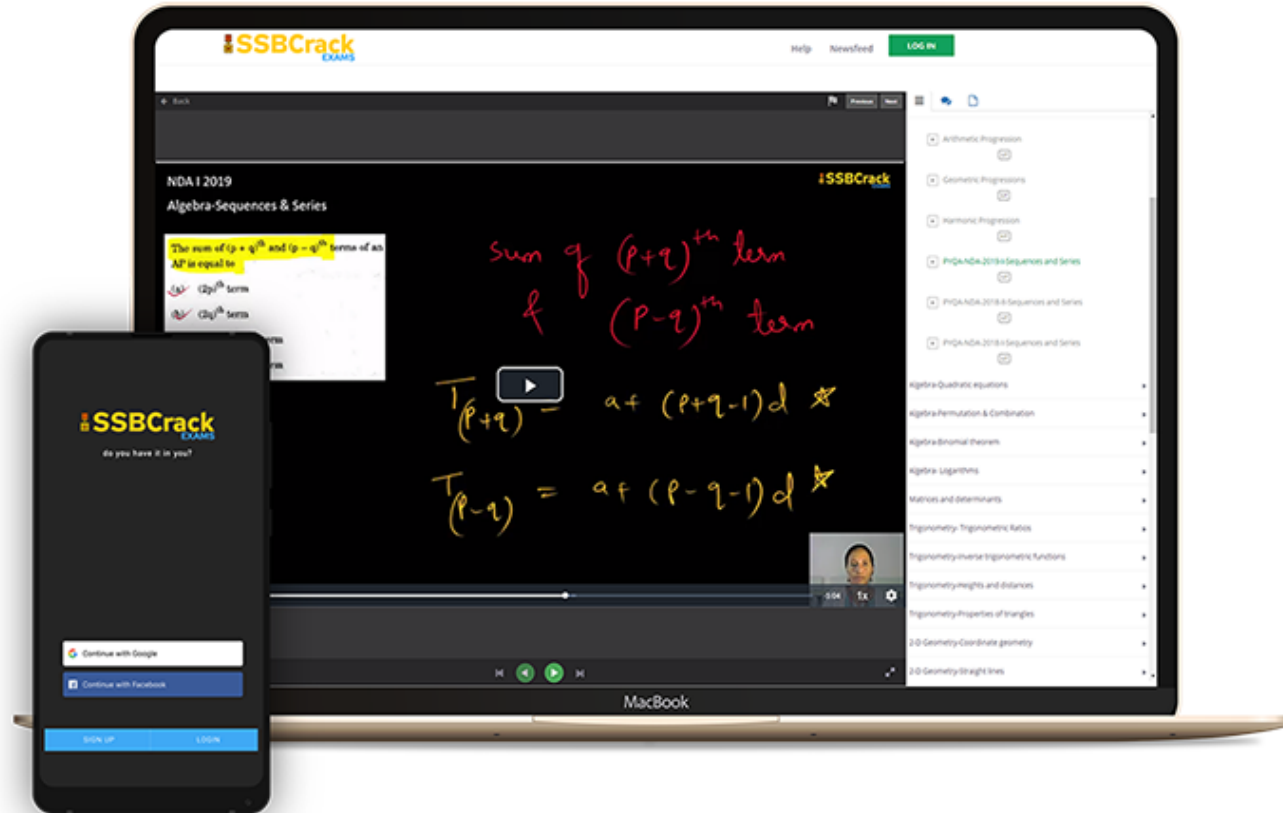


CDS Exam OTA 2022 Mock Test Series

20 Tests

₹499 ₹999 50% OFF

India's Most Popular Portal for Defence Exam Preparation



www.ssbcrackexams.com

CODE: WARRIOR10

get an extra **10%** off on all courses



COMPREHENSION


DIRECTIONS

Read the following passage carefully and answer the questions given below it:

Over four hundred years after his death, scholars are still unravelling the mysteries of Michelangelo's art. Recently one mystery that was revealed was that his famous drawing of a pensive Cleopatra included a hidden drawing of a different Cleopatra on the reverse side. This hidden Cleopatra shows a tormented woman, whose eyes stare out at the viewer and whose mouth is open, screaming in horror. The two images, drawn on two sides of the same paper, can be viewed simultaneously. A second mystery concerns Michelangelo's architectural plan for the dome of St. Peter's Basilica in Rome. Did he intend for the dome to look like the model he built between 1558 and 1561 ? Or did he change his mind after building the model and decide to elevate the dome in the way it is today? Scholars do not agree on the answer. A third mystery about one of the greatest artists who ever lived was why he destroyed hundreds or thousands of his drawings before he died. Did he feel they were unimportant? Did he want posterity to see only his finished products?

Q) The dome of St. Peter's Basilica:

- (a) bears no relation to the one in the model
- (b) was destroyed after the model was built
- (c) is raised more than the one in the model
- (d) follows the plan of the model




Q) The dome of St. Peter's Basilica:

- (a) bears no relation to the one in the model
- (b) was destroyed after the model was built
- (c) is raised more than the one in the model
- (d) follows the plan of the model

Ans. (c)

Q) According to the passage, Michelangelo is :

- (a) a private person
- (b) one of the greatest artists in the world
- (c) the most famous architect in Rome
- (d) screaming in horror




Q) According to the passage, Michelangelo is :

- (a) a private person
- (b) one of the greatest artists in the world
- (c) the most famous architect in Rome
- (d) screaming in horror

Ans. (b)

Q) Why did Michelangelo destroy so many drawings before he died?

- (a) Nobody knows
- (b) They were unimportant
- (c) They were only drafts
- (d) He had changed the drawings




Q) Why did Michelangelo destroy so many drawings before he died?

- (a) Nobody knows
- (b) They were unimportant
- (c) They were only drafts
- (d) He had changed the drawings

Ans. (a)

Q) Which of the following is meaning to word 'dome' as used in passage?

- (a) Floor
- (b) Arched part of ceiling
- (c) Foot
- (d) None of these



Q) Which of the following is meaning to word 'dome' as used in passage?

- (a) Floor
- (b) Arched part of ceiling
- (c) Foot
- (d) None of these

Ans. (b)

CLOZE COMPOSITION

DIRECTIONS

Select the most appropriate word from the options against each number :

Experienced climber Aron Ralston set out on a ____**(1)**____ hiking adventure, which proved to be a ____**(2)**____ event. Despite it being a common safety practice amongst climbers to inform others when undertaking unaccompanied hiking trips, Aron had not ____**(3)**____ anyone of his plans. During his climbing adventure Aron's right arm became pinned against the canyon wall by a 360 kg boulder. Aron was unable to free himself, and after six days of being ____**(4)**____ he made the decision to break the bones in his forearm and then amputate his arm below the elbow. Once free he made his way down a cliff and walked 8 km to seek assistance. Aron survived.

Q1) (a) breath-taking (b) fail-safe (c) stimulating (d) life-changing

0:20

Experienced climber Aron Ralston set out on a ____**(1)**____ hiking adventure, which proved to be a ____**(2)**____ event. Despite it being a common safety practice amongst climbers to inform others when undertaking unaccompanied hiking trips, Aron had not ____**(3)**____ anyone of his plans. During his climbing adventure Aron's right arm became pinned against the canyon wall by a 360 kg boulder. Aron was unable to free himself, and after six days of being ____**(4)**____ he made the decision to break the bones in his forearm and then amputate his arm below the elbow. Once free he made his way down a cliff and walked 8 km to seek assistance. Aron survived.

Q1) (a) breath-taking (b) fail-safe (c) stimulating (d) life-changing

Ans. (d)

Experienced climber Aron Ralston set out on a ____ (1) ____ hiking adventure, which proved to be a ____ (2) ____ event. Despite it being a common safety practice amongst climbers to inform others when undertaking unaccompanied hiking trips, Aron had not ____ (3) ____ anyone of his plans. During his climbing adventure Aron's right arm became pinned against the canyon wall by a 360 kg boulder. Aron was unable to free himself, and after six days of being ____ (4) ____ he made the decision to break the bones in his forearm and then amputate his arm below the elbow. Once free he made his way down a cliff and walked 8 km to seek assistance. Aron survived.

Q2) (a) supervised (b) solo (c) team (d) shared



0:20

Experienced climber Aron Ralston set out on a _____(1)_____ hiking adventure, which proved to be a _____(2)_____ event. Despite it being a common safety practice amongst climbers to inform others when undertaking unaccompanied hiking trips, Aron had not _____(3)_____ anyone of his plans. During his climbing adventure Aron's right arm became pinned against the canyon wall by a 360 kg boulder. Aron was unable to free himself, and after six days of being _____(4)_____ he made the decision to break the bones in his forearm and then amputate his arm below the elbow. Once free he made his way down a cliff and walked 8 km to seek assistance. Aron survived.

Q2) (a) supervised (b) solo (c) team (d) shared

Ans. (b)

Experienced climber Aron Ralston set out on a ____**(1)**____ hiking adventure, which proved to be a ____**(2)**____ event. Despite it being a common safety practice amongst climbers to inform others when undertaking unaccompanied hiking trips, Aron had not ____**(3)**____ anyone of his plans. During his climbing adventure Aron's right arm became pinned against the canyon wall by a 360 kg boulder. Aron was unable to free himself, and after six days of being ____**(4)**____ he made the decision to break the bones in his forearm and then amputate his arm below the elbow. Once free he made his way down a cliff and walked 8 km to seek assistance. Aron survived.

Q3) (a) authorised (b) signalled (c) notified (d) cautioned

0:20

Experienced climber Aron Ralston set out on a _____(1)_____ hiking adventure, which proved to be a _____(2)_____ event. Despite it being a common safety practice amongst climbers to inform others when undertaking unaccompanied hiking trips, Aron had not _____(3)_____ anyone of his plans. During his climbing adventure Aron's right arm became pinned against the canyon wall by a 360 kg boulder. Aron was unable to free himself, and after six days of being _____(4)_____ he made the decision to break the bones in his forearm and then amputate his arm below the elbow. Once free he made his way down a cliff and walked 8 km to seek assistance. Aron survived.

Q3) (a) authorised (b) signalled (c) notified (d) cautioned

Ans. (c)

Experienced climber Aron Ralston set out on a ____ (1) ____ hiking adventure, which proved to be a ____ (2) ____ event. Despite it being a common safety practice amongst climbers to inform others when undertaking unaccompanied hiking trips, Aron had not ____ (3) ____ anyone of his plans. During his climbing adventure Aron's right arm became pinned against the canyon wall by a 360 kg boulder. Aron was unable to free himself, and after six days of being ____ (4) ____ he made the decision to break the bones in his forearm and then amputate his arm below the elbow. Once free he made his way down a cliff and walked 8 km to seek assistance. Aron survived.

Q4) (a) suppressed (b) captive (c) trapped (d) entangled



0:20

Experienced climber Aron Ralston set out on a _____(1)_____ hiking adventure, which proved to be a _____(2)_____ event. Despite it being a common safety practice amongst climbers to inform others when undertaking unaccompanied hiking trips, Aron had not _____(3)_____ anyone of his plans. During his climbing adventure Aron's right arm became pinned against the canyon wall by a 360 kg boulder. Aron was unable to free himself, and after six days of being _____(4)_____ he made the decision to break the bones in his forearm and then amputate his arm below the elbow. Once free he made his way down a cliff and walked 8 km to seek assistance. Aron survived.

Q4) (a) suppressed (b) captive (c) trapped (d) entangled

Ans. (c)


ONE WORD SUBSTITUTION

DIRECTIONS

Choose the word which can be substituted for the given words/sentence :

Q) A person living permanently in a certain place

- (a) Resident
- (b) Native
- (c) Domicile
- (d) Subject




Q) A person living permanently in a certain place

- (a) Resident
- (b) Native
- (c) Domicile
- (d) Subject

Ans. (a)

Q) One who loves mankind is called

- (a) Optimist
- (b) Philanthropist
- (c) Optometrist
- (d) Truant




Q) One who loves mankind is called

- (a) Optimist
- (b) Philanthropist
- (c) Optometrist
- (d) Truant

Ans. (b)

Q) A Government run by a dictator is termed as

- (a) Autocracy
- (b) Democracy
- (c) Oligarchy
- (d) Theocracy




Q) A Government run by a dictator is termed as

- (a) Autocracy
- (b) Democracy
- (c) Oligarchy
- (d) Theocracy

Ans. (a)

Q) A remedy for all disease is

- (a) Medicine
- (b) Medical
- (c) Medica
- (d) Panacea




Q) A remedy for all disease is

- (a) Medicine
- (b) Medical
- (c) Medica
- (d) Panacea

Ans. (d)

Q) More than enough in amount or capacity

- (a) Derisory
- (b) Ample
- (c) Inadequate
- (d) Liberal




Q) More than enough in amount or capacity

- (a) Derisory
- (b) Ample
- (c) Inadequate
- (d) Liberal

Ans. (b)

Q) An office for which no salary is paid

- (a) Hospitable
- (b) Free
- (c) Honorary
- (d) Gratis




Q) An office for which no salary is paid

- (a) Hospitable
- (b) Free
- (c) Honorary
- (d) Gratis

Ans. (c)

Q) A handwriting which cannot be easily read

- (a) Illegible
- (b) Legible
- (c) Lucid
- (d) Edible




Q) A handwriting which cannot be easily read

- (a) Illegible
- (b) Legible
- (c) Lucid
- (d) Edible

Ans. (a)

Q) One who comes to settle in a country

- (a) Tourist
- (b) Emigrant
- (c) Immigrant
- (d) Visitor




Q) One who comes to settle in a country

- (a) Tourist
- (b) Emigrant
- (c) Immigrant
- (d) Visitor

Ans. (c)

Q) One who is habitually good to others:

- (a) Helper
- (b) Altruist
- (c) Angel
- (d) Humanitarian




Q) One who is habitually good to others:

- (a) Helper
- (b) Altruist
- (c) Angel
- (d) Humanitarian

Ans. (b)

Q) The cessation of warfare before signing a treaty:

- (a) Armistice
- (b) Truce
- (c) Ceasefire
- (d) Suspension



Q) The cessation of warfare before signing a treaty:

- (a) Armistice
- (b) Truce
- (c) Ceasefire
- (d) Suspension

Ans. (a)

AFCAT Exam Online Course 2022 – 2023

Start your AFCAT Exam preparation today with SSBCrackExams.

★★★★★ 5.0 (114)

Content 24

Search in bundle



FILTER BY TYPE



AFCAT 2 2022 Exam Overview

Course • 27 Lessons



Success Stories

Course • 39 Lessons



AFCAT 2 2022 Study Plan And Analysis

Course • 24 Lessons



Notifications & Exam Dates

Course • 182 Lessons



90 Days validity

[Change Validity](#)

₹3,999 ~~₹4,999~~ 20% OFF

BUY BUNDLE

START A FREE TRIAL

What's included

24 Courses


IDIOMS & PHRASES

DIRECTIONS

Which word or words explains the meaning of the following idioms :

Q) Lion's share

- (a) look angrily
- (b) major share
- (c) minor share
- (d) heart of the prey




Q) Lion's share

- (a) look angrily
- (b) major share
- (c) minor share
- (d) heart of the prey

Ans. (b)

Q) Bag and baggage

- (a) All the clothing
- (b) Without any belonging
- (c) Leave
- (d) With all one's belongings




Q) Bag and baggage

- (a) All the clothing
- (b) Without any belonging
- (c) Leave
- (d) With all one's belongings

Ans. (d)

Q) At arm's length

- (a) Length of arm
- (b) At a distance
- (c) Insult
- (d) Very near




Q) At arm's length

- (a) Length of arm
- (b) At a distance
- (c) Insult
- (d) Very near

Ans. (b)

Q) Lean and mean

- (a) To destroy something
- (b) To create something
- (c) Using only what is necessary
- (d) Not afraid dangerous situations




Q) Lean and mean

- (a) To destroy something
- (b) To create something
- (c) Using only what is necessary
- (d) Not afraid dangerous situations

Ans. (c)

Q) A cock and bull story

- (a) Interesting story
- (b) A detective story
- (c) An absurd tale
- (d) A relevant story




Q) A cock and bull story

- (a) Interesting story
- (b) A detective story
- (c) An absurd tale
- (d) A relevant story

Ans. (c)

Q) A bone of contention

- (a) Bone of lion
- (b) A reason for discord
- (c) Cause of friendship
- (d) Continued to bed



Q) A bone of contention

- (a) Bone of lion
- (b) A reason for discord
- (c) Cause of friendship
- (d) Continued to bed

Ans. (b)


Q) A hard nut to crack

(a) To be deceived

(b) Lazy

(c) To confirm

(d) A difficult problem



Q) A hard nut to crack

(a) To be deceived

(b) Lazy

(c) To confirm

(d) A difficult problem


Ans. (d)

SPOTTING ERRORS

DIRECTIONS

In each of the following questions, find out which part has an error.


Q) Hasan plays (a)/ both-cricket and billiards (b)/ at the national level. (c)/ No error
(d)



Q) Hasan plays (a)/ both-cricket and billiards (b)/ at the national level. (c)/ No error
(d)

Ans. (d)


Q) More you (a)/ think of it, (b)/ the worse it becomes.(c)/ No error (d)



Q) More you (a)/ think of it, (b)/ the worse it becomes.(c)/ No error (d)

Ans. (a)


Q) My father gave me (a)/ a pair of binocular (b)/ on my birthday. (c)/ No error (d)



Q) My father gave me (a)/ a pair of binocular (b)/ on my birthday. (c)/ No error (d)

Ans. (b)


Q) Kalidas is (a)/ a Shakespeare (b)/ of India. (c)/ No error. (d)



Q) Kalidas is (a)/ a Shakespeare (b)/ of India. (c)/ No error. (d)

Ans. (b)


Q) The teacher as well as his students, (a)/ all left (b)/ for the trip. (c)/ No error (d)



Q) The teacher as well as his students, (a)/ all left (b)/ for the trip. (c)/ No error (d)

Ans. (b)


Q) It was he who (a)/ came running in the house (b)/ with the news about the earthquake. (c)/ No Error (d)



Q) It was he who (a)/ came running in the house (b)/ with the news about the earthquake. (c)/ No Error (d)

Ans. (b)


Q) Riding across the battle field (a)/ the famous Bhishm (b)/ saw a large number of dead warriors. (c)/ No Error (d)



Q) Riding across the battle field (a)/ the famous Bhishm (b)/ saw a large number of dead warriors. (c)/ No Error (d)

Ans. (d)

Q) My Aunt (a)/ was first (b)/ to get a degree. (c)/ No Error (d)



Q) My Aunt (a)/ was first (b)/ to get a degree. (c)/ No Error (d)

Ans. (b)


FILL IN THE BLANKS

DIRECTIONS

Pick up the most effective word from the given words to fill in the blanks to make the sentence meaningfully complete.

Q) The human mind seems to have built-in _____ against original thought.

- (a) Prejudices
- (b) Ideas
- (c) Interests
- (d) Safeguards




Q) The human mind seems to have built-in _____ against original thought.

- (a) Prejudices
- (b) Ideas
- (c) Interests
- (d) Safeguards

Ans. (a)

Q) The statue _____ a global symbol of freedom

- (a) stands against
- (b) stands to
- (c) stands for
- (d) stands as



Q) The statue _____ a global symbol of freedom

(a) stands against

(b) stands to


(c) stands for

(d) stands as

Ans. (d)

Q) A child is the future of a family _____ nation.

- (a) just as
- (b) as a
- (c) like a
- (d) as well as of a




Q) A child is the future of a family _____ nation.

- (a) just as
- (b) as a
- (c) like a
- (d) as well as of a

Ans. (d)

Q) If strict security measures were taken, the tragedy might have been _____.

- (a) Restrained
- (b) Averted
- (c) Removed
- (d) Controlled



Q) If strict security measures were taken, the tragedy might have been _____.

- (a) Restrained
- (b) Averted
- (c) Removed
- (d) Controlled

Ans. (b)


Q) The deceased left _____ children.

(a) Behind

(b) For

(c) With

(d) By



Q) The deceased left _____ children.

(a) Behind

(b) For

(c) With

(d) By

Ans. (a)

1-YEAR FULL ACCESS SSB ONLINE COURSE 2022

START YOUR SSB INTERVIEW PREPARATION TODAY WITH SSBCRACKEXAMS

HOT & NEW



5 (132 ratings) 17,552 students enrolled

Includes:

 OIR Test

 PPDT

 Psychological Tests

 Personal Interview

 Group Tasks

 Conference

 Medical

 Live Class

 Success Stories

 Personal Guidance

 SSB Trends




SYNONYMS

DIRECTIONS

Choose the word which is nearest in meaning to the given word.

Q) ANIMATE

- (a) Kill
- (b) Dead
- (c) Energise
- (d) Calm




Q) ANIMATE

- (a) Kill
- (b) Dead
- (c) Energise
- (d) Calm

Ans. (c)

Q) NIGGARDLY

- (a) Penurious
- (b) Generous
- (c) Liberal
- (d) Nimbus




Q) NIGGARDLY

- (a) Penurious
- (b) Generous
- (c) Liberal
- (d) Nimbus

Ans. (a)

Q) DISCOMFIT

- (a) Litigate
- (b) Ease
- (c) Conflict
- (d) Frustrate



Q) DISCOMFIT

(a) Litigate

(b) Ease


(c) Conflict

(d) Frustrate

Ans. (d)

Q) ABSTINENCE

- (a) Synchronic
- (b) Torrential
- (c) Restraint
- (d) Gluttony




Q) ABSTINENCE

- (a) Synchronic
- (b) Torrential
- (c) Restraint
- (d) Gluttony

Ans. (c)

Q) APPRISE

- (a) Praise
- (b) Inform
- (c) Conceal
- (d) Assess




Q) APPRISE

- (a) Praise
- (b) Inform
- (c) Conceal
- (d) Assess

Ans. (b)

Q) GRUESOME

- (a) Sullen
- (b) Hideous
- (c) Exhausting
- (d) Insulting



Q) GRUESOME

- (a) Sullen
- (b) Hideous
- (c) Exhausting
- (d) Insulting

Ans. (b)


ANTONYMS

DIRECTIONS

Choose the word which is opposite in meaning to the given word.

Q) INSIPID

- (a) Tasty
- (b) Colourful
- (c) Colourless
- (d) Dull




Q) INSIPID

- (a) Tasty
- (b) Colourful
- (c) Colourless
- (d) Dull

Ans. (a)

Q) RELINQUISH

- (a) Relish
- (b) Continue
- (c) Vanish
- (d) Quench




Q) RELINQUISH

- (a) Relish
- (b) Continue
- (c) Vanish
- (d) Quench

Ans. (b)

Q) INDIGENTLY

- (a) Richly
- (b) Awfully
- (c) Completely
- (d) Diligently




Q) INDIGENTLY

- (a) Richly
- (b) Awfully
- (c) Completely
- (d) Diligently

Ans. (a)

Q) AUDACITY

- (a) Quivering
- (b) Patricide
- (c) Bravado
- (d) Cowardice




Q) AUDACITY

- (a) Quivering
- (b) Patricide
- (c) Bravado
- (d) Cowardice

Ans. (d)

Q) ELEVATION

- (a) Depression
- (b) Deflation
- (c) Depreciation
- (d) Recession




Q) ELEVATION

- (a) Depression
- (b) Deflation
- (c) Depreciation
- (d) Recession

Ans. (a)

Q) KNACK

- (a) Talent
- (b) Dullness
- (c) Dexterity
- (d) Balance



Q) KNACK

- (a) Talent
- (b) Dullness
- (c) Dexterity
- (d) Balance

Ans. (b)

AFCAT Exam Online Course 2022 – 2023

Start your AFCAT Exam preparation today with SSB Crack Exams.

★★★★★ 5.0 (114)

Content 24

Search in bundle



FILTER BY TYPE ▾



AFCAT 2 2022 Exam Overview

Course • 27 Lessons



Success Stories

Course • 39 Lessons



AFCAT 2 2022 Study Plan And Analysis

Course • 24 Lessons



Notifications & Exam Dates

Course • 182 Lessons



🕒 90 Days validity

[Change Validity](#)

₹3,999 ~~₹4,999~~ 20% OFF

BUY BUNDLE

START A FREE TRIAL

What's included

📁 24 Courses

Bundles 16[View All](#)

SSB Interview Online Course

17 Courses

₹3,999 ₹4,999 20% OFF



NDA Exam Online Course 2022

23 Courses

₹3,999 ₹4,999 20% OFF



CDS Exam Online Course 2022

39 Courses

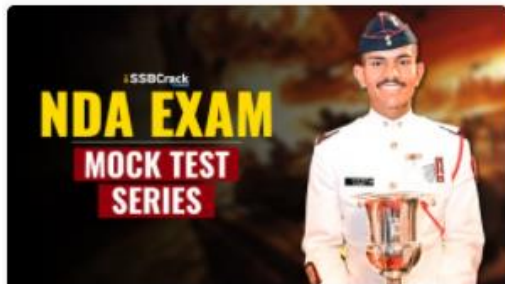
₹3,999 ₹4,999 20% OFF



AFCAT Exam Online Course 2022

23 Courses

₹3,999 ₹4,999 20% OFF

Test Series 07[View All](#)

NDA 2022 Mock Test Series

40 Tests

₹499 ₹999 50% OFF



CDS Exam 2022 Mock Test Series

30 Tests

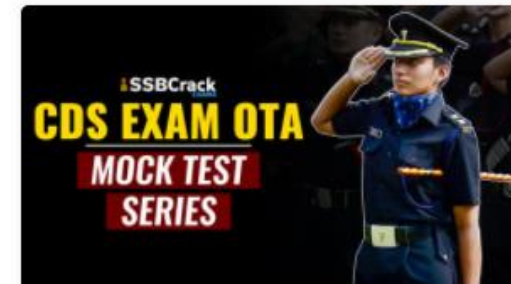
₹499 ₹999 50% OFF



AFCAT 2022 Mock Test Series

20 Tests

₹499 ₹999 50% OFF

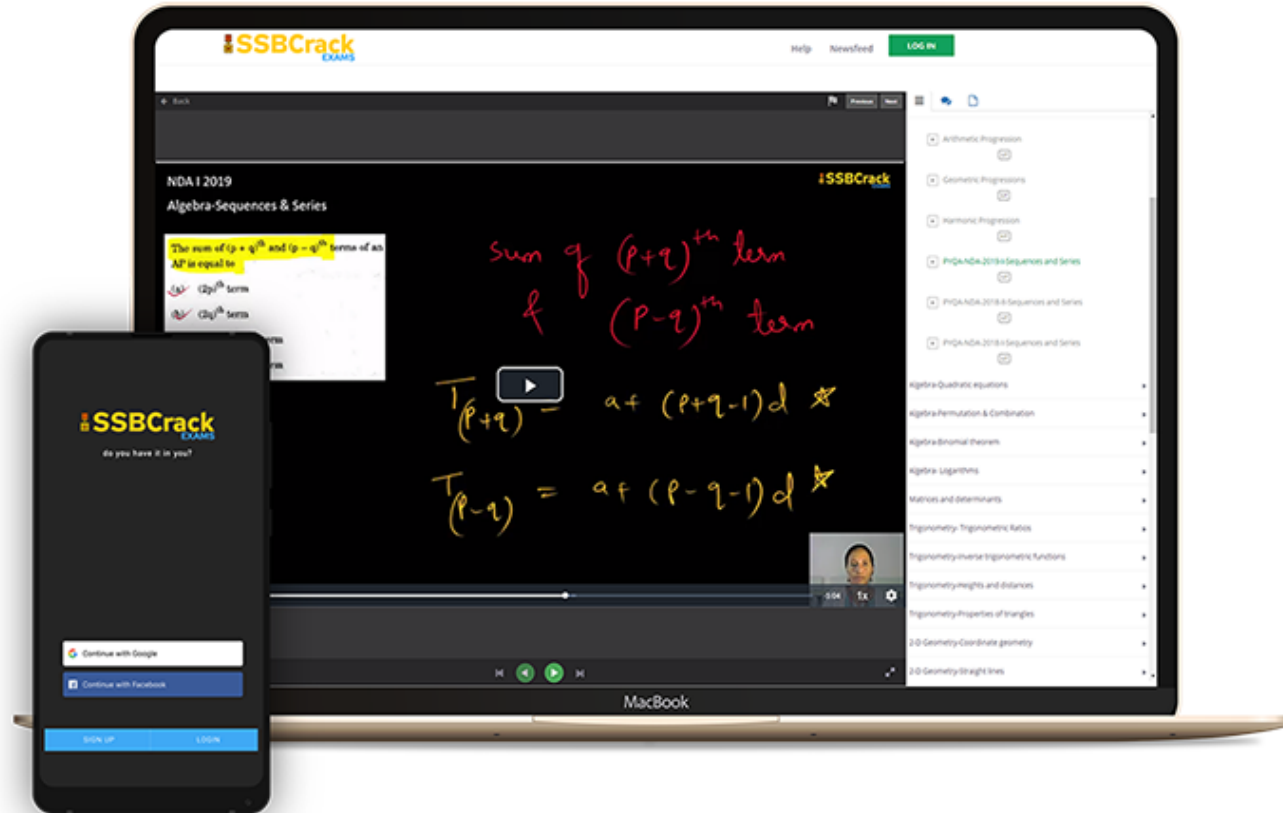


CDS Exam OTA 2022 Mock Test Series

20 Tests

₹499 ₹999 50% OFF

India's Most Popular Portal for Defence Exam Preparation



www.ssbcrackexams.com

CODE: WARRIOR10

get an extra **10%** off on all courses





AFCAT 2 2022



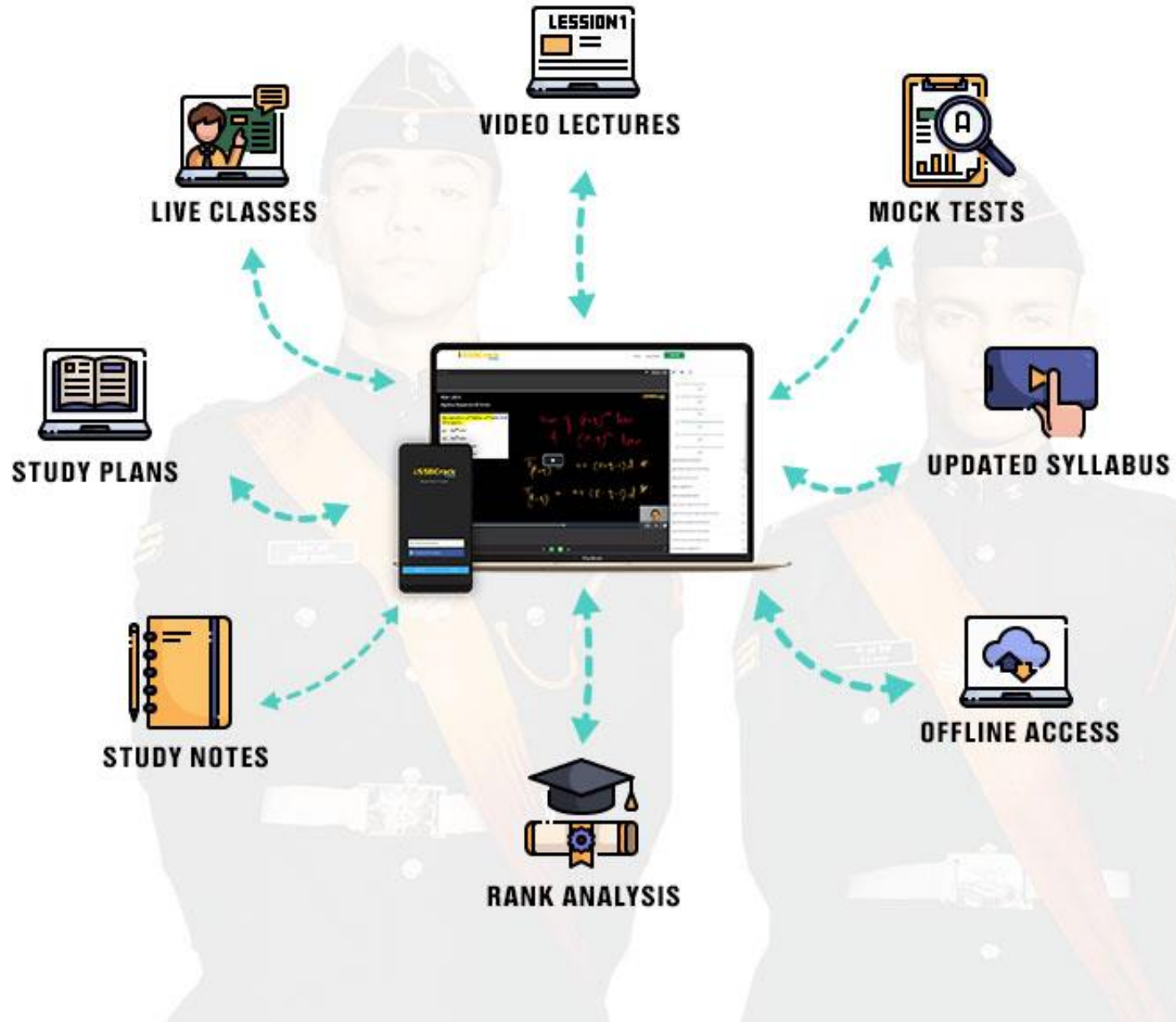
MEGA MARATHON

10 HRS

COMPLETE REVISION **LIVE**  **CLASS**

NUMERICAL ABILITY
GENERAL KNOWLEDGE

ENGLISH
REASONING



Choose from our Courses

SSB INTERVIEW ONLINE COURSE

USE CODE: "WARRIOR10"
FOR 10% OFF ON SSB COURSE

SSB Interview Online Course

17 courses ₹4999 **₹3999**



USE CODE: "WARRIOR10"
FOR 10% OFF ON NDA COURSE

NDA Exam Online Course
2022

23 courses ₹4999 **₹3999**



USE CODE: "WARRIOR10"
FOR 10% OFF ON CDS COURSE

CDS Exam Online Course
2022

39 courses ₹4999 **₹3999**



USE CODE: "WARRIOR10"
FOR 10% OFF ON AFCAT COURSE

AFCAT Exam Online Course
2022

23 courses ₹4999 **₹3999**



USE CODE: "WARRIOR10"
FOR 10% OFF ON OTA COURSE

CDS OTA Exam Online Course
2022

33 courses ₹4499 **₹3499**



USE CODE: "WARRIOR10"
FOR 10% OFF ON TA COURSE

Territorial Army Exam
Online Course 2022

45 courses ₹4999 **₹3999**



USE CODE: "WARRIOR10"
FOR 10% OFF ON MNS COURSE

MNS Exam Online Course
2022

21 courses ₹4999 **₹3999**



USE CODE: "WARRIOR10"
FOR 10% OFF ON ACC COURSE

ACC Exam Online Course
2022

24 courses ₹5999 **₹4999**

[View All](#)

Bundles 16[View All](#)

SSB Interview Online Course

17 Courses

₹3,999 ₹4,999 20% OFF



NDA Exam Online Course 2022

23 Courses

₹3,999 ₹4,999 20% OFF



CDS Exam Online Course 2022

39 Courses

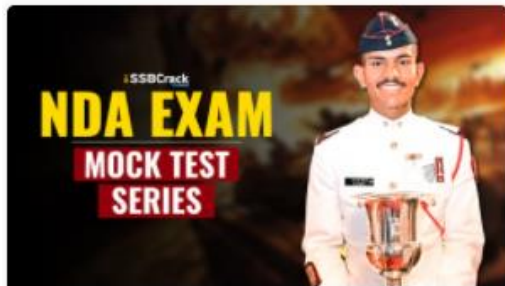
₹3,999 ₹4,999 20% OFF



AFCAT Exam Online Course 2022

23 Courses

₹3,999 ₹4,999 20% OFF

Test Series 07[View All](#)

NDA 2022 Mock Test Series

40 Tests

₹499 ₹999 50% OFF



CDS Exam 2022 Mock Test Series

30 Tests

₹499 ₹999 50% OFF



AFCAT 2022 Mock Test Series

20 Tests

₹499 ₹999 50% OFF

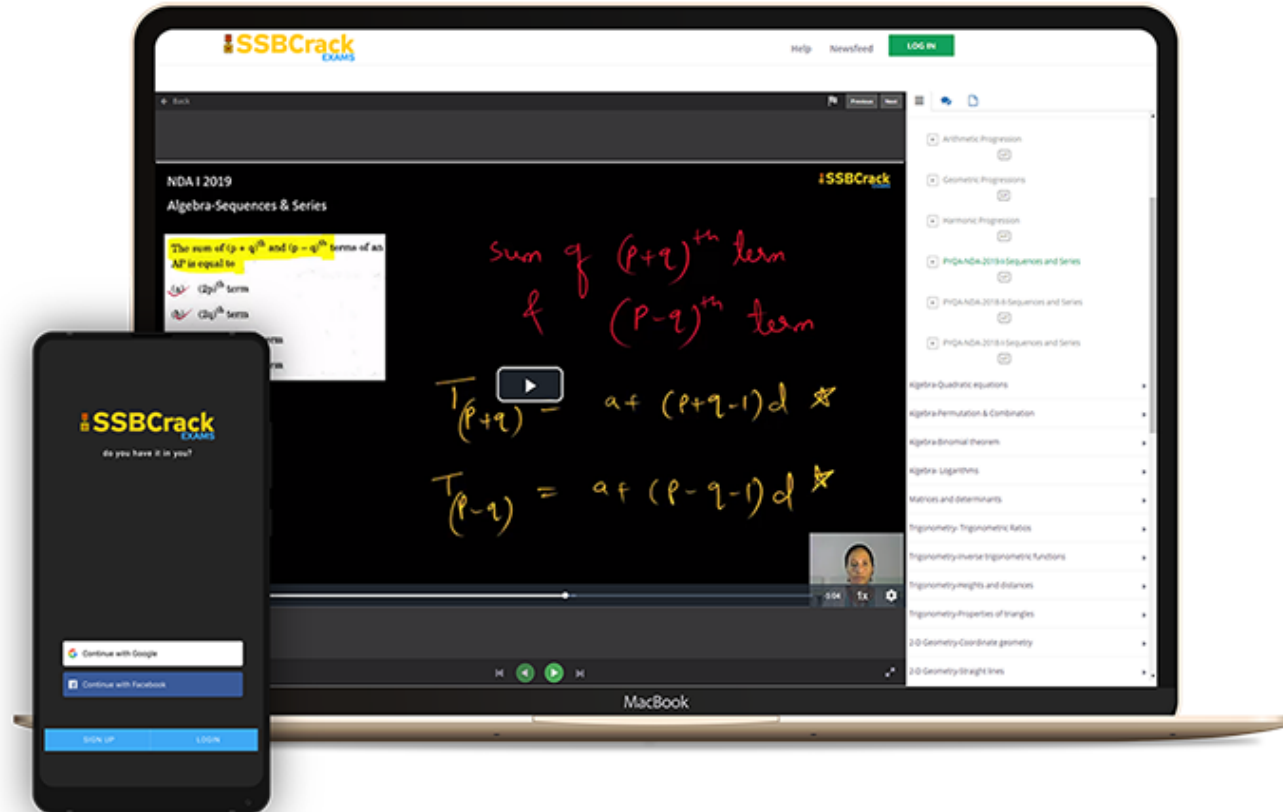


CDS Exam OTA 2022 Mock Test Series

20 Tests

₹499 ₹999 50% OFF

India's Most Popular Portal for Defence Exam Preparation



www.ssbcrackexams.com

CODE: WARRIOR10

get an extra **10%** off on all courses




Q) If 15% of A is double of 30% of B , then what is the ratio of A to B ?

(a) 1 : 2

(b) 2 : 1

(c) 1 : 4

(d) 4 : 1



Q) If 15% of A is double of 30% of B , then what is the ratio of A to B ?

(a) 1 : 2


(b) 2 : 1

(c) 1 : 4

(d) 4 : 1

Ans: (d)

- Q) A sum triples in ten years under compound interest at a certain rate of interest, the interest is being compounded annually. In how many years, it would become nine times?
- (a) 20 years (b) 30 years
(c) 40 years (d) 50 years




Q) A wire of length 6 m is stretched such that its radius is reduced by 20%. Which one of the following is the value of increase in its length?

- | | |
|------------|------------|
| (a) 50% | (b) 56.25% |
| (c) 62.25% | (d) 75% |

Ans: (b)

- Q) There are 350 boys in the first three standards. The ratio of the number of boys in first and second standards is 2 : 3, while that of boys in second and third standards is 4 : 5. What is the total number of boys in first and third standards?
- (a) 302 (b) 280 (c) 242 (d) 230



- Q) There are 350 boys in the first three standards. The ratio of the number of boys in first and second standards is 2 : 3, while that of boys in second and third standards is 4 : 5. What is the total number of boys in first and third standards?
- (a) 302 (b) 280 (c) 242 (d) 230

Ans: (d)


Q) A tree is at present 9 feet tall, If every year it grows $\frac{1}{9}$ th of its height, what will be the height of the tree after three years.

(a) 12 feet

(b) 12.34 feet

(c) 13 feet

(d) 13.10 feet



Q) A tree is at present 9 feet tall, If every year it grows $\frac{1}{9}$ th of its height, what will be the height of the tree after three years.

(a) 12 feet

(b) 12.34 feet


(c) 13 feet

(d) 13.10 feet

Ans: (b)

Q) A, B and C start a business by investing ₹ 7,000, ₹ 8,000 and ₹ 12,000 respectively. After a year B gets ₹ 3,200 as his share of profit. What is the total profit.

- (a) ₹ 16,600 (b) ₹ 10,000
(c) ₹ 21,600 (d) ₹ 10,800



Q) A, B and C start a business by investing ₹ 7,000, ₹ 8,000 and ₹ 12,000 respectively. After a year B gets ₹ 3,200 as his share of profit. What is the total profit.

- | | |
|--------------|--------------|
| (a) ₹ 16,600 | (b) ₹ 10,000 |
| (c) ₹ 21,600 | (d) ₹ 10,800 |

Ans: (b)


Q) The smallest number which when added to 10000 becomes divisible by 20, 24 and 30 is

(a) 120

(b) 800

(c) 80

(d) 83



Q) The smallest number which when added to 10000 becomes divisible by 20, 24 and 30 is

(a) 120

(b) 800


(c) 80

(d) 83

Ans: (c)

Q) The average age of Raj and his father is 45 years. If the ages of the father and the grandfather of Raj are respectively two and three times that of Raj, then the age of Raj's grandfather is

- (a) 75 years (b) 90 years
(c) 81 years (d) 84 years



Q) The average age of Raj and his father is 45 years. If the ages of the father and the grandfather of Raj are respectively two and three times that of Raj, then the age of Raj's grandfather is

(a) 75 years

(b) 90 years

(c) 81 years

(d) 84 years

Ans: (b)

Q) In a stock clearance sale, a shopkeeper gives 40% off on all his items. He incurs a loss of 25% by selling an item of marked price ₹ 2,000. Which one of the following is the cost price of this item?

- (a) ₹ 1,800 (b) ₹ 1,200
(c) ₹ 1,600 (d) ₹ 1,400



0:20


Q) A and B together can finish a job in 20 days. B and C together can finish the same job in 30 days. If A and C together can finish it in 24 days, in how many days can A alone finish the job?

(a) $35\frac{2}{7}$ days

(b) $37\frac{1}{7}$ days

(c) $34\frac{2}{7}$ days

(d) $33\frac{2}{7}$ days



Q) A and B together can finish a job in 20 days. B and C together can finish the same job in 30 days. If A and C together can finish it in 24 days, in how many days can A alone finish the job?

(a) $35\frac{2}{7}$ days

(b) $37\frac{1}{7}$ days

(c) $34\frac{2}{7}$ days

(d) $33\frac{2}{7}$ days

Ans: (c)

AFCAT Exam Online Course 2022 – 2023

Start your AFCAT Exam preparation today with SSBCrackExams.

★★★★★ 5.0 (114)

Content 24

Search in bundle



FILTER BY TYPE



AFCAT 2 2022 Exam Overview

Course • 27 Lessons



Success Stories

Course • 39 Lessons



AFCAT 2 2022 Study Plan And Analysis

Course • 24 Lessons



Notifications & Exam Dates

Course • 182 Lessons



90 Days validity

[Change Validity](#)

₹3,999 ~~₹4,999~~ 20% OFF

BUY BUNDLE


START A FREE TRIAL

What's included

24 Courses

Q) The difference of compound interest and simple interest of a sum of money at the rate of 5% per year for 2 years is ₹ 250. The sum is

- (a) ₹ 1,00,000 (b) ₹ 80,000
(c) ₹ 40,000 (d) ₹ 1,20,000




Q) The difference of compound interest and simple interest of a sum of money at the rate of 5% per year for 2 years is ₹ 250. The sum is

- (a) ₹ 1,00,000 (b) ₹ 80,000
(c) ₹ 40,000 (d) ₹ 1,20,000

Ans: (a)

- Q) A boy went to his school at a speed of 12 km/hr and returned to his house at a speed of 8 km/hr. If he has taken 50 minutes for the whole journey, what was the total distance walked?
- (a) 4 km (b) 8 km (c) 16 km (d) 20 km



- Q) A boy went to his school at a speed of 12 km/hr and returned to his house at a speed of 8 km/hr. If he has taken 50 minutes for the whole journey, what was the total distance walked?
- (a) 4 km (b) 8 km (c) 16 km (d) 20 km

Ans: (b)

Q) $\frac{5\text{th}}{9}$ part of the population in a village are males. If 30% of the males are married, the percentage of unmarried females in the total population is

- (a) $20\frac{2}{9}$ (b) $27\frac{2}{9}$ (c) $27\frac{7}{9}$ (d) $29\frac{2}{9}$



0:20

Q) $\frac{5\text{th}}{9}$ part of the population in a village are males. If 30% of the males are married, the percentage of unmarried females in the total population is

- (a) $20\frac{2}{9}$ (b) $27\frac{2}{9}$ (c) $27\frac{7}{9}$ (d) $29\frac{2}{9}$

Ans: (c)


Q) The ratio of monthly incomes of A and B is $7 : 10$. The ratio of their expenditures is $2 : 3$. If each A and B saves ₹1,000 per month, then what will be the monthly income of B .

(a) ₹ 9,000

(b) ₹ 10,000

(c) ₹ 15,000

(d) ₹ 12,000



Q) The ratio of monthly incomes of A and B is $7 : 10$. The ratio of their expenditures is $2 : 3$. If each A and B saves ₹1,000 per month, then what will be the monthly income of B .

(a) ₹ 9,000

(b) ₹ 10,000

(c) ₹ 15,000

(d) ₹ 12,000

Ans: (b)

Q) How much water is to be added to 75 ml of alcohol that the mixture contains 25% of alcohol?

(a) 100 ml

(b) 225 ml

(c) 250 ml

(d) 125 ml

Ans: (b)

Q) Eight metallic balls of one centimetre radius each are melted into one ball.


The diameter of the new ball is

- | | |
|----------|----------|
| (a) 2 cm | (b) 6 cm |
| (c) 4 cm | (d) 1 cm |

Ans: (c)

Q) In a 100 m race, A runs at a speed of $\frac{5}{3}$ m/s. If A gives a start of 4 m to B and still beats him by 12 seconds, what is the speed of B ?

- (a) $\frac{5}{4}$ m/s (b) $\frac{7}{5}$ m/s (c) $\frac{4}{3}$ m/s (d) $\frac{6}{5}$ m/s




Q) In a 100 m race, A runs at a speed of $\frac{5}{3}$ m/s. If A gives a start of 4 m to B and still beats him by 12 seconds, what is the speed of B ?

- (a) $\frac{5}{4}$ m/s (b) $\frac{7}{5}$ m/s (c) $\frac{4}{3}$ m/s (d) $\frac{6}{5}$ m/s

Ans: (c)

- Q) The mean marks obtained by 300 students in a subject are 60. The mean of top 100 students was found to be 80 and the mean of last 100 students was found to be 50. The mean marks of the remaining 100 students are
- (a) 70 (b) 65 (c) 60 (d) 50




- Q) The mean marks obtained by 300 students in a subject are 60. The mean of top 100 students was found to be 80 and the mean of last 100 students was found to be 50. The mean marks of the remaining 100 students are
- (a) 70 (b) 65 (c) 60 (d) 50

Ans: (d)

Q) 25 kg of alloy X is mixed with 125 kg of alloy Y . If the amount of lead and tin in the alloy X is in the ratio 1 : 2 and the amount of lead and tin in the alloy Y is in the ratio 2 : 3, then what is the ratio of lead to tin in the mixture?

- (a) 1 : 2 (b) 2 : 3 (c) 3 : 5 (d) 7 : 11



Q) 25 kg of alloy X is mixed with 125 kg of alloy Y . If the amount of lead and tin in the alloy X is in the ratio 1 : 2 and the amount of lead and tin in the alloy Y is in the ratio 2 : 3, then what is the ratio of lead to tin in the mixture?

- (a) 1 : 2 (b) 2 : 3 (c) 3 : 5 (d) 7 : 11

Ans: (d)

1-YEAR FULL ACCESS SSB ONLINE COURSE 2022

START YOUR SSB INTERVIEW PREPARATION TODAY WITH SSBCRACKEXAMS

HOT & NEW



5 (132 ratings) 17,552 students enrolled

Includes:

 OIR Test

 PPDT

 Psychological Tests

 Personal Interview

 Group Tasks

 Conference

 Medical

 Live Class

 Success Stories


 Personal Guidance

 SSB Trends



Q) Ten (10) years before, the ages of a mother and her daughter were in the ratio 3 : 1. In another 10 years from now, the ratio of their ages will be 13 : 7. What are their present ages?

- (a) 39 years, 21 years (b) 55 years, 25 years
(c) 75 years, 25 years (d) 49 years, 31 years




- Q) Ten (10) years before, the ages of a mother and her daughter were in the ratio 3 : 1. In another 10 years from now, the ratio of their ages will be 13 : 7. What are their present ages?
- (a) 39 years, 21 years (b) 55 years, 25 years
(c) 75 years, 25 years (d) 49 years, 31 years

Ans: (b)

Q) 30 men can complete a job in 40 days. However, after 24 days some men out of the assigned 30 left the job. The remaining people took another 40 days to complete the job. The number of men who left the job is

- (a) 24 (b) 18 (c) 12 (d) 6




- Q) 30 men can complete a job in 40 days. However, after 24 days some men out of the assigned 30 left the job. The remaining people took another 40 days to complete the job. The number of men who left the job is
- (a) 24 (b) 18 (c) 12 (d) 6

Ans: (b)

Q) An article is sold at a profit of 32%. If the cost price is increased by 20% and the sale price remains the same, then the profit percentage becomes

- (a) 10% (b) 12% (c) 15% (d) 20%



Q) An article is sold at a profit of 32%. If the cost price is increased by 20% and the sale price remains the same, then the profit percentage becomes

- (a) 10% (b) 12% (c) 15% (d) 20%

Ans: (a)


Q) If 35% of a number is 416 more than 27% of the same number, then the number is

(a) 5200

(b) 2600

(c) 3900

(d) 3328



Q) If 35% of a number is 416 more than 27% of the same number, then the number is

(a) 5200


(b) 2600

(c) 3900

(d) 3328

Ans: (a)


- Q) A thief is spotted by a policeman from a distance of 100 m. When the policeman starts the chase, the thief also starts running. If the speed of the thief is 8 km/hour and that of the policeman is 10 km/hour, then how far will the thief have to run before he is overtaken?
- (a) 200 m (b) 300 m (c) 400 m (d) 500 m



- Q) A thief is spotted by a policeman from a distance of 100 m. When the policeman starts the chase, the thief also starts running. If the speed of the thief is 8 km/hour and that of the policeman is 10 km/hour, then how far will the thief have to run before he is overtaken?
- (a) 200 m (b) 300 m (c) 400 m (d) 500 m

Ans: (c)

- Q) A small company pays each of its 5 category 'C' workers ₹ 20,000, each of its 3 category 'B' workers ₹ 25,000 and a category 'A' worker ₹ 65,000. The number of workers earning less than the mean salary is
- (a) 8 (b) 5 (c) 4 (d) 3



- Q) A small company pays each of its 5 category 'C' workers ₹ 20,000, each of its 3 category 'B' workers ₹ 25,000 and a category 'A' worker ₹ 65,000. The number of workers earning less than the mean salary is
- (a) 8 (b) 5 (c) 4 (d) 3

Ans: (a)


Q) If $a\%$ of $a + b\%$ of $b = 2\%$ of ab , then what percent of a is b ?

(a) 50%

(b) 75%

(c) 100%

(d) Cannot be determined



Q) If $a\%$ of $a + b\%$ of $b = 2\%$ of ab , then what percent of a is b ?

(a) 50%


(b) 75%

(c) 100%

(d) Cannot be determined

Ans: (c)

- Q) Sudhir purchased a chair with three consecutive discounts of 20%, 12.5% and 5%. The actual deduction will be
- (a) 33.5% (b) 30% (c) 32% (d) 35%



Q) Sudhir purchased a chair with three consecutive discounts of 20%, 12.5% and 5%. The actual deduction will be
(a) 33.5% (b) 30% (c) 32% (d) 35%

Ans: (a)

Q) What is the value of the following?

$$\frac{(5 \cdot 4)^3 - 0.064}{(5 \cdot 4)^2 + 2 \cdot 16 + 0.16}$$

- (a) 4 (b) 4.4
(c) 5 (d) 5.4

0:20

Q) What is the value of the following?

$$\frac{(5 \cdot 4)^3 - 0 \cdot 064}{(5 \cdot 4)^2 + 2 \cdot 16 + 0 \cdot 16}$$

(a) 4

(b) 4.4

(c) 5

(d) 5.4

Ans: (c)

AFCAT Exam Online Course 2022 – 2023

Start your AFCAT Exam preparation today with SSB Crack Exams.

★★★★★ 5.0 (114)

Content 24

Search in bundle



FILTER BY TYPE



AFCAT 2 2022 Exam Overview

Course • 27 Lessons



Success Stories

Course • 39 Lessons



AFCAT 2 2022 Study Plan And Analysis

Course • 24 Lessons



Notifications & Exam Dates

Course • 182 Lessons



90 Days validity

[Change Validity](#)

₹3,999 ~~₹4,999~~ 20% OFF

BUY BUNDLE


START A FREE TRIAL

What's included

24 Courses

Q) If 15 men take 21 days of 8 hours each to do a piece of work, then what is the number of days of 6 hours each that 21 women would take, if 3 women would do as much work as 2 men?

- (a) 18 (b) 20 (c) 25 (d) 30



Q) If 15 men take 21 days of 8 hours each to do a piece of work, then what is the number of days of 6 hours each that 21 women would take, if 3 women would do as much work as 2 men?

(a) 18

(b) 20

(c) 25

(d) 30

Ans: (d)

Q) If 78 is divided into 3 parts which are proportional to

$1, \frac{1}{3}, \frac{1}{6}$, then the middle part is

(a) $\frac{28}{3}$

(b) 13

(c) $\frac{52}{3}$

(d) $\frac{55}{3}$



0:20

Q) If 78 is divided into 3 parts which are proportional to

$1, \frac{1}{3}, \frac{1}{6}$, then the middle part is

(a) $\frac{28}{3}$

(b) 13

(c) $\frac{52}{3}$

(d) $\frac{55}{3}$

Ans: (c)


Q) Rajendra bought a mobile with 25% discount on the selling price. If the mobile cost him ₹ 4,875, what is the original selling price of the mobile?

(a) ₹ 6,300

(b) ₹ 6,400

(c) ₹ 6,500

(d) ₹ 6,600



Q) Rajendra bought a mobile with 25% discount on the selling price. If the mobile cost him ₹ 4,875, what is the original selling price of the mobile?

(a) ₹ 6,300

(b) ₹ 6,400


(c) ₹ 6,500

(d) ₹ 6,600

Ans: (c)

Q) According to Mr. Sharma's will, half of his property goes to his wife and the rest is equally divided between his two sons, Ravi and Raj. Some years later, Ravi dies and leaves half of his property to his widow and rest to his brother Raj. When Raj dies he leaves half of his property to his widow and remaining to his mother, who is still alive. The mother now owns ₹ 88,000 worth of the property. The total worth of the property of Mr. Sharma was

- (a) ₹ 1,00,000 (b) ₹ 1,24,000
(c) ₹ 1,28,000 (d) ₹ 1,32,000




Q) According to Mr. Sharma's will, half of his property goes to his wife and the rest is equally divided between his two sons, Ravi and Raj. Some years later, Ravi dies and leaves half of his property to his widow and rest to his brother Raj. When Raj dies he leaves half of his property to his widow and remaining to his mother, who is still alive. The mother now owns ₹ 88,000 worth of the property. The total worth of the property of Mr. Sharma was

- (a) ₹ 1,00,000 (b) ₹ 1,24,000
(c) ₹ 1,28,000 (d) ₹ 1,32,000

Ans: (c)

Q) Seats for Mathematics, Physics and Biology in a school are in the ratio 5 : 7 : 8. There is a proposal to increase these seats by 40%, 50% and 75% respectively. What will be the ratio of increased seats?

- (a) 2 : 3 : 4 (b) 6 : 7 : 8
(c) 6 : 8 : 9 (d) None of these



Q) Seats for Mathematics, Physics and Biology in a school are in the ratio 5 : 7 : 8. There is a proposal to increase these seats by 40%, 50% and 75% respectively. What will be the ratio of increased seats?

- (a) 2 : 3 : 4 (b) 6 : 7 : 8
(c) 6 : 8 : 9 (d) None of these

Ans: (a)


Q) A sum of ₹ 8,400 was taken as a loan. This is to be paid in two equal instalments. If the rate of interest is 10% per annum, compounded annually, then the value of each instalment is

(a) ₹ 4,200

(b) ₹ 4,480

(c) ₹ 4,840

(d) None of the above



Q) A sum of ₹ 8,400 was taken as a loan. This is to be paid in two equal instalments. If the rate of interest is 10% per annum, compounded annually, then the value of each instalment is

(a) ₹ 4,200

(b) ₹ 4,480

(c) ₹ 4,840

(d) None of the above

Ans: (c)

Q) If

$$a + b = 2, \quad \frac{1}{a} + \frac{1}{b} = 2$$

then what is the value of $a^3 + b^3$?

(a) 2

(b) 4

(c) 6

(d) 8

0:20

Q) If

$$a + b = 2, \quad \frac{1}{a} + \frac{1}{b} = 2$$

then what is the value of $a^3 + b^3$?

(a) 2

(b) 4


(c) 6

(d) 8

Ans: (a)

Q) If 5 men can do a piece of work in 10 days and 12 women can do the same work in 15 days, the number of days required to complete the work by 5 men and 6 women is

- (a) $7\frac{1}{2}$ days (b) 8 days (c) $9\frac{1}{2}$ days (d) 12 days




Q) If 5 men can do a piece of work in 10 days and 12 women can do the same work in 15 days, the number of days required to complete the work by 5 men and 6 women is

- (a) $7\frac{1}{2}$ days (b) 8 days (c) $9\frac{1}{2}$ days (d) 12 days

Ans: (a)

- Q) A fruit seller has a certain number of mangoes of which 5% are rotten. He sells 75% of the remainder and he is left with 95 mangoes. How many mangoes did he have originally?
- (a) 500 (b) 450 (c) 400 (d) 350



- Q) A fruit seller has a certain number of mangoes of which 5% are rotten. He sells 75% of the remainder and he is left with 95 mangoes. How many mangoes did he have originally?
- (a) 500 (b) 450 (c) 400 (d) 350

Ans: (c)

Q) A car travels from A to B at a speed of 40 km/hr, travels back from B to A at a speed of 30 km/hr and again goes from A to B at a speed of 60 km/hr. What is the average speed of the car?

- (a) $\frac{130}{3}$ km/hr (b) 42 km/hr
(c) 40 km/hr (d) $\frac{125}{3}$ km/hr



0:20

Q) A car travels from A to B at a speed of 40 km/hr, travels back from B to A at a speed of 30 km/hr and again goes from A to B at a speed of 60 km/hr. What is the average speed of the car?

- (a) $\frac{130}{3}$ km/hr (b) 42 km/hr
(c) 40 km/hr (d) $\frac{125}{3}$ km/hr

Ans: (c)

1-YEAR FULL ACCESS SSB ONLINE COURSE 2022

START YOUR SSB INTERVIEW PREPARATION TODAY WITH SSBCRACKEXAMS

HOT & NEW



5 (132 ratings) 17,552 students enrolled

Includes:

 OIR Test

 PPDT

 Psychological Tests

 Personal Interview

 Group Tasks

 Conference

 Medical

 Live Class

 Success Stories

 Personal Guidance

 SSB Trends



Q) If the sum of the squares of three consecutive natural numbers is 110, then the sum of their cubes is

- (a) 625 (b) 654 (c) 684 (d) 725

0:20

Q) If the sum of the squares of three consecutive natural numbers is 110, then the sum of their cubes is

- (a) 625 (b) 654 (c) 684 (d) 725

Ans: (c)

Q) A cyclist covers his first 20 km at an average speed of 40 kmph, another 10 km at an average speed of 10 kmph and the last 30 km at an average speed of 40 kmph. Then the average speed of the entire journey is

- (a) 20 kmph (b) 26.67 kmph
(c) 28.24 kmph (d) 30 kmph



0:20

Q) A train moving with a speed of 60 km per hour crosses an electric pole in 30 seconds. What is the length of the train in metres?

(a) 300

(b) 400

(c) 500

(d) 600

0:20

Q) A train moving with a speed of 60 km per hour crosses an electric pole in 30 seconds. What is the length of the train in metres?

(a) 300

(b) 400

(c) 500

(d) 600

Ans: (c)

Q) The price of table depreciates every year by 20%. If the value of the table after 2 years will be ₹ 32000, then what is the present price (in ₹) of the table?

- (a) 48000 (b) 44000 (c) 50000 (d) 51000

0:20

- Q) The price of table depreciates every year by 20%. If the value of the table after 2 years will be ₹ 32000, then what is the present price (in ₹) of the table?
- (a) 48000 (b) 44000 (c) 50000 (d) 51000

Ans: (c)

Q) Marshall, Randy and Roger have some coins. Marshall's 5 times coin is equal with Randy's 8 times coin. Marshall's 8 times coin is equal with Roger's 5 times coin. Find the minimum coin the three have in total.

- (a) 21
(c) 90

- (b) 129
(d) None of these



0:20

Q) Marshall, Randy and Roger have some coins. Marshall's 5 times coin is equal with Randy's 8 times coin. Marshall's 8 times coin is equal with Roger's 5 times coin. Find the minimum coin the three have in total.

(a) 21

(b) 129

(c) 90

(d) None of these

Ans: (b)

Q) Average weight of 15 students increased by 1.5 kg when one person of 40 kg is replaced by a new man. Then weight of the new man is

- (a) 62.5 kg (b) 58.5 kg
(c) 72.5 kg (d) 54.5 kg

0:20

Q) Average weight of 15 students increased by 1.5 kg when one person of 40 kg is replaced by a new man. Then weight of the new man is

- | | |
|-------------|-------------|
| (a) 62.5 kg | (b) 58.5 kg |
| (c) 72.5 kg | (d) 54.5 kg |

Ans: (a)

Q) If $\sqrt{2} = 1.4142$, find the value of

$$2\sqrt{2} + \sqrt{2} + \frac{1}{2 + \sqrt{2}} + \frac{1}{\sqrt{2} - 2}$$

- (a) 1.4144 (b) 2.8284
(c) 28.284 (d) 2.4142



0:20

Q)

$$x + \frac{1}{x} = \frac{5}{2}$$

then what is the value of the following

$$\frac{5x}{7x^2 - 3x + 7}$$

(a) $\frac{3}{7}$

(b) $\frac{5}{12}$

(c) $\frac{3}{14}$

(d) $\frac{10}{29}$

0:20

Q)

$$x + \frac{1}{x} = \frac{5}{2}$$

then what is the value of the following

$$\frac{5x}{7x^2 - 3x + 7}$$

(a) $\frac{3}{7}$

(b) $\frac{5}{12}$

(c) $\frac{3}{14}$

(d) $\frac{10}{29}$

Ans: (d)

Q) The sum of two numbers is 36 and their H.C.F and L.C.M. are 3 and 105 respectively. The sum of the reciprocals of two numbers is

(a) $\frac{2}{35}$

(b) $\frac{3}{25}$

(c) $\frac{4}{35}$

(d) $\frac{2}{25}$



0:20

Q) The sum of two numbers is 36 and their H.C.F and L.C.M. are 3 and 105 respectively. The sum of the reciprocals of two numbers is

(a) $\frac{2}{35}$

(b) $\frac{3}{25}$

(c) $\frac{4}{35}$

(d) $\frac{2}{25}$

Ans: (c)

1-YEAR FULL ACCESS SSB ONLINE COURSE 2022

START YOUR SSB INTERVIEW PREPARATION TODAY WITH SSBCRACKEXAMS

HOT & NEW



5 (132 ratings) 17,552 students enrolled

Includes:

 OIR Test

 PPDT

 Psychological Tests

 Personal Interview

 Group Tasks

 Conference

 Medical

 Live Class

 Success Stories

 Personal Guidance

 SSB Trends



AFCAT Exam Online Course 2022 – 2023

Start your AFCAT Exam preparation today with SSB Crack Exams.

★★★★★ 5.0 (114)

Content 24

Search in bundle



FILTER BY TYPE ▾



AFCAT 2 2022 Exam Overview

Course • 27 Lessons



Success Stories

Course • 39 Lessons



AFCAT 2 2022 Study Plan And Analysis

Course • 24 Lessons



Notifications & Exam Dates

Course • 182 Lessons



🕒 90 Days validity

[Change Validity](#)

₹3,999 ~~₹4,999~~ 20% OFF

BUY BUNDLE

START A FREE TRIAL

What's included


📁 24 Courses

Bundles 16[View All](#)

SSB Interview Online Course

17 Courses

₹3,999 ₹4,999 20% OFF



NDA Exam Online Course 2022

23 Courses

₹3,999 ₹4,999 20% OFF



CDS Exam Online Course 2022

39 Courses

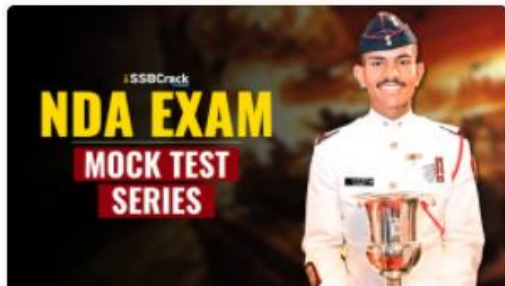
₹3,999 ₹4,999 20% OFF



AFCAT Exam Online Course 2022

23 Courses

₹3,999 ₹4,999 20% OFF

Test Series 07[View All](#)

NDA 2022 Mock Test Series

40 Tests

₹499 ₹999 50% OFF



CDS Exam 2022 Mock Test Series

30 Tests

₹499 ₹999 50% OFF



AFCAT 2022 Mock Test Series

20 Tests

₹499 ₹999 50% OFF

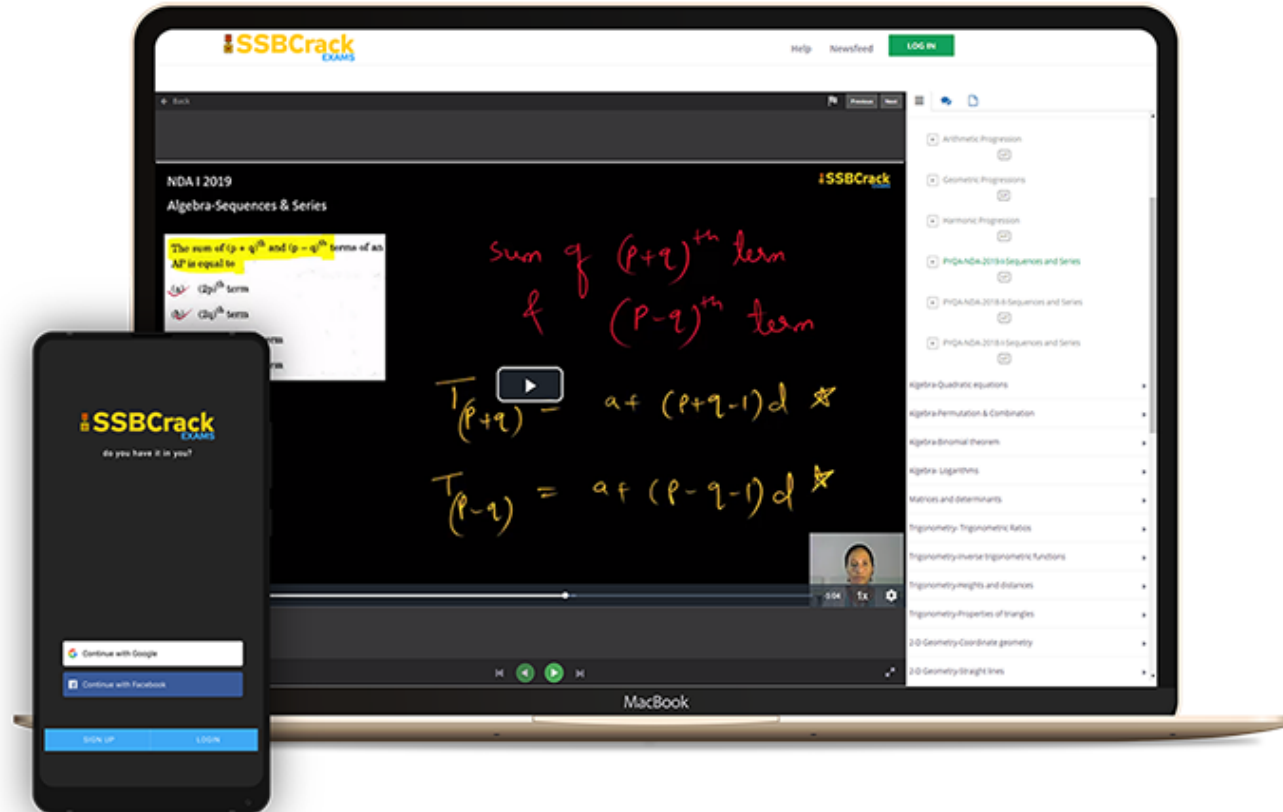


CDS Exam OTA 2022 Mock Test Series

20 Tests

₹499 ₹999 50% OFF

India's Most Popular Portal for Defence Exam Preparation



www.ssbcrackexams.com













CODE: WARRIOR10

get an extra **10%** off on all courses



Courses

ACC (1) AFCAT (1) AIRMEN (2) CAPF (1) CDS EXAM (2) INET OFFICER (1) MNS (1) MOCK TEST (3) NDA EXAM (1) PC(SL) (1) SCO (1) SSB INTERVIEW (1) TERRITORIAL ARMY (1)

<p>HIGHEST RATED</p>  <p>617 PEOPLE ONLINE NOW</p> <p>CDS Exam Online Course 2021 – 2022</p> <p>★★★★★ 5 (80)</p> <p>₹ 4,999.00</p>	<p>BEST SELLER</p>  <p>997 PEOPLE ONLINE NOW</p> <p>CDS OTA Exam Online Course 2021 – 2022</p> <p>★★★★★ 5 (77)</p> <p>₹ 4,499.00</p>	<p>BEST SELLER</p>  <p>206 PEOPLE ONLINE NOW</p> <p>AFCAT Exam Online Course 2022</p> <p>★★★★★ 5 (64)</p> <p>₹ 4,999.00</p>	<p>HIGHEST RATED</p>  <p>561 PEOPLE ONLINE NOW</p> <p>NDA Exam Online Course 2021 – 2022</p> <p>★★★★★ 5 (72)</p> <p>₹ 4,999.00</p>	<p>HOT & NEW</p>  <p>740 PEOPLE ONLINE NOW</p> <p>Territorial Army Exam Online Course 2021 – 2022</p> <p>★★★★★ 5 (53)</p> <p>₹ 4,999.00</p>	<p>HOT & NEW</p>  <p>995 PEOPLE ONLINE NOW</p> <p>ACC Exam Online Course Army Cadet College 2021 – 2022</p> <p>★★★★★ 5 (53)</p> <p>₹ 6,999.00</p>
<p>HOT & NEW</p>  <p>90 PEOPLE ONLINE NOW</p> <p>OIR Test and PPDT Online Course – Officers Intelligence Rating Test</p> <p>★★★★★ 5 (50)</p> <p>₹ 2,999.00</p>	<p>BEST SELLER</p>  <p>98 PEOPLE ONLINE NOW</p> <p>MNS Military Nursing Service Exam Online Course 2022</p> <p>★★★★★ 5 (44)</p> <p>₹ 4,999.00</p>	<p>HOT & NEW</p>  <p>37 PEOPLE ONLINE NOW</p> <p>AFCAT Exam Online Mock Test Series</p> <p>★★★★★ 5 (65)</p> <p>₹ 299.00</p>	<p>BEST SELLER</p>  <p>36 PEOPLE ONLINE NOW</p> <p>CDS Exam Online Mock Test Series</p> <p>★★★★★ 5 (79)</p> <p>₹ 299.00</p>	<p>BEST SELLER</p>  <p>18 PEOPLE ONLINE NOW</p> <p>NDA Exam Online Mock Test Series</p> <p>★★★★★ 5 (72)</p> <p>₹ 299.00</p>	<p>HOT & NEW</p>  <p>37 PEOPLE ONLINE NOW</p> <p>UPSC CAPF Assistant Commandant Online Course 2022</p> <p>★★★★★ 5 (46)</p> <p>₹ 4,999.00</p>

