

Courses

ACC (1) AFCAT (1) AIRMEN (2) CAPF (1) CDS EXAM (2) INET OFFICER (1) MNS (1) MOCK TEST (3) NDA EXAM (1) PC(SL) (1) SCO (1) SSB INTERVIEW (1) TERRITORIAL ARMY (1)

<p>HIGHEST RATED</p>  <p>617 PEOPLE ONLINE NOW</p> <p>CDS Exam Online Course 2021 – 2022</p> <p>★★★★★ 5 (80)</p> <p>₹ 4,999.00</p>	<p>BEST SELLER</p>  <p>997 PEOPLE ONLINE NOW</p> <p>CDS OTA Exam Online Course 2021 – 2022</p> <p>★★★★★ 5 (77)</p> <p>₹ 4,499.00</p>	<p>BEST SELLER</p>  <p>206 PEOPLE ONLINE NOW</p> <p>AFCAT Exam Online Course 2022</p> <p>★★★★★ 5 (64)</p> <p>₹ 4,999.00</p>	<p>HIGHEST RATED</p>  <p>561 PEOPLE ONLINE NOW</p> <p>NDA Exam Online Course 2021 – 2022</p> <p>★★★★★ 5 (72)</p> <p>₹ 4,999.00</p>	<p>HOT & NEW</p>  <p>740 PEOPLE ONLINE NOW</p> <p>Territorial Army Exam Online Course 2021 – 2022</p> <p>★★★★★ 5 (53)</p> <p>₹ 4,999.00</p>	<p>HOT & NEW</p>  <p>995 PEOPLE ONLINE NOW</p> <p>ACC Exam Online Course Army Cadet College 2021 – 2022</p> <p>★★★★★ 5 (53)</p> <p>₹ 6,999.00</p>
<p>HOT & NEW</p>  <p>90 PEOPLE ONLINE NOW</p> <p>OIR Test and PPDT Online Course – Officers Intelligence Rating Test</p> <p>★★★★★ 5 (50)</p> <p>₹ 2,999.00</p>	<p>BEST SELLER</p>  <p>98 PEOPLE ONLINE NOW</p> <p>MNS Military Nursing Service Exam Online Course 2022</p> <p>★★★★★ 5 (44)</p> <p>₹ 4,999.00</p>	<p>HOT & NEW</p>  <p>37 PEOPLE ONLINE NOW</p> <p>AFCAT Exam Online Mock Test Series</p> <p>★★★★★ 5 (65)</p> <p>₹ 299.00</p>	<p>BEST SELLER</p>  <p>36 PEOPLE ONLINE NOW</p> <p>CDS Exam Online Mock Test Series</p> <p>★★★★★ 5 (79)</p> <p>₹ 299.00</p>	<p>BEST SELLER</p>  <p>18 PEOPLE ONLINE NOW</p> <p>NDA Exam Online Mock Test Series</p> <p>★★★★★ 5 (72)</p> <p>₹ 299.00</p>	<p>HOT & NEW</p>  <p>37 PEOPLE ONLINE NOW</p> <p>UPSC CAPF Assistant Commandant Online Course 2022</p> <p>★★★★★ 5 (46)</p> <p>₹ 4,999.00</p>





AFCAT 2 2022

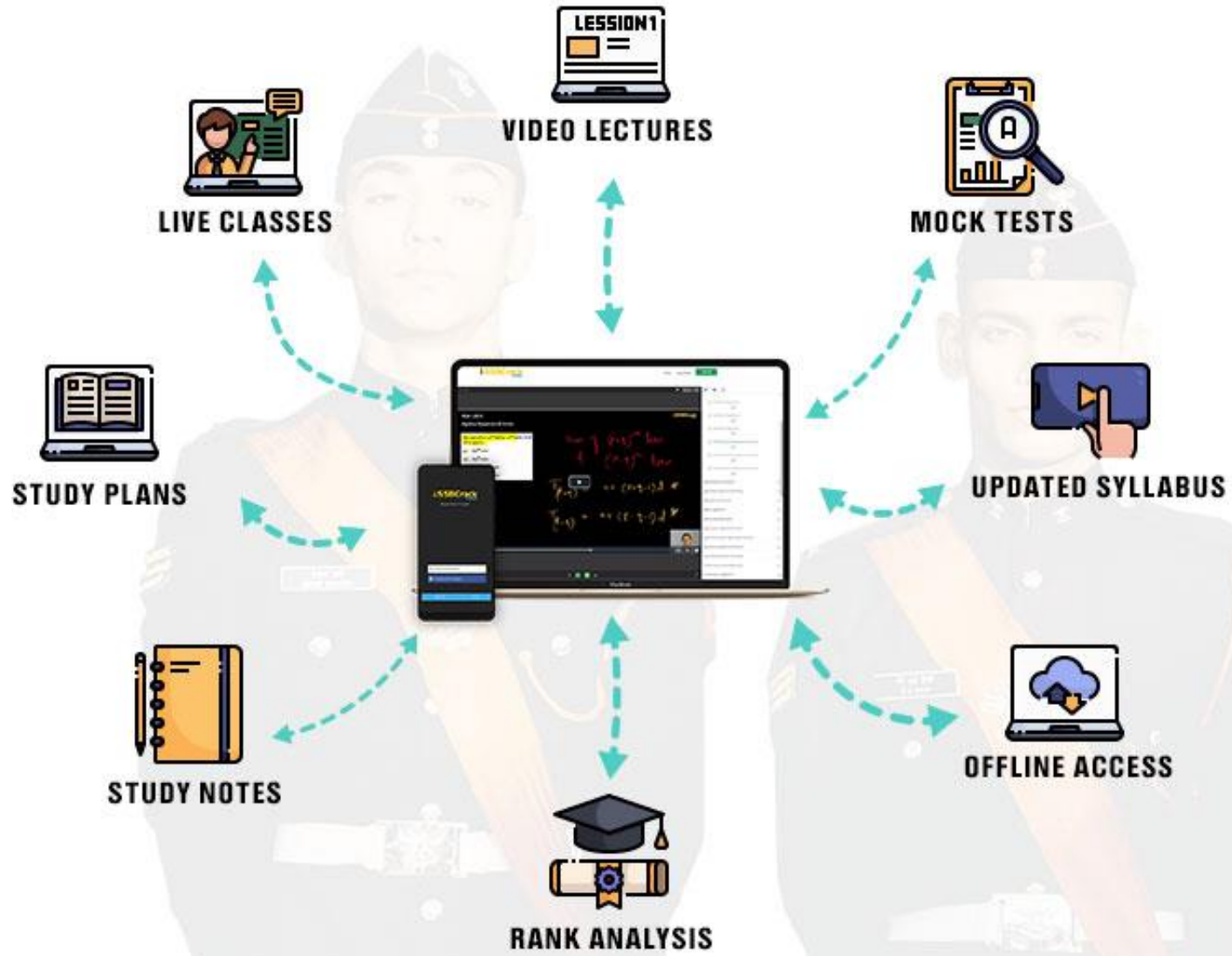
COMPLETE

REASONING

PART 1

LIVE  CLASS





Choose from our Courses

SSB INTERVIEW ONLINE COURSE

USE CODE: "WARRIOR10"
FOR 10% OFF ON SSB COURSE

SSB Interview Online Course

17 courses ₹4999 **₹3999**



USE CODE: "WARRIOR10"
FOR 10% OFF ON NDA COURSE

NDA Exam Online Course
2022

23 courses ₹4999 **₹3999**



USE CODE: "WARRIOR10"
FOR 10% OFF ON CDS COURSE

CDS Exam Online Course
2022

39 courses ₹4999 **₹3999**



USE CODE: "WARRIOR10"
FOR 10% OFF ON AFCAT COURSE

AFCAT Exam Online Course
2022

23 courses ₹4999 **₹3999**



USE CODE: "WARRIOR10"
FOR 10% OFF ON OTA COURSE

CDS OTA Exam Online Course
2022

33 courses ₹4499 **₹3499**



USE CODE: "WARRIOR10"
FOR 10% OFF ON TA COURSE

Territorial Army Exam
Online Course 2022

45 courses ₹4999 **₹3999**



USE CODE: "WARRIOR10"
FOR 10% OFF ON MNS COURSE

MNS Exam Online Course
2022

21 courses ₹4999 **₹3999**



USE CODE: "WARRIOR10"
FOR 10% OFF ON ACC COURSE

ACC Exam Online Course
2022

24 courses ₹5999 **₹4999**

[View All](#)

Bundles 16[View All](#)

SSB Interview Online Course

17 Courses

₹3,999 ₹4,999 20% OFF



NDA Exam Online Course 2022

23 Courses

₹3,999 ₹4,999 20% OFF



CDS Exam Online Course 2022

39 Courses

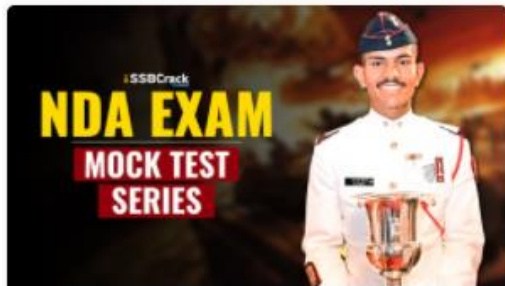
₹3,999 ₹4,999 20% OFF



AFCAT Exam Online Course 2022

23 Courses

₹3,999 ₹4,999 20% OFF

Test Series 07[View All](#)

NDA 2022 Mock Test Series

40 Tests

₹499 ₹999 50% OFF



CDS Exam 2022 Mock Test Series

30 Tests

₹499 ₹999 50% OFF



AFCAT 2022 Mock Test Series

20 Tests

₹499 ₹999 50% OFF

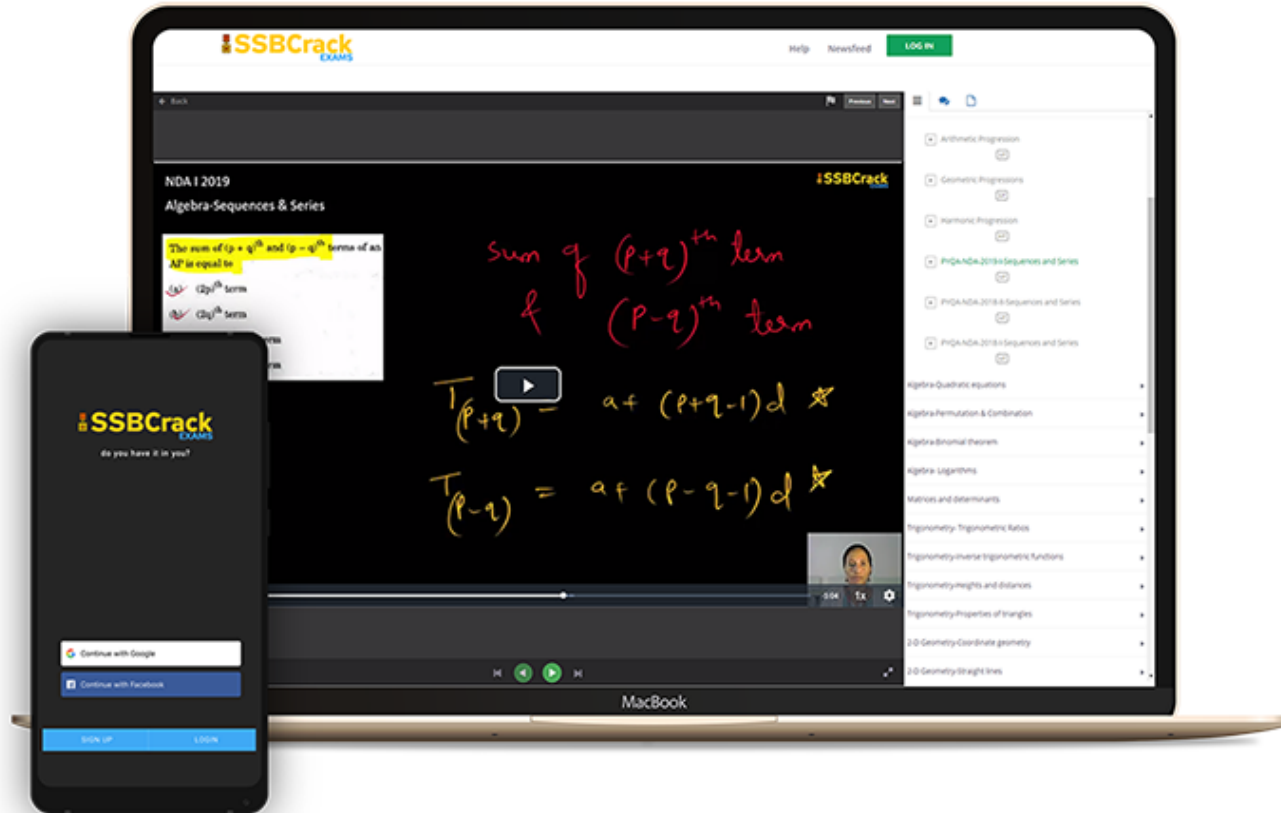


CDS Exam OTA 2022 Mock Test Series

20 Tests

₹499 ₹999 50% OFF

India's Most Popular Portal for Defence Exam Preparation



www.ssbcrackexams.com

CODE: WARRIOR10

get an extra **10%** off on all courses



AFCAT 2 2022

LIVE CLASS


TIME TABLE

DATE	TIME	SUBJECT
17 AUG 2022	10 AM TO 1 PM	General Awareness Part 1
17 AUG 2022	2 PM TO 5 PM	English Part 1
17 AUG 2022	6 PM TO 9 PM	Static GK Part 1
18 AUG 2022	10 AM TO 1 PM	General Awareness Part 2
18 AUG 2022	2 PM TO 5 PM	English Part 2
18 AUG 2022	6 PM TO 9 PM	Static GK Part 2
19 AUG 2022	10 AM TO 1 PM	Current Affairs
19 AUG 2022	2 PM TO 5 PM	English Part 3
19 AUG 2022	6 PM TO 9 PM	Defence Current Affairs
20 AUG 2022	10 AM TO 1 PM	Numerical Ability Part 1
20 AUG 2022	2 PM TO 5 PM	Reasoning Part 1
20 AUG 2022	6 PM TO 9 PM	General Sciences
22 AUG 2022	10 AM TO 1 PM	Numerical Ability Part 2
22 AUG 2022	2 PM TO 5 PM	Reasoning Part 2
23 AUG 2022	10 AM TO 1 PM	Numerical Ability Part 3
23 AUG 2022	2 PM TO 5 PM	Reasoning Part 3



Q) Cup is to coffee as bowl is to

- | | |
|-----------|----------|
| (a) Dish | (b) Soup |
| (c) Spoon | (d) Food |




Q) Cup is to coffee as bowl is to

- | | |
|-----------|----------|
| (a) Dish | (b) Soup |
| (c) Spoon | (d) Food |

Ans: (b)

Q) Play is to actor as concert is to

- | | |
|--------------|----------------|
| (a) Symphony | (b) Musician |
| (c) Piano | (d) Percussion |



Q) Play is to actor as concert is to


- | | |
|--------------|----------------|
| (a) Symphony | (b) Musician |
| (c) Piano | (d) Percussion |

Ans: (b)

Q) Palette Easel Brush

Textbook Lessonplan ?

- | | |
|-----------------|-------------|
| (a) Artist | (b) Teacher |
| (c) Report Card | (d) Paint |



Q) Palette Easel Brush

Textbook Lessonplan ?


- | | |
|-----------------|-------------|
| (a) Artist | (b) Teacher |
| (c) Report Card | (d) Paint |

Ans: (c)

Q) Select the related word pair from the given alternatives.

EXPLORE : DISCOVER

- (a) Read: Skim
- (b) Research: Learn
- (c) Write: print
- (d) Think: Relate



Q) Select the related word pair from the given alternatives.

EXPLORE : DISCOVER

- (a) Read: Skim
- (b) Research: Learn
- (c) Write: print
- (d) Think: Relate

Ans: (b)


Q) Pituitary: brain :: thymus :?

(a) Throat

(c) Spinal cord

(b) Chest

(d) Larynx



Q) Pituitary: brain :: thymus :?

(a) Throat

(b) Chest

(c) Spinal cord

(d) Larynx

Ans: (b)


Q) Forecast : Future : : Regret : ?

(a) Present

(b) Atone

(c) Past

(d) Sins



Q) Forecast : Future :: Regret : ?

(a) Present

(b) Atone


(c) Past

(d) Sins

Ans: (c)

Q) Family : Home :: Colleagues : ?

- | | |
|--------------|-------------|
| (a) Work | (b) Office |
| (c) Building | (d) Friends |




Q) Family : Home :: Colleagues : ?

- | | |
|--------------|-------------|
| (a) Work | (b) Office |
| (c) Building | (d) Friends |

Ans: (b)

Q) INDIA : PEACOCK :: USA : ?

- (a) Red Kite
- (b) Bald Eagle
- (c) Mute swan
- (d) Robin




Q) INDIA : PEACOCK :: USA : ?

- | | |
|---------------|----------------|
| (a) Red Kite | (b) Bald Eagle |
| (c) Mute swan | (d) Robin |

Ans: (b)

Q) Microphone : Loud :: Microscope : ?

- | | |
|--------------|-----------------|
| (a) Elongate | (b) Investigate |
| (c) Magnify | (d) Examine |




Q) Microphone : Loud :: Microscope : ?

- | | |
|--------------|-----------------|
| (a) Elongate | (b) Investigate |
| (c) Magnify | (d) Examine |

Ans: (c)

Q) Sound : Medium :: Light : ?

- (a) Air
- (b) Vacuum
- (c) Water
- (d) Glass



Q) Sound : Medium :: Light : ?

- | | |
|-----------|------------|
| (a) Air | (b) Vacuum |
| (c) Water | (d) Glass |

Ans: (b)


Q) Food : Hungry

(a) Thought : Politics

(b) Water : River

(c) Rest : Weary

(d) Wine : Intoxication



Q) Food : Hungry

(a) Thought : Politics

(b) Water : River

(c) Rest : Weary

(d) Wine : Intoxication

Ans: (c)


Q) Ampere : Current

(a) Sound : Waves

(b) Newton : Force

(c) Speed : Time

(d) Distance : Mile



Q) Ampere : Current

(a) Sound : Waves

(b) Newton : Force

(c) Speed : Time

(d) Distance : Mile

Ans: (b)


Q) Dark : Fear :: Honesty : ?

(a) Personality

(b) Money

(c) Treachery

(d) Trust



Q) Dark : Fear :: Honesty : ?

(a) Personality

(b) Money

(c) Treachery

(d) Trust

Ans: (d)


Q) Monk : Nun :: Bachelor : ?

(a) Spinster

(b) Woman

(c) Lady

(d) Man



Q) Monk : Nun :: Bachelor : ?

- | | |
|--------------|-----------|
| (a) Spinster | (b) Woman |
| (c) Lady | (d) Man |

Ans: (a)


Q) Sheep : Lamb :: Insect : ?

(a) Cub

(b) Larva

(c) Bull

(d) Tadpole



Q) Sheep : Lamb :: Insect : ?

(a) Cub

(b) Larva

(c) Bull

(d) Tadpole

Ans: (b)


Q) $5 : 125 :: 7 : ?$

(a) 343

(b) 512

(c) 243

(d) 729



Q) $5 : 125 :: 7 : ?$

(a) 343

(b) 512

(c) 243

(d) 729

Ans: (a)


Q) School : Education :: ? : ?

(a) Scalpel : Teacher

(b) Hospital : Treatment

(c) Teacher : School

(d) Class : College



Q) School : Education :: ? : ?

- (a) Scalpel : Teacher (b) Hospital : Treatment
(c) Teacher : School (d) Class : College

Ans: (b)

Q) Democracy : India :: Communism : ?

- | | |
|-------------|-------------|
| (a) France | (b) China |
| (c) Britain | (d) America |

Ans: (b)

Q) Flexible : Rigid :: Confidence : ?

- (a) Diffidence (b) Indifference
(c) Cowardice (d) Scare



Q) Flexible : Rigid :: Confidence : ?

- (a) Diffidence (b) Indifference
(c) Cowardice (d) Scare

Ans: (a)


Q) Mirage : Desert :: ?

(a) Sky : Illusion

(c) Rain : Rainbow

(b) Rainbow : Sky

(d) Image : Mirror



Q) Mirage : Desert :: ?

(a) Sky : Illusion

(c) Rain : Rainbow

(b) Rainbow : Sky

(d) Image : Mirror


Ans: (b)

Q) Anaemia : Blood :: Anarchy : ?

- | | |
|----------------|-----------------|
| (a) Disorder | (b) Monarchy |
| (c) Government | (d) Lawlessness |

Ans: (c)

- Q) Symphony : Composer :: ? : Painter
- (a) Fresco
 - (b) Colours
 - (c) Art
 - (d) Leonardo




- Q) Symphony : Composer :: ? : Painter
- (a) Fresco
 - (b) Colours
 - (c) Art
 - (d) Leonardo

Ans: (a)

Q) Influenza: Virus :: Ringworm: ?

- | | |
|--------------|--------------|
| (a) Bacteria | (b) Fungi |
| (c) parasite | (d) Protozoa |



Q) Influenza: Virus :: Ringworm: ?

- | | |
|--------------|--------------|
| (a) Bacteria | (b) Fungi |
| (c) parasite | (d) Protozoa |

Ans: (b)


Q) Editor : Magazine : ? : ?

(a) Novel : Writer

(b) Poem : Poet

(c) Chair : Carpenter

(d) Director : Film



Q) Editor : Magazine : ? : ?

(a) Novel : Writer

(b) Poem : Poet

(c) Chair : Carpenter

(d) Director : Film

Ans: (d)


Q) Taste : Tongue :: Walk : ?

(a) Pavement

(c) Legs

(b) Crutch

(d) Walking sticky




Q) Taste : Tongue :: Walk : ?

- (a) Pavement
- (b) Crutch
- (c) Legs
- (d) Walking sticky

Ans: (c)

Q) Chimney : Smoke :: _____ : _____

- | | |
|--------------------|------------------|
| (a) Gun : Bullet | (b) House : Roof |
| (c) Clay : Ceramic | (d) Tea : Kettle |



- Q) Chimney : Smoke :: _____ : _____
- (a) Gun : Bullet (b) House : Roof
- (c) Clay : Ceramic (d) Tea : Kettle

Ans: (a)


Q) DCHG : LKQP :: FEJI : ?

(a) MLSR

(b) NMRQ

(c) ONTS

(d) QPUT



Q) DCHG : LKQP :: FEJI : ?

(a) MLSR

(b) NMRQ

(c) ONTS

(d) QPUT

Ans: (b)


Q) Paw : Cat :: Hoof : ?

(a) Lamb

(b) Elephant

(c) Lion

(d) Horse



Q) Paw : Cat :: Hoof : ?

(a) Lamb

(b) Elephant


(c) Lion

(d) Horse

Ans: (d)

Q) Coconut : Shell : Letter : ?

- | | |
|------------------|----------------|
| (a) Envelope | (b) Post |
| (c) Postal Stamp | (d) Letter Box |




Q) Coconut : Shell : Letter : ?

- | | |
|------------------|----------------|
| (a) Envelope | (b) Post |
| (c) Postal Stamp | (d) Letter Box |

Ans: (a)

Q) Bismilla Khan : Clarinetist : : Birju Maharaj : ?

- | | |
|------------|-------------------|
| (a) Kathak | (b) Bharatnatayam |
| (c) Music | (d) Sitar |



Q) Bismilla Khan : Clarinetist :: Birju Maharaj : ?

- | | |
|------------|-------------------|
| (a) Kathak | (b) Bharatnatayam |
| (c) Music | (d) Sitar |

Ans: (a)

1-YEAR FULL ACCESS SSB ONLINE COURSE 2022

START YOUR SSB INTERVIEW PREPARATION TODAY WITH SSB CRACK EXAMS

HOT & NEW



5 (132 ratings) 17,552 students enrolled

Includes:

 OIR Test

 PPDT

 Psychological Tests

 Personal Interview

 Group Tasks

 Conference

 Medical

 Live Class

 Success Stories

 Personal Guidance

 SSB Trends




Q) 678:U::456:?

(a) P

(b) O

(c) Q

(d) R



Q) 678:U::456:?

(a) P

(b) O

(c) Q

(d) R

Ans: (b)


Q) CALL : ACLL :: COOL : ?

(a) LOOC

(b) LCOO

(c) OOLC

(d) OCLO



Q) CALL : ACLL :: COOL : ?

(a) LOOC

(b) LCOO


(c) OOLC

(d) OCLO

Ans: (d)

Q) Punjab : Chandigarh :: Assam

- | | |
|--------------|--------------|
| (a) Dispur | (b) Guwahati |
| (c) Shillong | (d) Imphal |




Q) Punjab : Chandigarh :: Assam

- | | |
|--------------|--------------|
| (a) Dispur | (b) Guwahati |
| (c) Shillong | (d) Imphal |

Ans: (a)


Q) Anatomy : Zoology :: Paediatrics : ?

- | | |
|-------------------|---------------|
| (a) Chemistry | (b) Medicine |
| (c) Palaeontology | (d) Mechanics |



Q) Eccrinology : Secretions :: Selenography : ?

- (a) Sun (b) Mantle
(c) Crust (d) Moon




Q) Eccrinology : Secretions :: Selenography : ?

- (a) Sun (b) Mantle
(c) Crust (d) Moon

Ans: (d)

Q) Virology : Virus :: Semantics : ?

- (a) Amoeba (b) Language
(c) Nature (d) Society




Q) Virology : Virus :: Semantics : ?

- | | |
|------------|--------------|
| (a) Amoeba | (b) Language |
| (c) Nature | (d) Society |

Ans: (b)

Q) Tectonics : Building :: Taxidermy : ?

- (a) Classification (b) Conserving
(c) Stuffing (d) Collecting




Q) Tectonics : Building :: Taxidermy : ?

- | | |
|--------------------|----------------|
| (a) Classification | (b) Conserving |
| (c) Stuffing | (d) Collecting |

Ans: (c)

Q) Annihilation : Fire :: Cataclysm : ?

- | | |
|---------------|-----------------|
| (a) Emergency | (b) Tribulation |
| (c) Anxiety | (d) Flood |



Q) Annihilation : Fire :: Cataclysm : ?

- (a) Emergency (b) Tribulation
(c) Anxiety (d) Flood

Ans: (c)


Q) Cerebrum : Brain :: ? : ?

(a) Aorta : Hand

(c) Ventricle : Heart

(b) Ligament : Blood

(d) Country : Universe



Q) Cerebrum : Brain :: ? : ?

(a) Aorta : Hand

(b) Ligament : Blood


(c) Ventricle : Heart

(d) Country : Universe

Ans: (c)

Q) Wife : Marriage :: ? : ?

- (a) Bank : Money
- (b) Nationality : Citizenship
- (c) Service : Qualification
- (d) Attendance : Register




Q) Wife : Marriage :: ? : ?

- (a) Bank : Money
- (b) Nationality : Citizenship
- (c) Service : Qualification
- (d) Attendance : Register

Ans: (c)

Q) Sadist : Injury :: ? : ?

- (a) Opportunist : Generosity
- (b) Priest : Church
- (c) Dentist : Teeth
- (d) Thief : Robbery




Q) Sadist : Injury :: ? : ?

- (a) Opportunist : Generosity
- (b) Priest : Church
- (c) Dentist : Teeth
- (d) Thief : Robbery

Ans: (d)

Q) Lecherous : Carnal :: ? : ?

- | | |
|---------------------|----------------------|
| (a) Virile : Feeble | (b) Diatribe : Abuse |
| (c) Impede : Begin | (d) Sunder : Link |



Q) Lecherous : Carnal :: ? : ?

(a) Virile : Feeble

(b) Diatribe : Abuse


(c) Impede : Begin

(d) Sunder : Link

Ans: (b)

Q) Ignominy : Disloyalty :: ? : ?

- (a) Death : Victory
- (b) Martyr : Man
- (c) Fame : Heroism
- (d) Destruction : Victory


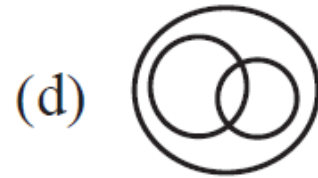
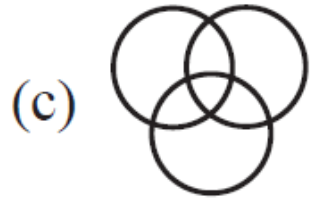


Q) Ignominy : Disloyalty :: ? : ?

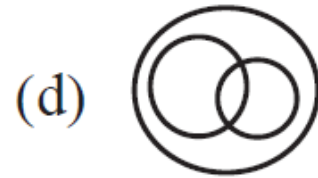
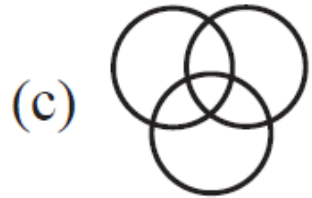
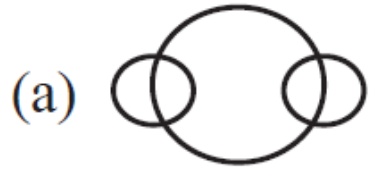
- (a) Death : Victory
- (b) Martyr : Man
- (c) Fame : Heroism
- (d) Destruction : Victory

Ans: (c)

Q) Which of the following diagrams indicates the best relation between Profit, Dividend and Bonus ?


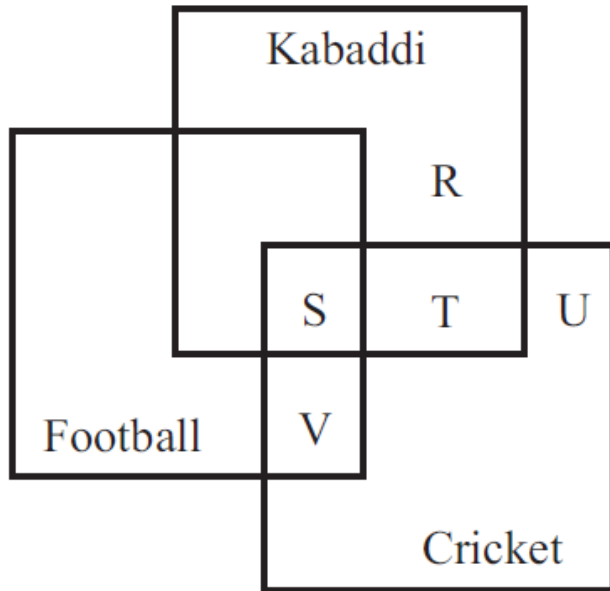


Q) Which of the following diagrams indicates the best relation between Profit, Dividend and Bonus ?



Ans: (b)

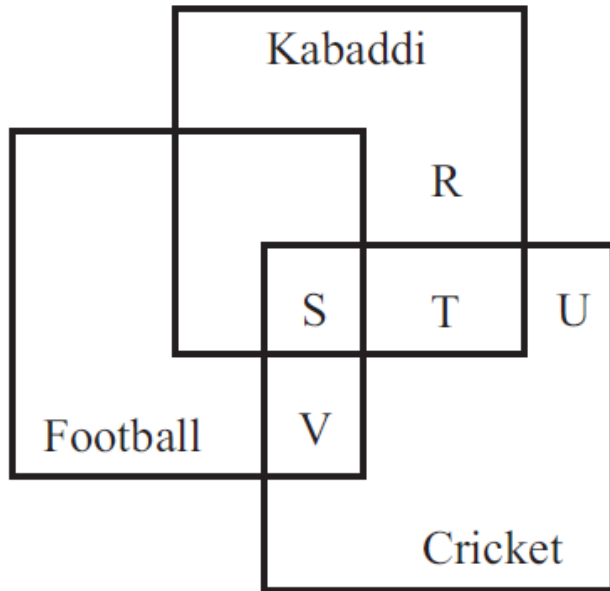
Q) The diagram given below represents those students who play Cricket, Football and Kabaddi.



Study the diagram and identify the students who play all the three games.

- (a) P+Q+R
- (b) V+T
- (c) S+T+V
- (d) S

Q) The diagram given below represents those students who play Cricket, Football and Kabaddi.


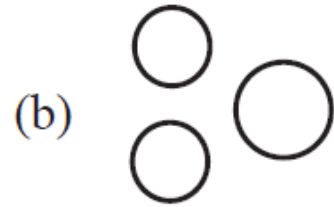



Study the diagram and identify the students who play all the three games.

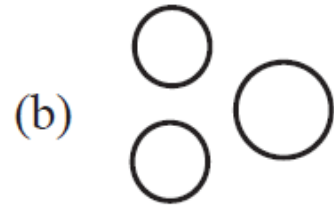

- (a) P+Q+R
- (b) V+T
- (c) S+T+V
- (d) S

Ans: (d)

Q) Which of the following diagrams indicates the best relation between Hockey, Football and Cricket ?


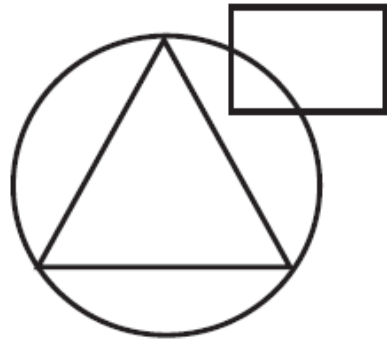


Q) Which of the following diagrams indicates the best relation between Hockey, Football and Cricket ?



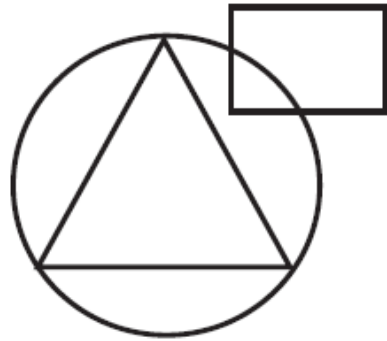
Ans: (b)

Q) In an organization of pollution control board, engineers are represented by a circle, legal experts by a square and environmentalist by a triangle. Who is most represented in the board as shown in the following figure ?



- (a) Environmentalists
- (b) Legal Experts
- (c) Engineers with legal background
- (d) Environmentalists with Engineering background


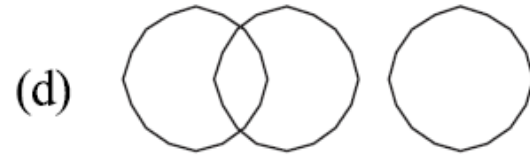
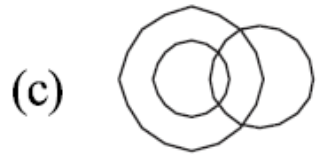
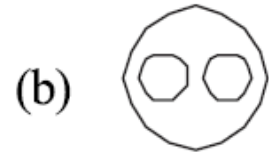
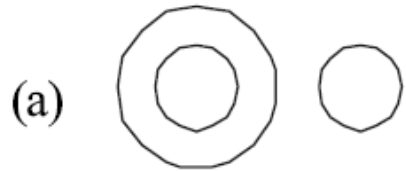
Q) In an organization of pollution control board, engineers are represented by a circle, legal experts by a square and environmentalist by a triangle. Who is most represented in the board as shown in the following figure ?



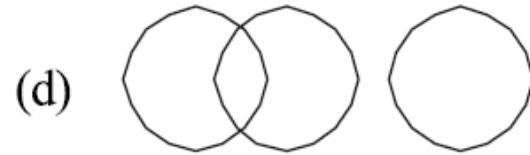
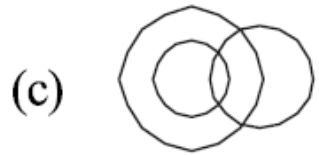
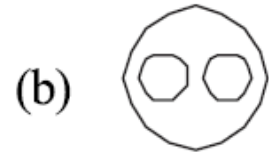
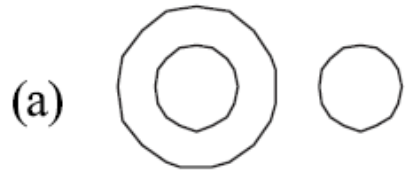
- (a) Environmentalists
- (b) Legal Experts
- (c) Engineers with legal background
- (d) Environmentalists with Engineering background

Ans: (d)

Q) Which of the following diagrams represents the correct relationship between Doctors, Specialist Doctors and Patients?

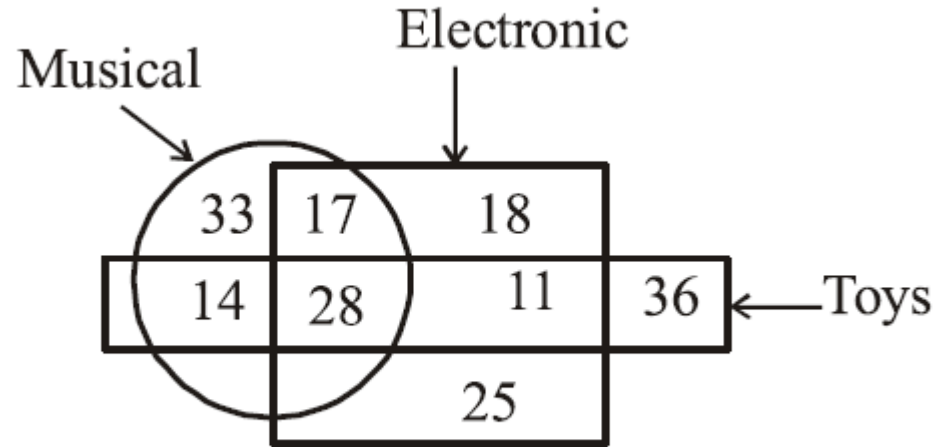


Q) Which of the following diagrams represents the correct relationship between Doctors, Specialist Doctors and Patients?




Ans: (c)

Q) In the given figure, how many are musical toys?

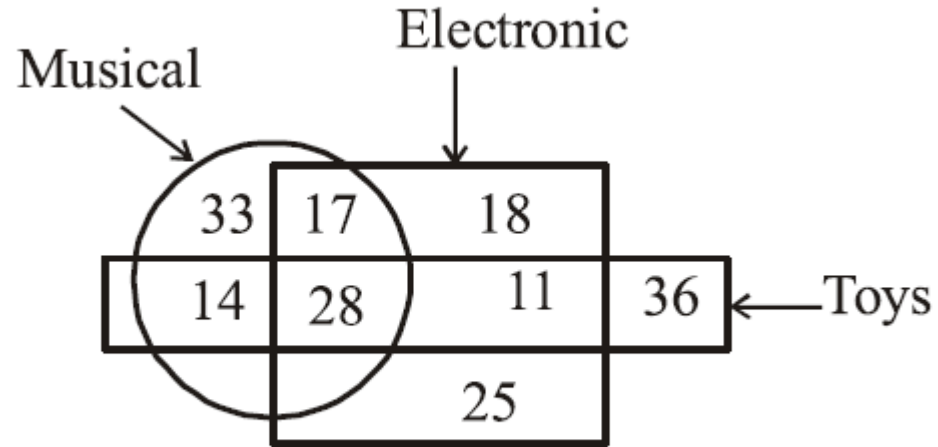


- (a) 53
- (c) 42

- (b) 61
- (d) 45



Q) In the given figure, how many are musical toys?

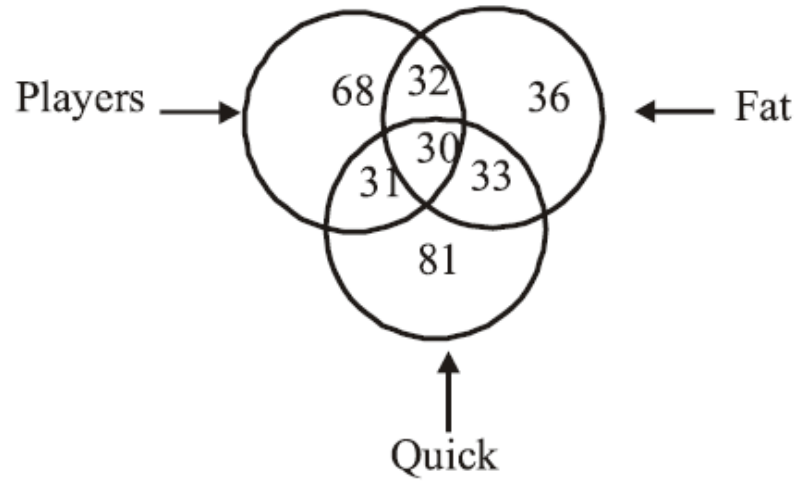


- (a) 53
- (c) 42

- (b) 61
- (d) 45

Ans: (c)

Q) In the given figure, how many players are quick and fat?




(a) 31

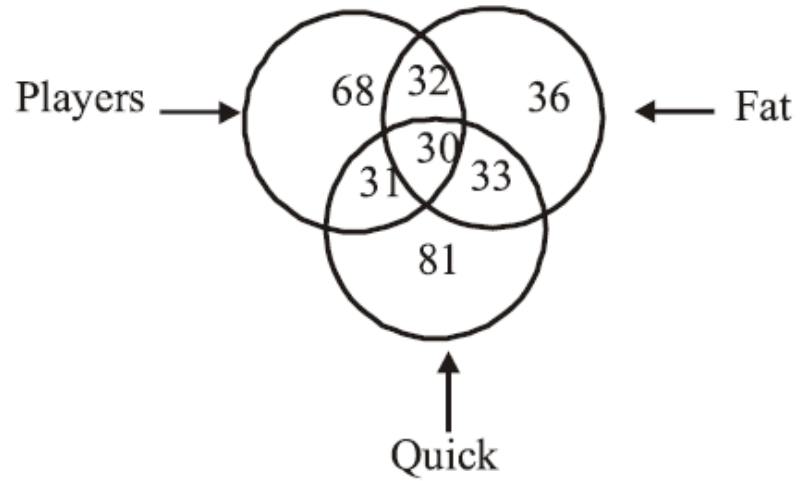
(b) 30

(c) 32

(d) 33



Q) In the given figure, how many players are quick and fat?



(a) 31

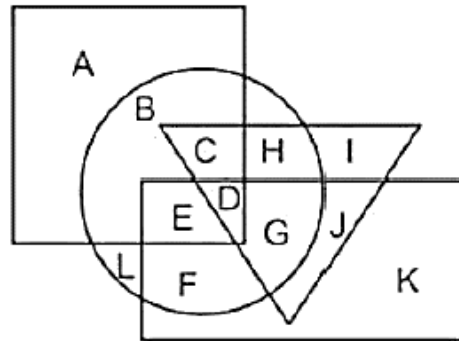
(b) 30

(c) 32

(d) 33

Ans: (b)

Q) In the following figure, rectangle represents Opticians, circle represents Art critics, triangle represents Riders and square represents Boxes. Which set of letters represents Art critics who are not Riders?




(a) BLEF

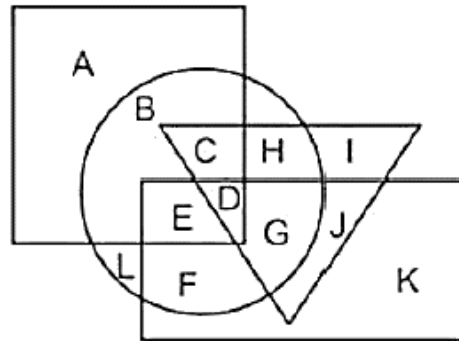
(b) IJ

(c) CHDG

(d) EDGJ



Q) In the following figure, rectangle represents Opticians, circle represents Art critics, triangle represents Riders and square represents Boxes. Which set of letters represents Art critics who are not Riders?



(a) BLEF


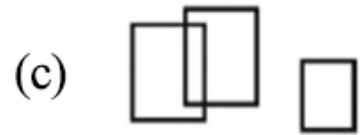
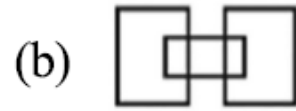
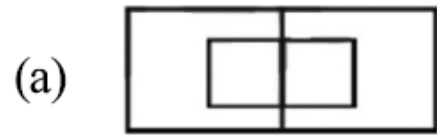
(b) IJ

(c) CHDG

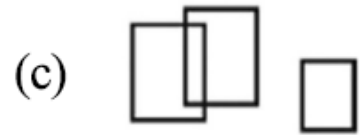
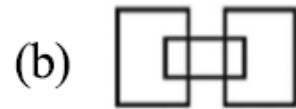
(d) EDGJ

Ans: (a)

Q) Which one of the following diagram represents the correct relationship among Professor, Male and Female.




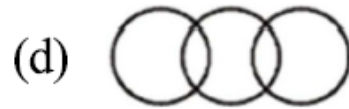

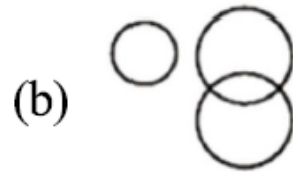
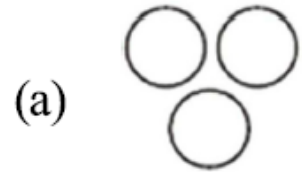
Q) Which one of the following diagram represents the correct relationship among Professor, Male and Female.



Ans: (a)

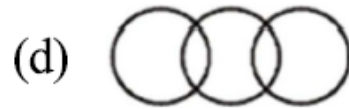

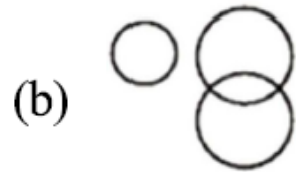
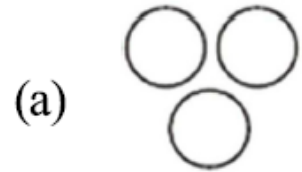
Q) Which one of the following diagram represents the correct relationship among

Pink, Blue and Fruit.



Q) Which one of the following diagram represents the correct relationship among

Pink, Blue and Fruit.



Ans: (d)

AFCAT Exam Online Course 2022 – 2023

Start your AFCAT Exam preparation today with SSB Crack Exams.

★★★★★ 5.0 (114)

Content 24

Search in bundle



FILTER BY TYPE ▾



AFCAT 2 2022 Exam Overview

Course • 27 Lessons



Success Stories

Course • 39 Lessons



AFCAT 2 2022 Study Plan And Analysis

Course • 24 Lessons



Notifications & Exam Dates

Course • 182 Lessons



🕒 90 Days validity

[Change Validity](#)

₹3,999 ~~₹4,999~~ 20% OFF

BUY BUNDLE


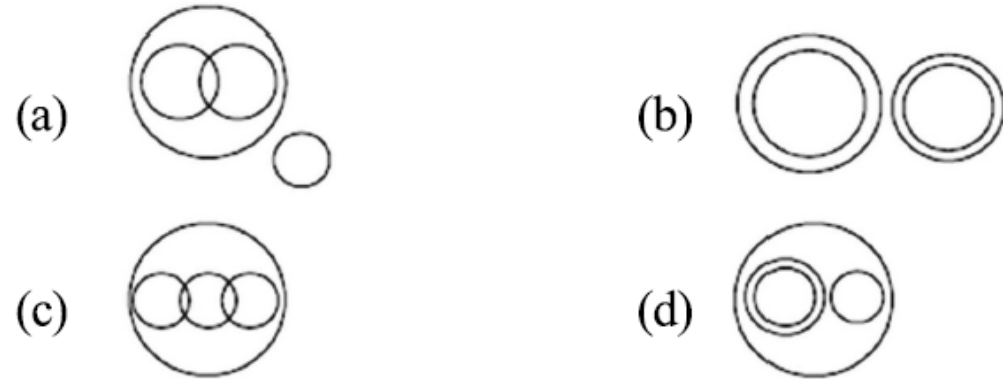
START A FREE TRIAL

What's included

📁 24 Courses

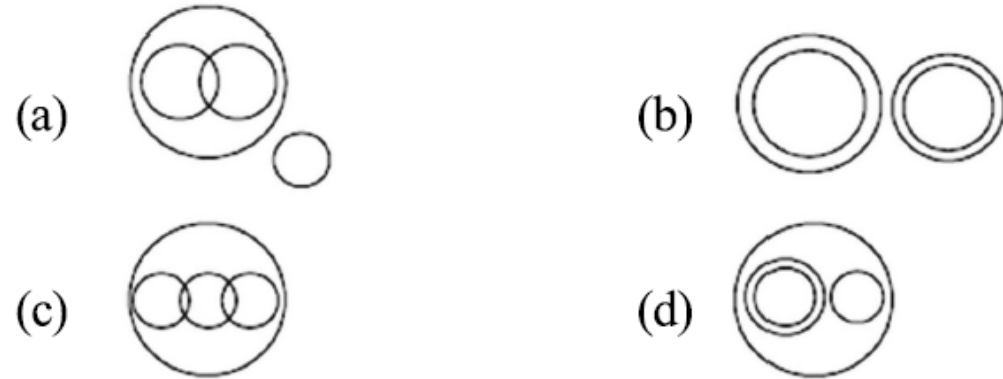
Q) Which one of the following diagram represents the correct relationship among

Brain, Cerebrum, Liver and Human body.





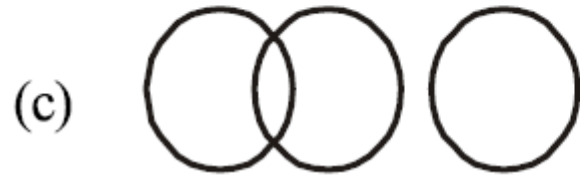
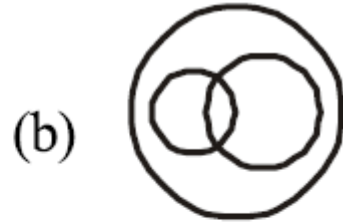
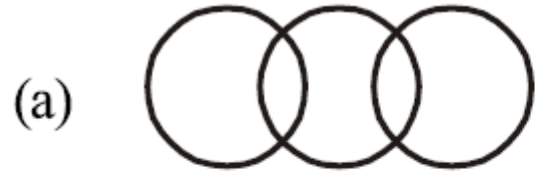
Q) Which one of the following diagram represents the correct relationship among

Brain, Cerebrum, Liver and Human body.


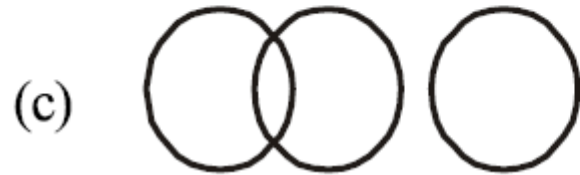
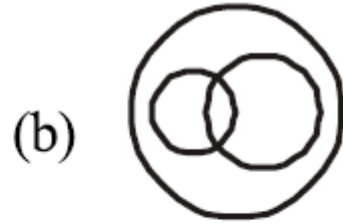
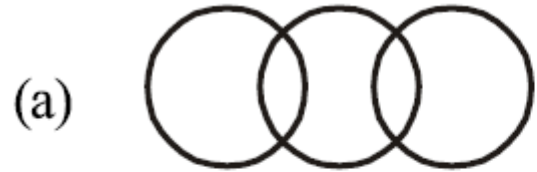


Ans: (d)

Q) Brick, House, Bridge



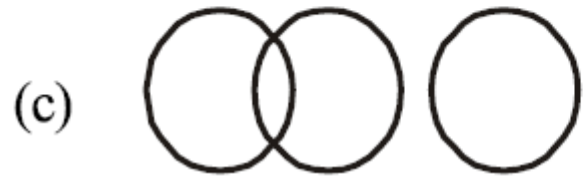
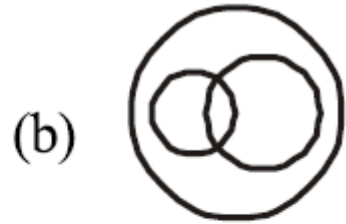
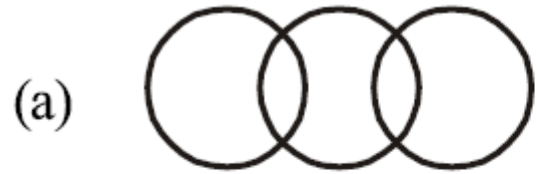


Q) Brick, House, Bridge


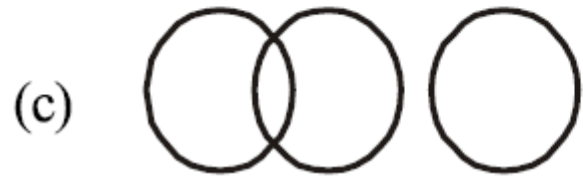
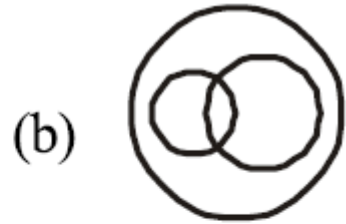
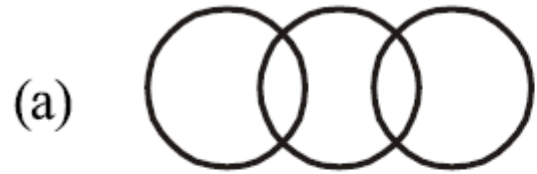


Ans: (a)

Q) Student of law, Student of science, Men



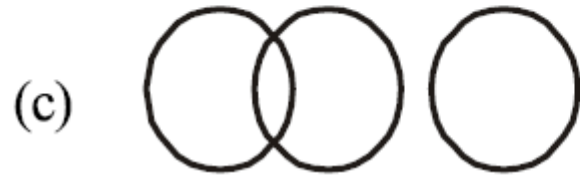
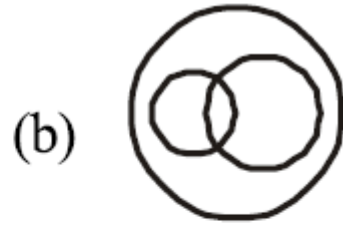
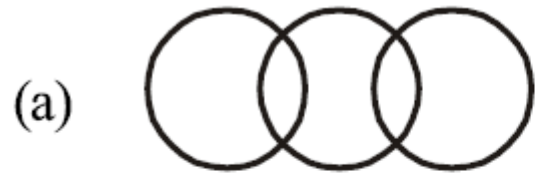


Q) Student of law, Student of science, Men


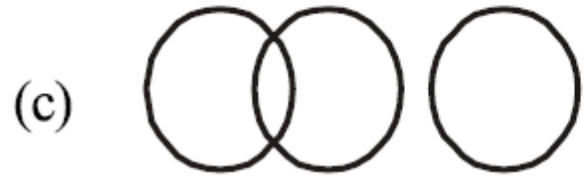
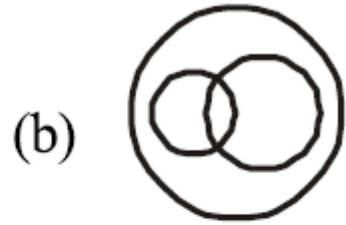
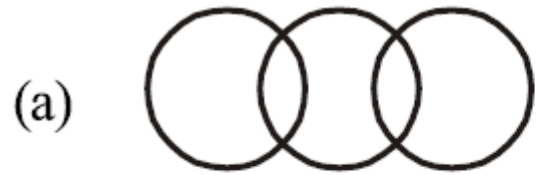


Ans: (a)

Q) Antisocial, Pickpockets, Kidnappers


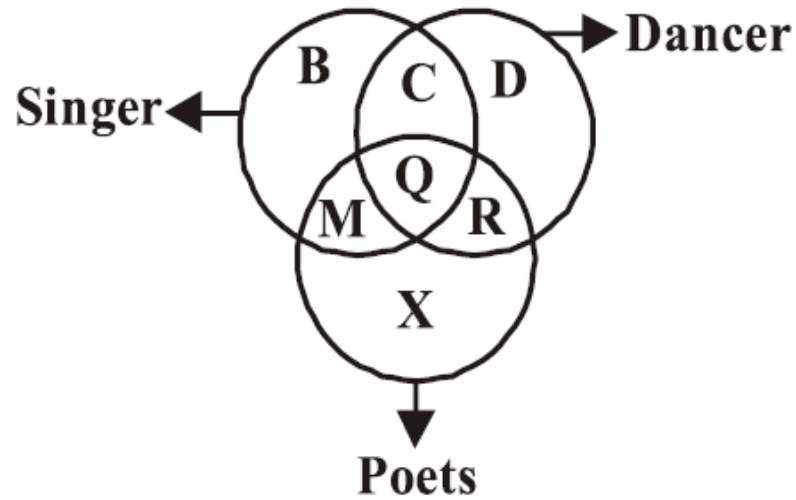


Q) Antisocial, Pickpockets, Kidnappers



Ans: (b)

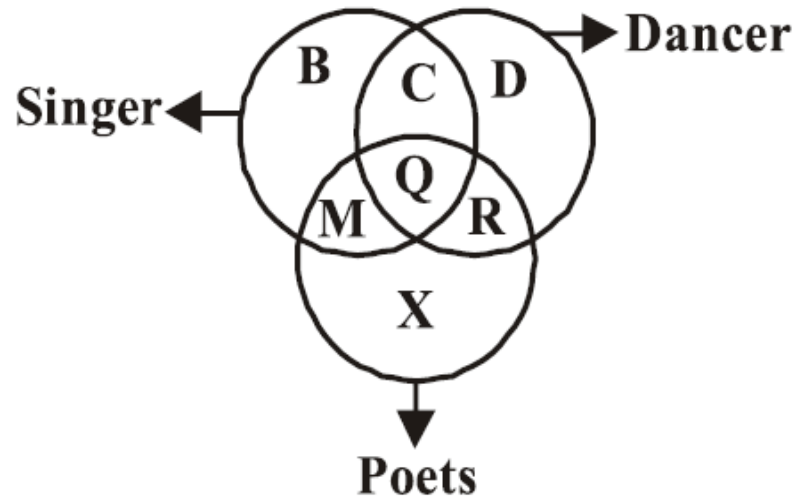
Q) The following diagram represents the students who are singers, dancers and poets.



Study the diagram and identify the region which represents the students who are both poets and singers but not dancers.

- (a) $B + C + D$
- (b) M
- (c) $Q + R$
- (d) $R + X$

Q) The following diagram represents the students who are singers, dancers and poets.


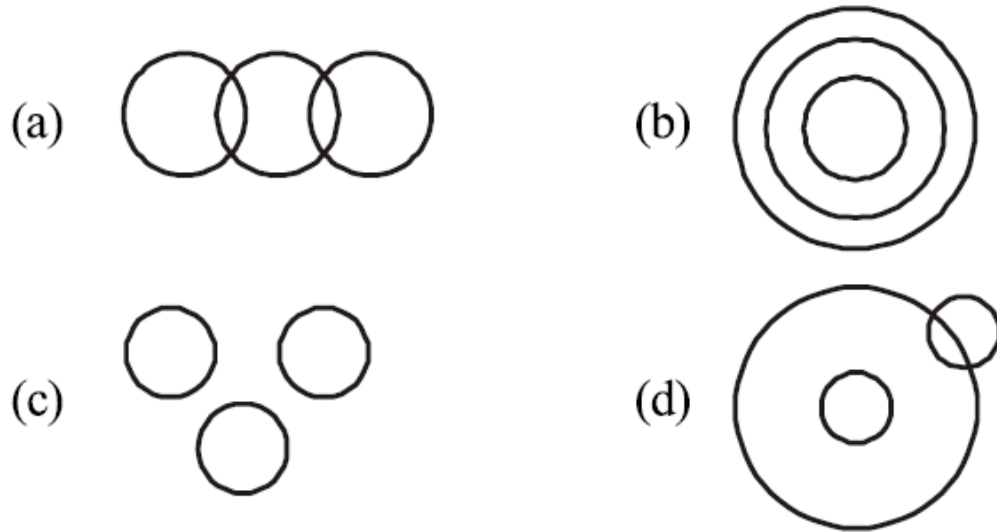


Study the diagram and identify the region which represents the students who are both poets and singers but not dancers.

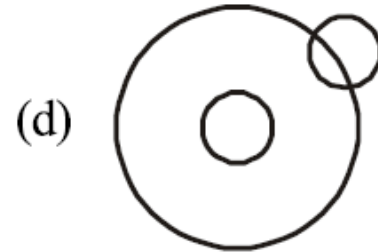
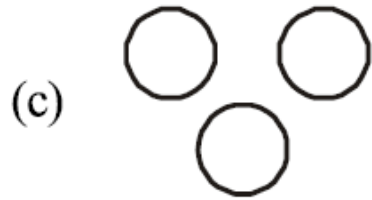
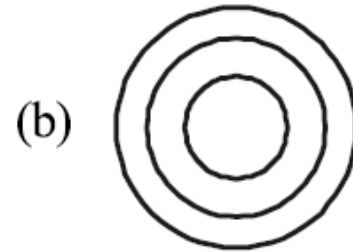
- | | |
|-----------------|-------------|
| (a) $B + C + D$ | (b) M |
| (c) $Q + R$ | (d) $R + X$ |

Ans: (b)

Q) Find out which of the diagrams given in the alternatives correctly represents the relationship stated in the question.
Sharks, Whales, Turtles


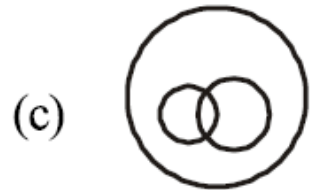
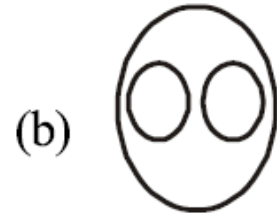


Q) Find out which of the diagrams given in the alternatives correctly represents the relationship stated in the question.
Sharks, Whales, Turtles

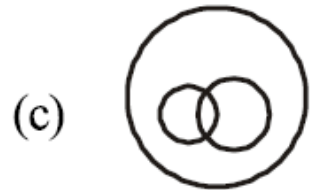
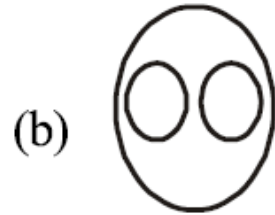


Ans: (c)

Q) Indicate which figure will best represent the relationship amongst the three :
Legumes Seeds, Peas, Kidney Beans

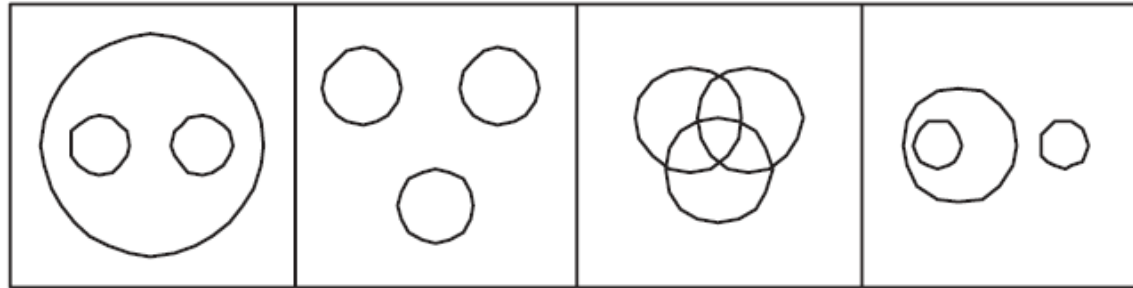


Q) Indicate which figure will best represent the relationship amongst the three :
Legumes Seeds, Peas, Kidney Beans



Ans: (b)

Q) Find out the figure which best represents the relationship among Garden, Rose and Jasmine.




(a)

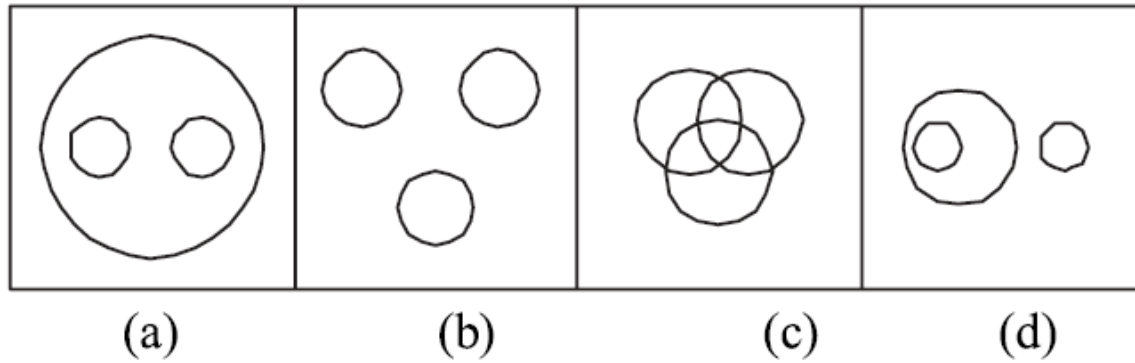
(b)

(c)

(d)



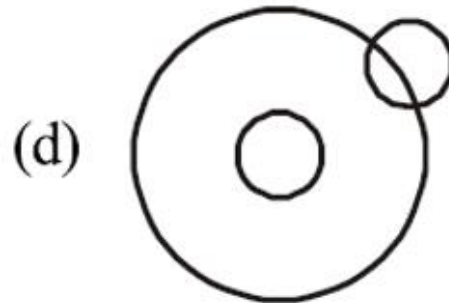
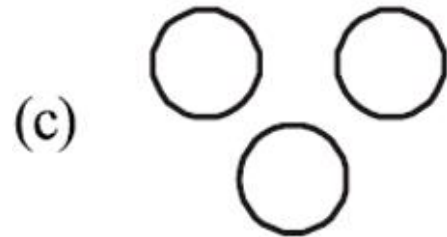
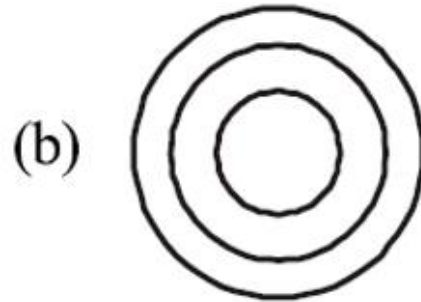
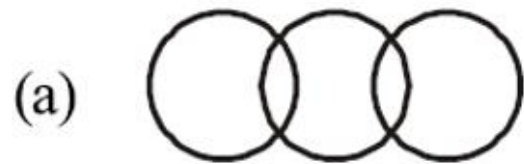
Q) Find out the figure which best represents the relationship among Garden, Rose and Jasmine.



Ans: (a)

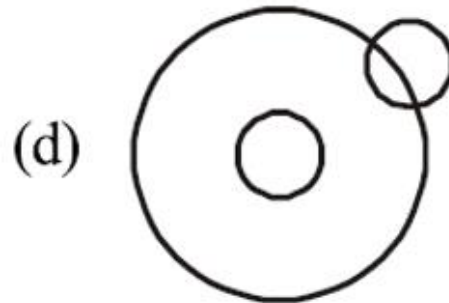
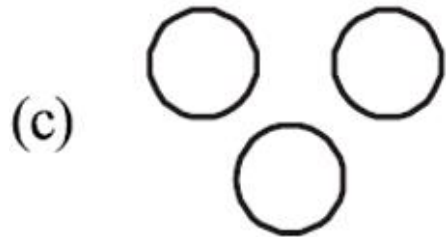
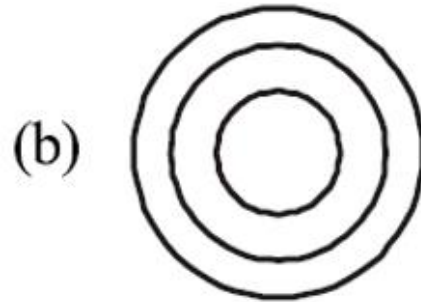
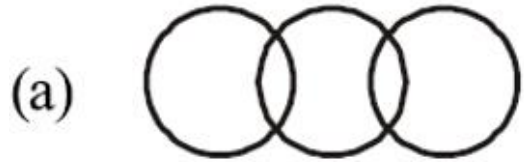
Q) Indicate which figure will best represent the relationship amongst the three :

Christians, Catholics, Pope




Q) Indicate which figure will best represent the relationship amongst the three :

Christians, Catholics, Pope



Ans: (b)

Q) Which of the following diagrams indicates the best relation between India, Haryana and World ?


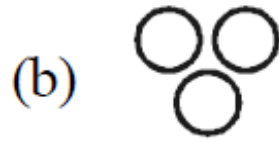


Q) Which of the following diagrams indicates the best relation between India, Haryana and World ?

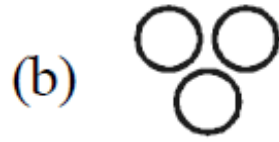


Ans: (d)

Q) Which of the following diagrams indicates the best relation between Earth, Sea and Sun ?


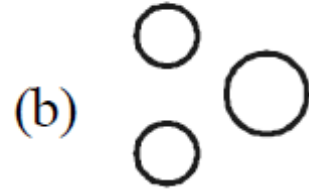


Q) Which of the following diagrams indicates the best relation between Earth, Sea and Sun ?

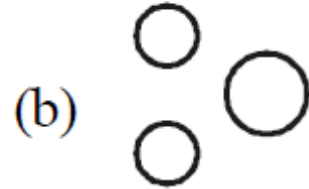


Ans: (a)

Q) Which of the following diagrams indicates the best relation between Iron, Lead and Nitrogen?



Q) Which of the following diagrams indicates the best relation between Iron, Lead and Nitrogen?



Ans: (b)

1-YEAR FULL ACCESS SSB ONLINE COURSE 2022

START YOUR SSB INTERVIEW PREPARATION TODAY WITH SSBCRACKEXAMS

HOT & NEW



5 (132 ratings) 17,552 students enrolled

Includes:

 OIR Test

 PPDT

 Psychological Tests

 Personal Interview

 Group Tasks

 Conference

 Medical

 Live Class


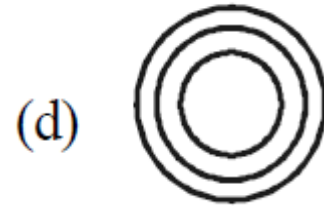
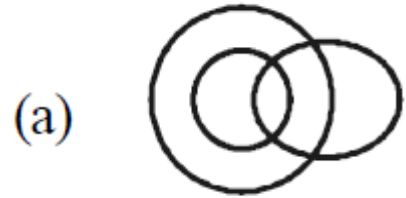
 Success Stories

 Personal Guidance

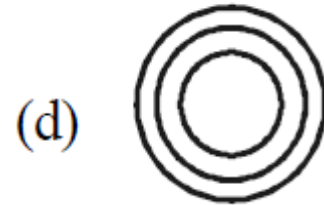
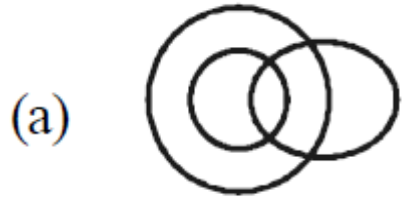
 SSB Trends



Q) Which of the following diagrams indicates the best relation between Women, Mothers and Engineers?


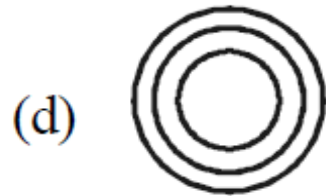
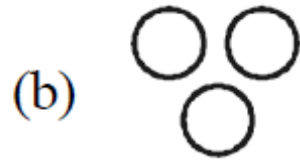
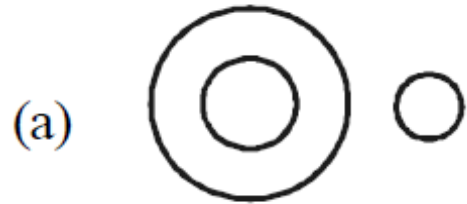


Q) Which of the following diagrams indicates the best relation between Women, Mothers and Engineers?

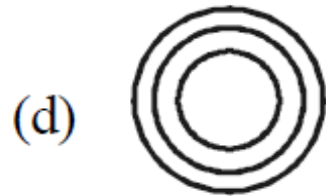
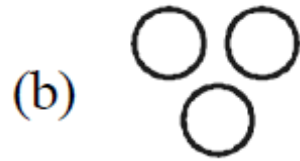
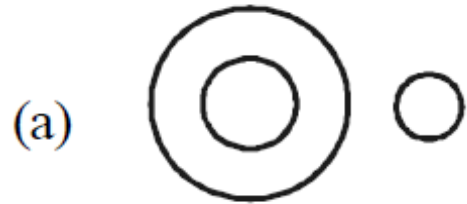


Ans: (a)

Q) Which of the following diagrams indicates the best relation between Author, Lawyer and Singer?


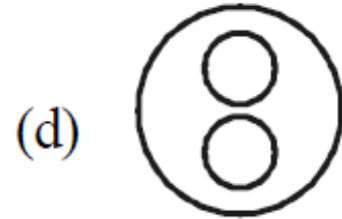
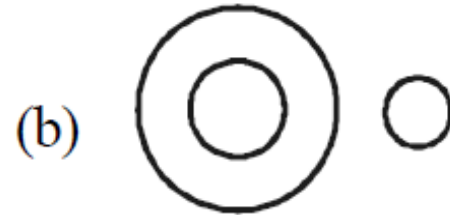
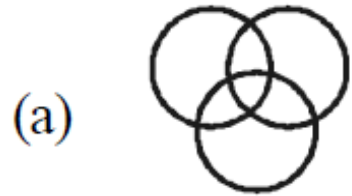


Q) Which of the following diagrams indicates the best relation between Author, Lawyer and Singer?

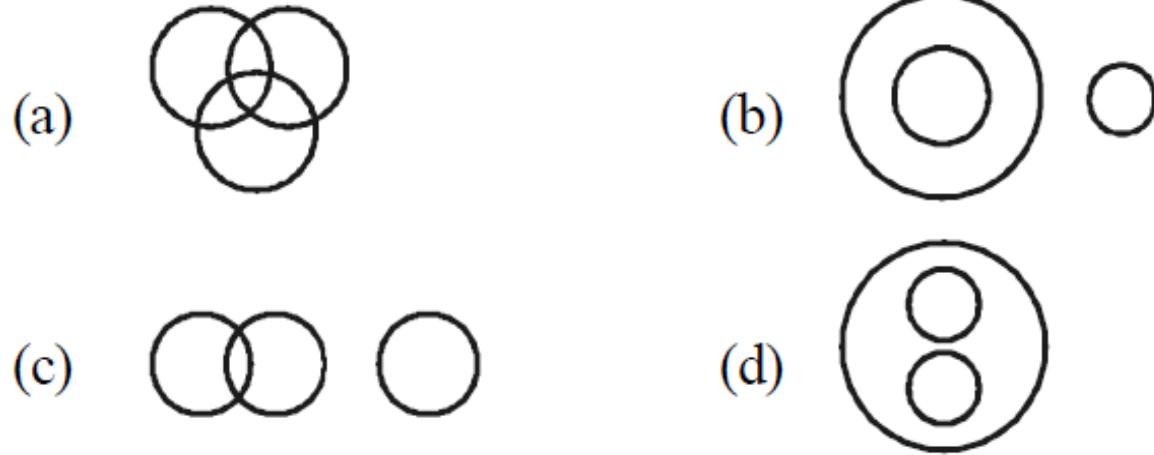


Ans: (b)

Q) Which of the following diagrams indicates the best relation between Judge, Thieves and Criminals?


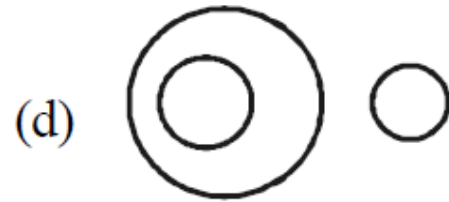
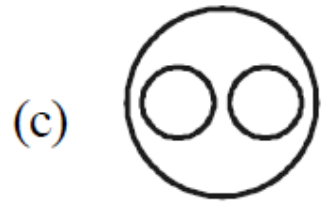
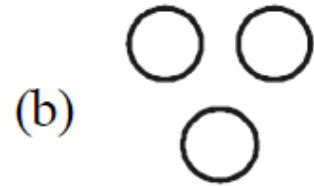
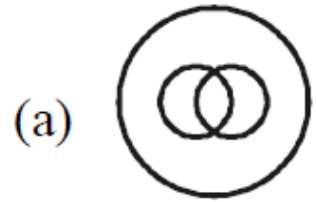


Q) Which of the following diagrams indicates the best relation between Judge, Thieves and Criminals?

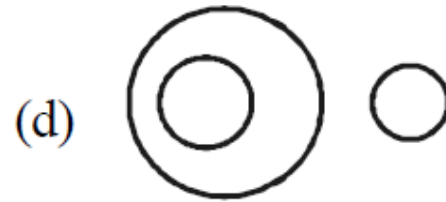
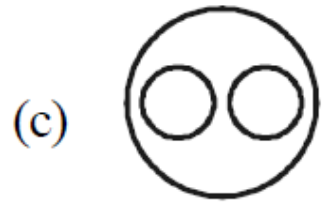
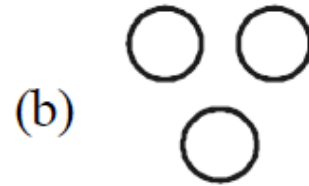
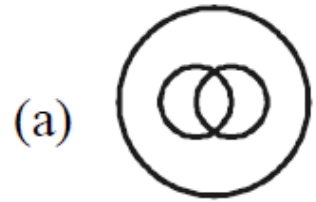


Ans: (b)

Q) Which of the following diagrams indicates the best relation between Mountains, Earth and Forests?


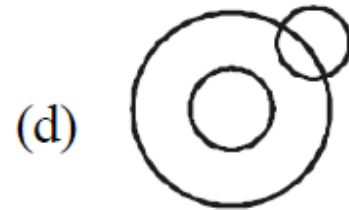
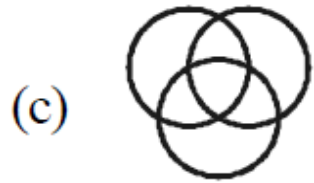
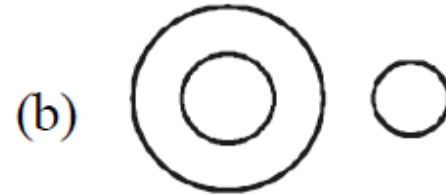


Q) Which of the following diagrams indicates the best relation between Mountains, Earth and Forests?

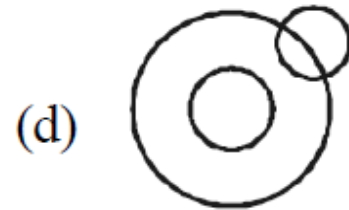
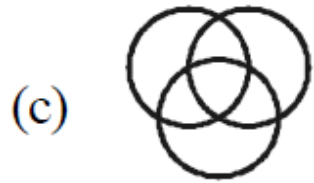
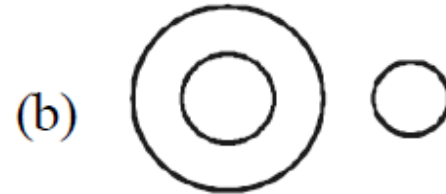


Ans: (a)

Q) Which of the following diagrams indicates the best relation between Sun, Planets and Earth?


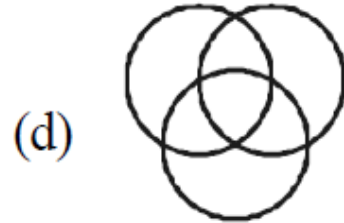
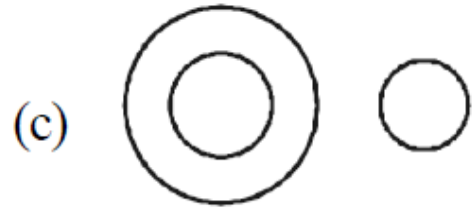

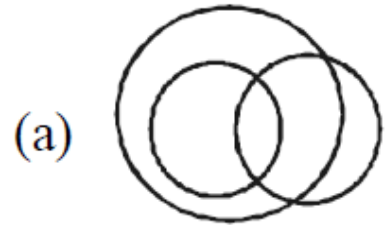


Q) Which of the following diagrams indicates the best relation between Sun, Planets and Earth?

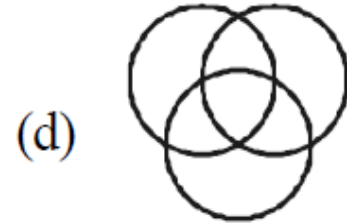
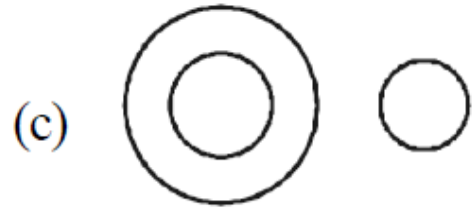

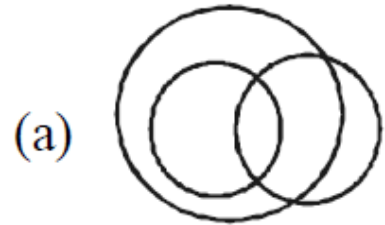


Ans: (b)

Q) Which of the following diagrams indicates the best relation between Graduate, Teacher and Player?



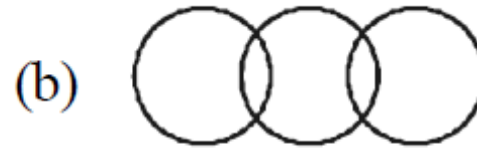
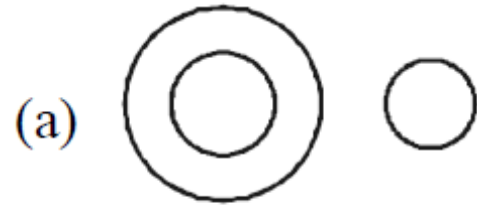


Q) Which of the following diagrams indicates the best relation between Graduate, Teacher and Player?


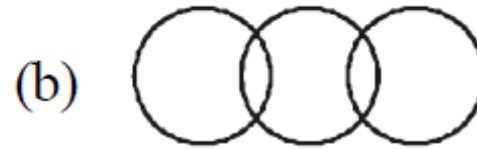
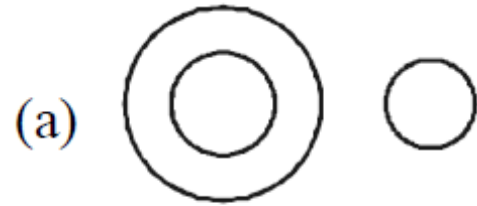


Ans: (d)

Q) Which of the following diagrams indicates the best relation between Leaf, Seed and Root?


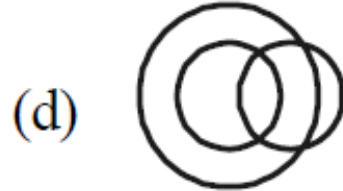


Q) Which of the following diagrams indicates the best relation between Leaf, Seed and Root?

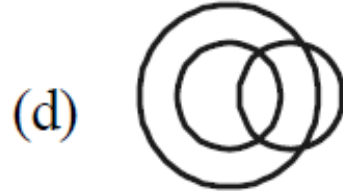


Ans: (c)

Q) Which of the following diagrams indicates the best relation between Biology, Zoology and Physics?


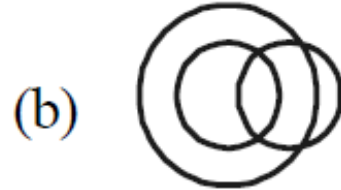


Q) Which of the following diagrams indicates the best relation between Biology, Zoology and Physics?


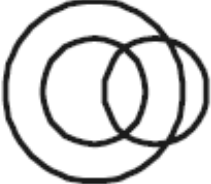




Ans: (b)

Q) Which of the following diagrams indicates the best relation between Stamp, Pen and Chalk?


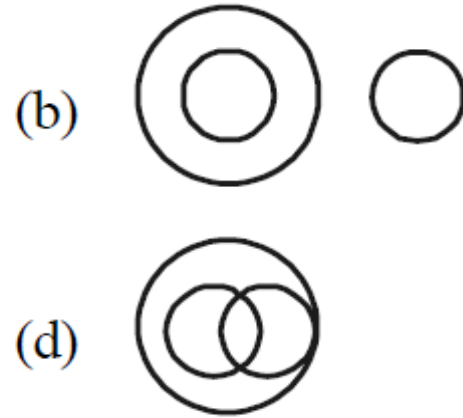
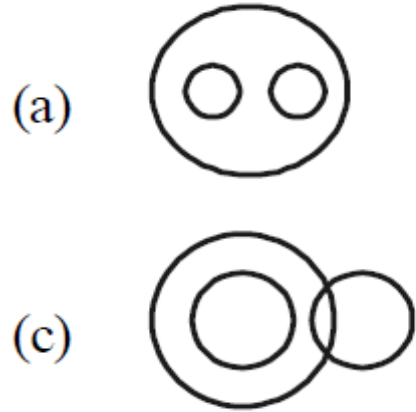


Q) Which of the following diagrams indicates the best relation between Stamp, Pen and Chalk?

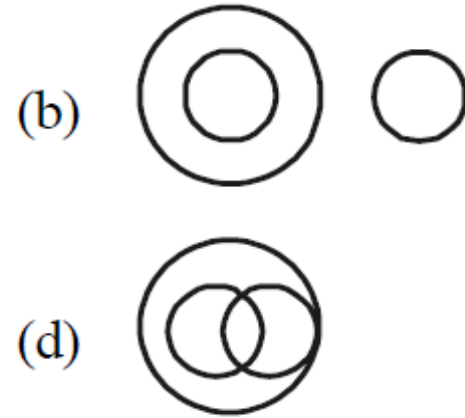
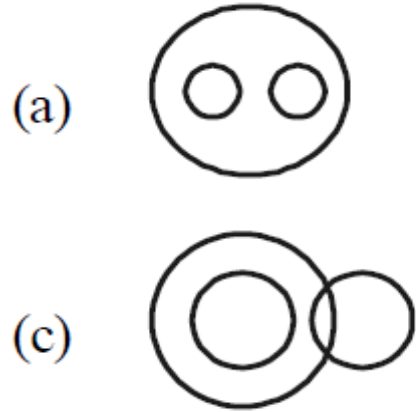
- (a) 
- (b) 
- (c) 
- (d) 

Ans: (c)

Q) Which of the following diagrams indicates the best relation between Doctors, Human Beings and Married People'?



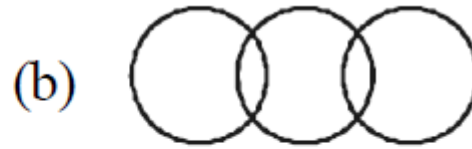
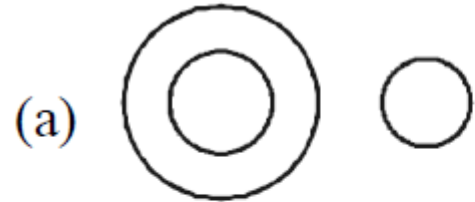


Q) Which of the following diagrams indicates the best relation between Doctors, Human Beings and Married People'?


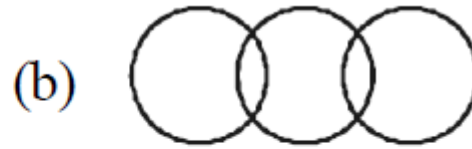
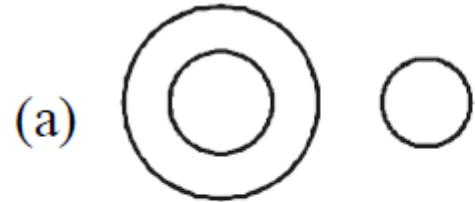


Ans: (d)

Q) Which of the following diagrams indicates the best relation between Factory, Product and Machinery ?



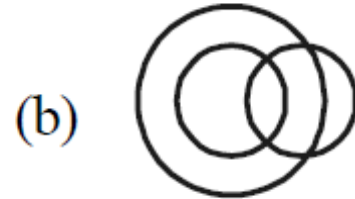


Q) Which of the following diagrams indicates the best relation between Factory, Product and Machinery ?


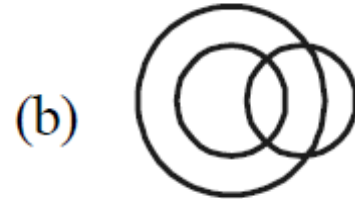


Ans: (d)

Q) Which of the following diagrams indicates the best relation between Singers, Athletes and Girls?


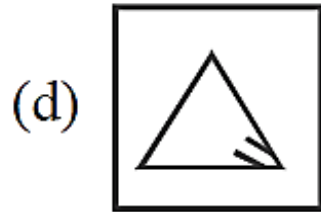
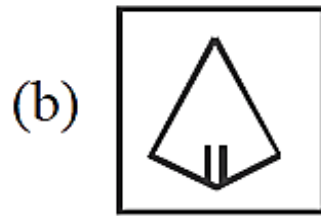
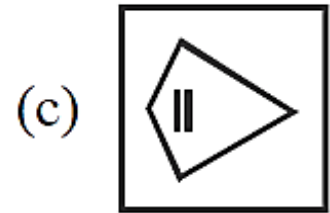
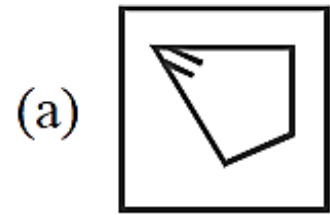
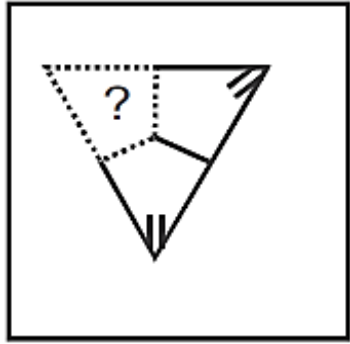


Q) Which of the following diagrams indicates the best relation between Singers, Athletes and Girls?

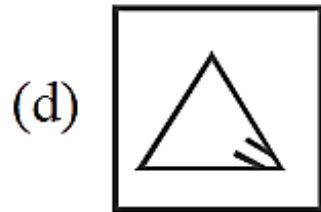
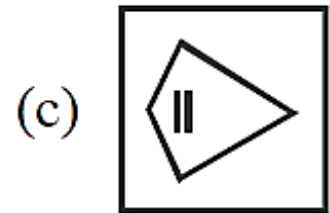
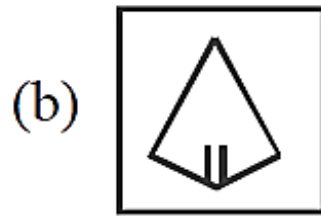
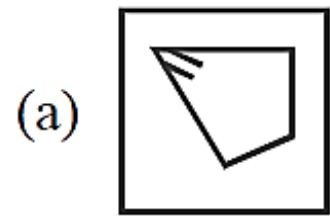
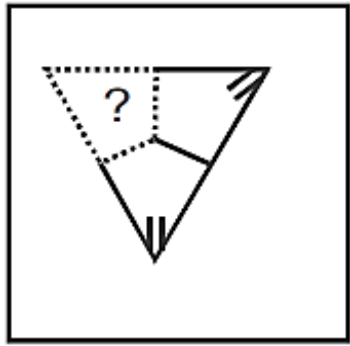


Ans: (c)

Q)


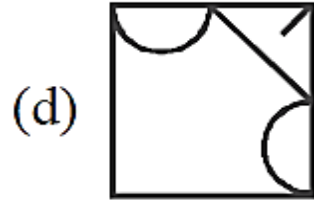
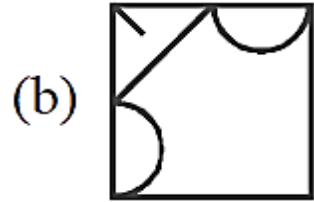
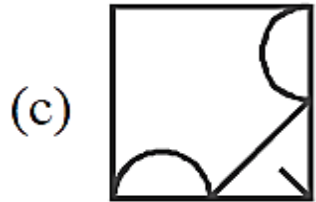

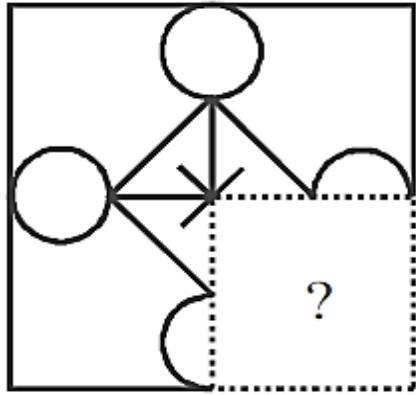


Q)

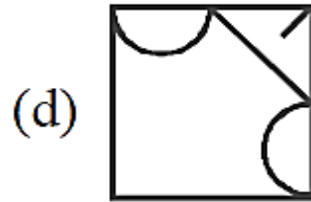
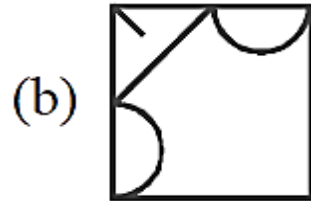
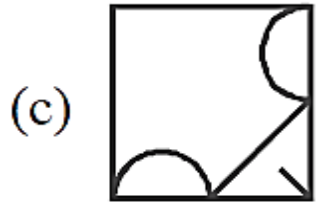

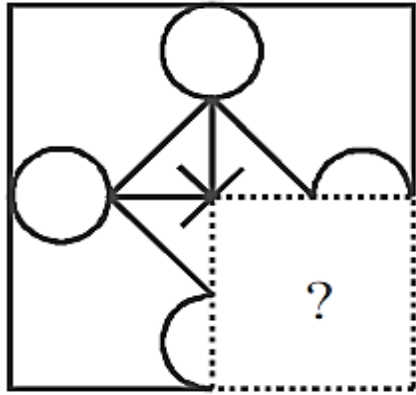


Ans: (a)

Q)



Q)


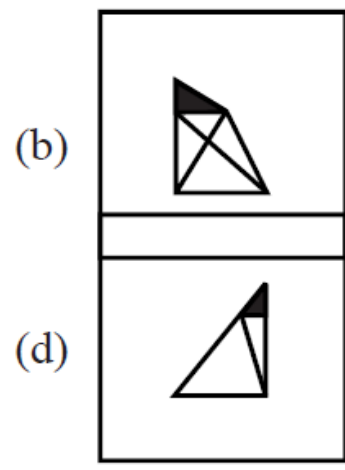
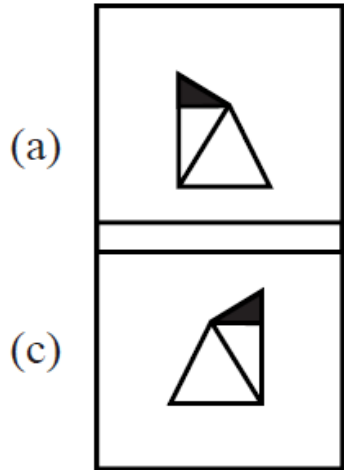


Ans: (b)

Q) Question Figure



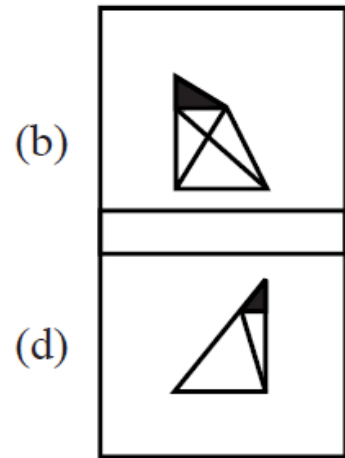
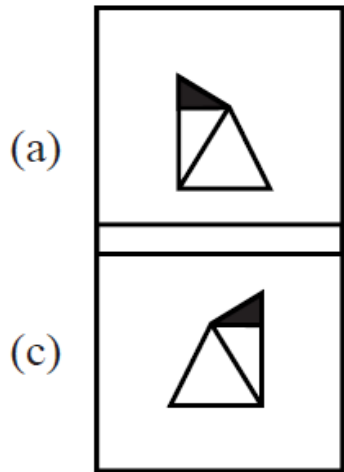
Answer Figures



Q) Question Figure

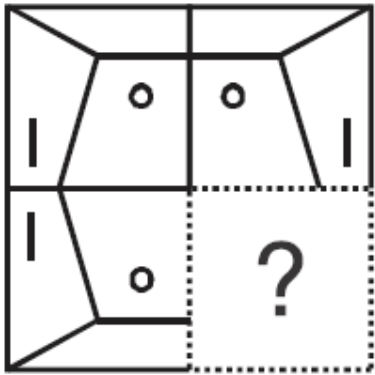


Answer Figures



Ans: (a)

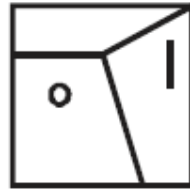
Q)



(a)




(b)



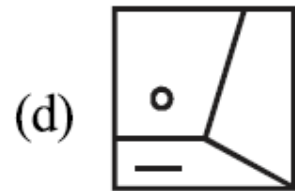
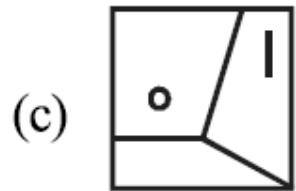
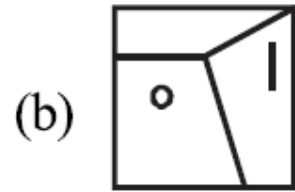
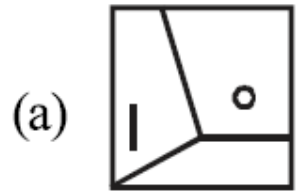
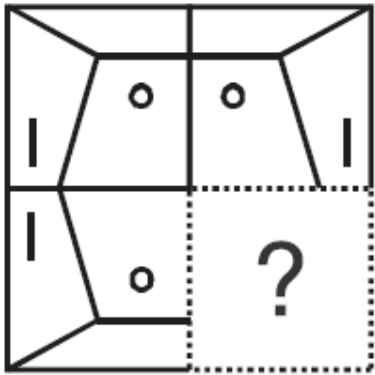
(c)



(d)




Q)



Ans: (c)

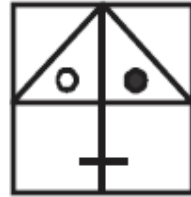
Q)



(a)




(b)



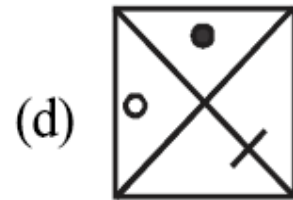
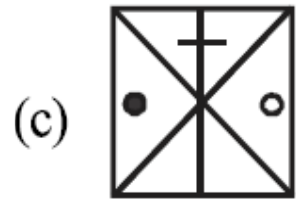
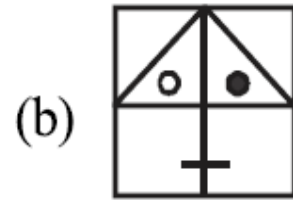
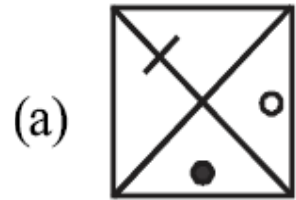

(c)



(d)

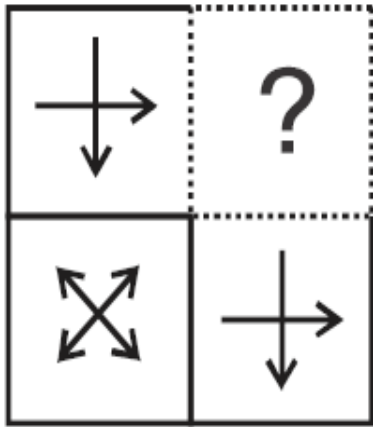


Q)

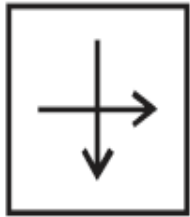


Ans: (a)

Q)



(a)




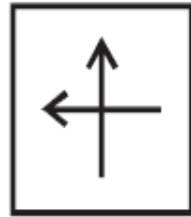
(b)



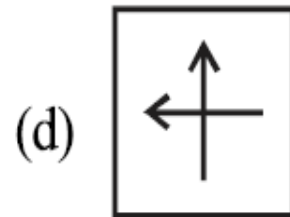
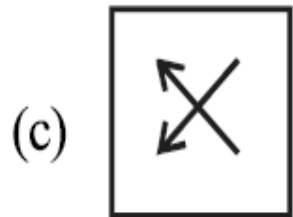
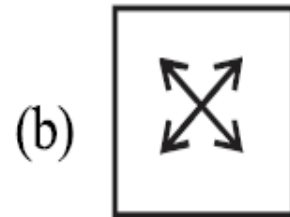
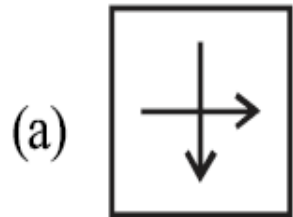
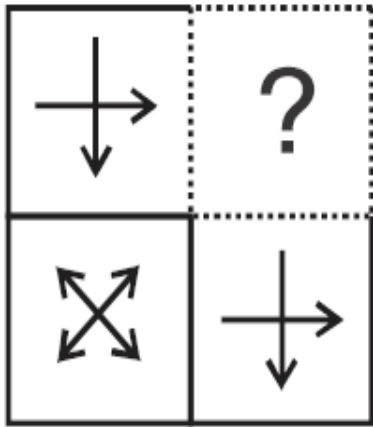
(c)



(d)



Q)



Ans: (b)

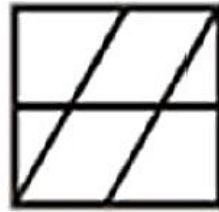
Q)



(a)




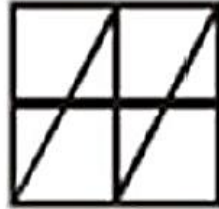
(b)



(c)



(d)



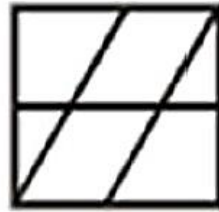
Q)



(a)



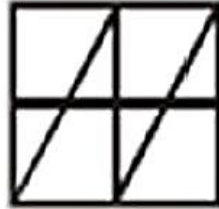
(b)



(c)

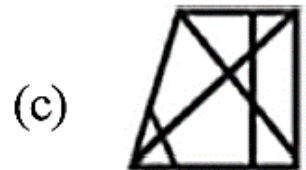
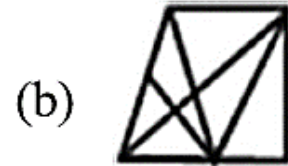

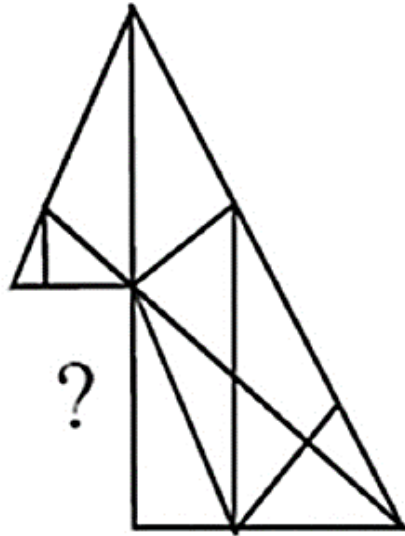


(d)

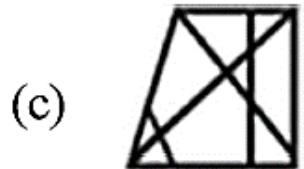
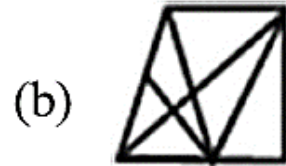
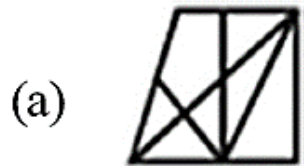
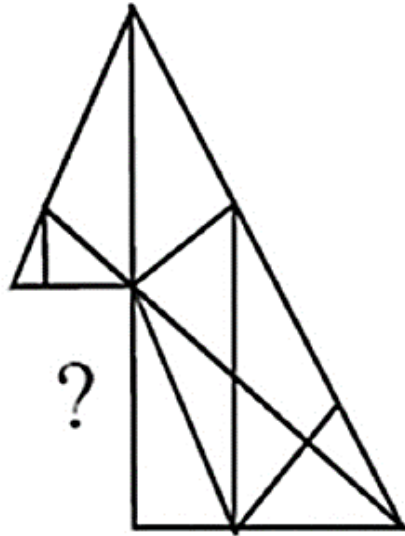


Ans: (c)

Q)

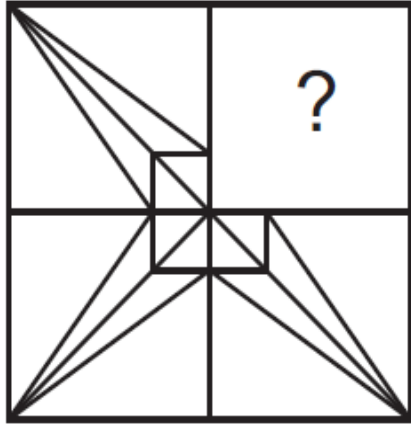


Q)



Ans: (a)

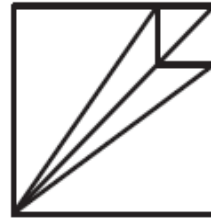
Q)



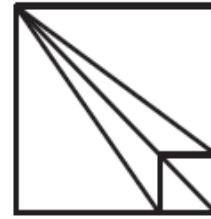
(a)




(b)



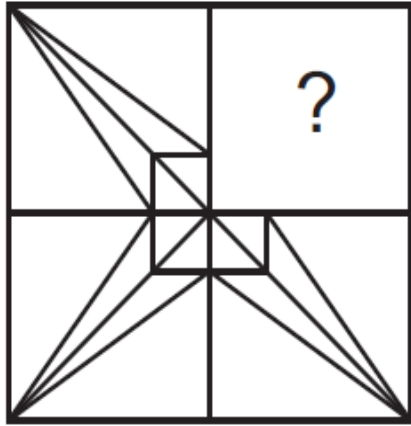
(c)



(d)



Q)



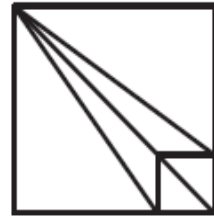
(a)



(b)




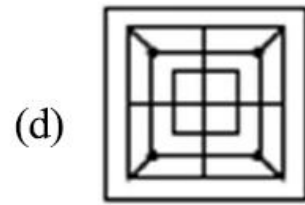
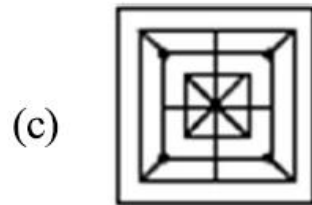
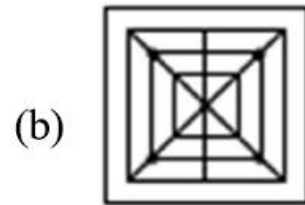
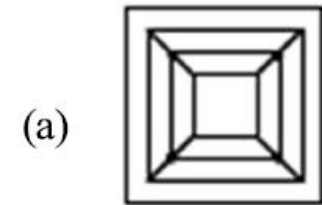
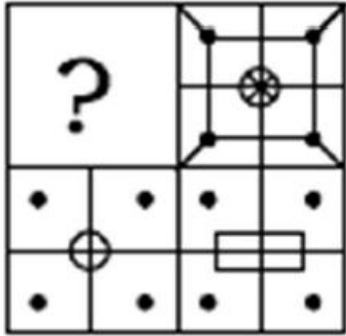
(c)



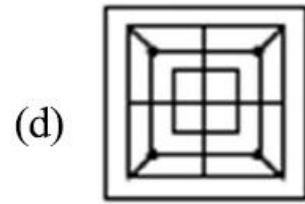
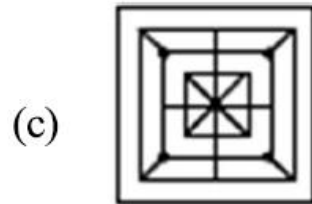
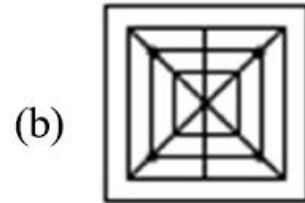
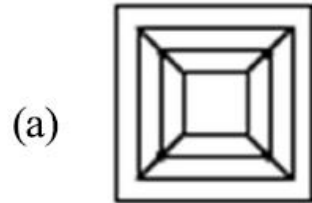
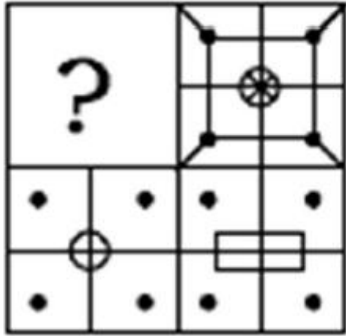
(d)

Ans: (b)

Q) Question Figure

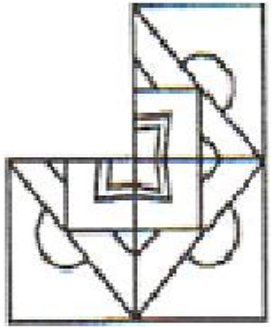


Q) Question Figure

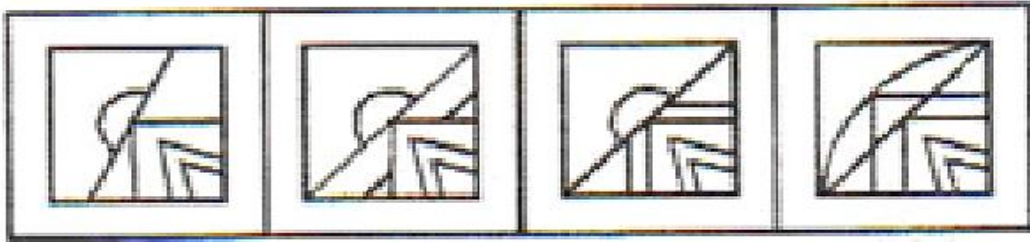


Ans: (c)

Q) Question Figures:



Answer Figures:




(a)

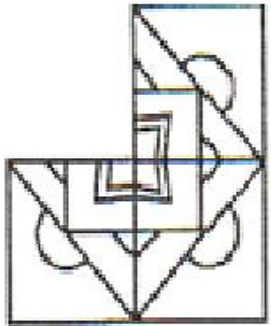
(b)

(c)

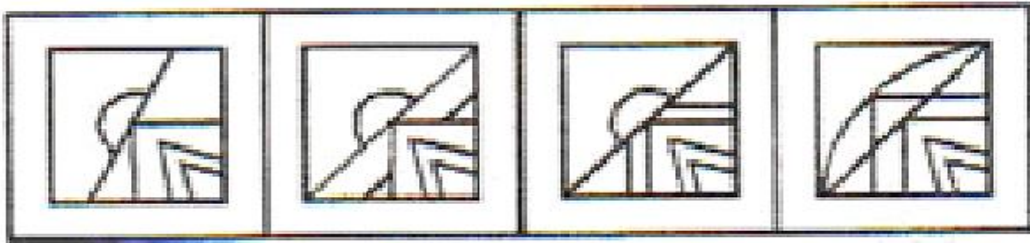
(d)



Q) Question Figures:



Answer Figures:



(a)

(b)

(c)

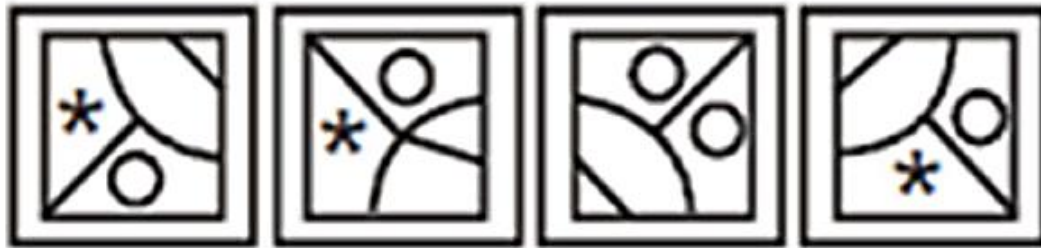
(d)

Ans: (b)

Q) Question Figure:



Answer Figure:




(a)

(b)

(c)

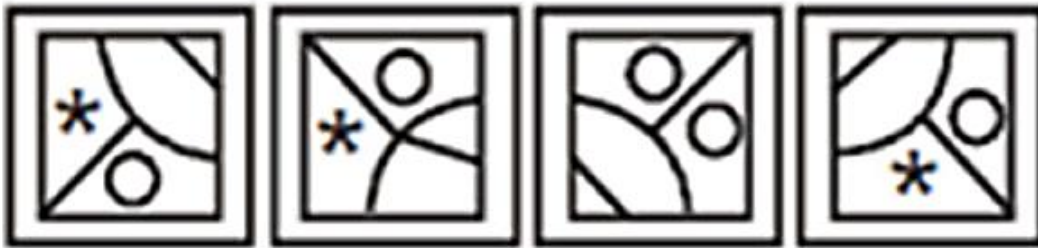
(d)



Q) Question Figure:



Answer Figure:



(a)

(b)

(c)

(d)

Ans: (d)

Q) Question Figure:



Answer Figure:




(a)

(b)

(c)

(d)



Q) Question Figure:



Answer Figure:



(a)

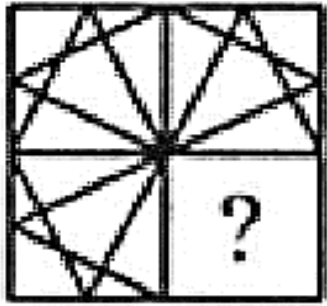
(b)

(c)

(d)

Ans: (d)

Q)



(X)



(a)




(b)



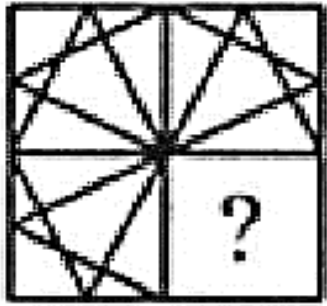
(c)



(d)



Q)



(X)



(a)



(b)



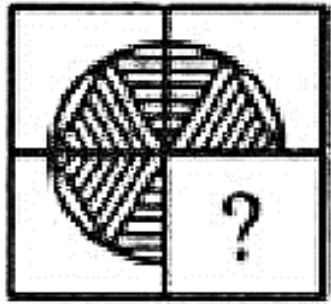
(c)



(d)

Ans: (d)

Q)



(X)



(a)




(b)



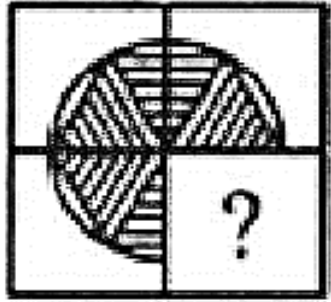
(c)



(d)



Q)



(X)



(a)



(b)



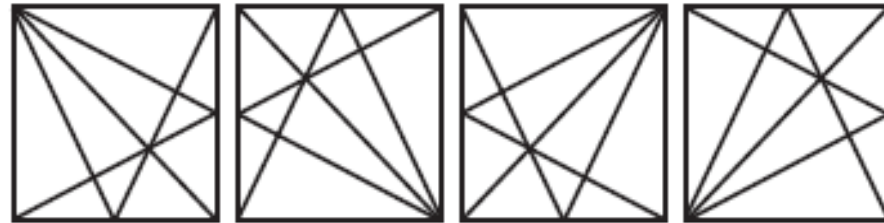
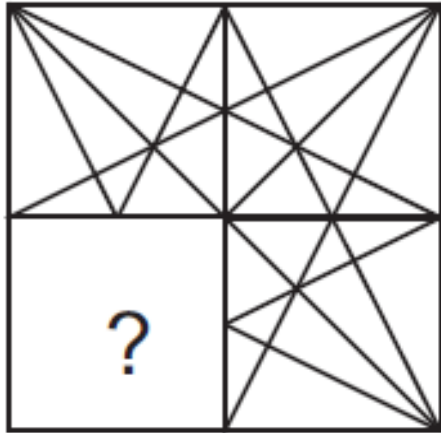
(c)



(d)

Ans: (c)

Q)




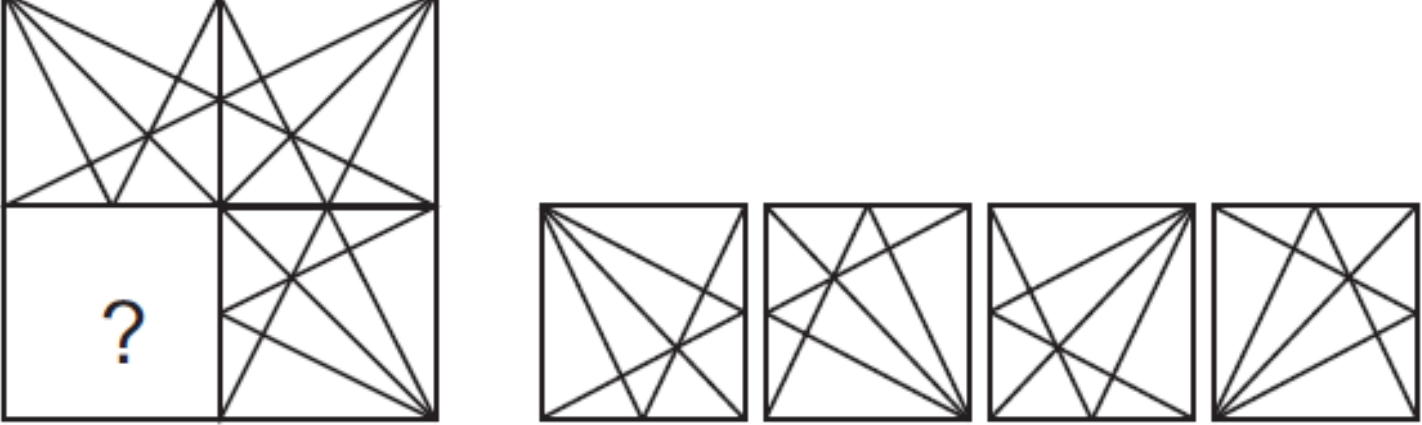
(a)

(b)

(c)

(d)

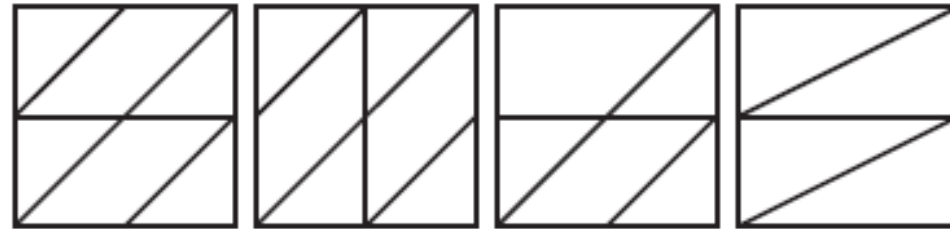
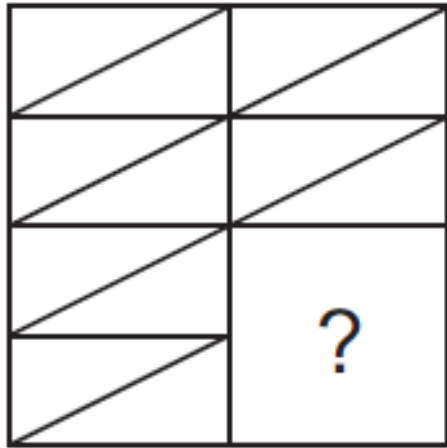


Q) 

(a) (b) (c) (d)

Ans: (d)

Q)




(a)

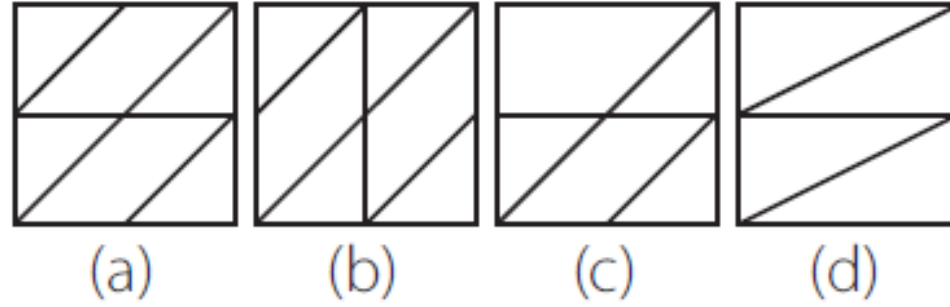
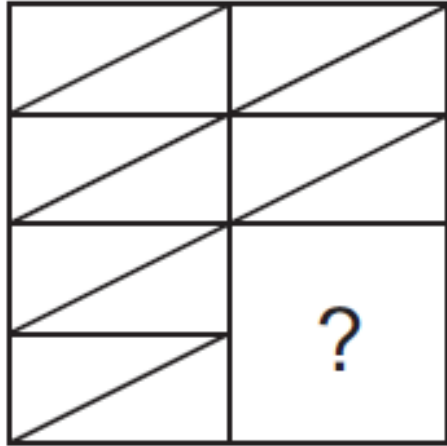
(b)

(c)

(d)




Q)



Ans: (d)

Q)




(X)




(a)




(b)




(c)



(d)



Q)




(X)




(a)



(b)




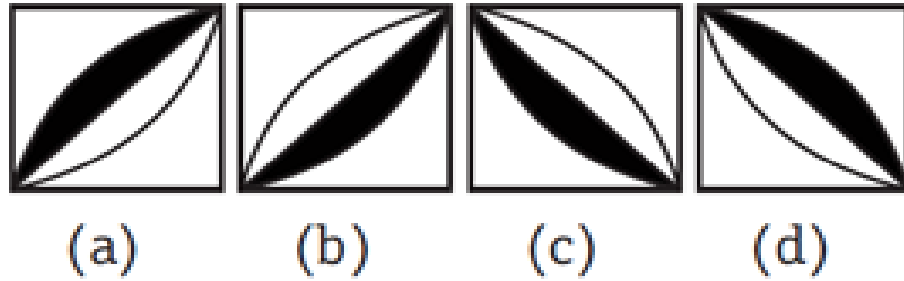
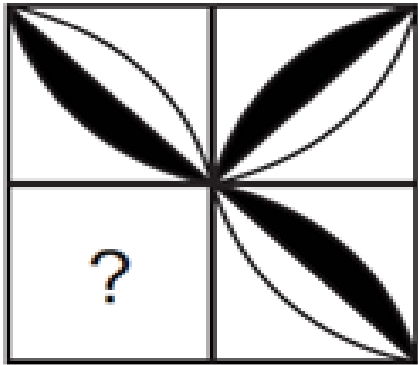
(c)



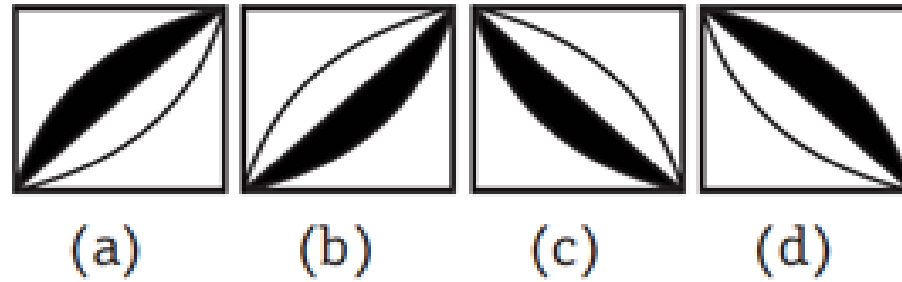
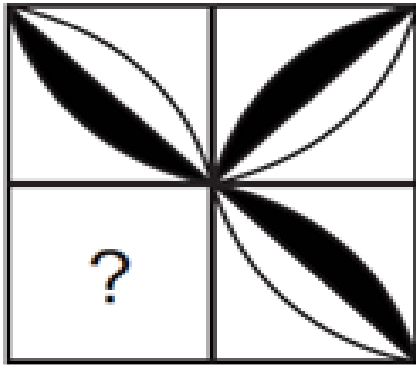
(d)

Ans: (b)

Q)




Q)



Ans: (b)

Q)



(X)



(a)




(b)




(c)



(d)



Q)



(X)



(a)



(b)



(c)



(d)

Ans: (d)

Q)



(X)



(a)




(b)



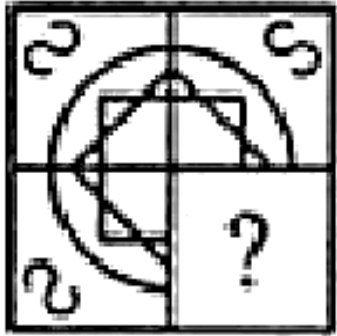
(c)



(d)



Q)



(X)



(a)



(b)



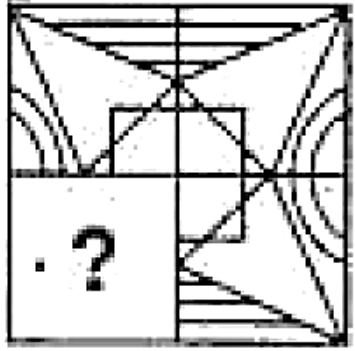
(c)



(d)

Ans: (d)

Q)



(X)



(a)




(b)



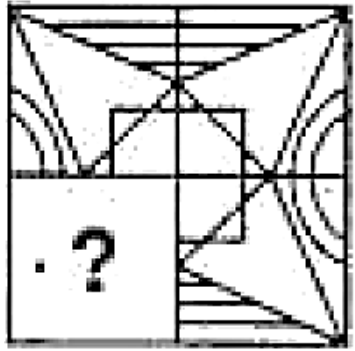
(c)



(d)



Q)



(X)



(a)



(b)




(c)



(d)

Ans: (d)

Q)




(a)


(b)

(c)

(d)



Q)



(a)



(b)



(c)



(d)

Ans: (b)

Bundles 16[View All](#)

SSB Interview Online Course

17 Courses

₹3,999 ₹4,999 20% OFF



NDA Exam Online Course 2022

23 Courses

₹3,999 ₹4,999 20% OFF



CDS Exam Online Course 2022

39 Courses

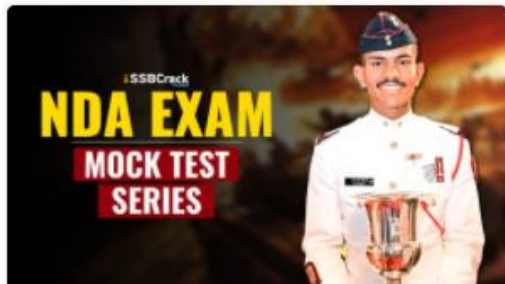
₹3,999 ₹4,999 20% OFF



AFCAT Exam Online Course 2022

23 Courses

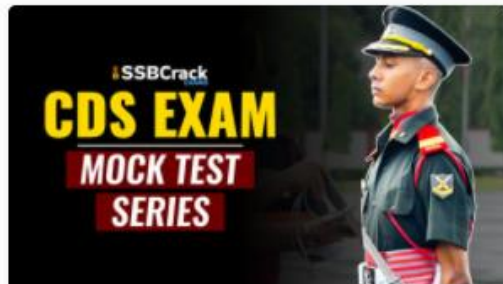
₹3,999 ₹4,999 20% OFF

Test Series 07[View All](#)

NDA 2022 Mock Test Series

40 Tests

₹499 ₹999 50% OFF



CDS Exam 2022 Mock Test Series

30 Tests

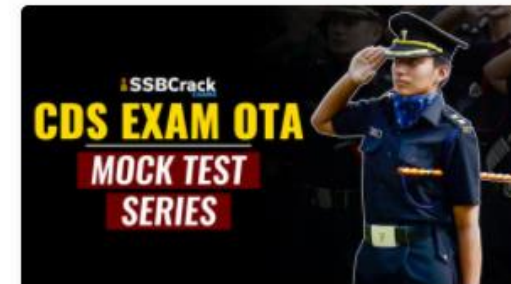
₹499 ₹999 50% OFF



AFCAT 2022 Mock Test Series

20 Tests

₹499 ₹999 50% OFF



CDS Exam OTA 2022 Mock Test Series

20 Tests

₹499 ₹999 50% OFF

AFCAT 2 2022

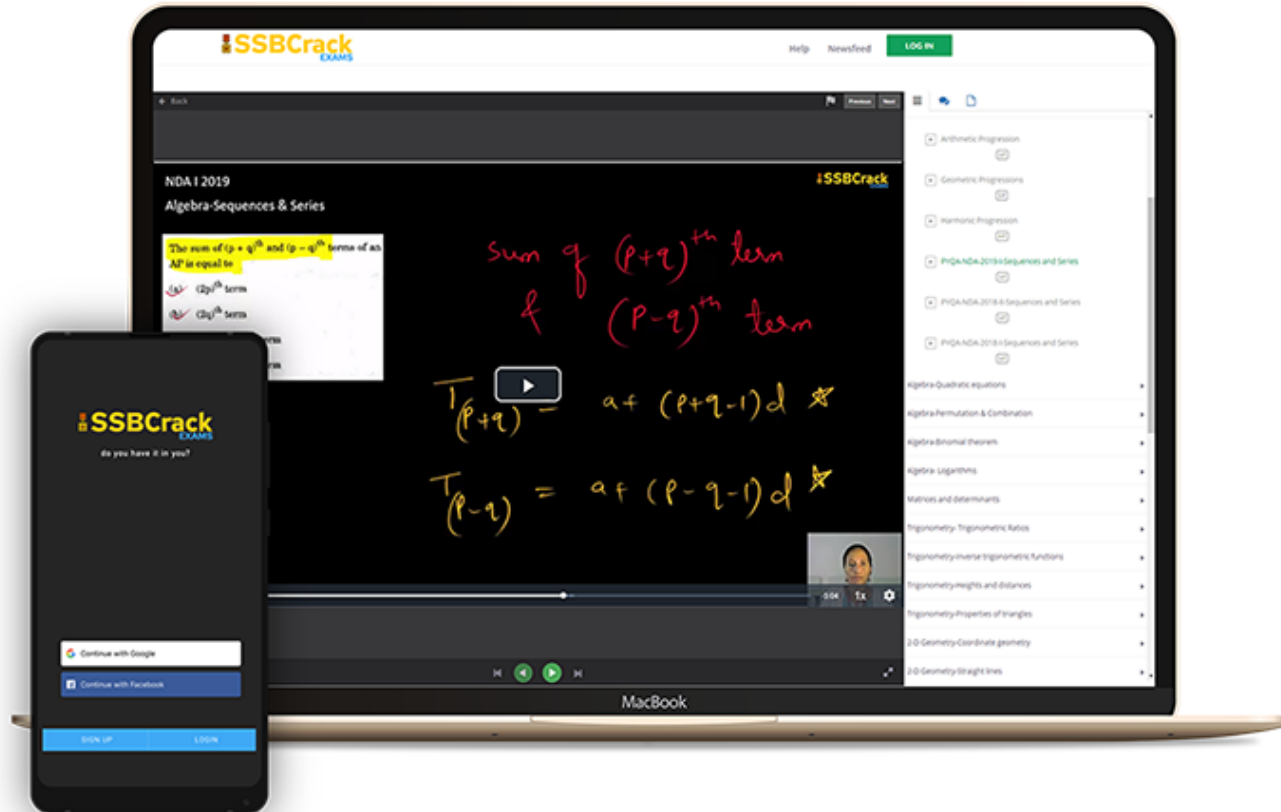
LIVE CLASS

TIME TABLE

DATE	TIME	SUBJECT
17 AUG 2022	10 AM TO 1 PM	General Awareness Part 1
17 AUG 2022	2 PM TO 5 PM	English Part 1
17 AUG 2022	6 PM TO 9 PM	Static GK Part 1
18 AUG 2022	10 AM TO 1 PM	General Awareness Part 2
18 AUG 2022	2 PM TO 5 PM	English Part 2
18 AUG 2022	6 PM TO 9 PM	Static GK Part 2
19 AUG 2022	10 AM TO 1 PM	Current Affairs
19 AUG 2022	2 PM TO 5 PM	English Part 3
19 AUG 2022	6 PM TO 9 PM	Defence Current Affairs
20 AUG 2022	10 AM TO 1 PM	Numerical Ability Part 1
20 AUG 2022	2 PM TO 5 PM	Reasoning Part 1
20 AUG 2022	6 PM TO 9 PM	General Sciences
22 AUG 2022	10 AM TO 1 PM	Numerical Ability Part 2
22 AUG 2022	2 PM TO 5 PM	Reasoning Part 2
23 AUG 2022	10 AM TO 1 PM	Numerical Ability Part 3
23 AUG 2022	2 PM TO 5 PM	Reasoning Part 3



India's Most Popular Portal for Defence Exam Preparation



www.ssbcrackexams.com













CODE: WARRIOR10

get an extra **10%** off on all courses



Courses

ACC (1) AFCAT (1) AIRMEN (2) CAPF (1) CDS EXAM (2) INET OFFICER (1) MNS (1) MOCK TEST (3) NDA EXAM (1) PC(SL) (1) SCO (1) SSB INTERVIEW (1) TERRITORIAL ARMY (1)

<p>HIGHEST RATED</p>  <p>617 PEOPLE ONLINE NOW</p> <p>CDS Exam Online Course 2021 – 2022</p> <p>★★★★★ 5 (80)</p> <p>₹ 4,999.00</p>	<p>BEST SELLER</p>  <p>997 PEOPLE ONLINE NOW</p> <p>CDS OTA Exam Online Course 2021 – 2022</p> <p>★★★★★ 5 (77)</p> <p>₹ 4,499.00</p>	<p>BEST SELLER</p>  <p>206 PEOPLE ONLINE NOW</p> <p>AFCAT Exam Online Course 2022</p> <p>★★★★★ 5 (64)</p> <p>₹ 4,999.00</p>	<p>HIGHEST RATED</p>  <p>561 PEOPLE ONLINE NOW</p> <p>NDA Exam Online Course 2021 – 2022</p> <p>★★★★★ 5 (72)</p> <p>₹ 4,999.00</p>	<p>HOT & NEW</p>  <p>740 PEOPLE ONLINE NOW</p> <p>Territorial Army Exam Online Course 2021 – 2022</p> <p>★★★★★ 5 (53)</p> <p>₹ 4,999.00</p>	<p>HOT & NEW</p>  <p>995 PEOPLE ONLINE NOW</p> <p>ACC Exam Online Course Army Cadet College 2021 – 2022</p> <p>★★★★★ 5 (53)</p> <p>₹ 6,999.00</p>
<p>HOT & NEW</p>  <p>90 PEOPLE ONLINE NOW</p> <p>OIR Test and PPDT Online Course – Officers Intelligence Rating Test</p> <p>★★★★★ 5 (50)</p> <p>₹ 2,999.00</p>	<p>BEST SELLER</p>  <p>98 PEOPLE ONLINE NOW</p> <p>MNS Military Nursing Service Exam Online Course 2022</p> <p>★★★★★ 5 (44)</p> <p>₹ 4,999.00</p>	<p>HOT & NEW</p>  <p>37 PEOPLE ONLINE NOW</p> <p>AFCAT Exam Online Mock Test Series</p> <p>★★★★★ 5 (65)</p> <p>₹ 299.00</p>	<p>BEST SELLER</p>  <p>36 PEOPLE ONLINE NOW</p> <p>CDS Exam Online Mock Test Series</p> <p>★★★★★ 5 (79)</p> <p>₹ 299.00</p>	<p>BEST SELLER</p>  <p>18 PEOPLE ONLINE NOW</p> <p>NDA Exam Online Mock Test Series</p> <p>★★★★★ 5 (72)</p> <p>₹ 299.00</p>	<p>HOT & NEW</p>  <p>37 PEOPLE ONLINE NOW</p> <p>UPSC CAPF Assistant Commandant Online Course 2022</p> <p>★★★★★ 5 (46)</p> <p>₹ 4,999.00</p>

