

# AFCAT 2 2024

LIVE ●

# REASONING

# MISSING CHARACTERS

SSBCrack  
EXAMS



RUBY MA'AM

Q) Select the missing numbers from the given responses

43	25	?
21	40	35
35	34	28

(a) 36

(b) 46

(c) 40

(d) 26

Q) Select the missing numbers from the given responses

43	25	?
21	40	35
35	34	28

(a) 36

(b) 46

(c) 40

(d) 26

**Ans: (a)**

Q) 19 18 34 32 44 41

2

4

?

(a) 3

(b) 6

(c) 9

(d) 4

Q) 19   18   34   32   44   41

2

4

?

(a) 3

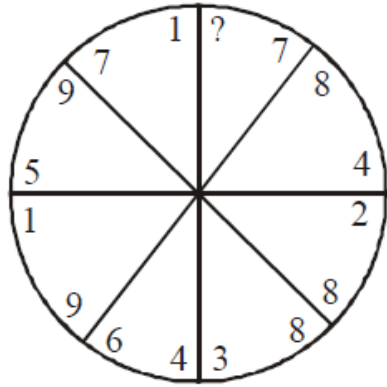
(b) 6

(c) 9

(d) 4

**Ans: (b)**

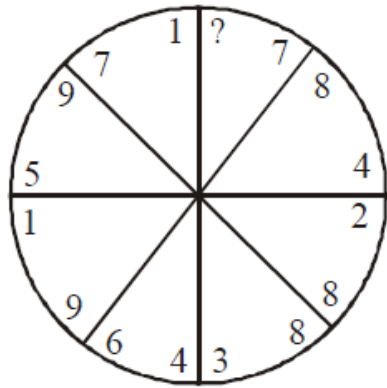
Q) Find the missing number?



- (a) 6
- (c) 3

- (b) 2
- (d) 4

Q) Find the missing number?

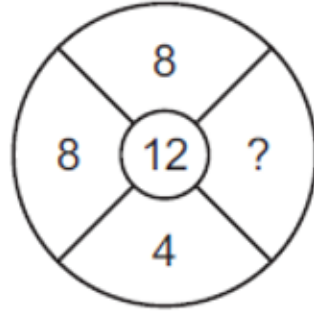
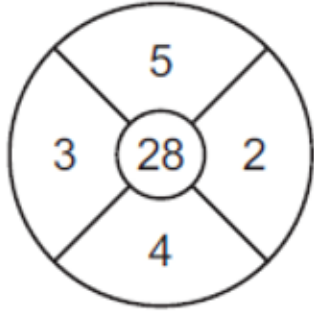


- (a) 6
- (c) 3

- (b) 2
- (d) 4

**Ans: (b)**

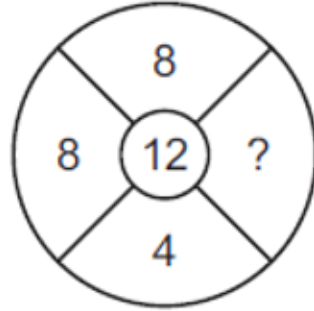
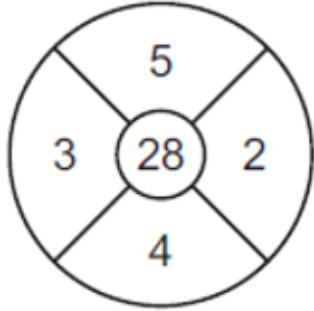
Q) Find the missing number from the given options.



- (a) 3
- (b) 9
- (c) 1
- (d) 2



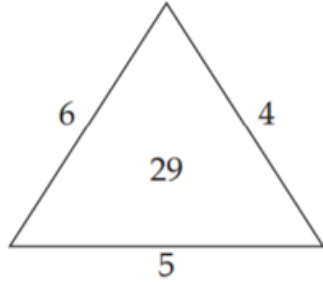
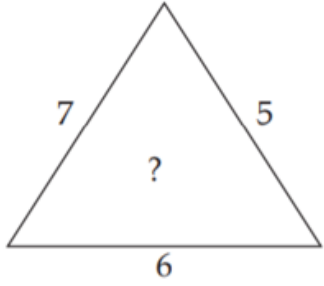
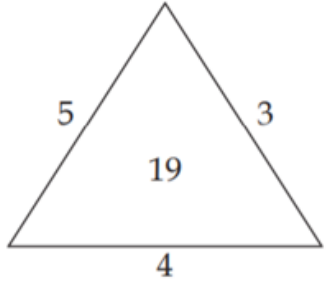
Q) Find the missing number from the given options.



- (a) 3
- (b) 9
- (c) 1
- (d) 2

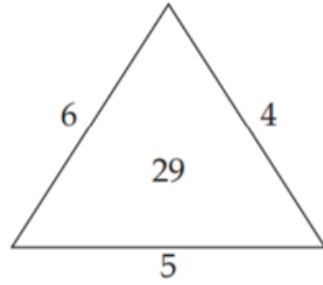
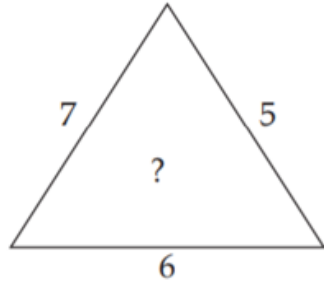
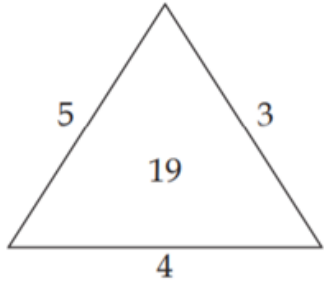
**Ans: (d)**

Q) Find the missing number.



- (a) 25 (b) 37 (c) 41 (d) 47

Q) Find the missing number.



(a) 25 (b) 37 (c) 41 (d) 47

**Ans: (c)**

Q) In the following question, a set of figures carrying certain characters is given.

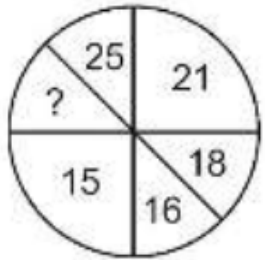
Assuming that the characters follow a similar pattern, find the missing character.



- a. 28
- b. 30
- c. 35
- d. 27

Q) In the following question, a set of figures carrying certain characters is given.

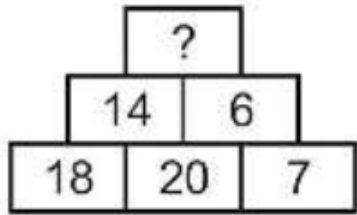
Assuming that the characters follow a similar pattern, find the missing character.



- a. 28
- b. 30
- c. 35
- d. 27

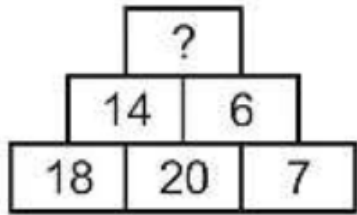
**Ans: (b)**

Q) In the following question, a set of figures carrying certain characters is given.  
Assuming that the characters follow a similar pattern, find the missing character.



- a. 24
- b. 25
- c. 28
- d. 20

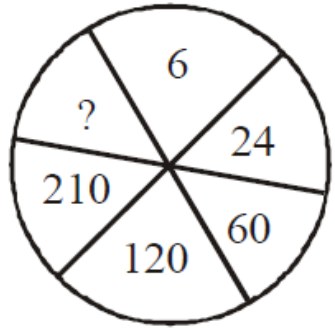
Q) In the following question, a set of figures carrying certain characters is given.  
Assuming that the characters follow a similar pattern, find the missing character.



- a. 24
- b. 25
- c. 28
- d. 20

**Ans: (b)**

Q) Select the missing number front the given responses.



(a) 330

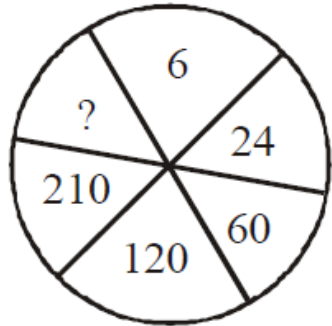
(b) 336

(c) 428

(d) 420



Q) Select the missing number front the given responses.



(a) 330

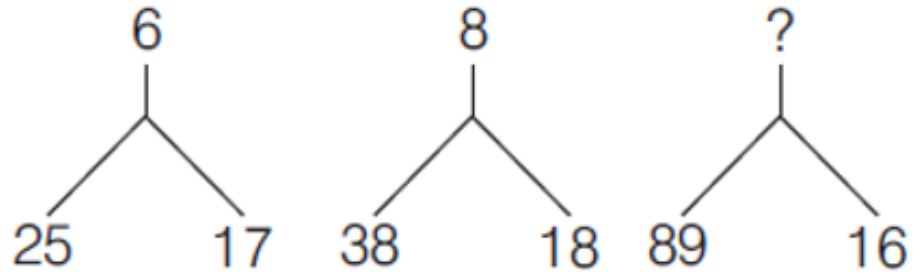
(b) 336

(c) 428

(d) 420

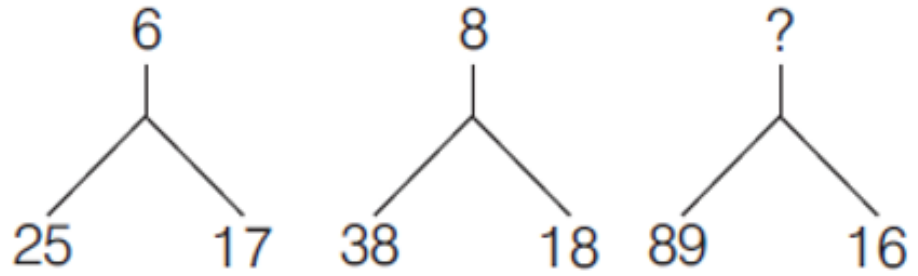
**Ans: (b)**

Q) Find the missing number from the given options.



- (a) 13
- (b) 15
- (c) 17
- (d) 19

Q) Find the missing number from the given options.

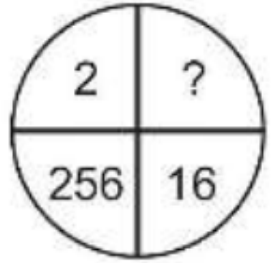


- (a) 13
- (b) 15
- (c) 17
- (d) 19

**Ans: (b)**

Q) In the following question, a set of figures carrying certain characters is given.

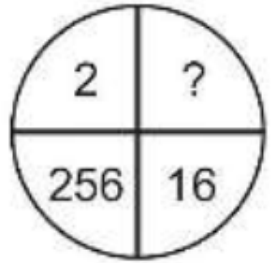
Assuming that the characters follow a similar pattern, find the missing character.



- a. 8
- b. 4
- c. 32
- d. 16

Q) In the following question, a set of figures carrying certain characters is given.

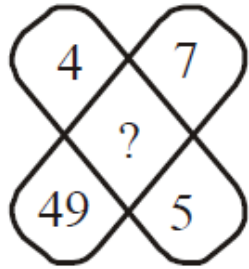
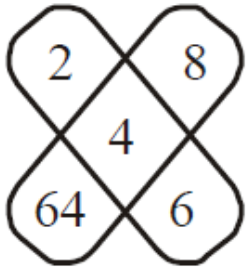
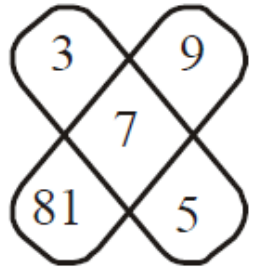
Assuming that the characters follow a similar pattern, find the missing character.



- a. 8
- b. 4
- c. 32
- d. 16

**Ans: (b)**

Q)



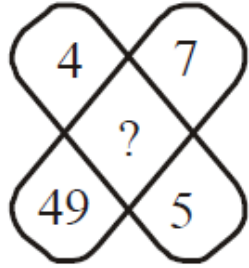
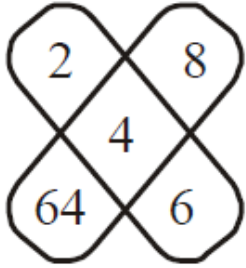
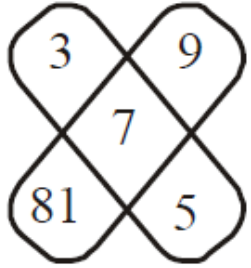
(a) 1

(c) 6

(b) 8

(d) 16

Q)



(a) 1

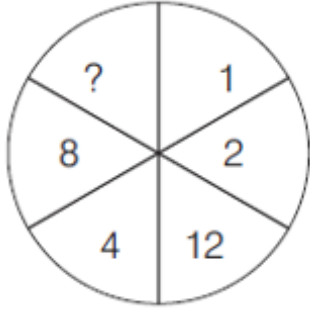
(c) 6

(b) 8

(d) 16

**Ans: (c)**

Q) Consider the following figure

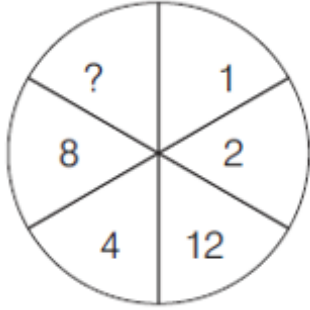


Find out the missing number from the following

- (a) 12
- (b) 16
- (c) 32
- (d) 48



Q) Consider the following figure



Find out the missing number from the following

- (a) 12
- (b) 16
- (c) 32
- (d) 48

**Ans: (d)**

Q) Select the missing number from the given responses?

6	9	12
36	81	144
24	63	?

- (a) 120
- (b) 80
- (c) 949
- (d) 102

Q) Select the missing number from the given responses?

6	9	12
36	81	144
24	63	?

- (a) 120
- (b) 80
- (c) 949
- (d) 102

**Ans: (a)**

Q) In the following question, select the number which can be placed at the sign of question mark from the given alternatives.

4	5	6	125
8	9	7	513
11	?	6	536

- (a) 7
- (b) 10
- (c) 9
- (d) 8

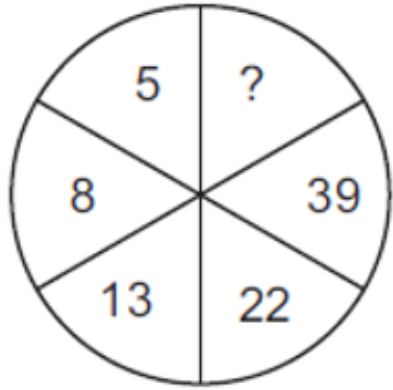
Q) In the following question, select the number which can be placed at the sign of question mark from the given alternatives.

4	5	6	125
8	9	7	513
11	?	6	536

- (a) 7
- (b) 10
- (c) 9
- (d) 8

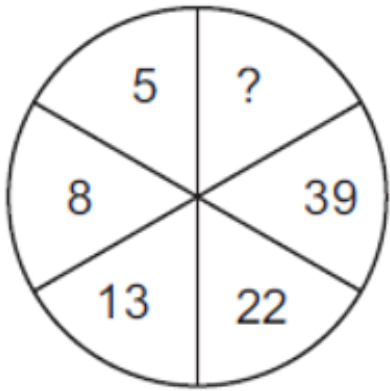
**Ans: (d)**

Q) Find the missing number from the given options.



- (a) 66
- (b) 72
- (c) 71
- (d) 78

Q) Find the missing number from the given options.



- (a) 66
- (b) 72
- (c) 71
- (d) 78

**Ans: (b)**

Q) Fill up the missing number.

1	2	3
11	7	5
120	45	?

(a) 15 (b) 16 (c) 17 (d) 18



Q) Fill up the missing number.

1	2	3
11	7	5
120	45	?

(a) 15 (b) 16 (c) 17 (d) 18

**Ans: (b)**

Q) Fill up the missing letter and number.

A2	C4	E6
G3	I5	?
M5	O9	Q14

(a) L10 (b) K15 (c) J15 (d) K8

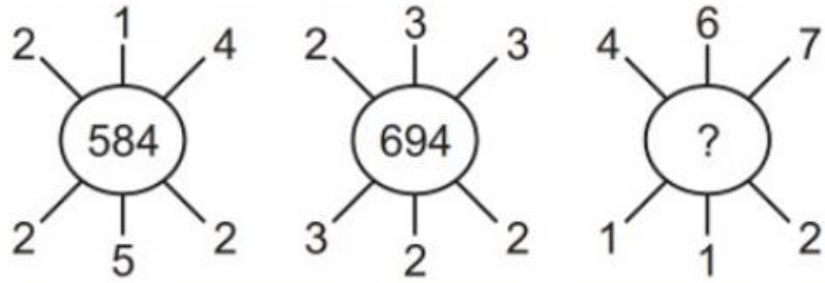
Q) Fill up the missing letter and number.

A2	C4	E6
G3	I5	?
M5	O9	Q14

(a) L10 (b) K15 (c) J15 (d) K8

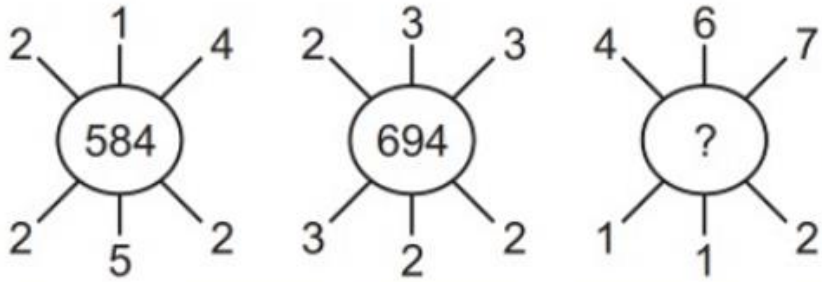
**Ans: (d)**

Q) Fill up the missing number.



- (a) 937 (b) 824 (c) 769 (d) 678

Q) Fill up the missing number.



(a) 937 (b) 824 (c) 769 (d) 678

**Ans: (d)**

Q) Find Missing Term.

2	9	11	7
8	5	13	-3
7	?	10	(-4)
6	4	10	?

- (a) 3 and 2
- (b) (-3) and 2
- (c) 3 and (-2)
- (d) (-3) and (-2)

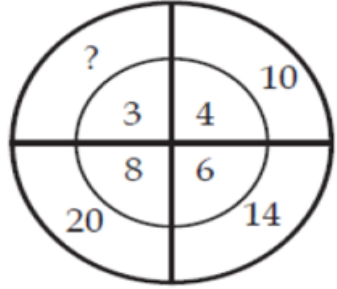
Q) Find Missing Term.

2	9	11	7
8	5	13	-3
7	?	10	(-4)
6	4	10	?

- (a) 3 and 2
- (b) (-3) and 2
- (c) 3 and (-2)
- (d) (-3) and (-2)

**Ans: (c)**

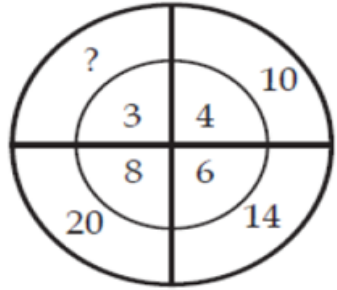
Q) Find Missing number.



- (a) 19 (b) 18 (c) 24 (d) 12



Q) Find Missing number.



(a) 19 (b) 18 (c) 24 (d) 12

**Ans: (a)**

Q) Find Missing Term.

7	9	8
2	4	3
5	7	6
16	30	?

(a) 17 (b) 23 (c) 47 (d) 73

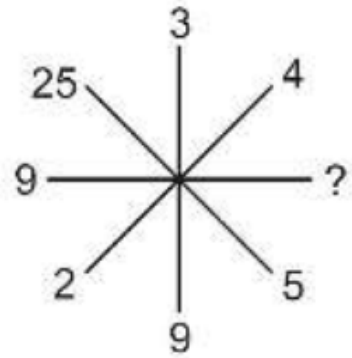
Q) Find Missing Term.

7	9	8
2	4	3
5	7	6
16	30	?

(a) 17 (b) 23 (c) 47 (d) 73

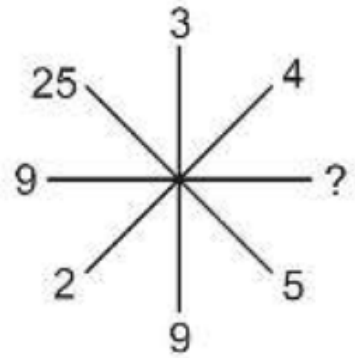
**Ans: (b)**

Q) In the following question, a set of figures carrying certain characters is given.  
Assuming that the characters follow a similar pattern, find the missing character.



- a. 81
- b. 64
- c. 32
- d. 20

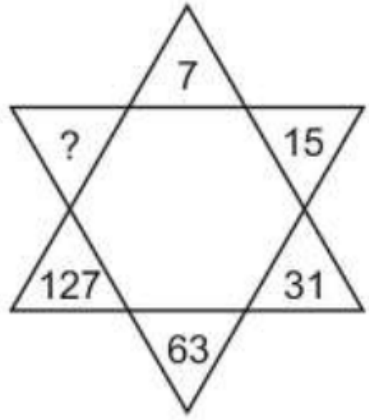
Q) In the following question, a set of figures carrying certain characters is given.  
Assuming that the characters follow a similar pattern, find the missing character.



- a. 81
- b. 64
- c. 32
- d. 20

**Ans: (a)**

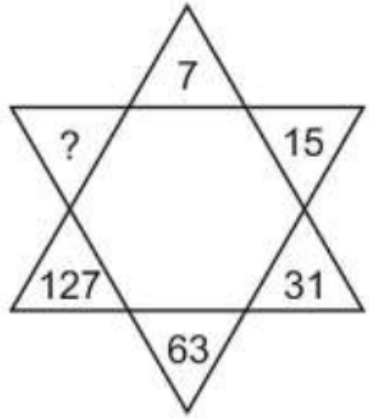
Q) In the following question, a set of figures carrying certain characters is given.  
Assuming that the characters follow a similar pattern, find the missing character.



- a. 190
- b. 221
- c. 236
- d. 255

EXAMS

Q) In the following question, a set of figures carrying certain characters is given.  
Assuming that the characters follow a similar pattern, find the missing character.



- a. 190
- b. 221
- c. 236
- d. 255

**Ans: (d)**

Q) In the following question, a set of figures carrying certain characters is given.

Assuming that the characters follow a similar pattern, find the missing character.

7	6	9
2	8	4
4	3	?
36	42	26

- a. 5
- b. 2
- c. 3
- d. 4



Q) In the following question, a set of figures carrying certain characters is given.  
Assuming that the characters follow a similar pattern, find the missing character.

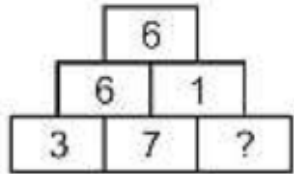
7	6	9
2	8	4
4	3	?
36	42	26

- a. 5
- b. 2
- c. 3
- d. 4

**Ans: (b)**

Q) In the following question, a set of figures carrying certain characters is given.

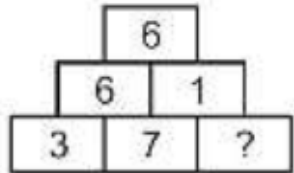
Assuming that the characters follow a similar pattern, find the missing character.



- a. 12
- b. 18
- c. 9
- d. 3

Q) In the following question, a set of figures carrying certain characters is given.

Assuming that the characters follow a similar pattern, find the missing character.



- a. 12
- b. 18
- c. 9
- d. 3

**Ans: (d)**

Q)

7	9	8
2	4	3
5	7	6
16	32	?

(a) 17

(c) 47

(b) 23

(d) 73

Q)

7	9	8
2	4	3
5	7	6
16	32	?

(a) 17

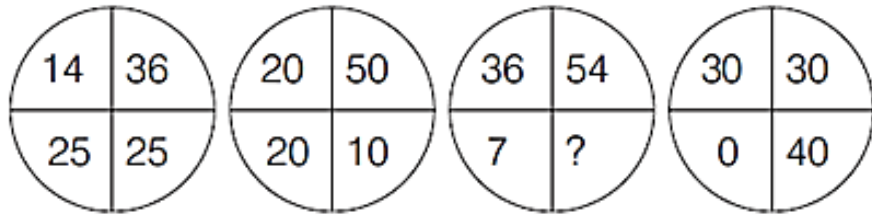
(c) 47

(b) 23

(d) 73

**Ans: (b)**

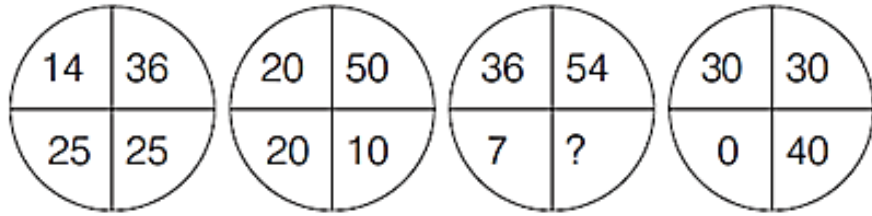
Q) Consider the following diagrams



Which one of the following is the missing number in the diagrams given above?

- (a) 1
- (b) 2
- (c) 3
- (d) 4

Q) Consider the following diagrams

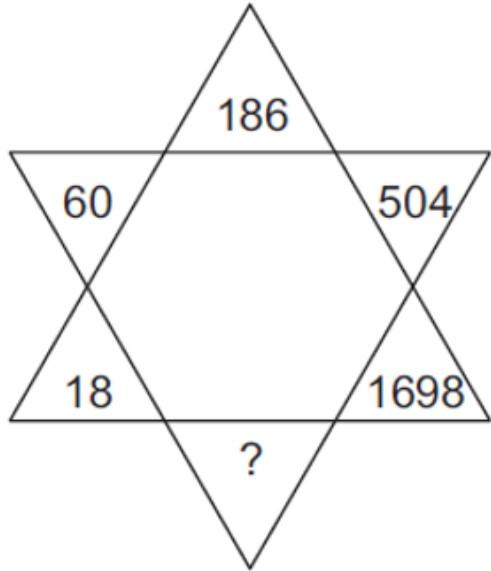


Which one of the following is the missing number in the diagrams given above?

- (a) 1
- (b) 2
- (c) 3
- (d) 4

**Ans: (c)**

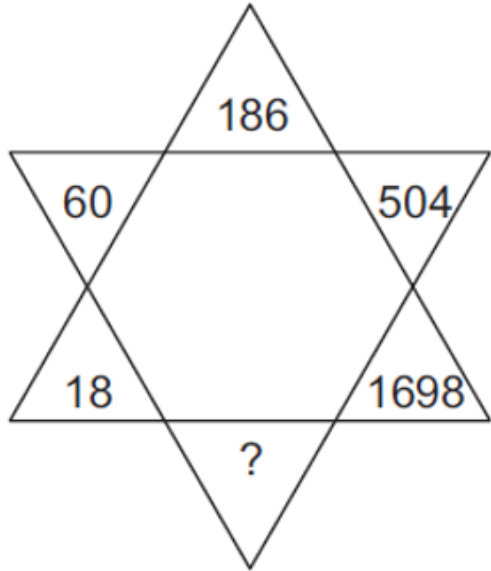
Q) Select the missing number from the given responses?



- (a) 5052
- (b) 5100
- (c) 5094
- (d) 4860



Q) Select the missing number from the given responses?



- (a) 5052
- (b) 5100
- (c) 5094
- (d) 4860

**Ans: (b)**

Q) Find the missing number from the given options.

7	5
---	---

5	21
---	----

21	7
----	---

6
---

13
----

?
---

- (a) 4
- (b) 8
- (c) 20
- (d) 14

Q) Find the missing number from the given options.

7	5
---	---

5	21
---	----

21	7
----	---

6
---

13
----

?
---

- (a) 4
- (b) 8
- (c) 20
- (d) 14

**Ans: (d)**

Q) Find the missing number from the given options.

4	5	6
2	3	7
1	8	3
21	98	?

- (a) 85
- (b) 94
- (c) 104
- (d) 49

Q) Find the missing number from the given options.

4	5	6
2	3	7
1	8	3
21	98	?

- (a) 85
- (b) 94
- (c) 104
- (d) 49

**Ans: (b)**