

**NDA-CDS 2 2024**

**GK**

**LIVE**

**GEOGRAPHY**

**REVISION**

**CLASS 3**

**RUBY MA'AM**





## 16 August 2024 Live Classes Schedule

8:00AM	16 AUGUST 2024 DAILY CURRENT AFFAIRS	RUBY MA'AM
9:00AM	16 AUGUST 2024 DAILY DEFENCE UPDATES	DIVYANSHU SIR

### SSB INTERVIEW LIVE CLASSES

9:00AM	COMPLETE PSYCH TEST	ANURADHA MA'AM
--------	---------------------	----------------

### NDA 2 2024 LIVE CLASSES

11:00AM	GK - GEOGRAPHY REVISION - CLASS 3	RUBY MA'AM
1:00PM	MATHS REVISION - CLASS 3	NAVJYOTI SIR
2:00PM	CHEMISTRY REVISION - CLASS 2	SHIVANGI MA'AM
5:30PM	ENGLISH - REVISION - CLASS 5	ANURADHA MA'AM

### CDS 2 2024 LIVE CLASSES

11:00AM	GK - GEOGRAPHY REVISION - CLASS 3	RUBY MA'AM
2:00PM	CHEMISTRY REVISION - CLASS 2	SHIVANGI MA'AM
3:00PM	MATHS REVISION - CLASS 9	NAVJYOTI SIR
5:30PM	ENGLISH - REVISION - CLASS 5	ANURADHA MA'AM



## Q. Teak And Sal Are Products Of

- (A) Tropical Dry Deciduous Forest
- (B) Tropical Evergreen Forests
- (C) Tropical Thorn Forests
- (D) Alpine Forests

## Q. Teak And Sal Are Products Of

**(A) Tropical Dry Deciduous Forest**

(B) Tropical Evergreen Forests

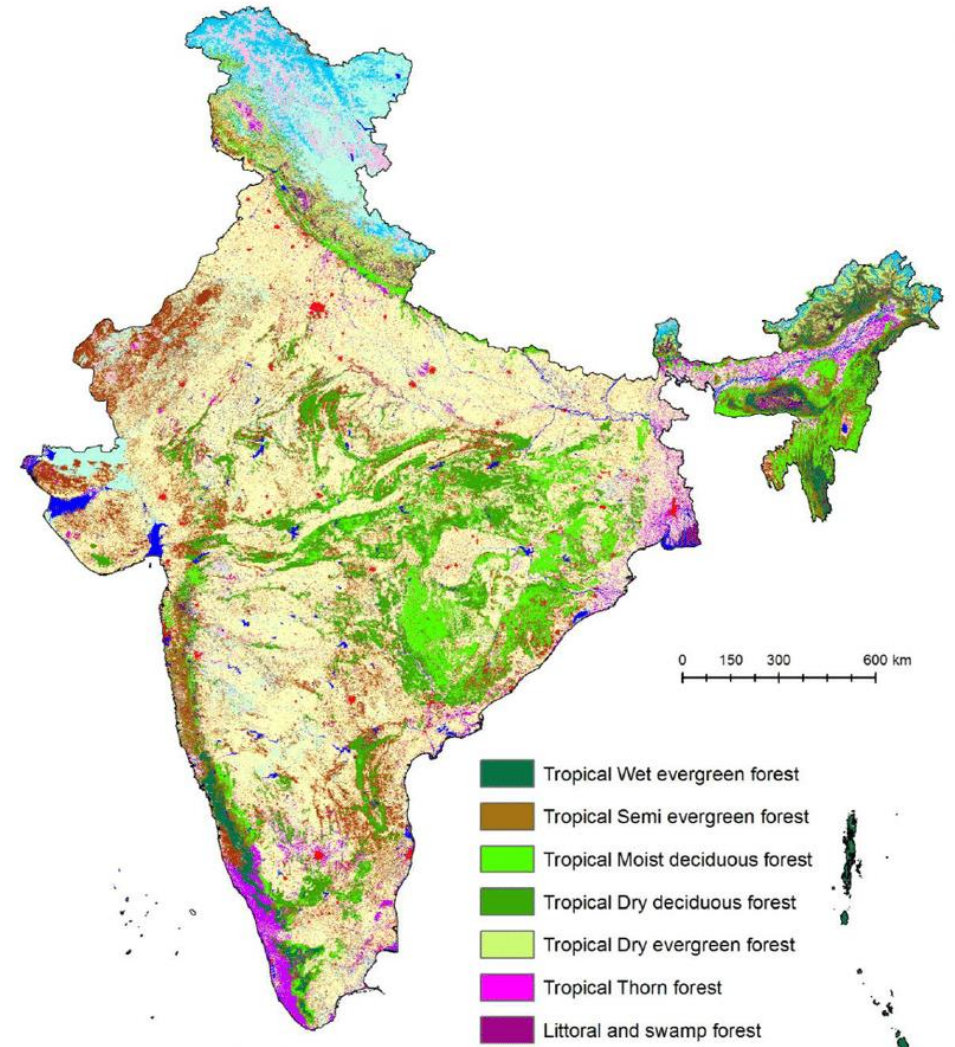
(C) Tropical Thorn Forests

(D) Alpine Forests



## Explanation:

- **Teak And Sal Are Products Of Tropical Dry Deciduous Forests.**
- **The Tropical And Subtropical Dry Broad Leaf Forest Biome, Also Known As Tropical Dry Forest, Is Located At Tropical And Subtropical Latitudes.**



## Q. Choose The Incorrect One:

### (Biosphere Reserve)

A. Manas

B. Pachmarhi

C. Nokrek

D. Achanakmar Amarkantak

### (Places)

Assam Meghalaya

Madhya Pradesh

Meghalaya

Rajasthan

## Q. Choose The Incorrect One:

### (Biosphere Reserve)

### (Places)

A. Manas

Assam Meghalaya

B. Pachmarhi

Madhya Pradesh

C. Nokrek

Meghalaya

**D. Achanakmar Amarkantak**

**Rajasthan**

## Explanation:

- Manas - Assam
- Panchmari – Madhya Pradesh
- Nokrek – Meghalaya
- Achanakmar – Amarkantak – Chhattisgarh





## Q. Consider The Following Sanctuaries Of India:

1. Periyar
2. Dachigam
3. Sariska
4. Kanha

**Arrange The Sequence Of Locations From South To North?**

- (A) 1, 4, 2, 3                      (C) 1, 4, 3, 2
- (B) 4, 1, 3, 2                      (D) 3, 1, 4, 2

## Q. Consider The Following Sanctuaries Of India:

1. Periyar
2. Dachigam
3. Sariska
4. Kanha

**Arrange The Sequence Of Locations From South To North?**

- (A) 1, 4, 2, 3                      **(C) 1, 4, 3, 2**
- (B) 4, 1, 3, 2                      (D) 3, 1, 4, 2

## Explanation:

- Periyar (**Kerala**), Kanha (**M.P.**), Sariska (**Rajasthan**), Dachigam (**J.K.**) Is The Correct Sequence From **South To North**.



**Q. Which One Of The Following States Has The Largest Forest Area To Its Total Land Area?**

(A) Mizoram

(B) Arunachal Pradesh

(C) Sikkim

(D) Jammu And Kashmir

**Q. Which One Of The Following States Has The Largest Forest Area To Its Total Land Area?**

**(A) Mizoram**

(B) Arunachal Pradesh

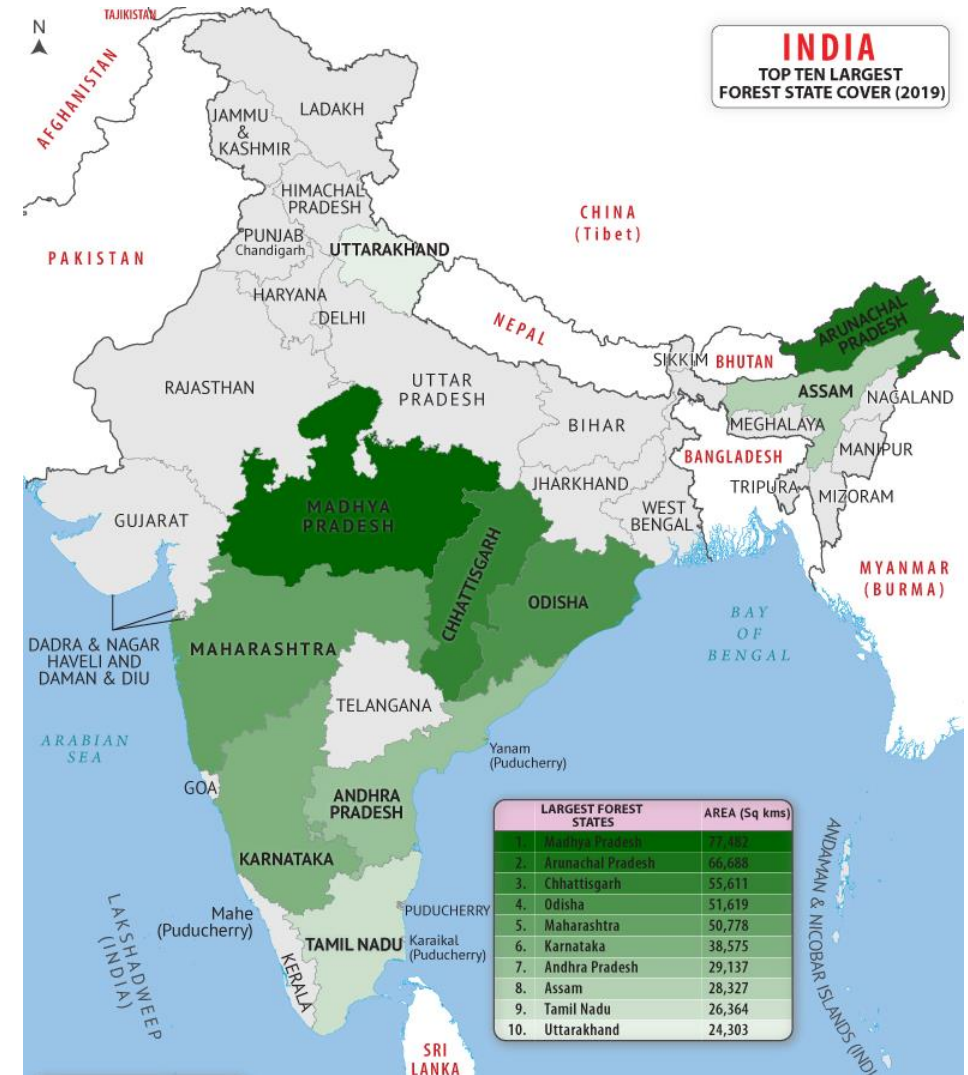
(C) Sikkim

(D) Jammu And Kashmir



## Explanation:

- According To **2011 Forest Survey Of India**.
- **Mizoram** Has **Third Highest Total Forest Cover** With **1,594,000 Hectares** And **Highest Percentage Area (90.68%)** Covered By Forests, Among The States Of India.



**Q. Which One Among The Following Is India's First 'Mixed World Heritage Site'?**

1. Kaziranga National Park
2. Khangchendzonga National Park
3. Banni Grassland Of Gujarat
4. Western Ghats

**Q. Which One Among The Following Is India's First 'Mixed World Heritage Site'?**

1. Kaziranga National Park
- 2. Khangchendzonga National Park**
3. Banni Grassland Of Gujarat
4. Western Ghats

## Explanation:

- **Khangchendzonga National Park (KNP), Sikkim Has Been Declared As India's First "Mixed World Heritage Site" On UNESCO World Heritage List, Under Both Natural And Cultural Heritage. Should Be Rich In Humus**



**Q. The Marine National Park Is Located In:**

(A) Gulf Of Kutch

(B) Sunderbans

(C) Chilka Lake

(D) None Of The Above



Q. The Marine National Park Is Located In:

(A) Gulf Of Kutch

(B) Sunderbans

(C) Chilka Lake

(D) None Of The Above



## Q. Which Of The Following Is Not Correctly Matched?

### National Park

### State

(A) Bandipur

Karnataka

(B) Rajaji

Uttarakhand

(C) Simlipal

Odisha

(D) Pin Valley

Jammu & Kashmir

## Q. Which Of The Following Is Not Correctly Matched?

**National Park**

(A) Bandipur

(B) Rajaji

(C) Simlipal

(D) Pin Valley

**State**

Karnataka

Uttarakhand

Odisha

Jammu & Kashmir



**Q. Which One Of The Following National Parks Is Located Near Chamoli?**

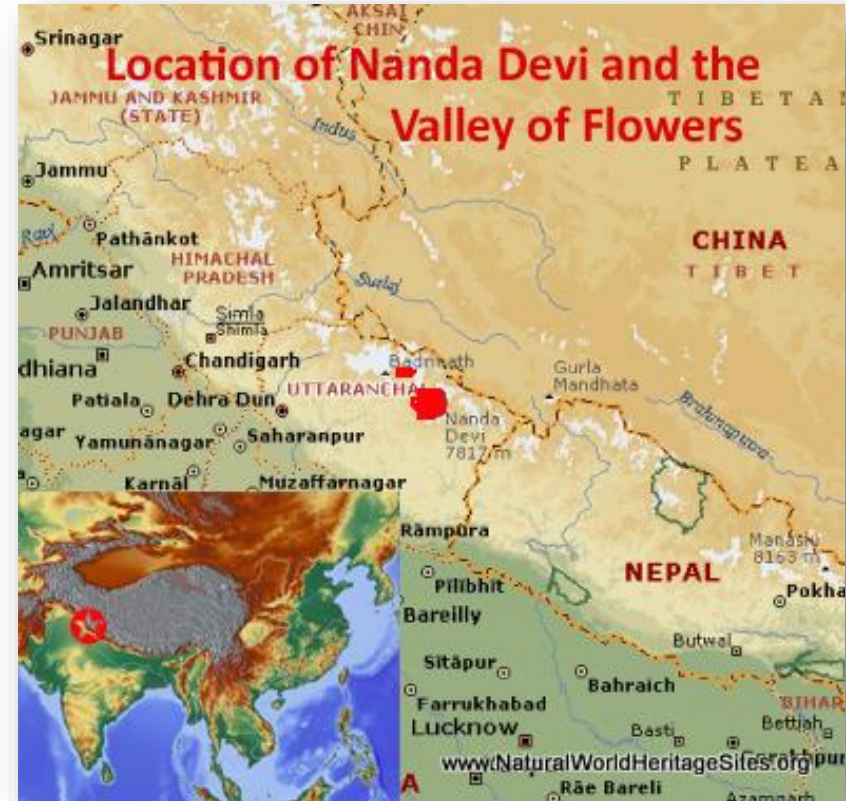
- (A) Dudhwa National Park
- (B) Great Himalayan Park
- (C) Jim Corbett National Park
- (D) Nanda Devi National Park

**Q. Which One Of The Following National Parks Is Located Near Chamoli?**

- (A) Dudhwa National Park
- (B) Great Himalayan Park
- (C) Jim Corbett National Park
- (D) Nanda Devi National Park**

**Explanation:**

- **The Nanda Devi National Park (1982) Is A National Park Situated Around The Peak Of Nanda Devi In UK**





**Q. Choose The Incorrect One:**

- |                              |                |
|------------------------------|----------------|
| A. Bandhavgarh National Park | Madhya Pradesh |
| B. Bandipur National Park    | Karnataka      |
| C. Dachigam National Park    | Jammu Kashmir  |
| D. Darrah National Park      | Uttar Pradesh  |

## Q. Choose The Incorrect One:

- |                                |                      |
|--------------------------------|----------------------|
| A. Bandhavgarh National Park   | Madhya Pradesh       |
| B. Bandipur National Park      | Karnataka            |
| C. Dachigam National Park      | Jammu Kashmir        |
| <b>D. Darrah National Park</b> | <b>Uttar Pradesh</b> |

### Explanation:

- **Darrah National Park** Is In **Rajasthan**

**Q.** A person had visited a region in India and found trees, such as Khair, Neem, Khejri and Palas. Which one of the following regions is she/he expected to have visited?

- (a) Malabar Coast
- (b) Garo Hills
- (c) Sunderban Delta
- (d) Desert Region

Q. A person had visited a region in India and found trees, such as Khair, Neem, Khejri and Palas. Which one of the following regions is she/he expected to have visited?

- (a) Malabar Coast
- (b) Garo Hills
- (c) Sunderban Delta
- (d) Desert Region



Khair Tree



Khejri Tree



Palas Tree

**Answer: B**

**Q. Which One Of The Following Ports Is Situated At The Gulf Of Kutch?**

- A) Cochin
- B) Haldia
- C) Tuticorin
- D) Kandla



## Q. Which One Of The Following Ports Is Situated At The Gulf Of Kutch?

- A) Cochin
- B) Haldia
- C) Tuticorin
- D) Kandla**



**Q. ' Jawahar Tunnel ' Passes Through Which Place?**

A) Pir Panjal

B) Banihal

C) Jojila

D) Burjila

## Q. 'Jawahar Tunnel' Passes Through Which Place?

A) Pir Panjal

**B) Banihal**

C) Jojila

D) Burjila



**Q. Which City Has The Headquarters Of Two Railway Zones In India?**

- A) Hubli
- B) New Delhi
- C) Jabalpur
- D) Mumbai

## Q. Which City Has The Headquarters Of Two Railway Zones In India?

A) Hubli

B) New Delhi

C) Jabalpur

**D) Mumbai**

Zonal Railways	Headquarters
Central	Mumbai
Eastern	Kolkata
East Coast	Bhubaneswar
East Central	Hajipur
Northern	New Delhi
North Central	Allahabad
North Eastern	Gorakhpur
Northeast Frontier	Maligaon (Guwahati)
North Western	Jaipur
Southern	Chennai
South Central	Secunderbad
South Eastern	Kolkata
South East Central Railway	Bilaspur
South Western Railway	Hubli
Western	Mumbai
West Central Railway	Jabalpur
Metro Railway	Kolkata

**Q. The Meeting Town Of North-south And East-west Corridor Superhighway Is**

A) Hyderabad

B) Delhi

C) Jhansi

D) Nagpur



## Q. The Meeting Town Of North-south And East-west Corridor Superhighway Is

A) Hyderabad

B) Delhi

C) Jhansi

D) Nagpur



**Q. The Busiest Rail Section In Respect To Goods Transportation Is**

- A) Delhi – Kolkata Section
- B) Kolkata – Chennai Section
- C) Mumhai – Chennai Section
- D) Delhi – Mumbai Section

## Q. The Busiest Rail Section In Respect To Goods Transportation Is

- A) Delhi – Kolkata Section
- B) Kolkata – Chennai Section
- C) Mumhai – Chennai Section
- D) Delhi – Mumbai Section



**Q. Arrange The Following Cities Located On North-south Corridor In A Sequence From North To South.**

Nagpur

Agra

Krishnagiri

Gwalior

**Select The Correct Answer Using Code Given Below. Code**

A) 2, 4, 1, 3

B) 1, 2, 4, 3

C) 4, 2, 3, 1

D) 2, 3, 1, 4

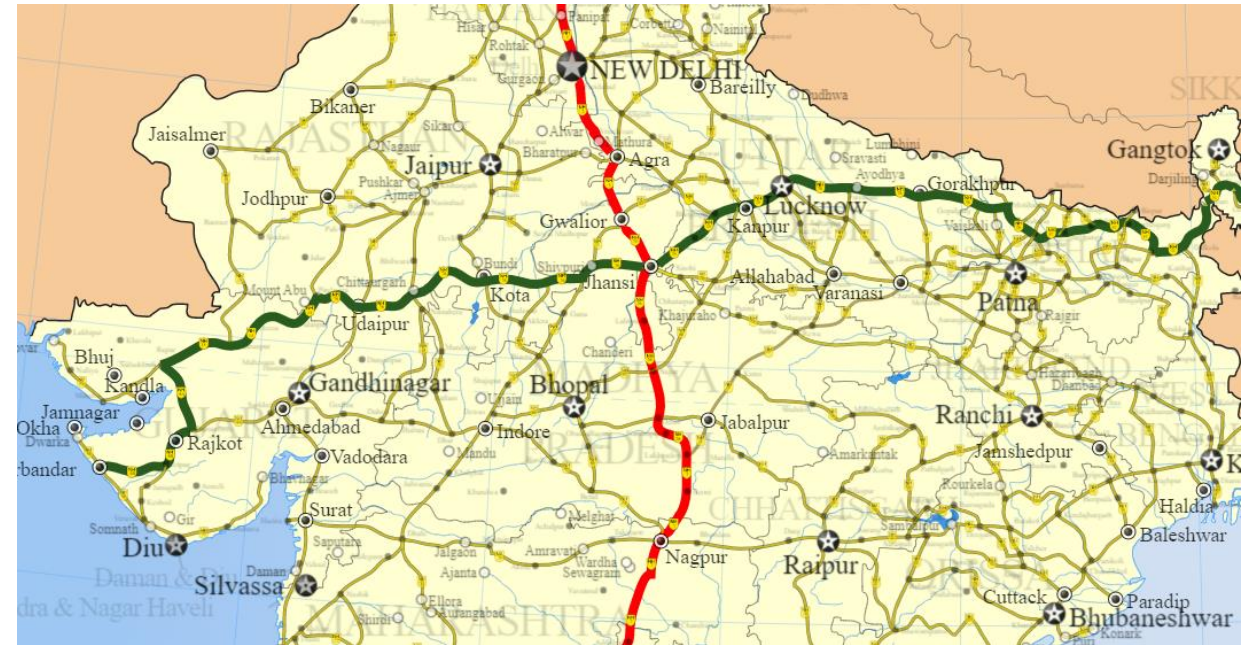
**Q. Arrange The Following Cities Located On North-south Corridor In A Sequence From North To South.**

Nagpur

Agra

Krishnagiri

Gwalior



**Select The Correct Answer Using Code Given Below. Code**

**A) 2, 4, 1, 3**

B) 1, 2, 4, 3

C) 4, 2, 3, 1

D) 2, 3, 1, 4



## Q. Which Is The Artificial Port Of India?

- A) Kandla
- B) Mangalore
- C) Haldia
- D) Chennai Or Madras

## Q. Which Is The Artificial Port Of India?

- A) Kandla
- B) Mangalore
- C) Haldia

**D) Chennai Or Madras**





## Q. The Road That Negotiates Four High Passes Of The World In The Himalayas

Is

- A) Darjeeling To Nepal
- B) Shimla To Dalhousie
- C) Shimla To Kulu
- D) Manali To Leh

## Q. The Road That Negotiates Four High Passes Of The World In The Himalayas

Is

- A) Darjeeling To Nepal
- B) Shimla To Dalhousie
- C) Shimla To Kulu
- D) Manali To Leh**



**Q. Which Of The Following Is A Specific Example Of ‘Out Port’?**

A) Porbandar

B) Haldia

C) Visakhapatnam

D) Panaji

## Q. Which Of The Following Is A Specific Example Of 'Out Port'?

A) Porbandar

**B) Haldia**

C) Visakhapatnam

D) Panaji



**Q. Which Of The Following Recently Made 17th Zone Of Indian Railway?**

- A. Metro Rail In Kolkata
- B. South Central Railway (SCR)
- C. North Central Railway
- D. North Frontier

**Q. Which Of The Following Recently Made 17th Zone Of Indian Railway?**

**A. Metro Rail In Kolkata**

B. South Central Railway (SCR)

C. North Central Railway

D. North Frontier



**Q. Which One Of The Following Ports Is Located On Eastern Coast Of India?**

- A) Kandla
- B) Kochi
- C) Paradeep
- D) Mormugao



**Q. Which One Of The Following Ports Is Located On Eastern Coast Of India?**

- A) Kandla
- B) Kochi
- C) Paradeep**
- D) Mormugao

## Explanation:

- **Paradeep**, Is A Major **Seaport Town** And A Designated Notified Area In **Jagatsinghpur District** Of **Odisha**.
- The **Port Of Paradeep** Is The **Primary Port** In **Orissa**, And One Of The **Largest** On **India's East Coast**.



**Q. Which Is The City Linked By The Highest Number Of Railway Zones?**

A) Delhi

B) Mumbai

C) Chennai

D) Calcutta

**Q. Which Is The City Linked By The Highest Number Of Railway Zones?**

A) Delhi

**B) Mumbai**

C) Chennai

D) Calcutta

## Explanation:

- **Mumbai** Is The Destination Where **Maximum Number Of Trains In India** Head For.
- It Is The **Headquarters Of Two Railway Zones: Western And Central Zones.** Delhi: **Northern Zone; Kolkata: Eastern; And Chennai: Southern Zone**

Zonal Railways	Headquarters
Central	Mumbai
Eastern	Kolkata
East Coast	Bhubaneswar
East Central	Hajipur
Northern	New Delhi
North Central	Allahabad
North Eastern	Gorakhpur
Northeast Frontier	Maligaon (Guwahati)
North Western	Jaipur
Southern	Chennai
South Central	Secunderbad
South Eastern	Kolkata
South East Central Railway	Bilaspur
South Western Railway	Hubli
Western	Mumbai
West Central Railway	Jabalpur
Metro Railway	Kolkata

## Q. National Highway No. 2 Passes Through

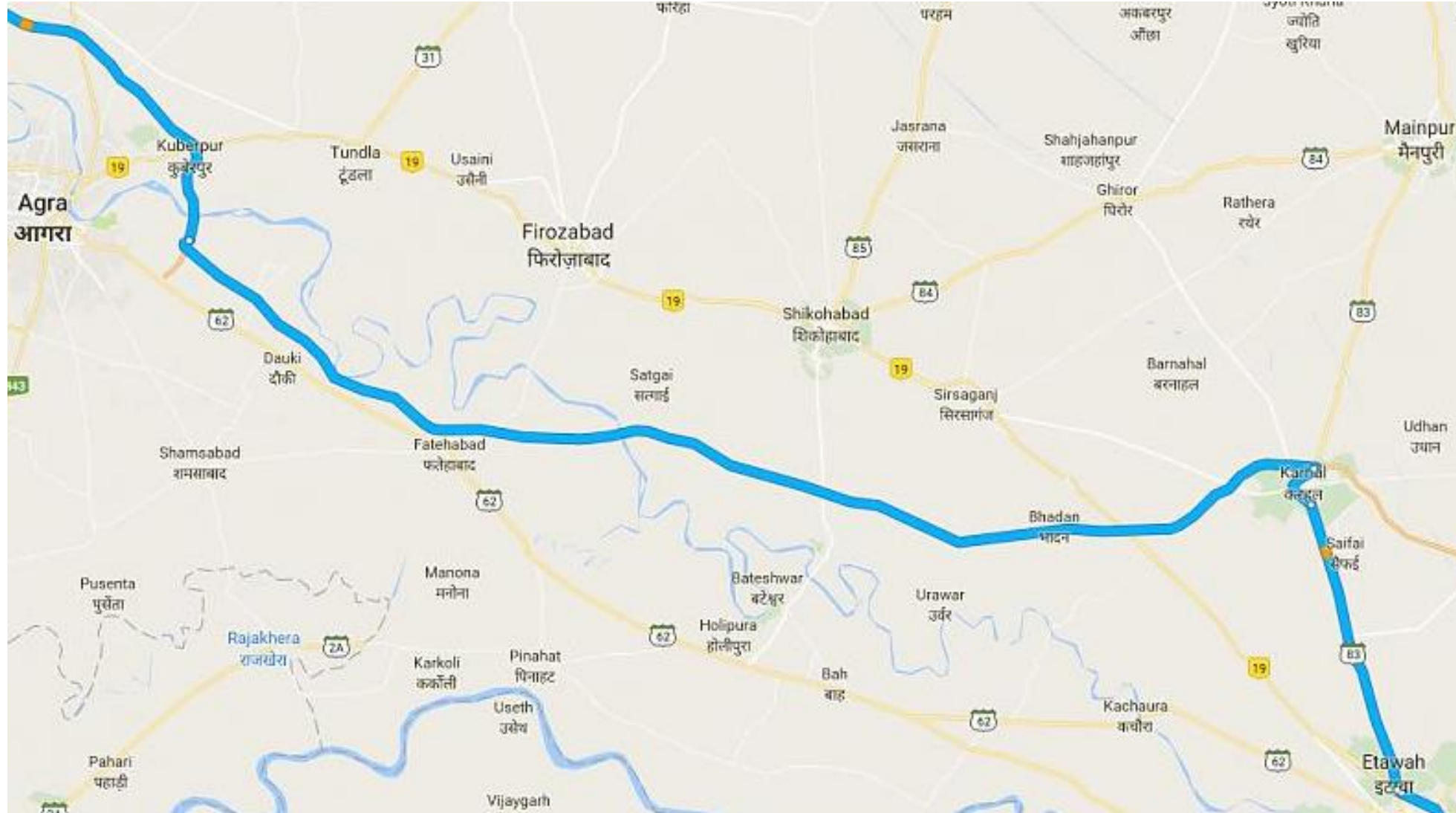
- A) Tamil Nadu, Andhra Pradesh, Karnataka, Goa
- B) Goa, Karnataka, Tamil Nadu, Kerala
- C) Assam, Nagaland, Manipur, Mizoram
- D) Maharashtra, Goa, Karnataka, Kerala

## Q. National Highway No. 2 Passes Through

- A) Tamil Nadu, Andhra Pradesh, Karnataka, Goa
- B) Goa, Karnataka, Tamil Nadu, Kerala
- C) Assam, Nagaland, Manipur, Mizoram**
- D) Maharashtra, Goa, Karnataka, Kerala



## Explanation:



**Q.** Which one among the following is the most populated State in India as per Census 2011?

- (a)* Goa
- (b)* Mizoram
- (c)* Meghalaya
- (d)* Sikkim

Q. Which one among the following is the most populated State in India as per Census 2011?

- (a) Goa
- (b) Mizoram
- (c) Meghalaya
- (d) Sikkim

**Answer: C**

## Explanation:

- The **Population Of Meghalaya As Of 2011** Has Been Estimated At **2,964,007** Of Which **Females Constitute 1,492,668** And **Males 1,471,339**.
- As Per The **Census Of India 2011**, The **Sex Ratio** In The State Was **986 Females Per 1,000 Males** Which Was Far Higher Than The **National Average Of 940**.

#	State	Population	Increase	Area(Km <sup>2</sup> )	Density	Sex-Ratio	Literacy
-	India	1,210,854,977	17.64 %	3,287,240	382	940	74.04
1	Uttar Pradesh	199,812,341	20.23 %	240,928	829	912	67.68
2	Maharashtra	112,374,333	15.99 %	307,713	365	929	82.34
3	Bihar	104,099,452	25.42 %	94,163	1,106	918	61.80
4	West Bengal	91,276,115	13.84 %	88,752	1,028	950	76.26
5	Andhra Pradesh	84,580,777	10.98 %	275,045	308	993	67.02
6	Madhya Pradesh	72,626,809	20.35 %	308,252	236	931	69.32
7	Tamil Nadu	72,147,030	15.61 %	130,060	555	996	80.09
8	Rajasthan	68,548,437	21.31 %	342,239	200	928	66.11
9	Karnataka	61,095,297	15.60 %	191,791	319	973	75.36
10	Gujarat	60,439,692	19.28 %	196,244	308	919	78.03

**Q.** The Shompens are the vulnerable tribal group of

(a) Jharkhand

(b) Odisha

(c) West Bengal

(d) Andaman and Nicobar Islands

**Q.** The Shompens are the vulnerable tribal group of

(a) Jharkhand

(b) Odisha

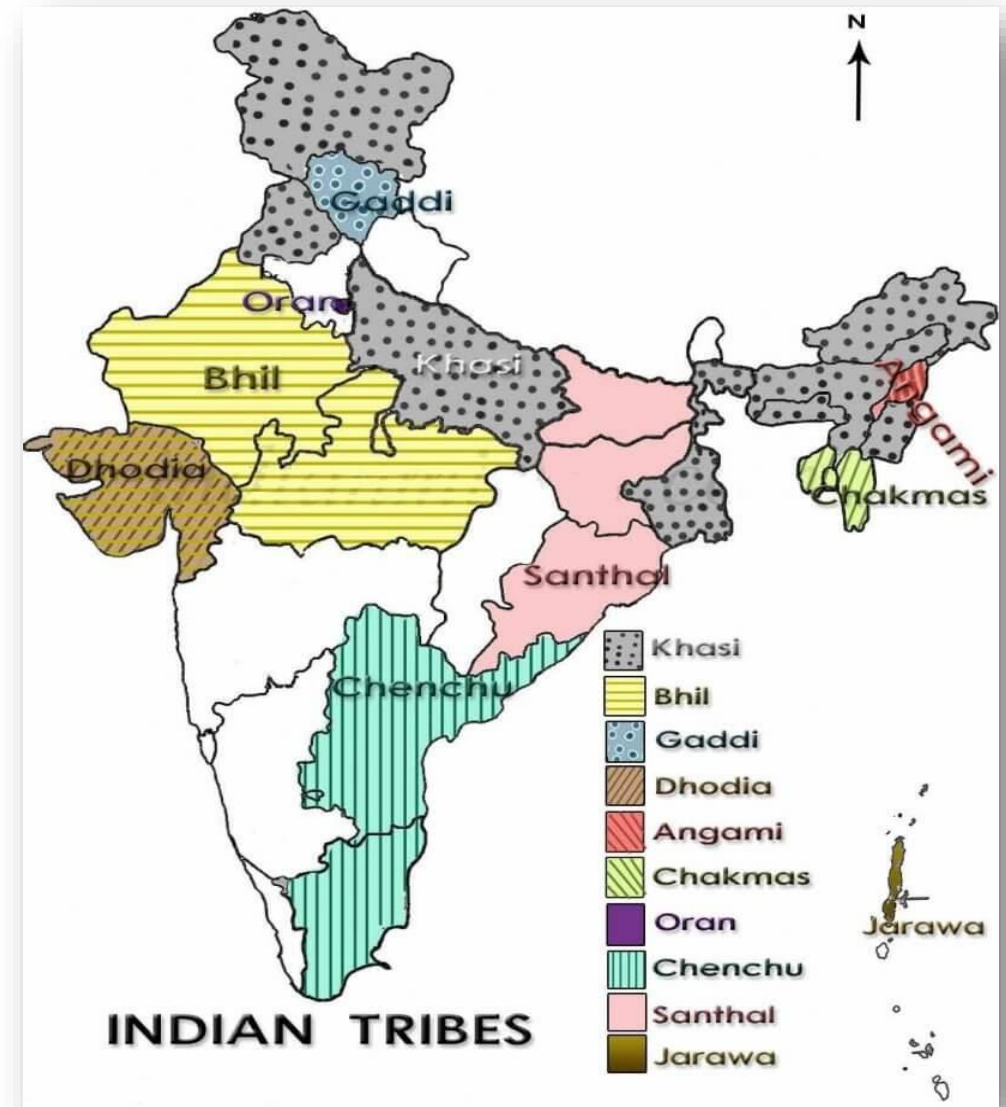
(c) West Bengal

(d) Andaman and Nicobar Islands

**Answer: D**

## Explanation:

- The **Shompen Or Shom Pen** Are The Indigenous People Of The Interior Of **Great Nicobar Island**, Part Of The Indian Union Territory Of **Andaman And Nicobar Islands**.
- The **Shompen** Are A Designated **Scheduled Tribe**.





Q. Which one of the following is the correct ascending sequence of States in terms of their population density as per Census 2011?

- (a) Arunachal Pradesh—Sikkim—Mizoram—Himachal Pradesh
- (b) Arunachal Pradesh—Mizoram—Sikkim—Himachal Pradesh
- (c) Mizoram—Arunachal Pradesh—Himachal Pradesh—Sikkim
- (d) Arunachal Pradesh—Himachal Pradesh—Sikkim—Mizoram

Q. Which one of the following is the correct ascending sequence of States in terms of their population density as per Census 2011?

- (a) Arunachal Pradesh—Sikkim—Mizoram—Himachal Pradesh
- (b) Arunachal Pradesh—Mizoram—Sikkim—Himachal Pradesh
- (c) Mizoram—Arunachal Pradesh—Himachal Pradesh—Sikkim
- (d) Arunachal Pradesh—Himachal Pradesh—Sikkim—Mizoram

**Answer: B**

## Explanation:

- **Arunachal Pradesh Has The Lowest Record Of Population Density Having Just 17 Per Square Kilometer.**
- **Himachal Pradesh-123 Per Sq Km.**
- **Sikkim-86 Per Sq Km, Mizoram-52 Per Sq Km, Arunachal Pradesh-17 Per Sq Km.**

#	State	Population	Increase	Area(Km <sup>2</sup> )	Density	Sex-Ratio	Literacy
-	India	1,210,854,977	17.64 %	3,287,240	382	940	74.04
1	Uttar Pradesh	199,812,341	20.23 %	240,928	829	912	67.68
2	Maharashtra	112,374,333	15.99 %	307,713	365	929	82.34
3	Bihar	104,099,452	25.42 %	94,163	1,106	918	61.80
4	West Bengal	91,276,115	13.84 %	88,752	1,028	950	76.26
5	Andhra Pradesh	84,580,777	10.98 %	275,045	308	993	67.02
6	Madhya Pradesh	72,626,809	20.35 %	308,252	236	931	69.32
7	Tamil Nadu	72,147,030	15.61 %	130,060	555	996	80.09
8	Rajasthan	68,548,437	21.31 %	342,239	200	928	66.11
9	Karnataka	61,095,297	15.60 %	191,791	319	973	75.36
10	Gujarat	60,439,692	19.28 %	196,244	308	919	78.03

**Q.** Which one of the following is the correct ascending sequence of States with regard to percentage of urban population (2011)?

(a) Tamil Nadu—Mizoram—Goa—  
Maharashtra

(b) Goa—Mizoram—Maharashtra—  
Kerala

(c) Maharashtra—Kerala—Mizoram—  
Goa

(d) Mizoram—Goa—Maharashtra—  
Kerala

Q. Which one of the following is the correct ascending sequence of States with regard to percentage of urban population (2011)?

(a) Tamil Nadu—Mizoram—Goa—  
Maharashtra

(b) Goa—Mizoram—Maharashtra—  
Kerala

(c) Maharashtra—Kerala—Mizoram—  
Goa

(d) Mizoram—Goa—Maharashtra—  
Kerala

**Answer: C**

**Q.** Which one of the following Indian States has the highest percentage of Scheduled Tribe population to its total population?

- (a)* Mizoram
- (b)* Nagaland
- (c)* Meghalaya
- (d)* Arunachal Pradesh

**Q.** Which one of the following Indian States has the highest percentage of Scheduled Tribe population to its total population?

- (a) Mizoram
- (b) Nagaland
- (c) Meghalaya
- (d) Arunachal Pradesh

**Answer: A**

**• Explanation**

- States and union territories having maximum ratio of scheduled tribes, as per Census-2011 (in descending order)- Lakshadweep (94.8%) > Mizoram (94.4%) > Nagaland (86.5%) > Meghalaya (86.1%) > Arunachal Pradesh (68.8%).



**Q. Which one of the following statements regarding sex composition is *not* correct ?**

- (a) In some countries, sex ratio is expressed as number of males per thousand females.**
- (b) In India, sex ratio is expressed as number of females per thousand males.**
- (c) At world level, sex ratio is about 102 males per 100 females.**
- (d) In Asia, there is high sex ratio.**



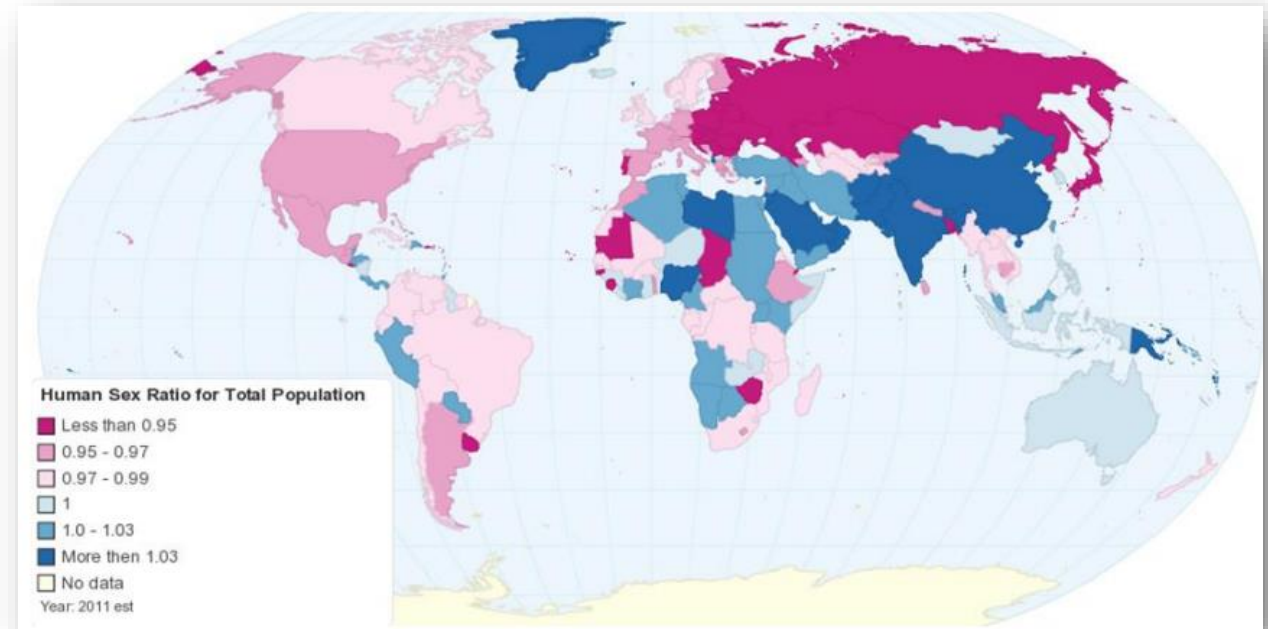
**Q. Which one of the following statements regarding sex composition is *not* correct ?**

- (a) In some countries, sex ratio is expressed as number of males per thousand females.
- (b) In India, sex ratio is expressed as number of females per thousand males.
- (c) At world level, sex ratio is about 102 males per 100 females.
- (d) In Asia, there is high sex ratio.

**Answer: D**

## Explanation:

- **Asia Is The Only Continent With A Sex Ratio  $>100$ , At 104.**
- **North America Stands At 96.8 And Africa At 99.8.**



## Q. The Term 'Demographic Gap' Signifies The Difference

(A) In Sex Ratio

(B) In Age

(C) In Child / Woman Ratio

(D) Between The Birth And The Death Rate

**Q. The Term 'Demographic Gap' Signifies The Difference**

(A) In Sex Ratio

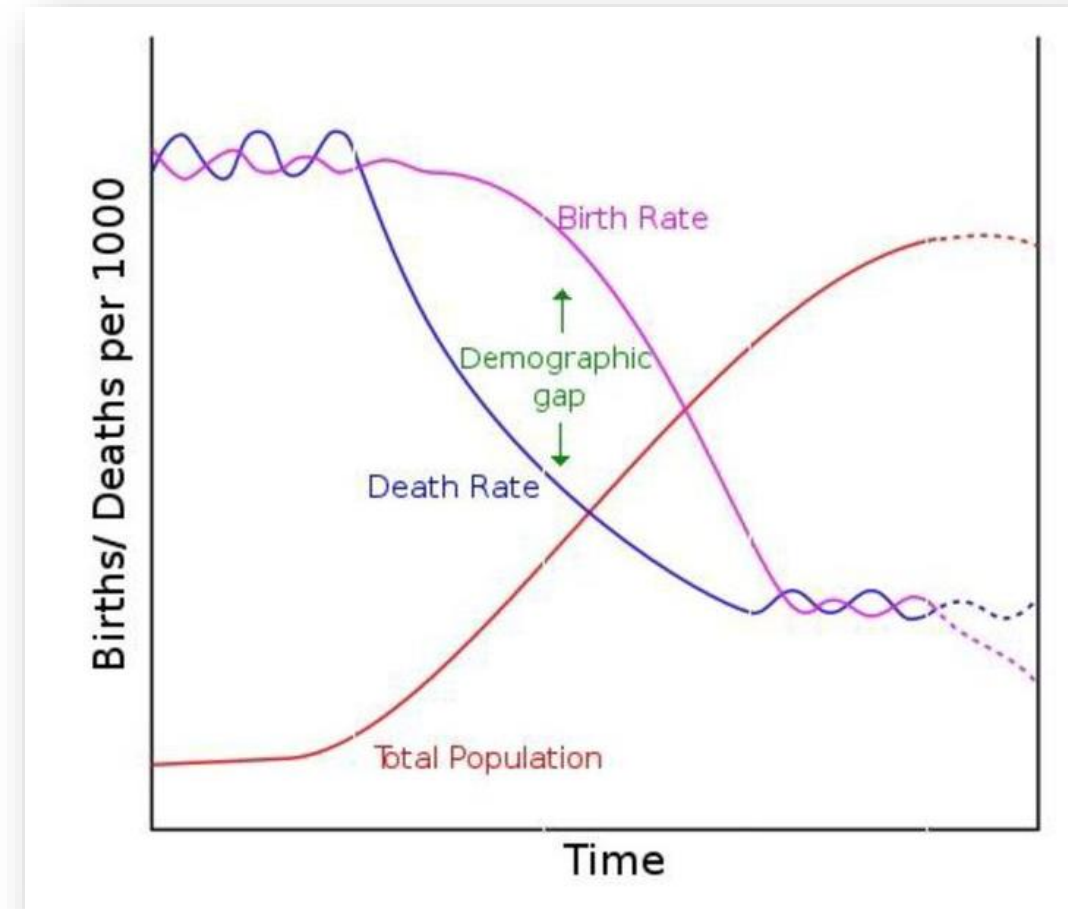
(B) In Age

(C) In Child / Woman Ratio

**(D) Between The Birth And The Death Rate**

## Explanation:

- **Demographic Gap** Is The Difference Between **Birth Rate** And **Death Rate** That Develops When A Country Undergoes **Demographic Transition**.



## Q. The Largest Tribal Group Of India Is

- (A) Bhils
- (B) Gonds
- (C) Santhals
- (D) Tharus

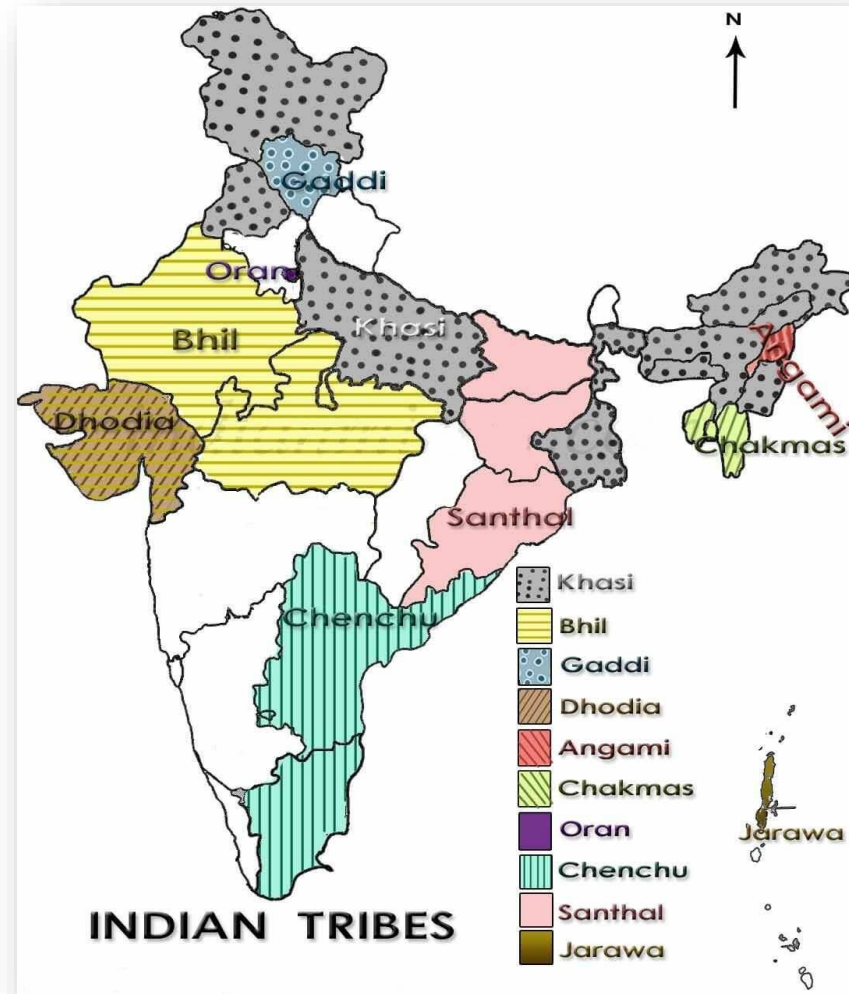
## Q. The Largest Tribal Group Of India Is

(A) Bhils

(B) Gonds

(C) Santhals

(D) Tharus





**Q. As Per The Provisional Figures Of 2011 Census Of India, Which One Of The Following States Has The Highest Child Sex Ratio?**

(A) Chhattisgarh

(B) Haryana

(C) Uttar Pradesh

(D) Punjab

**Q. As Per The Provisional Figures Of 2011 Census Of India, Which One Of The Following States Has The Highest Child Sex Ratio?**

**(A) Chhattisgarh**

(B) Haryana

(C) Uttar Pradesh

(D) Punjab

## Explanation:

- **Chhattisgarh With Sex Ratio Of 969**  
And **Haryana With 834** Are **High** Are  
**Lowest** Among These Four States.

#	State	2011 Census		2001 Census	
		Sex Ratio	Child Sexratio	Sex Ratio	Child Sexratio
-	India	943	919	933	927
1	Kerala	1084	964	1058	960
2	Puducherry	1037	967	1001	967
3	Tamil Nadu	996	943	987	942
4	Andhra Pradesh	993	939	978	961
5	Chhattisgarh	991	969	989	975
6	Meghalaya	989	970	972	973
7	Manipur	985	930	974	957
8	Orissa	979	941	972	953
9	Mizoram	976	970	935	964
10	Goa	973	942	961	938
11	Karnataka	973	948	965	946

**Q. The Most Populous Island Of India Is–**

(A) Majuli

(B) Andaman

(C) Lakshadweep

(D) Salsette

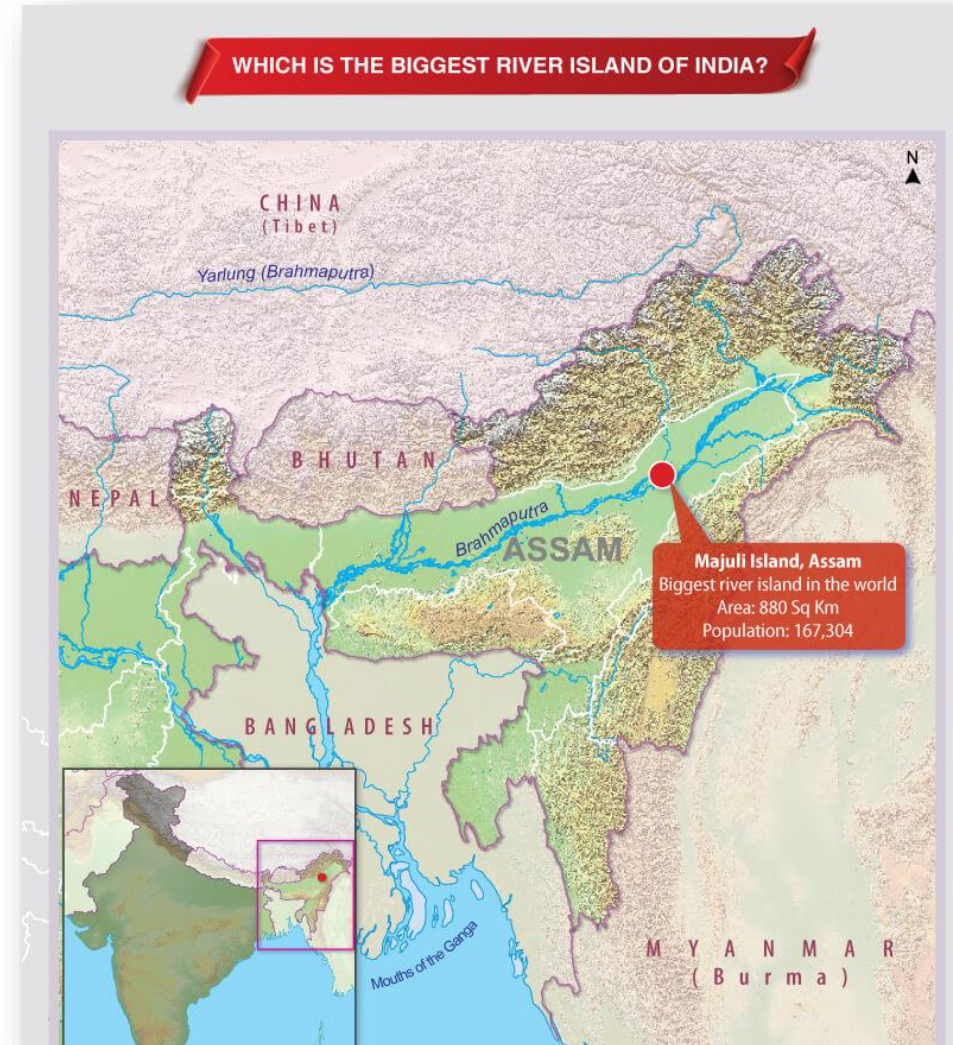
## Q. The Most Populous Island Of India Is–

(A) Majuli

(B) Andaman

(C) Lakshadweep

(D) Salsette



## Q. Choose The Incorrect One:

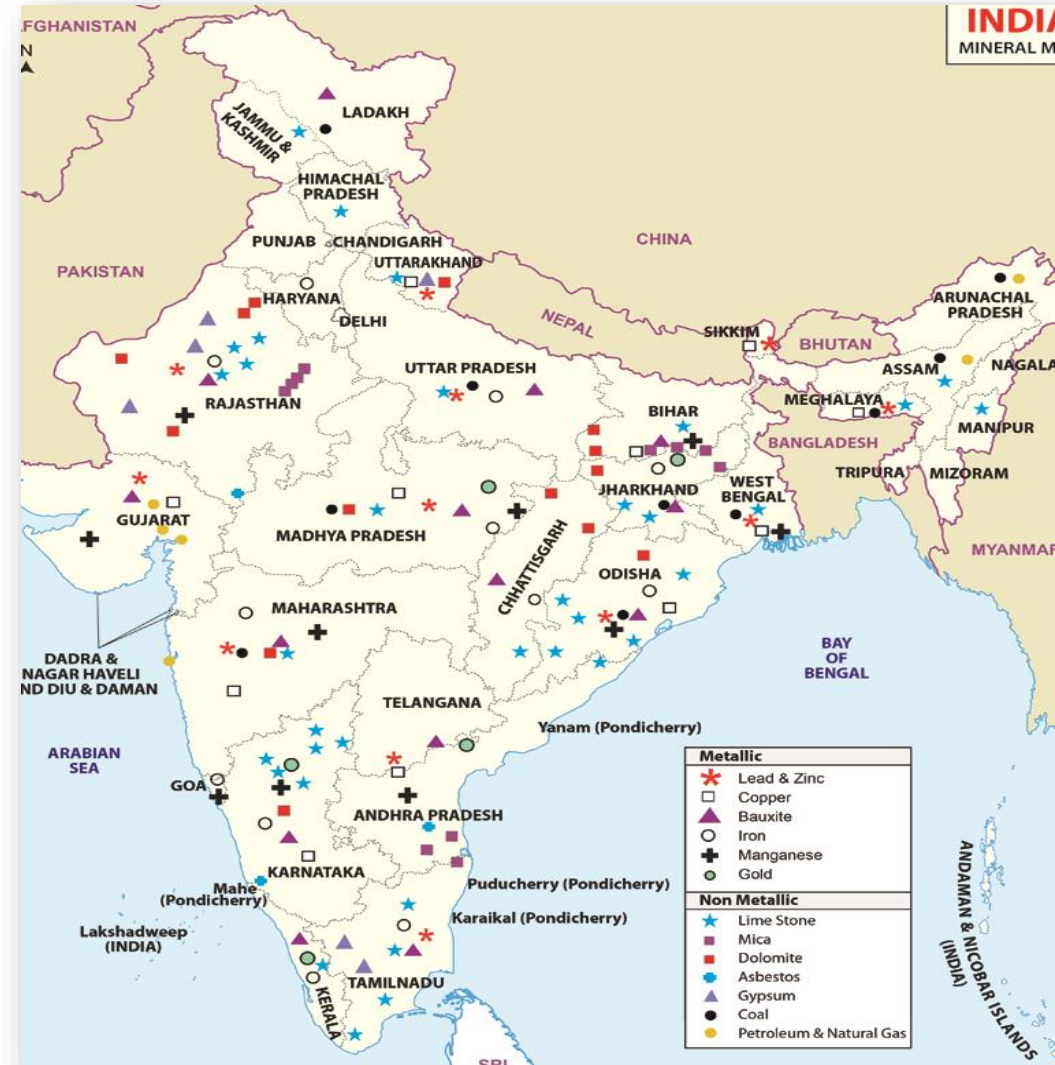
- |              |           |
|--------------|-----------|
| A. Coal      | Karanpura |
| B. Gold      | Hutti     |
| C. Mica      | Vellore   |
| D. Manganese | Bhandara  |

## Q. Choose The Incorrect One:

- |              |           |
|--------------|-----------|
| A. Coal      | Karanpura |
| B. Gold      | Hutti     |
| C. Mica      | Vellore   |
| D. Manganese | Bhandara  |

• Explanation:

• Nellore Is Famous For Mica





**Q. Which One Of The Following Rock Systems In India Is The Main Source Of Coal Deposits?**

- (A) Dharwar System
- (B) Gondwana System
- (C) Cudapah System
- (D) Vindhyan System

## Q. Which One Of The Following Rock Systems In India Is The Main Source Of Coal Deposits?

- (A) Dharwar System
- (B) Gondwana System**
- (C) Cudapah System
- (D) Vindhyan System



**Q. Which Of The Following Sequences Of The Oil Refineries Of India  
As They Occur From South To North Is Correct?**

- (A) Kochi - Mangalore – Mumbai - Koyali
- (B) Koyali - Mumbai – Mangalore - Kochi
- (C) Kochi – Mumbai – Mangalore - Koyali
- (D) Mangalore – Kochi – Mumbai - Koyali

## Q. Which Of The Following Sequences Of The Oil Refineries Of India As They Occur From South To North Is Correct?

(A) Kochi - Mangalore – Mumbai - Koyali

(B) Koyali - Mumbai – Mangalore - Kochi

(C) Kochi – Mumbai – Mangalore - Koyali

(D) Mangalore – Kochi – Mumbai - Koyali



**Q. Which Indian State Has The Largest Number Of Cotton Textile Mills?**

(A) Madhya Pradesh

(B) Maharashtra

(C) Gujarat

(D) West Bengal

## Q. Which Indian State Has The Largest Number Of Cotton Textile Mills?

(A) Madhya Pradesh

**(B) Maharashtra**

(C) Gujarat

(D) West Bengal

