



NDA 2 2024

MAHA MARATHON #1

COMPLETE REVISION



28 AUG 2024
10AM TO 3PM



SSBCrack

LIVE CLASS



NDA 2 2024

MAHA MARATHON

28 - 31 AUG 2024

10AM TO 12PM

PHYSICS & MATHS - NAVJYOTI SIR

12PM TO 1PM

GS - SHIVANGI MA'AM

1PM TO 2PM

GK - RUBY MA'AM

2PM TO 3PM

ENGLISH - ANURADHA MA'AM

 **CALL US: 080-69185400**

 **GET IT ON
Google Play**

**DOWNLOAD
THE APP NOW**



NDA 2 2024 Marking Scheme

SECTION	NO. OF QUESTIONS	TOTAL MARKS	CORRECT ANSWER	WRONG ANSWER
Mathematics	120	300	2.5 Marks	0.83 Marks
GAT English	50	200	4 Marks	1.33 Marks
GAT GK	100	400	4 Marks	1.33 Marks
TOTAL	270	900		

MATHEMATICS

Marking System in NDA 2 2024 Paper – I (MATHS)

- Total no. of Questions = **120**
- Total no. of Marks = **300 marks**
- 1 Question = **2.5 marks**
- Negative marking = **0.83 marks for every incorrect answer**

What is the value of $\log_7 \log_7 \sqrt{7 \sqrt{7 \sqrt{7}}}$?

- A. $3 \log_2 7$
- B. $1 - 3 \log_2 7$
- C. $1 - 3 \log_7 2$
- D. $\frac{7}{8}$

What is the value of $\log_7 \log_7 \sqrt{7 \sqrt{7 \sqrt{7}}}$?

- A. $3 \log_2 7$
- B. $1 - 3 \log_2 7$
- C. $1 - 3 \log_7 2$
- D. $\frac{7}{8}$

Let α and β be the roots of the equation $x^2 + x + 1 = 0$. The equation, whose roots are α^{19} and β^7 is

A. $x^2 - x + 1 = 0$

B. $x^2 - x + 1 = 0$

C. $x^2 - x - 1 = 0$

D. $x^2 + x + 1 = 0$

Let α and β be the roots of the equation $x^2 + x + 1 = 0$. The equation, whose roots are α^{19} and β^7 is

A. $x^2 - x + 1 = 0$

B. $x^2 - x + 1 = 0$

C. $x^2 - x - 1 = 0$

D. $x^2 + x + 1 = 0$

The coefficients of x^m and x^n , where m and n are positive integers, in the expansion of $(1 + x)^{m+n}$ are

- A. equal
- B. equal in magnitude but opposite in sign
- C. reciprocal to each other
- D. in the ratio $m : n$

The coefficients of x^m and x^n , where m and n are positive integers, in the expansion of $(1 + x)^{m+n}$ are

- A. equal
- B. equal in magnitude but opposite in sign
- C. reciprocal to each other
- D. in the ratio $m : n$

What is the number of terms in the expansion of $(a + b + c)^n$, $n \in \mathbb{N}$?

A. $n + 1$

B. $n + 2$

C. $n(n + 1)$

D. $(n + 1)(n + 2)/2$

What is the number of terms in the expansion of $(a + b + c)^n$, $n \in \mathbb{N}$?

A. $n + 1$

B. $n + 2$

C. $n(n + 1)$

D. $(n + 1)(n + 2)/2$

$$\text{Let } f(x) = \begin{cases} 1 + \frac{x}{2k}, & 0 < x < 2 \\ kx, & 2 \leq x < 4 \end{cases}$$

If $\lim_{x \rightarrow 2} f(x)$ exists, then what is the

value of k ?

(a) -2

(b) -1

(c) 0

(d) 1

$$\text{Let } f(x) = \begin{cases} 1 + \frac{x}{2k}, & 0 < x < 2 \\ kx, & 2 \leq x < 4 \end{cases}$$

If $\lim_{x \rightarrow 2} f(x)$ exists, then what is the

value of k ?

(a) -2

(b) -1

(c) 0

(d) 1

Ans : (d)

If $e^y + xy = e$, then what is the value of $\frac{d^2y}{dx^2}$ at $x = 0$?

(a) e^{-1}

(b) e^{-2}

(c) e

(d) 1

If $e^y + xy = e$, then what is the value of $\frac{d^2y}{dx^2}$ at $x = 0$?

(a) e^{-1}
(c) e

(b) e^{-2}
(d) 1

Ans : (b)

The solution of the differential equation

$$\frac{dy}{dx} + \frac{y}{x \log x} = \frac{1}{x} \text{ is}$$

(a) $y = \frac{1}{2} \log x + C(\log x)^{-1}$ (b) $y = \log x + C(\log x)^{-1}$

(c) $y = \frac{1}{2} \log x + \frac{C}{(\log x)^2}$ (d) $y = \frac{1}{3} \log x - C(\log x)^{-1}$

The solution of the differential equation

$$\frac{dy}{dx} + \frac{y}{x \log x} = \frac{1}{x} \text{ is}$$

(a) $y = \frac{1}{2} \log x + C(\log x)^{-1}$ (b) $y = \log x + C(\log x)^{-1}$

(c) $y = \frac{1}{2} \log x + \frac{C}{(\log x)^2}$ (d) $y = \frac{1}{3} \log x - C(\log x)^{-1}$

Ans : (a)

What is the total number of combination of n different things taken 1, 2, 3, ..., n at a time?

(a) 2^{n+1}

(b) 2^{2n+1}

(c) 2^{n-1}

(d) $2^n - 1$

What is the total number of combination of n different things taken 1, 2, 3,, n at a time?

- (a) 2^{n+1} (b) 2^{2n+1}
(c) 2^{n-1} (d) $2^n - 1$

Ans : (d)

If the lines $y + px = 1$ and $y - qx = 2$ are perpendicular, then which one of the following is correct?

- (a) $pq + 1 = 0$ (b) $p + q + 1 = 0$
(c) $pq - 1 = 0$ (d) $p - q + 1 = 0$

If the lines $y + px = 1$ and $y - qx = 2$ are perpendicular, then which one of the following is correct?

- (a) $pq + 1 = 0$ (b) $p + q + 1 = 0$
(c) $pq - 1 = 0$ (d) $p - q + 1 = 0$

Ans : (c)

If $(4, 0)$ and $(-4, 0)$ are the foci of an ellipse and the semi-minor axis is 3, then the ellipse passes through which one of the following points?

(a) $(2, 0)$

(b) $(0, 5)$

(c) $(0, 0)$

(d) $(5, 0)$

If $(4, 0)$ and $(-4, 0)$ are the foci of an ellipse and the semi-minor axis is 3, then the ellipse passes through which one of the following points?

(a) $(2, 0)$

(b) $(0, 5)$

(c) $(0, 0)$

(d) $(5, 0)$

Ans : (d)

$$A_{(\alpha)} = \begin{bmatrix} \cos \alpha & -\sin \alpha \\ \sin \alpha & \cos \alpha \end{bmatrix}, A_{(\beta)} = \begin{bmatrix} \cos \beta & -\sin \beta \\ \sin \beta & \cos \beta \end{bmatrix}$$

Which one of the following is correct ?

A. $A_{(-\alpha)}A_{(-\beta)} = A_{(\alpha + \beta)}$

B. $A_{(-\alpha)}A_{(\beta)} = A_{(\beta - \alpha)}$

C. $A_{(\alpha)}A_{(-\beta)} = A_{(-(\beta - \alpha))}$

D. $A_{(\alpha)}A_{(\beta)} = A_{(\alpha + \beta)}$

$$A_{(\alpha)} = \begin{bmatrix} \cos \alpha & -\sin \alpha \\ \sin \alpha & \cos \alpha \end{bmatrix}, A_{(\beta)} = \begin{bmatrix} \cos \beta & -\sin \beta \\ \sin \beta & \cos \beta \end{bmatrix}$$

Which one of the following is correct ?

A. $A_{(-\alpha)}A_{(-\beta)} = A_{(\alpha + \beta)}$

B. $A_{(-\alpha)}A_{(\beta)} = A_{(\beta - \alpha)}$

C. $A_{(\alpha)}A_{(-\beta)} = A_{(-(\beta - \alpha))}$

D. $A_{(\alpha)}A_{(\beta)} = A_{(\alpha + \beta)}$

Ans : (d)

If $[x]^2 - 5[x] + 6 = 0$, where $[.]$ denote the greatest integer function, then

- A. $x \in [3, 4]$
- B. $x \in (2, 3]$
- C. $x \in [2, 3]$
- D. $x \in [2, 4)$

If $[x]^2 - 5[x] + 6 = 0$, where $[.]$ denote the greatest integer function, then

- A. $x \in [3, 4]$
- B. $x \in (2, 3]$
- C. $x \in [2, 3]$
- D. $x \in [2, 4)$

The domain of the function f defined by $f(x) = \frac{1}{\sqrt{x - |x|}}$

- (A) \mathbb{R}
- (B) \mathbb{R}^+
- (C) \mathbb{R}^-
- (D) None of these

The domain of the function f defined by $f(x) = \frac{1}{\sqrt{x - |x|}}$

(A) \mathbb{R}

(B) \mathbb{R}^+

(C) \mathbb{R}^-

(D) None of these

If $\omega = \frac{-1 + \sqrt{3}i}{2}$ then $(3 + \omega + 3\omega^2)^4$ is

- A. 16
- B. -16
- C. 16ω
- D. $16\omega^2$

If $\omega = \frac{-1 + \sqrt{3}i}{2}$ then $(3 + \omega + 3\omega^2)^4$ is

A. 16

B. -16

C. 16ω

D. $16\omega^2$

What is the value of $\sqrt{8 + 2\sqrt{8 + 2\sqrt{8 + 2\sqrt{8 + \dots \infty}}}}$?

- A. 10
- B. 8
- C. 6
- D. 4

What is the value of $\sqrt{8 + 2\sqrt{8 + 2\sqrt{8 + 2\sqrt{8 + \dots \infty}}}}$?

- A. 10
- B. 8
- C. 6
- D. 4**

In a town of 10,000 families it was found that 40% families buy newspaper A, 20% families buy newspaper B, 10% families buy newspaper C, 5% families buy A and B, 3% buy B and C and 4% buy A and C. If 2% families buy all the three newspapers. Find the number of families which buy newspaper A only.

- A. 4000
- B. 3100
- C. 3300
- D. None of these

In a town of 10,000 families it was found that 40% families buy newspaper A, 20% families buy newspaper B, 10% families buy newspaper C, 5% families buy A and B, 3% buy B and C and 4% buy A and C. If 2% families buy all the three newspapers. Find the number of families which buy newspaper A only.

- A. 4000
- B. 3100
- C. 3300**
- D. None of these

If $\frac{\sin\theta + \cos\theta}{\sin\theta - \cos\theta} = 3$ then the value of $\sin^4 \theta$ is

(a) $\frac{16}{25}$

(b) $\frac{2}{3}$

(c) $\frac{1}{9}$

(d) $\frac{2}{9}$

If $\frac{\sin\theta + \cos\theta}{\sin\theta - \cos\theta} = 3$ then the value of $\sin^4 \theta$ is

(a) $\frac{16}{25}$

(b) $\frac{2}{3}$

(c) $\frac{1}{9}$

(d) $\frac{2}{9}$

Ans : (a)

If $f(x) = 2^x$, then what is $\int_2^{10} \frac{f'(x)}{f(x)} dx$

equal to?

(a) $4 \ln 2$

(b) $\ln 4$

(c) $\ln 5$

(d) $8 \ln 2$

If $f(x) = 2^x$, then what is $\int_2^{10} \frac{f'(x)}{f(x)} dx$

equal to?

(a) $4 \ln 2$

(b) $\ln 4$

(c) $\ln 5$

(d) $8 \ln 2$

Ans : (d)

The probability that A speaks truth is $\frac{4}{5}$, while the probability for B is $\frac{3}{4}$. The probability that they contradict each other when asked to speak on a fact is

- (a) $\frac{4}{5}$ (b) $\frac{1}{5}$ (c) $\frac{7}{20}$ (d) $\frac{3}{20}$

The probability that A speaks truth is $\frac{4}{5}$, while the probability for B is $\frac{3}{4}$. The probability that they contradict each other when asked to speak on a fact is

- (a) $\frac{4}{5}$ (b) $\frac{1}{5}$ (c) $\frac{7}{20}$ (d) $\frac{3}{20}$

Ans : (c)

A particle is acted upon by following forces :

(i) $2\hat{i} + 3\hat{j} + 5\hat{k}$, (ii) $-5\hat{i} + 4\hat{j} - 3\hat{k}$ and (iii) $3\hat{i} - 7\hat{k}$

In which plane does it move ?

- (a) x-y plane
- (b) y-z plane
- (c) z-x plane
- (d) any arbitrary plane

A particle is acted upon by following forces :

(i) $2\hat{i} + 3\hat{j} + 5\hat{k}$, (ii) $-5\hat{i} + 4\hat{j} - 3\hat{k}$ and (iii) $3\hat{i} - 7\hat{k}$

In which plane does it move ?

- (a) x-y plane
- (b) y-z plane
- (c) z-x plane
- (d) any arbitrary plane

Ans : (b)

PHYSICS



Marking System in NDA 2 2024 GAT Physics Section

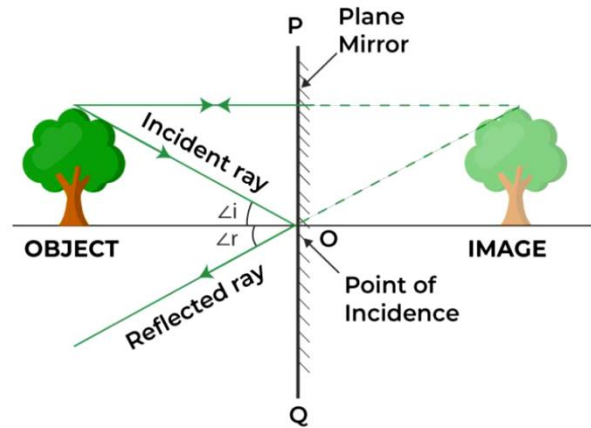
- Total no. of Questions = 20 – 22 / 100
- Total no. of Marks = 80 - 84 marks
- 1 Question = 4 marks
- Negative marking = 1.33 marks for every incorrect answer

Image Formed by a Plane Mirror is

- A. Virtual, behind the mirror and enlarged
- B. Virtual, behind the mirror and of the same size as the object
- C. Real, at the surface of the mirror and enlarged
- D. More than one of the above

Image Formed by a Plane Mirror is

- A. Virtual, behind the mirror and enlarged
- B. Virtual, behind the mirror and of the same size as the object**
- C. Real, at the surface of the mirror and enlarged
- D. More than one of the above



Which mirror is used as a rear-view mirror in vehicles ?

- A. Convex
- B. Plane
- C. Concave
- D. None of the above

Which mirror is used as a rear-view mirror in vehicles ?

- A. Convex**
- B. Plane
- C. Concave
- D. None of the above

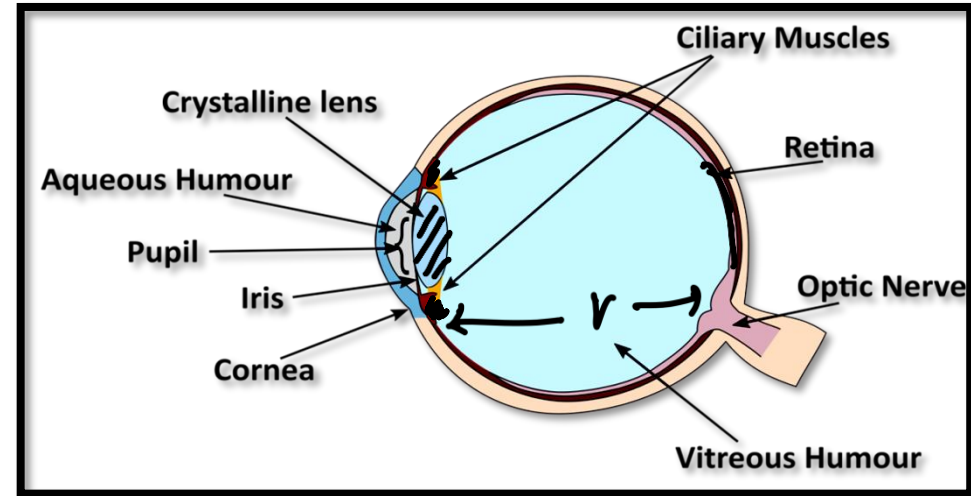


What is the correct order of structures light passes through when entering the eye?

- A. Retina, pupil, cornea, lens
- B. Cornea, pupil, lens, retina
- C. Cornea, retina, lens, pupil
- D. Pupil, lens, cornea, retina

What is the correct order of structures light passes through when entering the eye?

- A. Retina, pupil, cornea, lens
- B. Cornea, pupil, lens, retina**
- C. Cornea, retina, lens, pupil
- D. Pupil, lens, cornea, retina



Humans can see objects at different distances with contrasting illuminations. This is due to

- A. Far- sightedness
- B. Near-sightedness
- C. Far-sightedness and Near-sightedness
- D. Accommodation of eye

Humans can see objects at different distances with contrasting illuminations. This is due to

- A. Far- sightedness
- B. Near-sightedness
- C. Far-sightedness and Near-sightedness
- D. Accommodation of eye**

The loudness of sound depends upon

- A. Velocity of sound waves in the medium
- B. Amplitude of the sound waves
- C. Frequency of the sound waves.
- D. Frequency and velocity of the sound waves.

The loudness of sound depends upon

- A. Velocity of sound waves in the medium
- B. Amplitude of the sound waves**
- C. Frequency of the sound waves.
- D. Frequency and velocity of the sound waves.

A goalkeeper in a game of football pulls his hands backwards after holding the ball shot at goal. This enables the goalkeeper to

- A. Exert large force on the ball
- B. Increase the force exerted by the ball on hands
- C. Increase the rate of change of momentum
- D. Decrease the rate of change of momentum

A goalkeeper in a game of football pulls his hands backwards after holding the ball shot at goal. This enables the goalkeeper to

- A. Exert large force on the ball
- B. Increase the force exerted by the ball on hands
- C. Increase the rate of change of momentum
- D. Decrease the rate of change of momentum**

An object moves along a curved path. The following quantities may remain constant during its motion.

- A. Speed
- B. Velocity
- C. Magnitude of Acceleration
- D. Both A and C

An object moves along a curved path. The following quantities may remain constant during its motion.

- A. Speed
- B. Velocity
- C. Magnitude of Acceleration
- D. Both A and C**

A football and a stone has same mass, so

- A. Both have same inertia
- B. Both have same momentum
- C. Both have different inertia
- D. Both have different momentum

A football and a stone has same mass, so

- A. Both have same inertia**
- B. Both have same momentum
- C. Both have different inertia
- D. Both have different momentum

The SI unit of Power is

- A. Js
- B. J/s
- C. s/J
- D. J/s²

The SI unit of Power is

- A. Js
- B. J/s**
- C. s/J
- D. J/s²

The total kinetic energy of a rolling object consists of

- A. Only translational kinetic energy
- B. Only rotational kinetic energy
- C. Both translational and rotational kinetic energy
- D. Neither translational nor rotational kinetic energy

The total kinetic energy of a rolling object consists of

- A. Only translational kinetic energy
- B. Only rotational kinetic energy
- C. Both translational and rotational kinetic energy**
- D. Neither translational nor rotational kinetic energy

The force of attraction between two unit point masses separated by a unit distance is called

- A. Gravitational potential
- B. Acceleration due to gravity
- C. Gravitational field
- D. Universal gravitational constant

The force of attraction between two unit point masses separated by a unit distance is called

- A. Gravitational potential
- B. Acceleration due to gravity
- C. Gravitational field
- D. Universal gravitational constant**

An object weighs 10 N in air. When immersed fully in water, it weighs only 8 N. The weight of the liquid displaced by the object will be

- A. 2 N
- B. 8 N
- C. 10 N
- D. 12 N

An object weighs 10 N in air. When immersed fully in water, it weighs only 8 N. The weight of the liquid displaced by the object will be

- A. 2 N**
- B. 8 N
- C. 10 N
- D. 12 N

Which is the SI unit of Resistivity ?

- A. Ω
- B. Ω / m
- C. $\Omega \text{ cm}$
- D. $\Omega \text{ m}$

Which is the SI unit of Resistivity ?

- A. Ω
- B. Ω / m
- C. $\Omega \text{ cm}$
- D. $\Omega \text{ m}$**

How much is 1 kWh converted into Joules ?

- A. $1.8 \times 10^6 \text{ J}$
- B. $3.6 \times 10^6 \text{ J}$
- C. $6.0 \times 10^6 \text{ J}$
- D. $7.2 \times 10^6 \text{ J}$

How much is 1 kWh converted into Joules ?

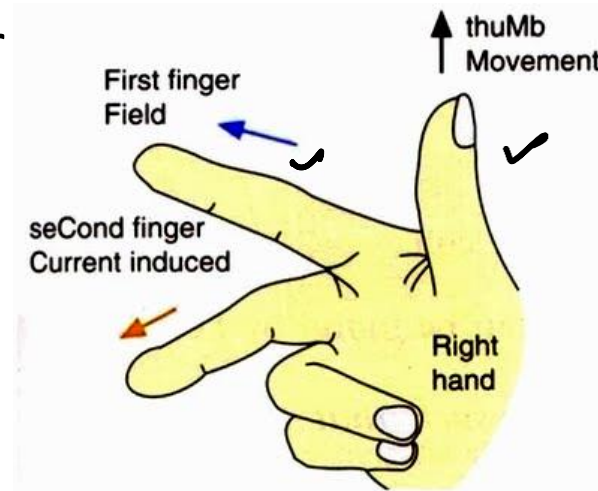
- A. $1.8 \times 10^6 \text{ J}$
- B. $3.6 \times 10^6 \text{ J}$**
- C. $6.0 \times 10^6 \text{ J}$
- D. $7.2 \times 10^6 \text{ J}$

According to Fleming's right hand rule, if the forefinger indicates the direction of magnetic field and thumb shows the direction of motion of conductor, then the stretched middle finger will predict the direction of

- A. Force acting on the conductor
- B. Electric Field
- C. Induced Current
- D. Current

According to Fleming's right hand rule, if the forefinger indicates the direction of magnetic field and thumb shows the direction of motion of conductor, then the stretched middle finger will predict the direction of

- A. Force acting on the conductor
- B. Electric Field
- C. Induced Current**
- D. Current



The magnetic field produced by a current-carrying straight wire at a point outside the wire depends

- A. Inversely on the distance from it
- B. Directly on the distance from it
- C. Inversely at short distances and directly at large distances from it
- D. Directly on the distance (at-short distances) and inversely on the distance (at longer distances) from it.

The magnetic field produced by a current-carrying straight wire at a point outside the wire depends

- A. Inversely on the distance from it**
- B. Directly on the distance from it
- C. Inversely at short distances and directly at large distances from it
- D. Directly on the distance (at-short distances) and inversely on the distance (at longer distances) from it.

The unit of ratio between thrust and impulse is same as that of

- A. Frequency
- B. Speed
- C. Wavelength
- D. Acceleration

The unit of ratio between thrust and impulse is same as that of

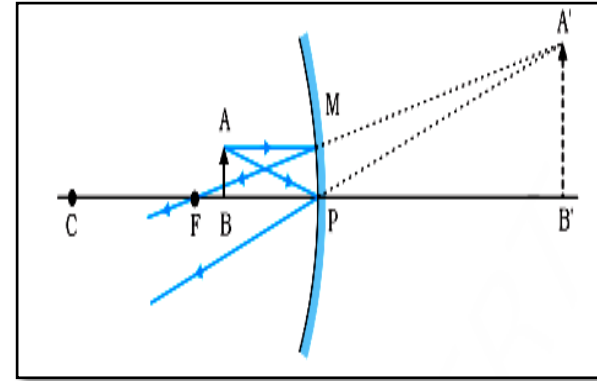
- A. Frequency**
- B. Speed
- C. Wavelength
- D. Acceleration

In the case of a concave mirror, if an object is kept between principal focus F and pole P of the mirror, then which one of the following statements about the image is not correct ?

- A. The image will be virtual
- B. The image will be enlarged or magnified
- C. The image will be formed at infinity
- D. The image will be erect

In the case of a concave mirror, if an object is kept between principal focus F and pole P of the mirror, then which one of the following statements about the image is not correct ?

- A. The image will be virtual
- B. The image will be enlarged or magnified
- C. **The image will be formed at infinity**
- D. The image will be erect

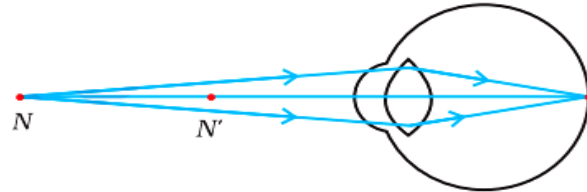


A certain person has minimum distance of distinct vision of 150 cm. He wants to read at a distance of 25 cm. What is the nature of the eye defect ?

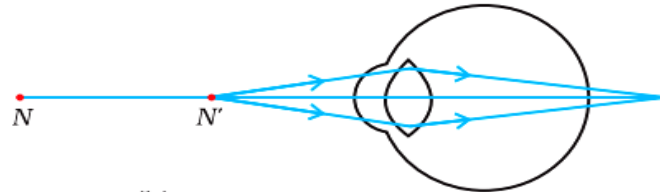
- A. Myopia
- B. Hypermetropia
- C. Presbyopia
- D. Cataract

A certain person has minimum distance of distinct vision of 150 cm. He wants to read at a distance of 25 cm. What is the nature of the eye defect ?

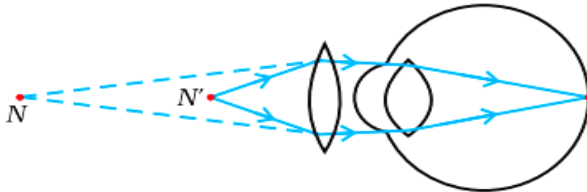
- A. Myopia
- B. Hypermetropia**
- C. Presbyopia
- D. Cataract



(a) Near point of a Hypermetropic eye



(b) Hypermetropic eye



(c) Correction for Hypermetropic eye

Which one of the following cannot be the unit of frequency of a sound wave ?

- A. dB
- B. s^{-1}
- C. Hz
- D. min^{-1}

Which one of the following cannot be the unit of frequency of a sound wave ?

A. dB

B. s^{-1}

C. Hz

D. min^{-1}

Two forces of 5.0 N each are acting on a point mass. If the angle between the forces is 60° , then the net force acting on the point mass has magnitude close to :

- A. 8.6 N
- B. 4.3 N
- C. 5.0 N
- D. 6.7 N

Two forces of 5.0 N each are acting on a point mass. If the angle between the forces is 60° , then the net force acting on the point mass has magnitude close to :

- A. 8.6 N**
- B. 4.3 N
- C. 5.0 N
- D. 6.7 N

A negative work is done when an applied force F and the corresponding displacement S are

- A. Perpendicular to each other
- B. Parallel to each other
- C. Anti-parallel to each other
- D. Equal in magnitude

A negative work is done when an applied force F and the corresponding displacement S are

- A. Perpendicular to each other
- B. Parallel to each other
- C. Anti-parallel to each other**
- D. Equal in magnitude

Which of the following statements is true about specific heat capacity?

- A. It is the amount of heat required to raise the temperature of 1 gram of a substance by 1 degree Celsius.
- B. It is the amount of heat required to raise the temperature of 1 kilogram of a substance by 1 degree Celsius.
- C. It is the rate of heat transfer per unit area.
- D. It is the measure of a material's ability to conduct heat.

Which of the following statements is true about specific heat capacity?

- A. It is the amount of heat required to raise the temperature of 1 gram of a substance by 1 degree Celsius.**
- B. It is the amount of heat required to raise the temperature of 1 kilogram of a substance by 1 degree Celsius.
- C. It is the rate of heat transfer per unit area.
- D. It is the measure of a material's ability to conduct heat.

An electric wire of resistance 50 ohm is cut into five equal wires. These wires are then connected in parallel. What is the equivalent resistance of this combination ?

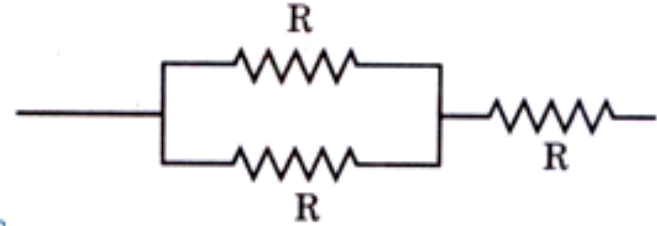
- A. 2 ohms
- B. 10 ohms
- C. 0.5 ohms
- D. 5 ohms

An electric wire of resistance 50 ohm is cut into five equal wires. These wires are then connected in parallel. What is the equivalent resistance of this combination ?

- A. 2 ohms**
- B. 10 ohms
- C. 0.5 ohms
- D. 5 ohms

What is the total resistance of the given circuit element ?

- A. $R/2$
- B. $3R/2$
- C. $3R$
- D. $2R/3$



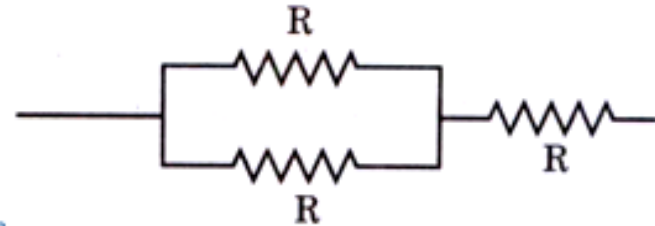
What is the total resistance of the given circuit element ?

A. $R/2$

B. $3R/2$

C. $3R$

D. $2R/3$



NDA Exam Online Coaching 2025

NDA 2025: 📺 Live Classes ▶ In-Depth Lectures 📄 Study Notes 🧪 Mock Tests 📅 Current Affairs ✂ Defence Current Affairs.

★★★★★ 5.0 (120)

Content 20

🔍

FILTER BY TYPE ▾

NDA 2 2024 Live Batch - 2

Course • 497 Lessons 1 Trial

NDA 1 2024 Live Batch - 2 (Enroll Now)

Course • 354 Lessons 1 Trial

NDA 1 2024 Live Batch - 1

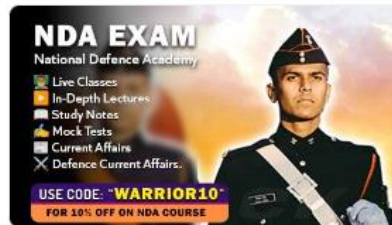
Course • 479 Lessons 1 Trial

NDA Exam Overview

Course • 23 Lessons

NDA Exam Study Plan and Analysis

Course • 18 Lessons



🕒 365 Days validity

₹ 5,999 ~~₹ 7,999~~ 25% OFF

[BUY BUNDLE](#) [START A FREE TRIAL](#)

What's included

📁 20 Courses

Other Pricing Plans

Only for NDA 2 2024

180 Days Validity

[🕒 Details](#)

₹ 4,999 ~~₹ 5,999~~ 17% off

[BUY NOW](#)

SSB Interview Online Coaching 2024

SSB Interview: 📺 Live Classes 🎥 In-Depth Lectures 📄 SSB Notes 🔥 Mock Tests 🗂️ Current Affairs 📁 Defence Current Affairs.

★★★★★ 5.0 (253)

Content 16

Q
FILTER BY TYPE ▾

SSB Interview Live Batch September 2024

Course • 955 Lessons 7 Trials

SSB Interview Live Batch October 2024 - Enroll Now

Course • 1 Lessons 1 Trial

BASICS OF SSB

Course • 68 Lessons

OIR TEST VERBAL-1

Course • 618 Lessons

OIR TEST VERBAL-2

Course • 401 Lessons



🕒 365 Days validity

₹ 6,999 ~~₹ 9,999~~ 30% OFF

[BUY BUNDLE](#) [START A FREE TRIAL](#)

What's included

📁 16 Courses

Other Pricing Plans

Covers Only 1 SSB Interview.

30 Days Validity

[Details](#)

₹ 4,999 ~~₹ 5,999~~ 17% off

[BUY NOW](#)

Bundles 12

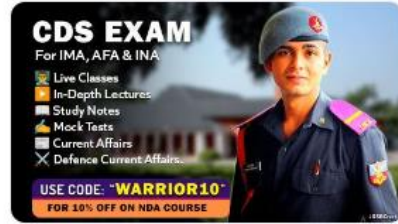
View All



SSB Interview Online Coaching 2024

16 Courses

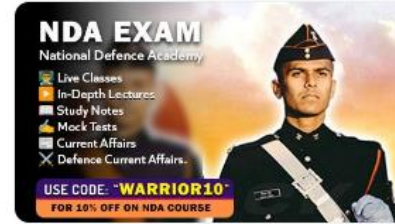
₹ 6,999 ~~₹ 9,999~~ 30% OFF



CDS Exam Online Coaching 2025

20 Courses


₹ 5,999 ~~₹ 7,999~~ 25% OFF



NDA Exam Online Coaching 2025

20 Courses

₹ 5,999 ~~₹ 7,999~~ 25% OFF



CDS Exam OTA Online Coaching 2025

19 Courses

₹ 5,499 ~~₹ 7,499~~ 27% OFF



AFCAT 1 2025

19 Courses

₹ 5,999

Test series 07

View All



NDA Mock Test Series 2024

40 Tests

₹ 499 ~~₹ 999~~ 50% OFF



AFCAT Mock Test Series 2024

20 Tests

₹ 499 ~~₹ 999~~ 50% OFF



CDS Exam Mock Test Series 2024

30 Tests

₹ 499 ~~₹ 999~~ 50% OFF



CDS Exam OTA Mock Test Series 2024

20 Tests

₹ 499 ~~₹ 999~~ 50% OFF

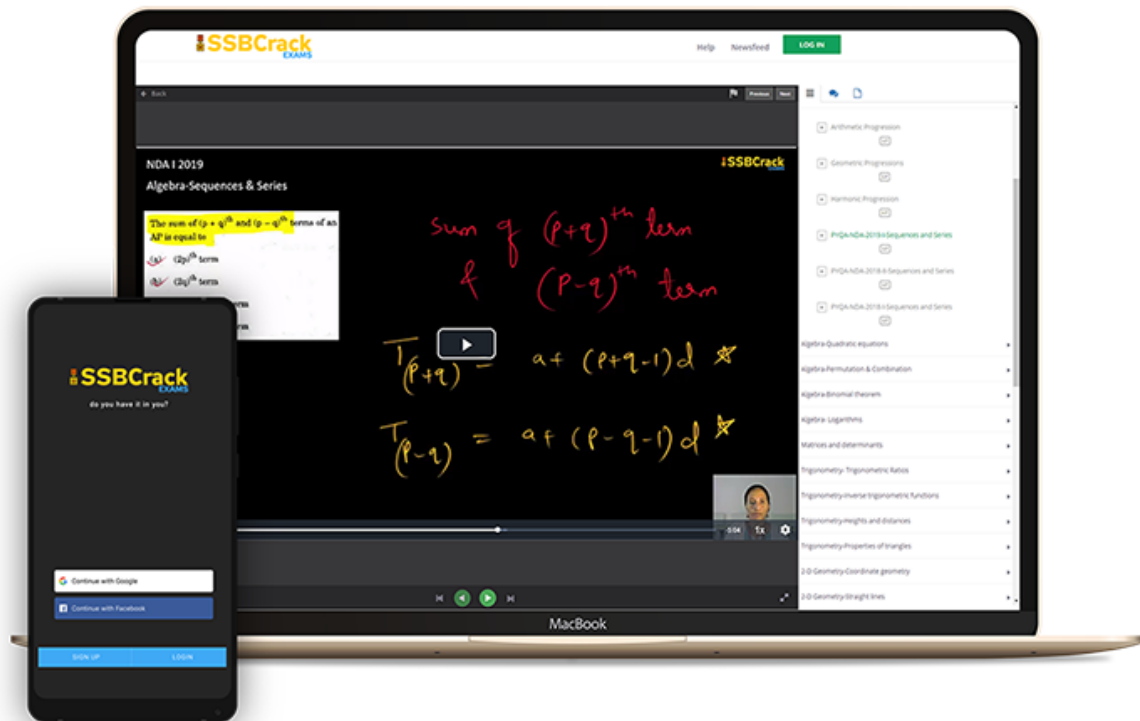


MNS Mock Test Series

20 Tests

₹ 499

India's Most Popular Portal for Defence Exam Preparation



www.ssbcrackexams.com

CODE: WARRIOR10

get an extra 10% off on all courses





NDA 2 2024

MAHA MARATHON #1

COMPLETE REVISION



28 AUG 2024
10AM TO 3PM



SSBCrack

LIVE CLASS



NDA 2 2024

MAHA MARATHON

28 - 31 AUG 2024

10AM TO 12PM

PHYSICS & MATHS - NAVJYOTI SIR

12PM TO 1PM

GS - SHIVANGI MA'AM

1PM TO 2PM

GK - DIVYANSHU SIR

2PM TO 3PM

ENGLISH - ANURADHA MA'AM



CALL US: 080-69185400



**GET IT ON
Google Play**

**DOWNLOAD
THE APP NOW**



NDA 1 2024 Marking Scheme

SECTION	NO. OF QUESTIONS	TOTAL MARKS	CORRECT ANSWER	WRONG ANSWER
Mathematics	120	300	2.5 Marks	0.83 Marks
GAT English	50	200	4 Marks	1.33 Marks
GAT GK	100	400	4 Marks	1.33 Marks
TOTAL	270	900		

Marking System in NDA 2 2024 GAT GS Section

- 1 Question = 4 marks
- Negative marking = 1.33 marks for every incorrect answer
- Total no. of Questions = 100
- Total no. of Marks = 400 marks

Marking System in NDA 2 2024 GAT GS Section

- Total no. of Questions = **20-22/100**
- Total no. of Marks = **80-84 marks**
- 1 Question = **4 marks**
- Negative marking = **1.33 marks for every incorrect answer**

Q) Where Does The Digestion Of Carbohydrates, Fat And Protein Take Place?

- (a) stomach
- (b) small intestine
- (c) large intestine
- (d) none of the above



0:20

Q) Where Does The Digestion Of Carbohydrates ,Fat And Protein Take Place?

(a) stomach

(b) small intestine

(c) large intestine

(d) none of the above

Q) Which Of The Following Statements Is FALSE With Reference To The Digestive System Processes In Human Beings?

- a) digestion Is The Breakdown Of Food Into Simpler Form.
- b) ingestion Is The Intake Of Food Through The Mouth.
- c) egestion Is The Removal Of Digested Food From The Body.
- d) none Of The Above.



0:20

Q) Which Of The Following Statements Is FALSE With Reference To The Digestive System Processes In Human Beings?

- a) digestion Is The Breakdown Of Food Into Simpler Form.
- b) ingestion Is The Intake Of Food Through The Mouth.
- c) egestion Is The Removal Of Digested Food From The Body.
- d) none Of The Above.**

Q) A Digestive Enzyme , Salivary Amylase , In The Saliva Begin Digestion Of:

- (a) Carbohydrates
- (b) Proteins
- (c) Fats
- (d) None of the above

0:20

Maha Marathon 1 (GS) - NDA 2 2024 - Live Class

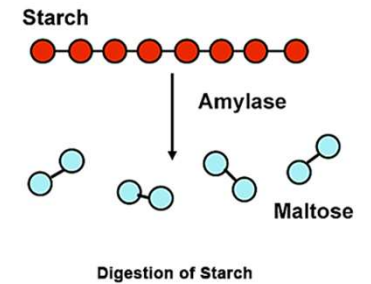
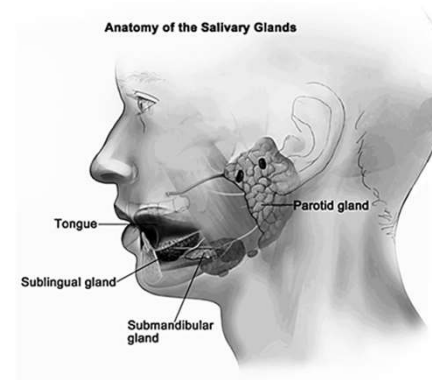
Q) A Digestive Enzyme , Salivary Amylase , In The Saliva Begin Digestion Of:

(a) Carbohydrates

(b) Proteins

(c) Fats

(d) None of the above



Maha Marathon 1 (GS) - NDA 2 2024 - Live Class

Q) Which Of The Following Enzymes Are Found In Saliva ?

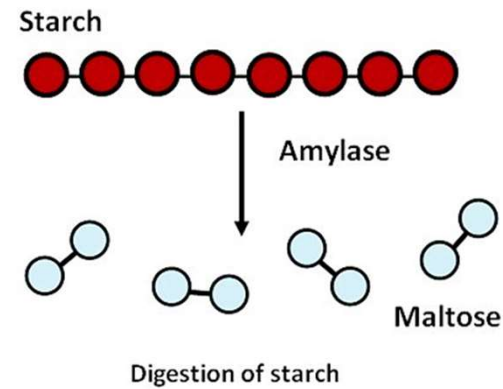
- a) Pepsin
- b) Trypsin
- c) Ptyalin
- d) Chymotrypsin



0:20

Q) Which Of The Following Enzymes Are Found In Saliva ?

- a) Pepsin
- b) Trypsin
- c) **Ptyalin**
- d) Chymotrypsin



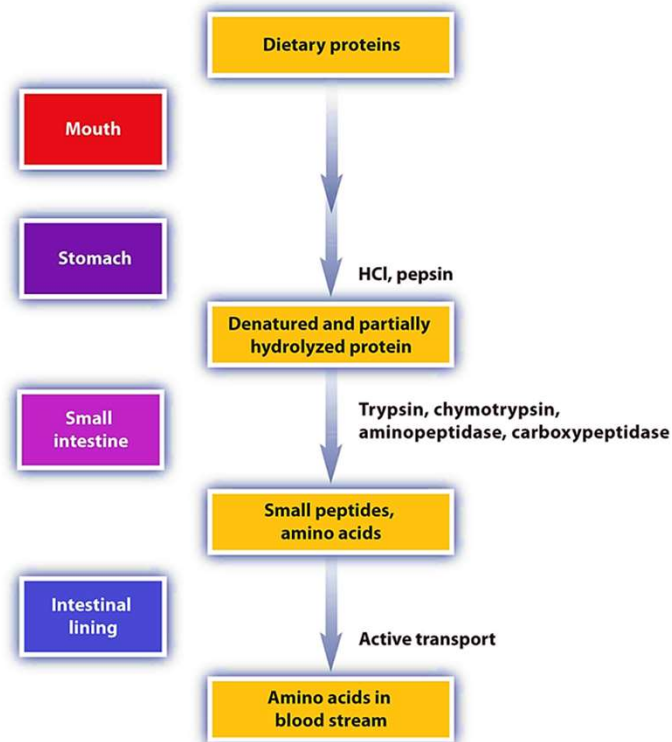
Q) After Digestion, Protein Is Converted Into ?

- (a) Glucose
- (b) Sucrose
- (c) Fat
- (d) Amino acid

0:20


Q) After Digestion, Protein Is Converted Into ?

- (a) Glucose
- (b) Sucrose
- (c) Fat
- (d) Amino acid**



Q) Which Juice Secreted By The Organs In The Alimentary Canal Plays An Important Role In The Digestion Of Fats?

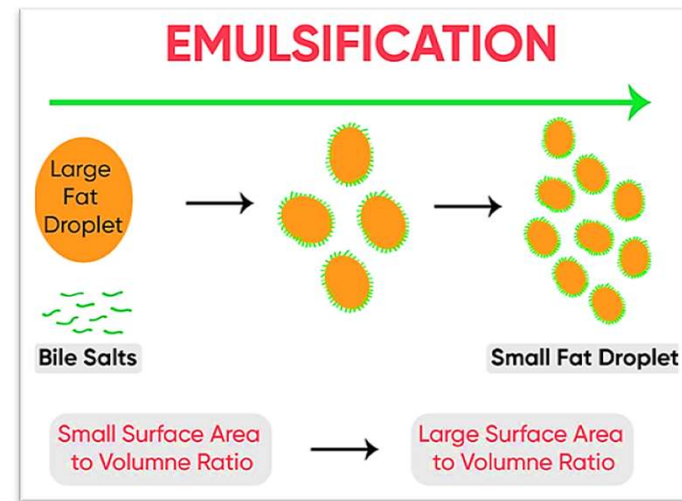
- (a) Pancreatic juice ,saliva
- (b) Hydrochloric acid ,mucus
- (c) Bile juice ,Pancreatic juice
- (d) Saliva ,Hydrochloric acid

0:20

Maha Marathon 1 (GS) - NDA 2 2024 - Live Class

Q) Which Juice Secreted By The Organs In The Alimentary Canal Plays An Important Role In The Digestion Of Fats?

- (a) Pancreatic juice ,saliva
- (b) Hydrochloric acid ,mucus
- (c) Bile juice ,Pancreatic juice**
- (d) Saliva ,Hydrochloric acid



Q) What Is The Role Of Mucus Secreted By The Stomach?

- (a) To protect the lining of the stomach
- (b) To digest fats
- (c) To kill the germs in the food
- (d) To digest the proteins

0:20

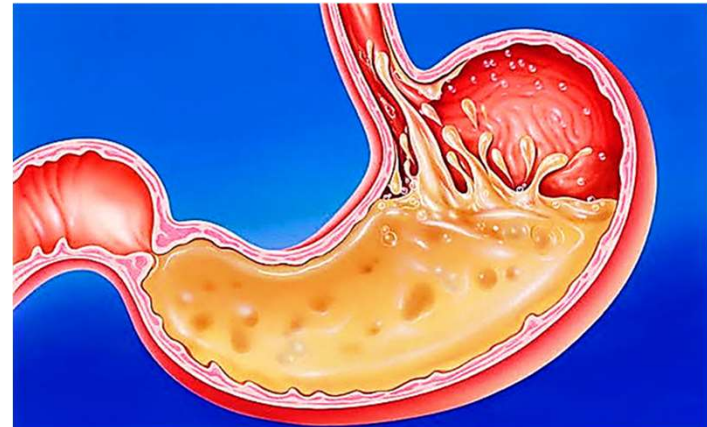
Q) What Is The Role Of Mucus Secreted By The Stomach?

(a) To protect the lining of the stomach

(b) To digest fats


(c) To kill the germs in the food

(d) To digest the proteins



Q) What Happens When We Exhale During Normal Breathing?

- (a) A residual amount of air remains in the lungs
- (b) The diaphragm is flattened
- (c) The lungs are contracted
- (d) None of the above

0:20

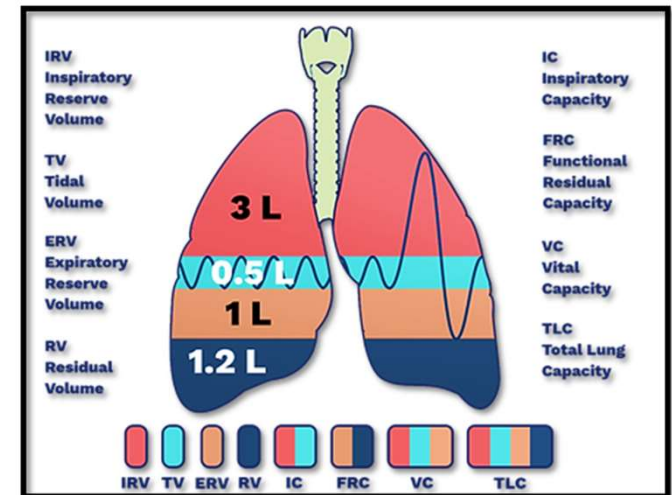
Q) What Happens When We Exhale During Normal Breathing?

(a) A residual amount of air remains in the lungs

(b) The diaphragm is flattened


(c) The lungs are contracted

(d) None of the above



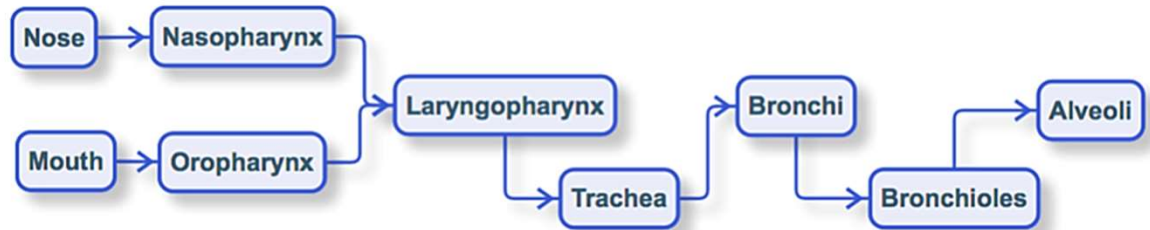
Q) Choose The Correct Sequence Of Respiratory Organs In Human

- (a) Pharynx-Larynx-Bronchi- Trachea-Alveolus
- (b) Pharynx- Larynx-Trachea-Bronchi-Alveolus
- (c) Pharynx-Trachea-Larynx-Bronchi-Alveolus
- (d) Pharynx-Trachea-Bronchi-Larynx-Alveolus

0:20

Q) Choose The Correct Sequence Of Respiratory Organs In Human

- (a) Pharynx-Larynx-Bronchi- Trachea-Alveolus
- (b) Pharynx- Larynx-Trachea-Bronchi-Alveolus
- (c) Pharynx-Trachea-Larynx-Bronchi-Alveolus**
- (d) Pharynx-Trachea-Bronchi-Larynx-Alveolus



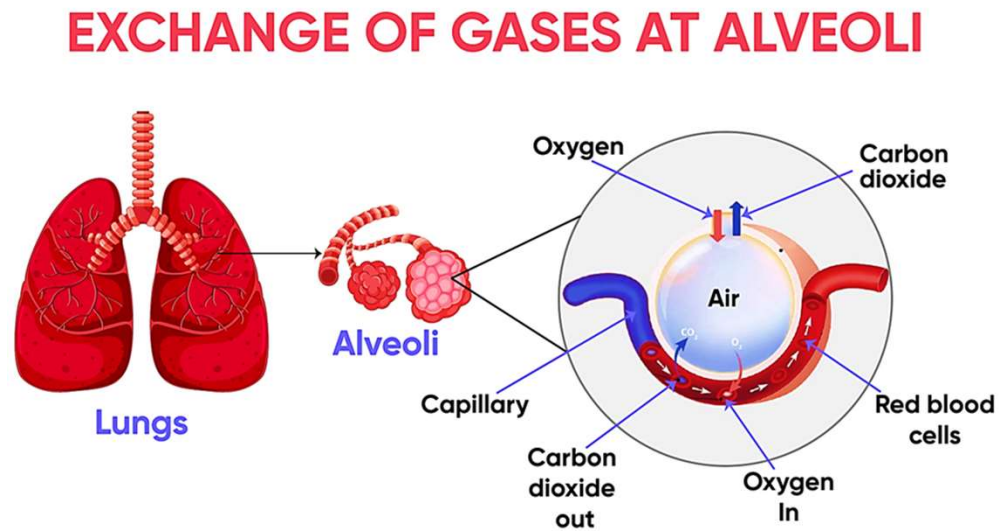
Q) Which Part Of The Human Lungs Provide Surface For The Exchange Of Gases?

- (a) Diaphragm
- (b) Bronchioles
- (c) Bronchi
- (d) Alveoli

0:20


Q) Which Part Of The Human Lungs Provide Surface For The Exchange Of Gases?

- (a) Diaphragm
- (b) Bronchioles
- (c) Bronchi
- (d) Alveoli**



Q) Leishmania, The Causative Agent Of Kala-azar, multiplies Asexually By

- (a) Budding
- (b) Binary Fission
- (c) Multiple fission
- (d) Sporogony

0:20


Q) Leishmania, The Causative Agent Of Kala-azar, multiplies Asexually By

- (a) Budding
- (b) Binary Fission**
- (c) Multiple fission
- (d) Sporogony

Maha Marathon 1 (GS) - NDA 2 2024 - Live Class

Q) Biological Catalysts In Living Organisms Are Known As

- (a) Hormones
- (b) Vitamins
- (c) Steroids
- (d) Enzymes



0:20

Maha Marathon 1 (GS) - NDA 2 2024 - Live Class

Q) Biological Catalysts In Living Organisms Are Known As

(a)Hormones

(b)Vitamins

(c) Steroids

(d) Enzymes

Q) To Which One Of The Following Types Of Organism Do Mushroom Belong?

- (a) Algae
- (b) Ferns
- (c) Fungi
- (d) Lichens

0:20

Maha Marathon 1 (GS) - NDA 2 2024 - Live Class

Q) To Which One Of The Following Types Of Organism Do Mushroom Belong?

(a) Algae

(b) Ferns

(c) Fungi

(d) Lichens



Q) Among The Following Elements, which One Is Essential For The Transmission Of Impulses In The Nerve Fibre?

- (a) Calcium
- (b) Iron
- (c) Sodium
- (d) Zinc

0:20

Maha Marathon 1 (GS) - NDA 2 2024 - Live Class

Q) Among The Following Elements, Which One Is Essential For The Transmission Of Impulses In The Nerve Fibre?

(a) Calcium


(b) Iron

(c) Sodium

(d) Zinc

Q) Which One Among The Following Produces Seeds But Not Flowers?

- (a) Cashew nut
- (b) Coffee
- (c) Groundnut
- (d) Pine

0:20

Maha Marathon 1 (GS) - NDA 2 2024 - Live Class

Q) Which One Among The Following Produces Seeds But Not Flowers?

(a) Cashew nut

(b) Coffee

(c) Groundnut

(d) Pine

Q) The Blood-vessel Containing Deoxygenated Blood Is

- a) Pulmonary vein
- b) Pulmonary artery
- c) Aorta
- d) Capillary

0:20

Q) The Blood-vessel Containing Deoxygenated Blood Is

- a) Pulmonary vein
- b) Pulmonary artery**
- c) Aorta
- d) Capillary

Q) A Structure Present In Human Heart That Prevents The Backward Flow Of Oxygenated Blood When The Ventricular Pressure Falls.

- a) Bicuspid valve
- b) Tricuspid valve
- c) Semilunar valve
- d) Pulmonary valve



Q) A Structure Present In Human Heart That Prevents The Backward Flow Of Oxygenated Blood When The Ventricular Pressure Falls.

- a) Bicuspid valve**
- b) Tricuspid valve
- c) Semilunar valve
- d) Pulmonary valve

Maha Marathon 1 (GS) - NDA 2 2024 - Live Class

Q) Double Membrane Sac Known As The _____ Protects The Human Heart.

- a) Pleura
- b) Kura
- c) Epicardium
- d) Pericardium



Maha Marathon 1 (GS) - NDA 2 2024 - Live Class

Q) Double Membrane Sac Known As The _____ Protects The Human Heart.

- a) Pleura
- b) Kura
- c) Epicardium
- d) Pericardium**

Q) Which Juice Secreted By The Organs In The Alimentary Canal Plays An Important Role In The Digestion Of Fats?

- (a) Pancreatic juice ,saliva
- (b) Hydrochloric acid ,mucus
- (c) Bile juice ,Pancreatic juice
- (d) Saliva ,Hydrochloric acid



Q) Which Juice Secreted By The Organs In The Alimentary Canal Plays An Important Role In The Digestion Of Fats?

- (a) Pancreatic juice ,saliva
- (b) Hydrochloric acid ,mucus
- (c) Bile juice ,Pancreatic juice**
- (d) Saliva ,Hydrochloric acid

Q) Electrical Impulse Travels In A Neuron From

- a) Dendrite → axon → axonal end → cell body
- b) Cell body → dendrite → axon → axonal end
- c) Dendrite → cell body → axon → axonal end
- d) Axonal end → axon → cell body → dendrite

0:20

Q) Electrical Impulse Travels In A Neuron From

- a) Dendrite → axon → axonal end → cell body
- b) Cell body → dendrite → axon → axonal end
- c) Dendrite → cell body → axon → axonal end**
- d) Axonal end → axon → cell body → dendrite

Q) Which One Of The Following Organs Will Not Feel Any Pain On Being Pricked By A Needle?

- a) Skin
- b) Brain
- c) Heart
- d) Eye



Maha Marathon 1 (GS) - NDA 2 2024 - Live Class

Q) Which One Of The Following Organs Will Not Feel Any Pain On Being Pricked By A Needle?

a) Skin

b) Brain

c) Heart

d) Eye

Q) Acids That Contain Hydrogen And Other Non-metallic Element(s), Except Oxygen, Are Called:

- a) Dilute acids
- b) Hydracids
- c) Strong acids
- d) More than one of the above

0:20

Q) Acids That Contain Hydrogen And Other Non-metallic Element(s), Except Oxygen, Are Called:

- a) Dilute acids
- b) Hydracids**
- c) Strong acids
- d) More than one of the above

Q) Which Of The Following Are Present In A Dilute Aqueous Solution Of Hydrochloric Acid?

- a) $\text{H}_3\text{O}^+ + \text{Cl}^-$
- b) $\text{H}_3\text{O}^+ + \text{OH}^-$
- c) $\text{Cl}^- + \text{OH}^-$
- d) More than one of the above



Maha Marathon 1 (GS) - NDA 2 2024 - Live Class

Q) Which Of The Following Are Present In A Dilute Aqueous Solution Of Hydrochloric Acid?

- a) $\text{H}_3\text{O}^+ + \text{Cl}^-$
- b) $\text{H}_3\text{O}^+ + \text{OH}^-$
- c) $\text{Cl}^- + \text{OH}^-$
- d) More than one of the above

Maha Marathon 1 (GS) - NDA 2 2024 - Live Class

Q) Acids React With Metals To Liberate :

- a) Carbon monoxide
- b) Water
- c) Hydrogen
- d) More than one of the above



Maha Marathon 1 (GS) - NDA 2 2024 - Live Class

Q) Acids React With Metals To Liberate :

- a) Carbon monoxide
- b) Water
- c) Hydrogen**
- d) More than one of the above

Q) Sulphur Dioxide When Dissolved In Water Forms-

- a) Sulphur Trioxide
- b) Sulphurous acid
- c) Sulphuric acid
- d) Sulphur



Maha Marathon 1 (GS) - NDA 2 2024 - Live Class

Q) Sulphur Dioxide When Dissolved In Water Forms-

- a) Sulphur Trioxide
- b) Sulphurous acid**
- c) Sulphuric acid
- d) Sulphur

Q) An Acid Is A Substance Which

- a) donates a proton
- b) accepts an electron pair
- c) gives H^+ in water
- d) all of these



Maha Marathon 1 (GS) - NDA 2 2024 - Live Class

Q) An Acid Is A Substance Which

- a) donates a proton
- b) accepts an electron pair
- c) gives H^+ in water
- d) all of these**

Maha Marathon 1 (GS) - NDA 2 2024 - Live Class

Q) Mass Of 0.1 Mol Of Glucose Will Be:

- a) 18 g
- b) 180 g
- c) 9 g
- d) 36 g



Maha Marathon 1 (GS) - NDA 2 2024 - Live Class

Q) Mass Of 0.1 Mol Of Glucose Will Be:

a) 18 g

b) 180 g

c) 9 g

d) 36 g

Maha Marathon 1 (GS) - NDA 2 2024 - Live Class

Q) Solid Carbon Dioxide Is Known As:

- a) Diamond
- b) Dry Ice
- c) Rock
- d) Mercury



Maha Marathon 1 (GS) - NDA 2 2024 - Live Class

Q) Solid Carbon Dioxide Is Known As:

- a) Diamond
- b) Dry Ice**
- c) Rock
- d) Mercury

Q) Which Among The Following Is A Homogenous Solution?

- a) Cement in water
- b) Sugar in water
- c) Sugar and sand
- d) More than one of the above



Q) Which Among The Following Is A Homogenous Solution?

- a) Cement in water
- b) Sugar in water**
- c) Sugar and sand
- d) More than one of the above

Q) A Solution In Which No More Solute Can Be Dissolved At A Given Temperature

Is Called:

- a) Unsaturated Solution
- b) Universal solvent
- c) Volatile solution
- d) Saturated solution



Q) A Solution In Which No More Solute Can Be Dissolved At A Given Temperature

Is Called:

- a) Unsaturated Solution
- b) Universal solvent
- c) Volatile solution
- d) Saturated solution**

Q) Which One Among The Following Statements Regarding The Properties Of Mixtures And Compounds Is NOT Correct?

- a) A mixture shows the properties of its constituents but the properties of a compound are entirely different from its constituents
- b) Energy is either absorbed or evolved during the preparation of a mixture but not in the preparation of a compound
- c) The constituents of a mixture can be separated by physical methods but those of a compound cannot be separated by physical methods
- d) A mixture may be homogeneous or heterogeneous but a compound is homogeneous

0:20

Q) Which One Among The Following Statements Regarding The Properties Of Mixtures And Compounds Is NOT Correct?

- a) A mixture shows the properties of its constituents but the properties of a compound are entirely different from its constituents
- b) Energy is either absorbed or evolved during the preparation of a mixture but not in the preparation of a compound**
- c) The constituents of a mixture can be separated by physical methods but those of a compound cannot be separated by physical methods
- d) A mixture may be homogeneous or heterogeneous but a compound is homogeneous.

Q) Food Wrapped In Newspaper Is Likely To Get Contaminated With

- a) Lead
- b) Aluminium
- c) Iron
- d) Magnesium



Q) Food Wrapped In Newspaper Is Likely To Get Contaminated With

- a) Lead**
- b) Aluminium
- c) Iron
- d) Magnesium

Q) Which one among the following metals is more reactive than hydrogen?

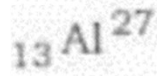
- a) Mercury
- b) Copper
- c) Silver
- d) Tin



Q) Which one among the following metals is more reactive than hydrogen?

- a) Mercury
- b) Copper
- c) Silver
- d) Tin**

Q) The Number Of Neutrons In

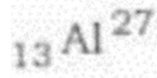


- a) 40
- b) 27
- c) 14
- d) 13



Maha Marathon 1 (GS) - NDA 2 2024 - Live Class

Q) The Number Of Neutrons In



- a) 40
- b) 27
- c) 14**
- d) 13

Q) Which One The Following Elements Will Replace Hydrogen From Acids To Form Salts?

- a) Sulphur
- b) Silicon
- c) Zinc
- d) Phosphorus



Q) Which One The Following Elements Will Replace Hydrogen From Acids To Form Salts?

- a) Sulphur
- b) Silicon
- c) Zinc**
- d) Phosphorus

Q) Which Among The Following Is The Main Ingredient In Cement?

- a) Gypsum
- b) Limestone
- c) Clay
- d) Ash



Q) Which Among The Following Is The Main Ingredient In Cement?

- a) Gypsum
- b) Limestone**
- c) Clay
- d) Ash

Maha Marathon 1 (GS) - NDA 2 2024 - Live Class

Q) Which Is The Only Non-metal Placed With Alkali Metals.

- a) Francium
- b) Hydrogen
- c) Rubidium
- d) Caesium



0:20

Maha Marathon 1 (GS) - NDA 2 2024 - Live Class

Q) Which Is The Only Non-metal Placed With Alkali Metals.

a) Francium

b) Hydrogen

c) Rubidium

d) Caesium

Q) Which method is used to produce the hydrogen in large scale?

- a) Filtration
- b) Evaporation
- c) Fractional distillation
- d) Simple distillation



Maha Marathon 1 (GS) - NDA 2 2024 - Live Class

Q) Which method is used to produce the hydrogen in large scale?

- a) Filtration
- b) Evaporation
- c) Fractional distillation**
- d) Simple distillation

Maha Marathon 1 (GS) - NDA 2 2024 - Live Class

Q) Producer Gas Is Mixture Of Which Of The Following:

- a) $\text{CO} + \text{N}_2$
- b) $\text{CO}_2 + \text{H}_2$
- c) $\text{CO}_2 + \text{N}_2$
- d) More than one of the above



0:20

Maha Marathon 1 (GS) - NDA 2 2024 - Live Class

Q) Producer Gas Is Mixture Of Which Of The Following:

- a) **CO + N₂**
- b) CO₂ + H₂
- c) CO₂ + N₂
- d) More than one of the above

[STORE](#) / [BUNDLE](#) / [NDA EXAM ONLINE](#) ...

NDA Exam Online Coaching 2024

NDA 1 2024: Live Classes In-Depth Lectures Study Notes Mock Tests Current Affairs Defence Current Affairs.

★★★★★ 5.0 (120)

Content 19

FILTER BY TYPE ▾

NDA 2024

LIVE CLASSES

NDA 1 2024 Live Batch - 2 (Enroll Now)

Course • 339 Lessons 1 Trial

NDA 2024

LIVE CLASSES

NDA 1 2024 Live Batch - 1

Course • 479 Lessons 1 Trial

NDA Exam Overview

Course • 24 Lessons

NDA Exam Study Plan and Analysis

Course • 18 Lessons

NDA Previous Year Papers Solved

NDA 1 2024

For National Defence Academy

Live Classes
 In-Depth Lectures

Study Notes
 Mock Tests

Current Affairs
 Defence Current Affairs

USE CODE: **WARRIOR10**
 FOR 10% OFF ON NDA COURSE

365 Days validity

₹ 5,999

₹ 7,999 25% OFF

What's included

19 Courses

Other Pricing Plans

Only for NDA 1 2024 [Details](#)

180 Days Validity

₹ 4,999

₹ 5,999 17% off

[STORE](#) / [BUNDLE](#) / [SSB INTERVIEW ONL...](#)

SSB Interview Online Coaching 2024

SSB Interview: 📺 Live Classes ▶ In-Depth Lectures 📄 SSB Notes 🧪 Mock Tests 📅 Current Affairs ✂ Defence Current Affairs.

★★★★★ 5.0 (253)

Content 16

Search in bundle



FILTER BY TYPE ▾



SSB Live Batch April 2024

Course • 969 Lessons 4 Trials



SSB Live Batch May 2024 - Enroll Now

Course • 1 Lessons 1 Trial



Basics of SSB Interview

Course • 68 Lessons



OIR Test - Verbal Reasoning - Part 1

Course • 618 Lessons



OIR Test - Verbal Reasoning - Part 2



🕒 365 Days validity

₹ 6,999 ~~₹ 9,999~~ 30% OFF

BUY BUNDLE

START A FREE TRIAL

What's included

📁 16 Courses

Other Pricing Plans

Covers Only 1 SSB Interview.

[Details](#)

30 Days Validity

₹ 4,999 ~~₹ 5,999~~ 17% off

BUY NOW

Courses We Offer

SSB INTERVIEW
For SSB, AFSB & NSB

- Live Classes
- In-Depth Lectures
- SSB Notes
- Mock Tests
- Current Affairs
- Defence Current Affairs

USE CODE: **WARRIOR10**
FOR 10% OFF ON SSB COURSE

NDA 1 2024
For National Defence Academy

- Live Classes
- In-Depth Lectures
- Study Notes
- Mock Tests
- Current Affairs
- Defence Current Affairs

USE CODE: **WARRIOR10**
FOR 10% OFF ON NDA COURSE

CDS 1 2024
For IMA, AFA & INA

- Live Classes
- In-Depth Lectures
- Study Notes
- Mock Tests
- Current Affairs
- Defence Current Affairs

USE CODE: **WARRIOR10**
FOR 10% OFF ON CDS COURSE

CDS 1 2024
For OTA Chennai

- Live Classes
- In-Depth Lectures
- Study Notes
- Mock Tests
- Current Affairs
- Defence Current Affairs

USE CODE: **WARRIOR10**
FOR 10% OFF ON CDS COURSE

AFCAT 1 2024
Air Force Common Admission Test

- Live Classes
- In-Depth Lectures
- Study Notes
- Mock Tests
- Current Affairs
- Defence Current Affairs

USE CODE: **WARRIOR10**
FOR 10% OFF ON AFCAT COURSE

SSB Crack
MNS 2024

LIVE CLASSES

JOIN NOW!

SSB Crack
TERRITORIAL ARMY 2024

LIVE CLASSES

JOIN NOW!

SSB Crack
ACC 2024

LIVE CLASSES

JOIN NOW!

Mock Tests We Offer

SSB Crack
AFCAT EXAM TEST SERIES

*** 20+ MOCKS ***

2400 MINUTES
2400 QUESTIONS

SSB Crack
NDA EXAM TEST SERIES

*** 20+ MOCKS ***

2400 MINUTES
2400 QUESTIONS

SSB Crack
CDS EXAM TEST SERIES

*** 20+ MOCKS ***

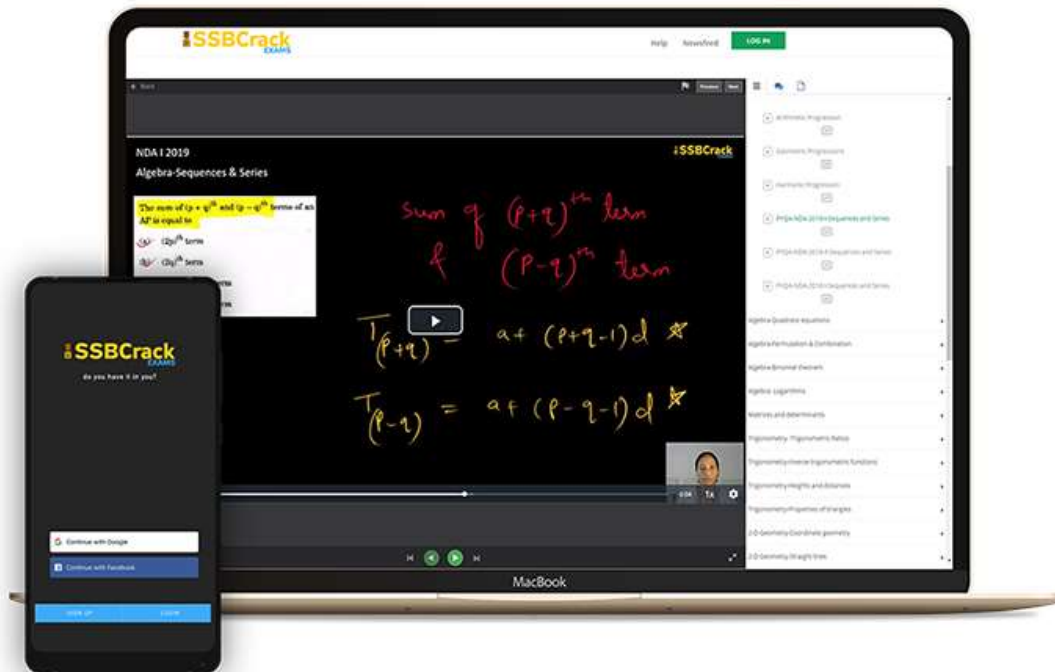
2400 MINUTES
2400 QUESTIONS

SSB Crack
CDS EXAM OTA MOCK TEST SERIES

Talk to Defence Mentors



India's Most Popular Portal for Defence Exam Preparation



www.ssbcrackexams.com

CODE: WARRIOR10

get an extra 10% off on all courses





NDA 2 2024

MAHA MARATHON #1

COMPLETE REVISION



28 AUG 2024
10AM TO 3PM



SSBCrack

LIVE CLASS



NDA 2 2024

MAHA MARATHON

28 - 31 AUG 2024

10AM TO 12PM

PHYSICS & MATHS - NAVJYOTI SIR

12PM TO 1PM

GS - SHIVANGI MA'AM

1PM TO 2PM

GK - RUBY MA'AM

2PM TO 3PM

ENGLISH - ANURADHA MA'AM

 **CALL US: 080-69185400**

 **GET IT ON
Google Play**

**DOWNLOAD
THE APP NOW**



NDA 1 2024 Marking Scheme

SECTION	NO. OF QUESTIONS	TOTAL MARKS	CORRECT ANSWER	WRONG ANSWER
Mathematics	120	300	2.5 Marks	0.83 Marks
GAT English	50	200	4 Marks	1.33 Marks
GAT GK	100	400	4 Marks	1.33 Marks
TOTAL	270	900		

Marking System in NDA 1 2024 GAT GK Section

- 1 Question = 4 marks
- Negative marking = 1.33 marks for every incorrect answer
- Total no. of Questions = 100
- Total no. of Marks = 400 marks

Q. 'Esker' Is A Geomorphic Feature Developed By

(A) Mechanical Weathering

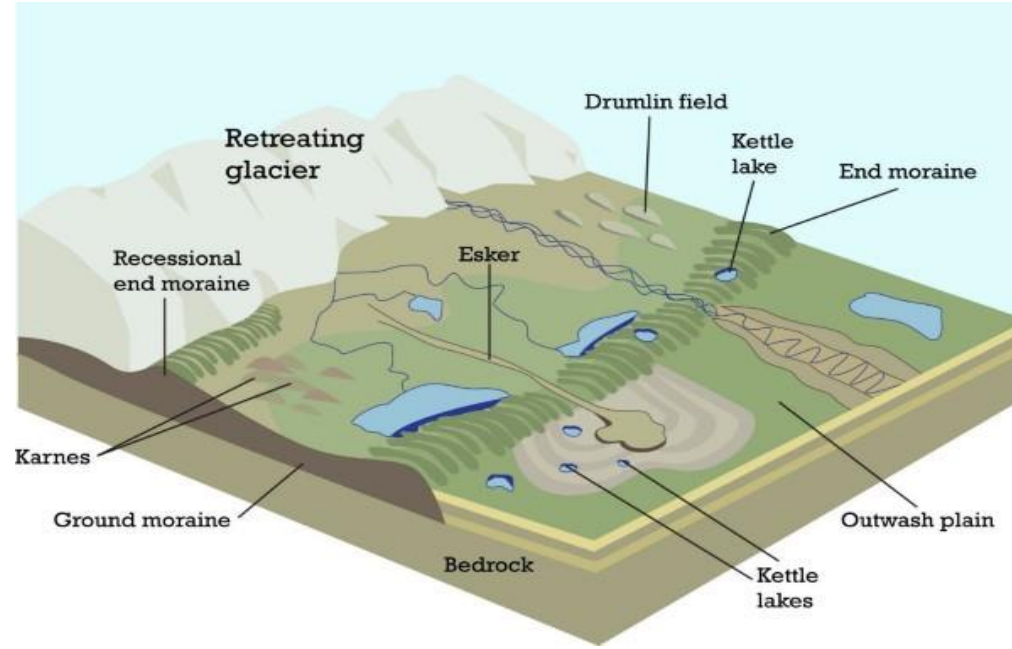
(B) River Action

(C) Glaciofluvial Deposits

(D) Aeolian Deposits

Q. 'Esker' Is A Geomorphic Feature Developed By

- (A) Mechanical Weathering
- (B) River Action
- (C) Glaciofluvial Deposits**
- (D) Aeolian Deposits



Esker – A Narrow, Sinuous Ridge Of Partly Stratified Coarse Sand And Gravel Of Glaciofluvial Origin.

Q. Choose The Incorrect One:

List I

(River)

A. Danube

B. Rhine

C. Rhone

D. Loire

List II

(Mouth of the river)

1. Black sea

2. North sea

3. Mediterranean sea

4. Bay of Fundy

Q. Choose The Incorrect One:

List I

(River)

A. Danube

B. Rhine

C. Rhone

D. Loire

List II

(Mouth of the river)

1. Black sea

2. North sea

3. Mediterranean sea

4. Bay of Fundy

Loire: Bay Of Biscay



Q. Jet Stream Is Westerlies In Upper Part Of Troposphere.

- (A) Fast Blowing
- (B) Ocean Current
- (C) Monsoon Winds
- (D) None Of These

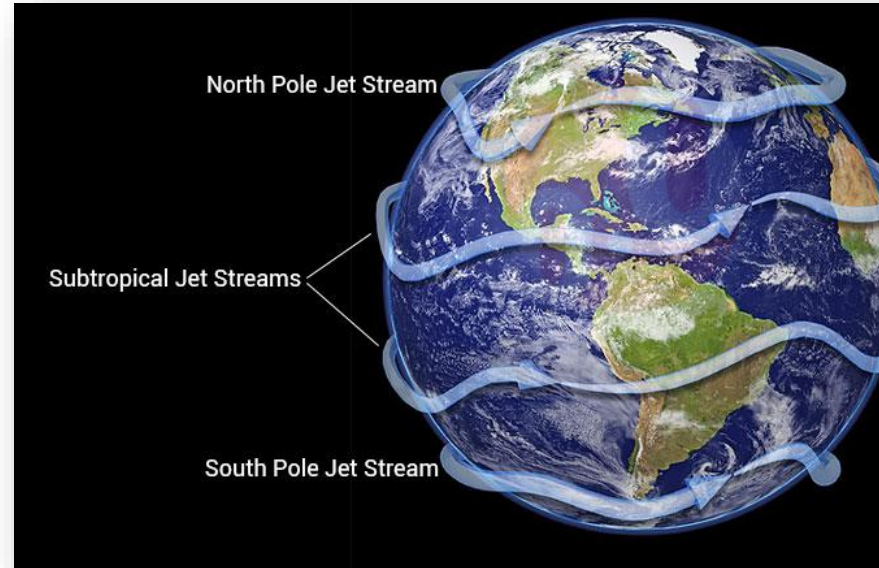
Q. Jet Stream Is Westerlies In Upper Part Of Troposphere.

(A) Fast Blowing

(B) Ocean Current

(C) Monsoon Winds

(D) None Of These



Jet Stream Is Fast Blowing Westerlies, Narrow Air Currents In Upper Part Of Troposphere. The Main Jet Streams Are Located Near The Tropopause

Q. Which One Of The Following Is Correctly Matched?

- (A) Rossby Waves — Jet Stream
- (B) El Nino — Strong Monsoon
- (C) Index Cycle — Walker Circulation
- (D) Hadley Cell — Mid-latitude Cell

Q. Which One Of The Following Is Correctly Matched?

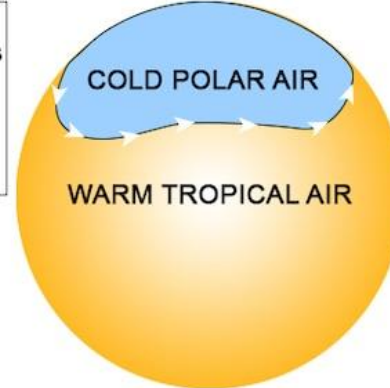
(A) Rossby Waves — Jet Stream

(B) El Nino — Strong Monsoon

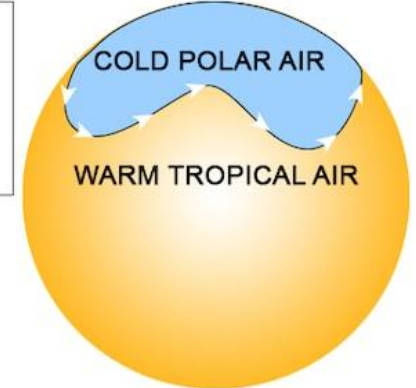
(C) Index Cycle — Walker Circulation

(D) Hadley Cell — Mid-latitude Cell

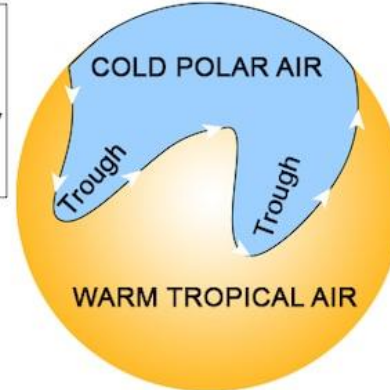
1. The jet stream begins to undulate



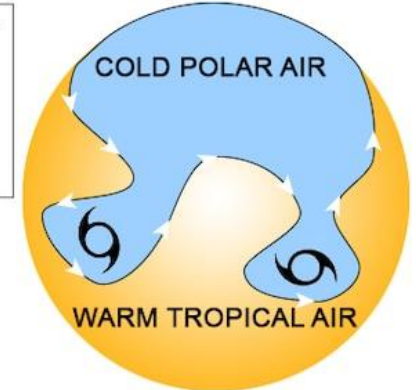
2. Rossby waves begin to form



3. Waves develop, cold air occupies troughs of low pressure



4. Waves are pinched off, forming cyclones of cold air



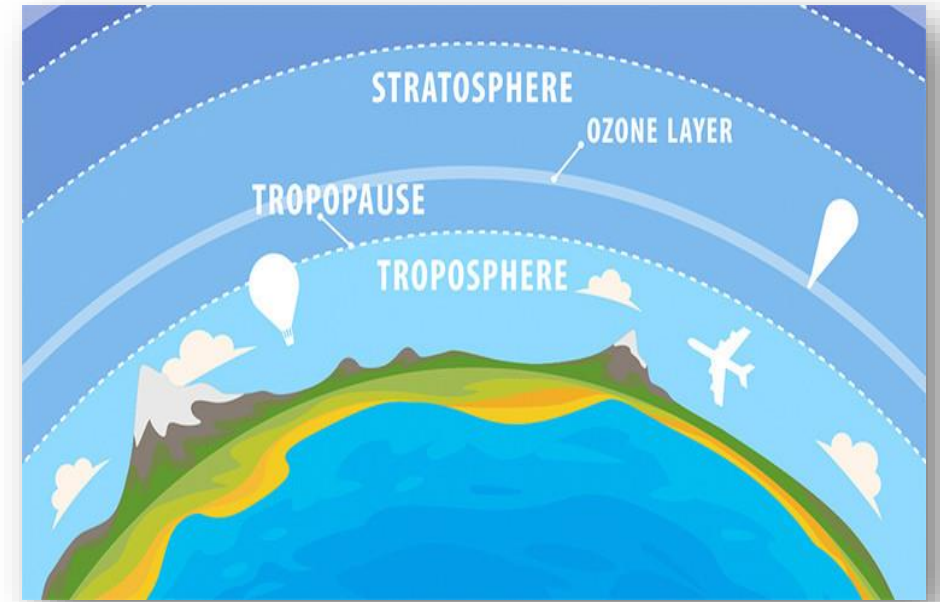
Q. Which One Of The Following Statements Is True About Tropopause?

- (A) It Is About 5 Km Thick Layer.
- (B) Its Average Height Is About 10 Km Over The Equator.
- (C) There Is No Seasonal Variation In Its Height.
- (D) The Temperature At Its Top Is Lowest Over The Equator And Relatively Higher Over The Poles.

Q. Which One Of The Following Statements Is True About Tropopause?

- (A) It Is About 5 Km Thick Layer.
- (B) Its Average Height Is About 10 Km Over The Equator.
- (C) There Is No Seasonal Variation In Its Height.
- (D) The Temperature At Its Top Is Lowest Over The Equator And Relatively Higher Over The Poles.**

The **Tropopause** Is The **Boundary** In The **Earth's Atmosphere** Between The **Troposphere** And The **Stratosphere**.



Q. Arrange The Following In Ascending Order From Earliest To Latest:

1) Palaeolithic Age

2) Mesolithic Age

3) Neolithic Age

4) Chalcolithic Age

A. 1, 2, 3, 4

B. 4, 3, 2, 1

C. 3, 4, 2, 1

D. 1, 4, 2, 3

Q. Arrange The Following In Ascending Order From Earliest To Latest:

- 1) Palaeolithic Age
- 2) Mesolithic Age
- 3) Neolithic Age
- 4) Chalcolithic Age



A. 1, 2, 3, 4

B. 4, 3, 2, 1

C. 3, 4, 2, 1

D. 1, 4, 2, 3

The Chronology Is As Follows:

Palaeolithic Age (500,000-10,000 BC),

Mesolithic Age (10,000-4,000 BC), Neolithic Age (4000-

1800 BC), Chalcolithic Age (1800-1000 BC).

Q. In 1921, The Sites Of Harappa And Mohenjodaro Were Discovered By _____ & _____ Respectively.

- A. N.G Majumdar, Daya Ram Sahni
- B. R.D Banerjee, J.P Joshi
- C. Daya Ram Sahni, R.D Banerjee
- D. R.S Bisht, P C Ghose

Q. In 1921, The Sites Of Harappa And Mohenjodaro Were Discovered By _____ & _____ Respectively.

- A. N.G Majumdar, Daya Ram Sahni
- B. R.D Banerjee, J.P Joshi
- C. Daya Ram Sahni, R.D Banerjee**
- D. R.S Bisht, P C Ghose



Daya Ram Sahni



R D Banerji

Q.	List A	List B	Codes:
1.	Harappa	(a) Bead Maker's Shop	A. 1-(a), 2-(b), 3-(c), 4-(d)
2.	Mohenjodaro	(b) Fire Altar	B. 4-(c), 3-(b), 2-(a), 1-(d)
3.	Kalibangan	(c) Great Bath	C. 1-(d), 2-(c), 3-(b), 4-(a)
4.	Chanhudaro	(d) Granaries	D. 4-(b), 3-(c), 2-(a), 1-(d)

Q.	List A	List B	Codes:
1.	Harappa	(a) Bead Maker's Shop	A. 1-(a), 2-(b), 3-(c), 4-(d)
2.	Mohenjodaro	(b) Fire Altar	B. 4-(c), 3-(b), 2-(a), 1-(d)
3.	Kalibangan	(c) Great Bath	C. 1-(d), 2-(c), 3-(b), 4-(a)
4.	Chanhudaro	(d) Granaries	D. 4-(b), 3-(c), 2-(a), 1-(d)

Q. Which Of The Following Is Not One Among The Reasons/Theories For The Decline Of The Indus Valley Civilization?

- A. Invasion Of Indo-European Tribes (Aryans)
- B. Changed Patterns Of Rainfalls
- C. Several Extreme Tectonic Disturbances
- D. None Of The Above

Q. Which Of The Following Is Not One Among The Reasons/Theories For The Decline Of The Indus Valley Civilization?

- A. Invasion Of Indo-European Tribes (Aryans)
- B. Changed Patterns Of Rainfalls
- C. Several Extreme Tectonic Disturbances
- D. **None Of The Above**

Q. List A

List B

Codes:

1. Indra (a) God of Marriage

A. 1-(a), 2-(b), 3-(c), 4-(d)

2. Agni (b) God of Animals

B. 4-(b), 3-(a), 2-(c), 1-(d)

3. Rudra (c) Fire God

C. 1-(d), 2-(c), 3-(b), 4-(a)

4. Pushan (d) Breaker of Forts

D. 4-(b), 3-(c), 2-(a), 1-(d)

Q. List A

List B

Codes:

1. Indra (a) God of Marriage

A. 1-(a), 2-(b), 3-(c), 4-(d)

2. Agni (b) God of Animals

B. 4-(b), 3-(a), 2-(c), 1-(d)

3. Rudra (c) Fire God

C. 1-(d), 2-(c), 3-(b), 4-(a)

4. Pushan (d) Breaker of Forts

D. 4-(b), 3-(c), 2-(a), 1-(d)

God	Associated Field
Indra/Purandar	Breaker of forts
Agni	Fire God
Varuna	Water God
Surya	God with horse driven chariot
Mitra	Solar God
Pushan	God of Marriage
Vishnu	One who covered Earth in 3 steps
Rudra	God of Animals
Sindhu	River Goddess
Yama	God of death
Marut	Personified Storm

Q. Choose The Correct Statements About Vedic Literature:

1. Shruti Is A Sanskrit Word That Means "What Is Said".

2. Smriti Is A Sanskrit Word That Means "Remembered".

A. 1 & 2 Only B. 1 Only C. 2 Only D. None

Q. Choose The Correct Statements About Vedic Literature:

- 1. Shruti Is A Sanskrit Word That Means "What Is Said".**
- 2. Smriti Is A Sanskrit Word That Means "Remembered".**

A. 1 & 2 Only B. 1 Only C. 2 Only D. None

The Whole Vedic Literature Is Divided Into Two Broad Categories:

Early Vedic Literature (Shruti) Consisting Of Four Vedas,


Brahmanas, Aranyakas, And Upanishads. **Later Vedic Literature**

(Smriti) Consisting Of Sutras, Vedanga, Upavedas, Puranas, Epics,


Dharam Shastras Etc.

- Q. 1. RIGVEDA (A) Mantras Deal With Chains Magic And Spells.**
- 2. YAJURVEDA (B) It Is The Veda Of Melodies And Chants.**
- 3. SAMAVEDA (C) Performing Yajanas By The Priests.**
- 4. ATHARVAVEDA (D) Collection Of Hymns In Praise Of Gods.**

- A. 1-(a), 2-(b), 3-(c), 4-(d)
- B. 4-(b), 3-(a), 2-(c), 1-(d)
- C. 1-(d), 2-(c), 3-(b), 4-(a)
- D. 4-(b), 3-(c), 2-(a), 1-(d)



- Q. 1. RIGVEDA (A) Mantras Deal With Chains Magic And Spells.
2. YAJURVEDA (B) It Is The Veda Of Melodies And Chants.
3. SAMAVEDA (C) Performing Yajanas By The Priests.
4. ATHARVAVEDA (D) Collection Of Hymns In Praise Of Gods.



- A. 1-(a), 2-(b), 3-(c), 4-(d)
B. 4-(b), 3-(a), 2-(c), 1-(d)
C. 1-(d), 2-(c), 3-(b), 4-(a)
D. 4-(b), 3-(c), 2-(a), 1-(d)

Q. How Many Types/ Forms Of Vedic Marriages Exist As Given By Manu

- A. 10
- B. 8
- C. 9
- D. 12



Q. How Many Types/ Forms Of Vedic Marriages Exist As Given By Manu

A. 10

B. 8

C. 9

D. 12

Types	Feature
Arsha Vivaha	Giving the girl to a man with a bride price
Brahma Vivaha	Giving the girl to a man with a dowry
Daiva Vivaha	Giving the girl to a priest for his fees
Gandharva Vivaha	Love marriage
Asura Vivaha	Marriage with a purchased girl
Prajapatya Vivaha	Giving the girl to a man without a bride-price
Paishacha Vivaha	Marriage to a girl after seducing (raping) her.
Rakshasa Vivaha	Marriage with the daughter of defeated king or with kidnapped girl.

Q. _____ Movement Was A Non-Vedic Movement Parallel To Vedic Hinduism In Ancient India.

- A. Shramana
- B. Jainism
- C. Buddhism
- D. Yoga

Q. _____ Movement Was A Non-Vedic Movement Parallel To Vedic Hinduism In Ancient India.

A. Shramana

B. Jainism

C. Buddhism

D. Yoga



The **Shramana Movement** Was A Non-Vedic Movement Parallel To Vedic Hinduism In Ancient India The Shramana Tradition Gave Rise To **Jainism, Buddhism, And Yoga**, And Was Responsible For The Related Concepts Of **Samsara**

Q. As Per Jain Traditions _____ Was The First Tirthankara

- A. Parsvanatha
- B. Mahavira
- C. Rishabnatha
- D. Neminatha

Q. As Per Jain Traditions _____ Was The First Tirthankara

A. Parsvanatha

B. Mahavira

C. Rishabhatha

D. Neminatha

- | | |
|---|---|
| 1. Bhagwan Rishabhdevji - Bull | 13. Bhagwan Vimalnathji - Boar |
| 2. Bhagwan Ajitnathji - Elephant | 14. Bhagwan Anantnathji - Falcon |
| 3. Bhagwan Sambhavnathji - Horse | 15. Bhagwan Dharmnathji - Vajra |
| 4. Bhagwan Abhinandanji - Monkey | 16. Bhagwan Shantinathji - Deer |
| 5. Bhagwan Sumatinathji - Kraunch-bird | 17. Bhagwan Kunthunathji - Goat |
| 6. Bhagwan Padmaprabhuji - Lotus | 18. Bhagwan Arhanathji - Nandavart |
| 7. Bhagwan Suparshvanathji - Swastika | 19. Bhagwan Mallinathji - Urn |
| 8. Bhagwan Chandraprabhji - The Moon | 20. Bhagwan Munisuvrat Swamiji - Turtle |
| 9. Bhagwan Suvidhinathji - Crocodile | 21. Bhagwan Neminathji - Blue Lotus |
| 10. Bhagwan Sheetalnathji - Shrivatsa | 22. Bhagwan Arishtanemiji - Conch Shell |
| 11. Bhagwan Shreyansnathji - Rhinoceros | 23. Bhagwan Prashvanathji - Snake |
| 12. Bhagwan Vasupujyaii - Buffalo | 24. Bhagwan Mahaveer Swamiji - Lion |

Q. First Battle Of Tarain Or Thaneswar Took Place In_____

A. 1175 AD

B. 1181 AD

C. 1189 AD

D. 1191 AD

Q. First Battle Of Tarain Or Thaneswar Took Place In _____

A. 1175 AD

B. 1181 AD

C. 1189 AD

D. 1191 AD




In 1191 Muhammad Attacked And Captured Bhatinda, A Part Of The Prithviraj Dominion. This Led Muhammad To Come Into A Direct Clash With Prithviraj Chauhan One Of The Most Powerful Rajput Rulers.

Q. He Was Also Known As Lakh Bash (Giver Of Lakhs) For His Generosity.

- A. Feroz Shah Tughlaq
- B. Giasuddin Balban
- C. Qutubuddin Aibak
- D. Alauddin Khalji

Q. He Was Also Known As Lakh Bash (Giver Of Lakhs) For His Generosity.

- A. Feroz Shah Tughlaq
- B. Giyasuddin Balban
- C. Qutubuddin Aibak**
- D. Alauddin Khalji



_____ Created A Pact Of Forty Muslim Nobles As “Chahalgani” Or “Chalisa”.

A. Muhammed Bin Tughlaq

B. Giyasuddin Balban

C. Iltutmish

D. Alauddin Khalji

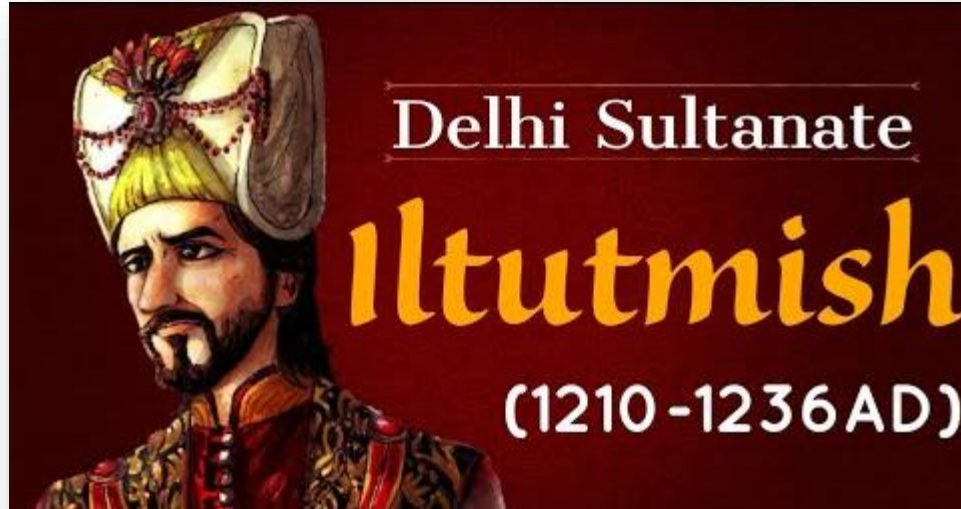
_____ Created A Pact Of Forty Muslim Nobles As “Chahalgani” Or “Chalisa”.

A. Muhammed Bin Tughlaq

B. Giyasuddin Balban

C. Iltutmish

D. Alauddin Khalji



Q. Which One Of The Following Pairs Is Correctly Matched?

Bhakti Saint	Philosophy
---------------------	-------------------

- A. Shankara : Avadhuta
- B. Ramananda : Kevala Advaita
- C. Ramanuja : Vishishtadvaita
- D. Chaitanya : Advaita

Q. Which One Of The Following Pairs Is Correctly Matched?

- | | Bhakti Saint | Philosophy |
|-----------|---------------------|--------------------------|
| A. | Shankara | : Avadhuta |
| B. | Ramananda | : Kevala Advaita |
| C. | Ramanuja | : Vishishtadvaita |
| D. | Chaitanya | : Advaita |

Dvaita (dual)
by Madhavacharya
-Consciousness (*self*)
-Body/the world
-*Brahman*
are entirely different entities

Vishishtadvaita (Characteristic non-dual)
by Ramanujacharya
-Consciousness (*self*)
-Body/the world
are two forms of the *Brahman*

Advaita (Non-dual)
by Adi Shankaracharya
-Consciousness (*self*),
-Body/the world
-*Brahman*
are one and the same
*Unity in all realities

Q. Which Planet Is Known As The "Ice Giant"?

A. Venus

B. Neptune

C. Saturn

D. Jupiter

Q. Which Planet Is Known As The "Ice Giant"?

A. Venus

B. Neptune

C. Saturn

D. Jupiter

Q. Which Planet Has The Great Red Spot?

- A. Jupiter
- B. Saturn
- C. Uranus
- D. Neptune

Q. Which Planet Has The Great Red Spot?

A. Jupiter

B. Saturn

C. Uranus

D. Neptune

Q. Which One Of The Following Statements Is Correct With Reference To Our Solar System?

- (A) The Earth Is The Densest Of All The Planets In Our Solar System.
- (B) The Predominant Element In The Composition Of Earth Is Silicon.
- (C) The Sun Contains 75 Percent Of The Mass Of The Solar System.
- (D) The Diameter Of The Sun Is 190 Times That Of The Earth.

Q. Which One Of The Following Statements Is Correct With Reference To Our Solar System?

(A) The Earth Is The Densest Of All The Planets In Our Solar System.

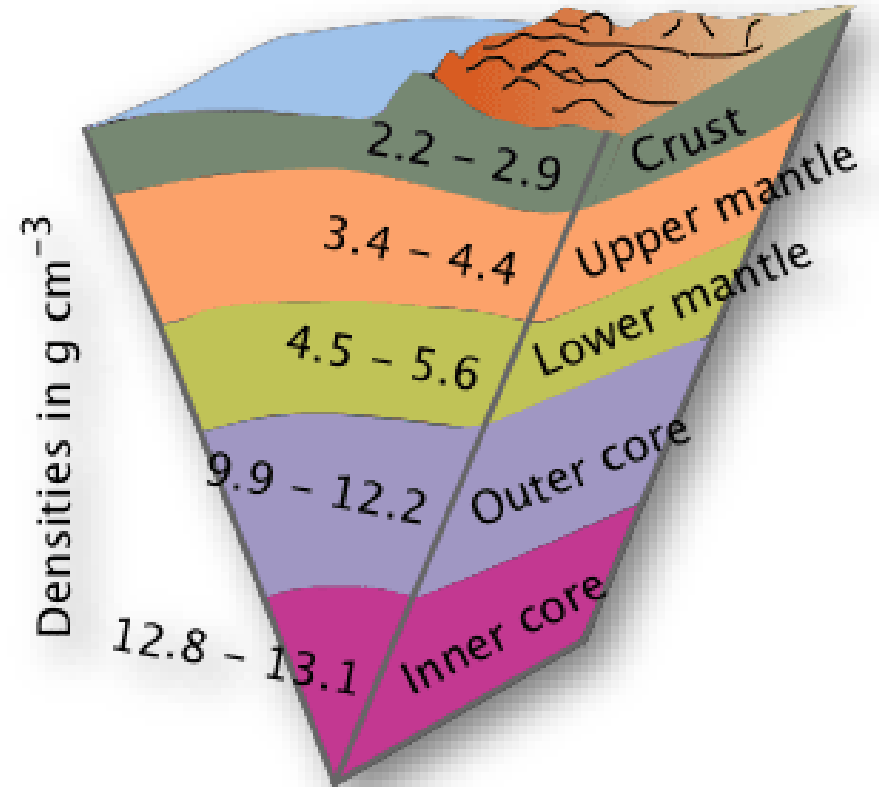
(B) The Predominant Element In The Composition Of Earth Is Silicon.

(C) The Sun Contains 75 Percent Of The Mass Of The Solar System.

(D) The Diameter Of The Sun Is 190 Times That Of The Earth.

Explanation:

- The **Earth** Is The **Densest Planet In The Solar System**.
- The Density Of Earth Is **5.513g/Cm³**.
- This Is An Average Of All The Material On The Planet.



Q. Consider the following statements about Light year :

1. Light year is a unit for measurement of very large distances.
2. Light year is a unit for measurement of very large time intervals.
3. Light year is a unit for measurement of intensity of light.

Which of the statements given above is/are correct ?

- (a) 1, 2 and 3
- (b) 2 and 3 only
- (c) 1 and 2 only
- (d) 1 only

Q. Consider the following statements about Light year :

1. Light year is a unit for measurement of very large distances.
2. Light year is a unit for measurement of very large time intervals.
3. Light year is a unit for measurement of intensity of light.

Which of the statements given above is/are correct ?

- (a) 1, 2 and 3
- (b) 2 and 3 only
- (c) 1 and 2 only
- (d) 1 only

Answer: D

Q. Which one of the following planets has the highest density ?

- (a) Mercury
- (b) Venus
- (c) Jupiter
- (d) Earth

Q. Which one of the following planets has the highest density ?

- (a) Mercury
- (b) Venus
- (c) Jupiter
- (d) Earth

Answer: D

Q. The Asteroid Belt Is Found Between Which Of The Following?

(A) Earth And Mars

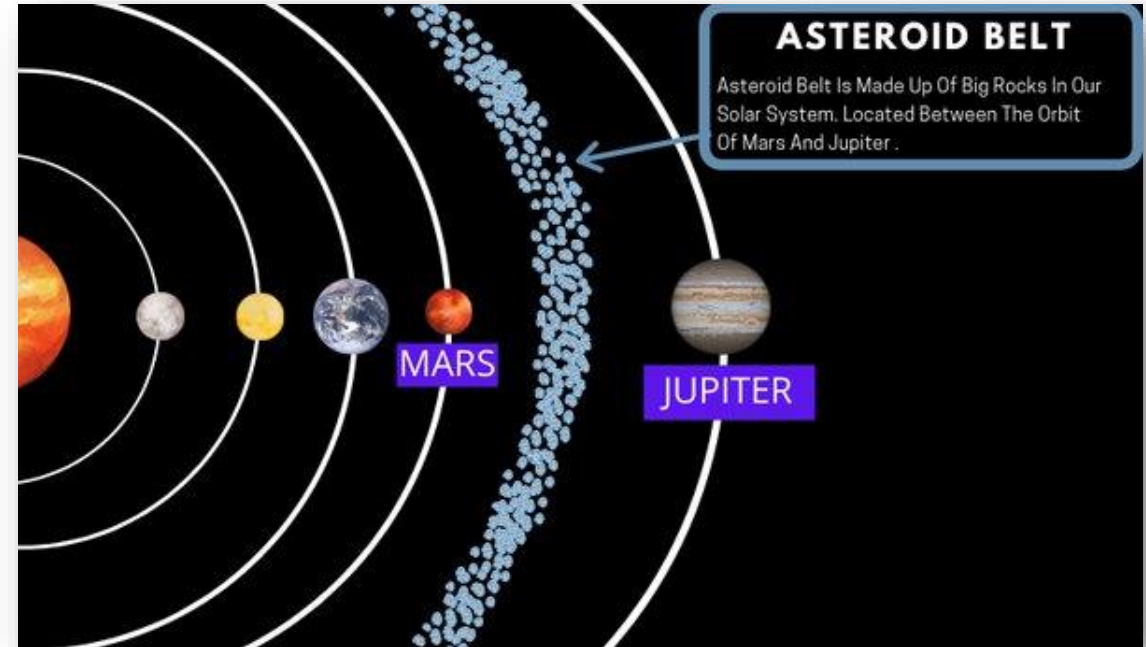
(B) Jupiter And Saturn

(C) Mars And Jupiter

(D) Saturn And Uranus

Q. The Asteroid Belt Is Found Between Which Of The Following?

- (A) Earth And Mars
- (B) Jupiter And Saturn
- (C) Mars And Jupiter**
- (D) Saturn And Uranus



Q. The Planet Which Is Called Twin Sister Of The Earth Is

(A) Mercury

(B) Venus

(C) Mars

(D) Uranus

Q. The Planet Which Is Called Twin Sister Of The Earth Is

(A) Mercury

(B) Venus

(C) Mars

(D) Uranus

Q. Which Of The Following Is/Are Not Depicted In The Rajput Paintings?

1) The Stories Of Krishna

2) Ragas And Raginis

3) The Deeds Of Hamza

4) The Deeds Of Babur

A. 1, 2 And 3

B. 2, 3 And 4

C. 3 And 4 Only

D. 4 Only

Q. Which Of The Following Is/Are Not Depicted In The Rajput Paintings?

- 1) The Stories Of Krishna
- 2) Ragas And Raginis
- 3) The Deeds Of Hamza
- 4) The Deeds Of Babur



A. 1, 2 And 3

B. 2, 3 And 4

C. 3 And 4 Only

D. 4 Only

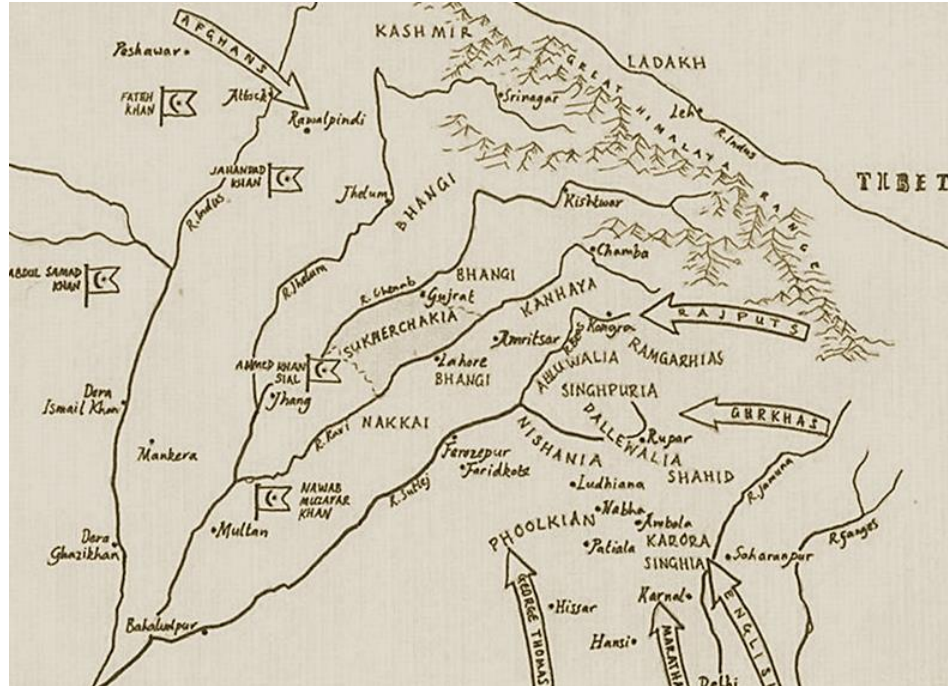
The Hamza Nama Narrates The Legendary Exploits Of Amir Hamza, An Uncle Of The Prophet Muhammad. Babur Was Considered A Foreigner By The Rajputs And Thus Was Despised.

Q. What Were The 12 States Of The Sikh Confederacy Called?

- A. Misl
- B. Gurmata
- C. Sardari
- D. Rakni

Q. What Were The 12 States Of The Sikh Confederacy Called?

- A. Misl
- B. Gurmata
- C. Sardari
- D. Rakni



The Misl Is A Sikh Institution That Has Been Prominent In Sikh History, Since The Eighteenth Century. It Refers To The Sovereign States Of The Sikh Confederacy.

Q. Which Of The Following Statements About The Vijayanagara Empire Is/Are True?

- 1) The Kings Claimed To Rule On Behalf Of The God Virupaksha.
- 2) Rulers Used The Title 'Hindu Suratrana' To Indicate Their Close Links With Gods.
- 3) All Royal Orders Were Signed In Kannada, Sanskrit, And Tamil.
- 4) Royal Portrait Sculpture Was Now Displayed In Temples.

- A. 4 Only
- B. 1 & 2
- C. 1, 2 & 3
- D. 1, 2 & 4

Q. Which Of The Following Statements About The Vijayanagara Empire Is/Are True?

- 1) The Kings Claimed To Rule On Behalf Of The God Virupaksha.
- 2) Rulers Used The Title 'Hindu Suratrana' To Indicate Their Close Links With Gods.
- 3) All Royal Orders Were Signed In Kannada, Sanskrit, And Tamil.
- 4) Royal Portrait Sculpture Was Now Displayed In Temples.

A. 4 Only

The Administrative And Court Languages Of The

B. 1 & 2

Empire Were **Kannada** And **Telugu**. All Royal

C. 1, 2 & 3

Orders Were Signed “Shri Virupaksha”, Usually In

The Kannada Script.

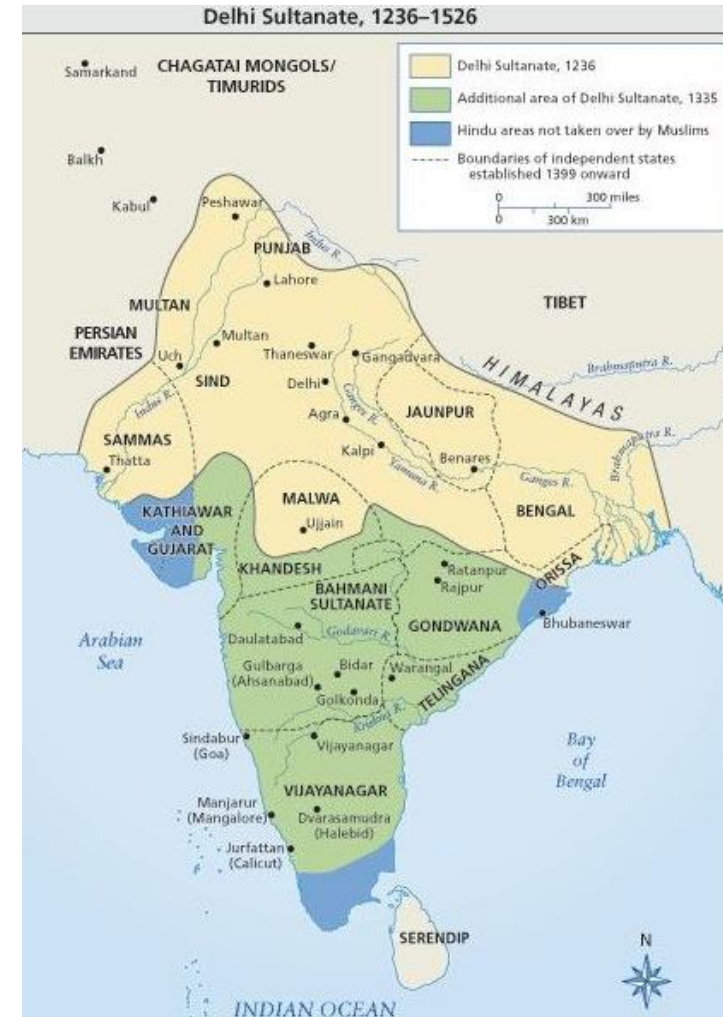
D. 1, 2 & 4

Q. Iqta In Medieval India Meant _____.

- A. Land Assigned To Religious Personnel For Spiritual Purposes
- B. Land Revenue From Different Territorial Unites Assigned To Army Officers
- C. Charity For Educational And Cultural Activities
- D. The Rights Of The Zamindar

Q. Iqta In Medieval India Meant _____.

- A. Land Assigned To Religious Personnel For Spiritual Purposes
- B. Land Revenue From Different Territorial Unites Assigned To Army Officers**
- C. Charity For Educational And Cultural Activities
- D. The Rights Of The Zamindar



Q. Which One Of The Following Books Was Not Illustrated With Paintings In Akbar's Court?

- A. Hamzanama
- B. Razmnama
- C. Baburnama
- D. Tarikh-i- Aifi

Q. Which One Of The Following Books Was Not Illustrated With Paintings In Akbar's Court?

- A. Hamzanama
- B. Razmnama
- C. Baburnama**
- D. Tarikh-i- Aifi



Q. Which Kingdom Did The Temple Of Hazara Rama Belong To?

- A. Avadh
- B. Travancore
- C. Vijayanagara
- D. Ahom

Q. Which Kingdom Did The Temple Of Hazara Rama Belong To?

- A. Avadh
- B. Travancore
- C. **Vijayanagara**
- D. Ahom



Hazara Rama Temple Is One Of The Most Elegant Temples In Hampi.
Its Construction Was Started In The Year 1513 A.D Under The Orders Of
Krishnadevaraya.
The Temple Is Dedicated To Lord Rama, A Hindu Deity.

Q. Choose Correct From The Following Statements:

1. In Hind Swaraj, Mahatma Gandhi Formulates A Conception Of A Good Life For The Individual As Well As Society.

2. Hind Swaraj Was The Outcome Of The Experience Of Gandhi's Prolonged Struggle Against The Colonial Raj In India.

A. 1 Only

B. 2 Only

C. Both 1 And 2

D. Neither 1 Nor 2

Q. Choose Correct From The Following Statements:

1. In Hind Swaraj, Mahatma Gandhi Formulates A Conception Of A Good Life For The Individual As Well As Society.
2. Hind Swaraj Was The Outcome Of The Experience Of Gandhi's Prolonged Struggle Against The Colonial Raj In India.

A. 1 Only

B. 2 Only

C. Both 1 And 2

D. Neither 1 Nor 2

Hind Swaraj Was Written In **1909** While He Was Abroad. He Critiqued Modern Civilization And Extensively Discussed Indian Swaraj And The Methods To Achieve It.

Q. Subsidiary Alliance Was A System Devised By

- A. Lord Wellesley
- B. Lord Dalhousie
- C. Lord Canning
- D. Lord Rippon

Q. Subsidiary Alliance Was A System Devised By

- A. Lord Wellesley
- B. Lord Dalhousie
- C. Lord Canning
- D. Lord Rippon



THE SUBSIDIARY ALLIANCE

- Indian states were called the protected states & British , the **paramount power**
- British were to save Indian states from external **aggression in return of money / Part of territory to support subsidiary troops.**
- The native ruler had to **maintain a contingent of British troops** in his territory commanded by British officers.
- States had to **cut off their relations from any other foreign power (mainly French)**

The Subsidiary Alliance In India Was Planned By **Lord Wellesley**, The Governor-general Of India From 1798 To 1805.

Q. _____ Was The Author Of Neel Darpan, Published In 1860?

- A. Reverend James Long
- B. Michael Madhusudan Dutta
- C. Raja Ram Mohan Roy
- D. Dinabandhu Mitra

Q. _____ Was The Author Of Neel Darpan, Published In 1860?

- A. Reverend James Long
- B. Michael Madhusudan Dutta
- C. Raja Ram Mohan Roy
- D. Dinabandhu Mitra**



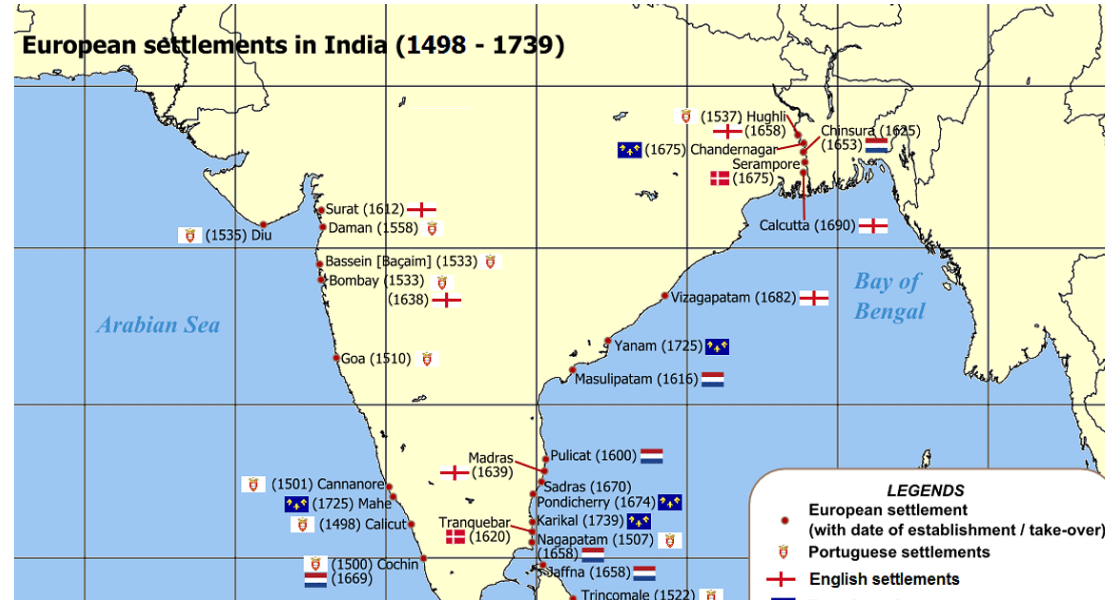
Nil Darpan Is A Bengali Play Written By **Dinabandhu Mitra In 1858-1859**. The Play Was Essential To **Nil Bidroh**, Better Known As The **Indigo Revolt** Of February-March 1859 In Bengal When Farmers Refused To Sow Indigo In Their Fields To Protest **Exploitative Farming** The British Rule.

Q. The French East India Company Established Its First Factory In India At

- A. Calicut
- B. Surat
- C. Pondicherry
- D. Masulipatnam

Q. The French East India Company Established Its First Factory In India At

- A. Calicut
- B. Surat**
- C. Pondicherry
- D. Masulipatnam



In **1668**, The First French Factory Was Established In **Surat**. In

February 1701, **Pondicherry** Was Made The Capital Of The


French Settlements In India.

**Q. The Place Of The English East India Company Settlement In Madras Was
Known As**

- A. Fort William
- B. Fort St. George
- C. Elphinstone Circle
- D. Marble Palace

Q. The Place Of The English East India Company Settlement In Madras Was Known As

- A. Fort William
- B. Fort St. George**
- C. Elphinstone Circle
- D. Marble Palace



Q. Which Among The Following Acts Were Repealed By Article 395 Of The Constitution Of India?

1. The Government Of India Act, 1935
 2. The Indian Independence Act, 1947
- A. 1 And 2 Only
- B. 1 Only
- C. 2 Only
- D. None

Q. Which Among The Following Acts Were Repealed By Article 395 Of The Constitution Of India?

1. The Government Of India Act, 1935
2. The Indian Independence Act, 1947

A. 1 And 2 Only

B. 1 Only

C. 2 Only

D. None



Q. Choose True Statements About The Deccan Riots of 1875:

1. It Resulted In Protection For Peasants Through The Deccan Agriculturalists Relief Act Of 1879
 2. The Riots Did Not Spread To The Whole Of Maharashtra Because Of Prompt Suppression By The British
 3. The British Contained The Riots From Spreading Throughout Maharashtra.
- A. Only 1
 - B. Only 2
 - C. Only 3
 - D. 1,2 & 3

Q. Choose True Statements About The Deccan Riots of 1875:

1. It Resulted In Protection For Peasants Through The Deccan Agriculturalists Relief Act Of 1879
2. The Riots Did Not Spread To The Whole Of Maharashtra Because Of Prompt Suppression By The British
3. The British Contained The Riots From Spreading Throughout Maharashtra.

- A. Only 1
- B. Only 2
- C. Only 3
- D. 1,2 & 3**



Q. Choose The Correct Statement About The Poona Pact Of 1932.

1. Reservation In Provincial Legislatures In Favor Of The Depressed Classes
 2. 18% Reservation For Depressed Classes In The Central Legislatures
 3. Education Grant For The Depressed Classes
 4. Double Voting For The Depressed Classes In Some Select Electorates
- A. Only 1 & 2
 - B. Only 1, 2 & 3
 - C. Only 2 & 3
 - D. 1, 2, 3 & 4

Q. Choose The Correct Statement About The Poona Pact Of 1932.


1. Reservation In Provincial Legislatures In Favor Of The Depressed Classes
2. 18% Reservation For Depressed Classes In The Central Legislatures
3. Education Grant For The Depressed Classes
4. Double Voting For The Depressed Classes In Some Select Electorates

A. Only 1 & 2

B. Only 1, 2 & 3

C. Only 2 & 3

D. 1, 2, 3 & 4



Q. Choose The Correct Statements About Government Of India Act, 1935:

1. It Recommended A Unitary Form Of Government
 2. It Led To The Establishment Of The Federal Court
 3. It Vested The Residuary Power In The Governor-general
- A. 1 & 2 Only
- B. 3 Only
- C. 2 & 3 Only
- D. 1, 2 & 3

Q. Choose The Correct Statements About Government Of India Act, 1935:

1. It Recommended A Unitary Form Of Government
2. It Led To The Establishment Of The Federal Court
3. It Vested The Residuary Power In The Governor-general

A. 1 & 2 Only

B. 3 Only

C. 2 & 3 Only

D. 1, 2 & 3

Features of Gol Act 1935

- A white paper was introduced & a JPC was also set up on Gol Act 1935 which provided for responsible government in provinces but with lot of discretionary powers.
- There were safeguards and special power to Governors in terms of minority rights, British commercial interest and civil servants.
- At the Centre, there was going to be a federal structure but would only come into effect if more than 50% of Princely states formally accepted to it by signing Instrument of Accession which would override their previous treaty with British Crown.
- Dyarchy was proposed at Centre with lot of safeguards with departments like foreign affairs, defence and internal security under control of British.
- There were 30mn electoral based on property qualification.
- Financial control was shifted from London to New Delhi. High level and middle group peasants were eligible to vote.

Q. Odd One Out

- A. Nav Jeevan - Mk Gandhi
- B. Mook Nayak - Br Ambedkar
- C. National Herald - Pandit Jawaharlal Nehru
- D. Commonweal - Dadabhai Naoroji

Q. Odd One Out

- A. Nav Jeevan - Mk Gandhi
- B. Mook Nayak - Br Ambedkar
- C. National Herald - Pandit Jawaharlal Nehru
- D. Commonweal - Dadabhai Naoroji**

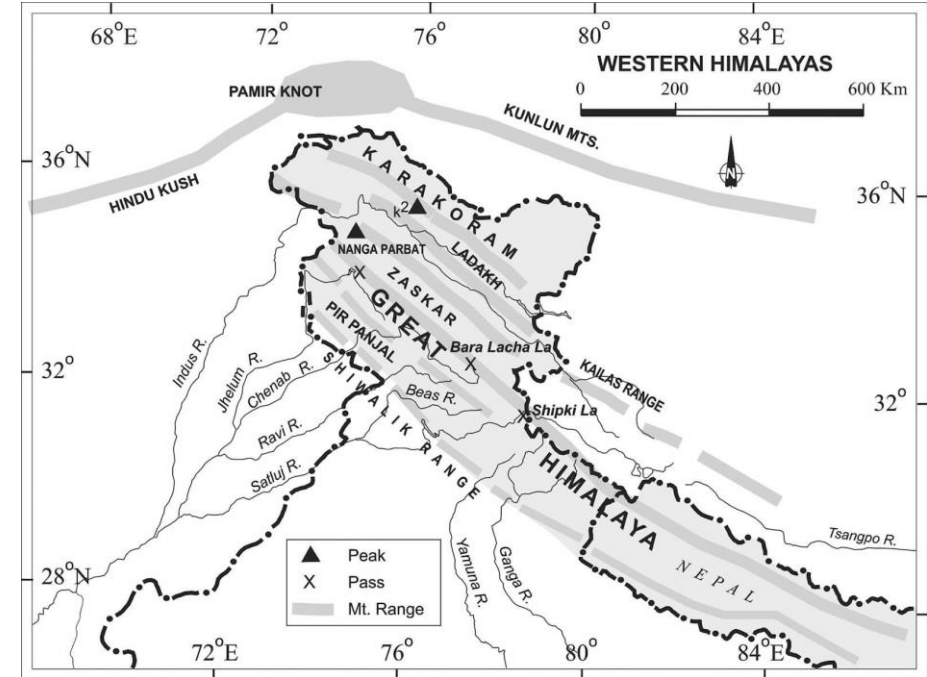


Q. Pir Panjal Range In The Himalayas Is A Part Of

- (A) Shiwalik
- (B) Trans Himalaya
- (C) Central Himalaya
- (D) Lesser Himalaya

Q. Pir Panjal Range In The Himalayas Is A Part Of

- (A) Shiwalik
- (B) Trans Himalaya
- (C) Central Himalaya
- (D) Lesser Himalaya**



Pir Panjal Range Is Concerned With **Lesser Himalayan Region**. It Includes **Himachal Pradesh, Jammu And Kashmir And Kashmir (POK)**.

Q. Match and select the correct answer using the code given below the Lists :

(City)

(Earthquake zone)

A. Kolkata

1. Zone V

B. Guwahati

2. Zone IV

C. Delhi

3. Zone III

D. Chennai

4. Zone II

Code :

A B C D

A B C D

A B C D

A B C D

(a) 3 2 1 4

(b) 3 1 2 4

(c) 4 1 2 3

(d) 4 2 1 3

Q. Match and select the correct answer using the code given below the Lists :

(City)	(Earthquake zone)
A. Kolkata	1. Zone V
B. Guwahati	2. Zone IV
C. Delhi	3. Zone III
D. Chennai	4. Zone II

Code :

A B C D

A B C D

A B C D

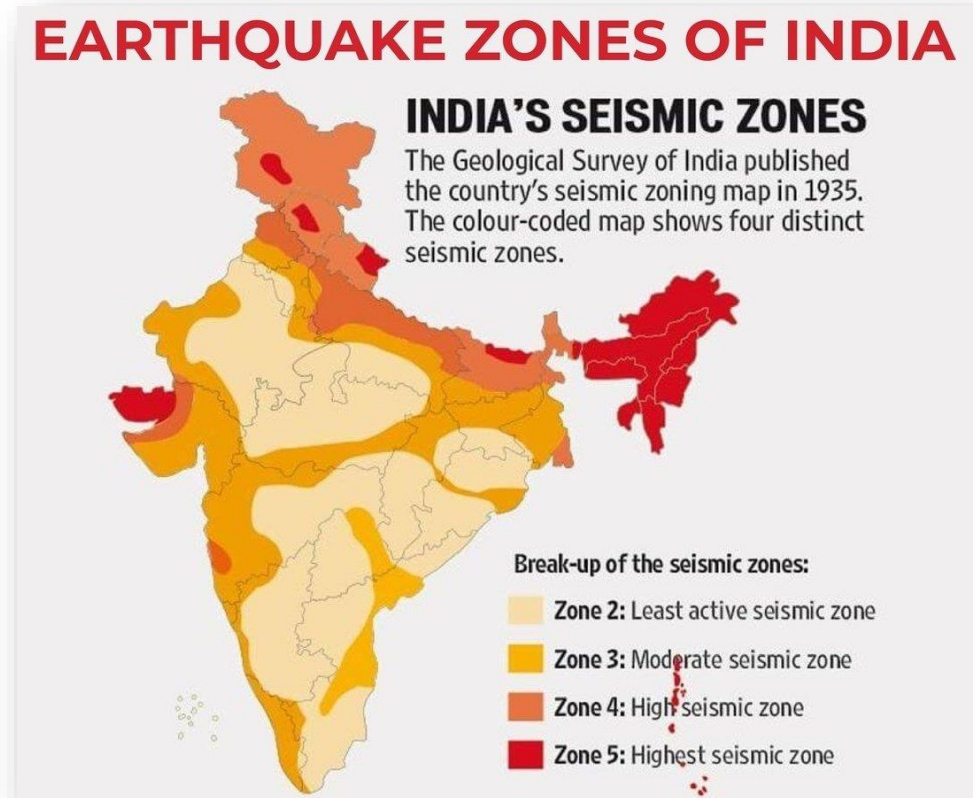
A B C D

(a) 3 2 1 4

(b) 3 1 2 4

(c) 4 1 2 3

(d) 4 2 1 3



Q. Which Of The Given Legislation Gives Constitutional Status To Three-tier Panchayati Raj System –

- A. 73rd Constitutional Amendment, 1993
- B. 72nd Constitutional Amendment, 1992
- C. 74th Constitutional Amendment, 1993
- D. 75th Constitutional Amendment, 1994

Q. Which Of The Given Legislation Gives Constitutional Status To Three-tier Panchayati Raj System –

- A. 73rd Constitutional Amendment, 1993
- B. 72nd Constitutional Amendment, 1992
- C. 74th Constitutional Amendment, 1993
- D. 75th Constitutional Amendment, 1994

73rd Constitutional Amendment, 1993. The Philosophy Of Panchayat Raj Is Deeply Steeped In Tradition & Culture Of Rural India & Is By No Means A New Concept.

Q. Under Which Among The Given Circumstances, The Governor Can Reserve A State Bill For The Consideration Of The President :

1. If It Is Ultra Vires (Beyond One's Legal Power Or Authority)
2. It Is Opposed To The Directive Principles Of State Policy.
3. If It Endangers The Position Of The State High Court.
4. If It Is Dealing With The Compulsory Acquisition Of Property Under Article 31 - A.

A. 1, 2, 3 & 4

B. 1, 2 & 3

C. 2, 3 & 4

D. 1, 3 & 4

Q. Under Which Among The Given Circumstances, The Governor Can Reserve A State Bill For The Consideration Of The President :

1. If It Is Ultra Vires (Beyond One's Legal Power Or Authority)
2. It Is Opposed To The Directive Principles Of State Policy.
3. If It Endangers The Position Of The State High Court.
4. If It Is Dealing With The Compulsory Acquisition Of Property Under Article 31 - A.

A. 1, 2, 3 & 4

B. 1, 2 & 3

C. 2, 3 & 4

D. 1, 3 & 4

Q. Name The State Where Density Of Population Is The Lowest

(A) Meghalaya

(B) Mizoram

(C) Arunachal Pradesh

(D) Sikkim

Q. Name The State Where Density Of Population Is The Lowest

(A) Meghalaya

(B) Mizoram

(C) Arunachal Pradesh

(D) Sikkim

Q. According To 2011 Census Urban Rural Population Ratio Was About—

(A) 35 : 65

(B) 32 : 68

(C) 28 : 72

(D) 31 : 69

Q. According To 2011 Census Urban Rural Population Ratio Was About—

(A) 35 : 65

(B) 32 : 68

(C) 28 : 72

(D) 31 : 69

Q. A Gradual Change In The Manner Of Population Growth Occurring Over A Long Period Of Time Is Known As

- (A) Demographic Transition
- (B) Population Explosion
- (C) Demographic Dynamism
- (D) Demographic Transformation

Q. A Gradual Change In The Manner Of Population Growth Occurring Over A Long Period Of Time Is Known As

(A) Demographic Transition

(B) Population Explosion

(C) Demographic Dynamism

(D) Demographic Transformation

Q. The Rapid Growth Phase Of Indian Population Was Lying Between Which Of The Following Time Periods?

(A) 1901 – 1921

(B) 1921 – 1951

(C) 1951 – 1981

(D) 1981 – 2001

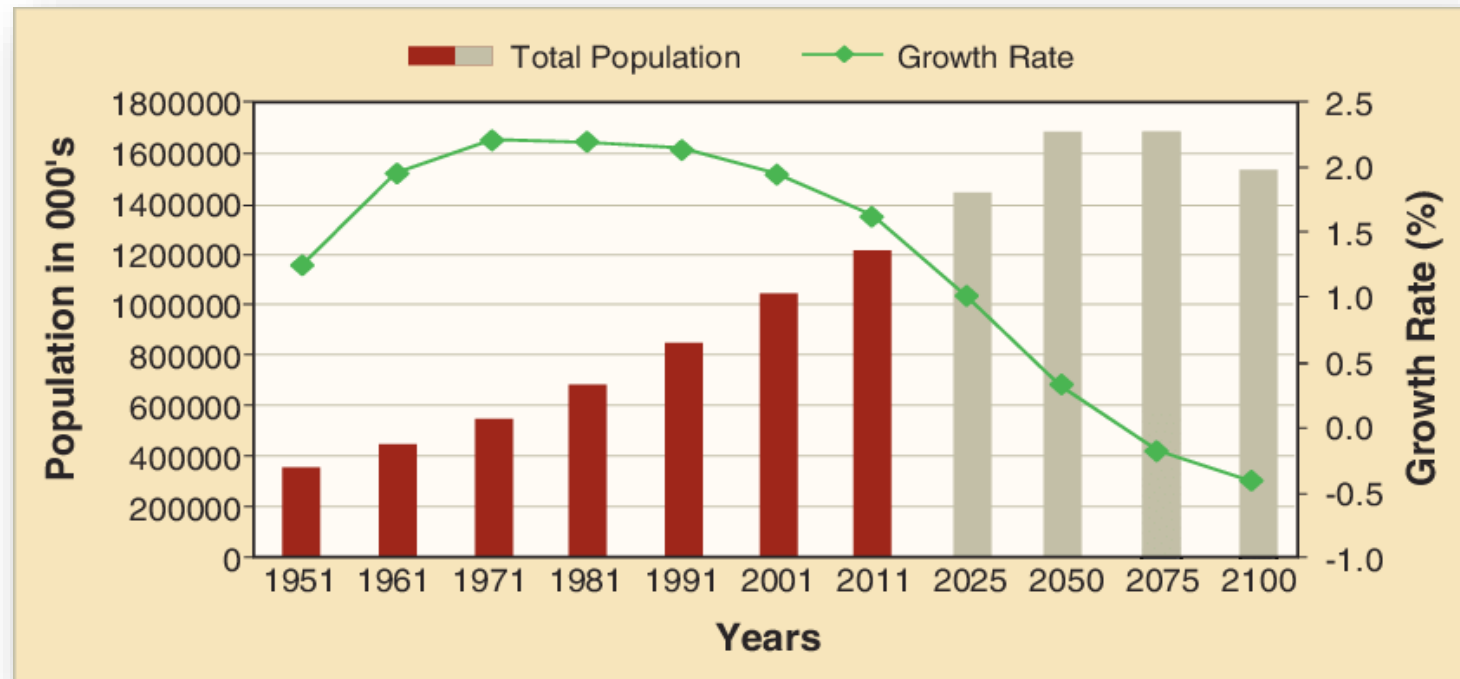
Q. The Rapid Growth Phase Of Indian Population Was Lying Between Which Of The Following Time Periods?

(A) 1901 – 1921

(B) 1921 – 1951

(C) 1951 – 1981

(D) 1981 – 2001



Q. The Shompens are the vulnerable tribal group of

(a) Jharkhand

(b) Odisha

(c) West Bengal

(d) Andaman and Nicobar Islands

Q. The Shompens are the vulnerable tribal group of

(a) Jharkhand

(b) Odisha

(c) West Bengal

(d) Andaman and Nicobar Islands

Answer: D

Q. Which one of the following is the correct ascending sequence of States with regard to percentage of urban population (2011)?

(a) Tamil Nadu—Mizoram—Goa—
Maharashtra

(b) Goa—Mizoram—Maharashtra—
Kerala

(c) Maharashtra—Kerala—Mizoram—
Goa

(d) Mizoram—Goa—Maharashtra—
Kerala

Q. Which one of the following is the correct ascending sequence of States with regard to percentage of urban population (2011)?

(a) Tamil Nadu—Mizoram—Goa—
Maharashtra

(b) Goa—Mizoram—Maharashtra—
Kerala

(c) Maharashtra—Kerala—Mizoram—
Goa

(d) Mizoram—Goa—Maharashtra—
Kerala

Answer: C

Q. How Does The Constitution Of India Describe India As :

- A. A Union Of States
- B. A Federation Of States & Union Areas
- C. Bharatvarsh
- D. A Federated Nation

Q. How Does The Constitution Of India Describe India As :

A. A Union Of States

B. A Federation Of States & Union Areas

C. Bharatvarsh

D. A Federated Nation

With Its Adoption, The Union Of India Officially Became The Modern & Contemporary Republic Of India & It Replaced The Government Of India Act 1935 As The Country's Fundamental Governing Document. Article 1-3, Schedule - 1

Q. Which Of The Following Article Empowers The President To Call For Joint Sitting Of Both Houses?

- A. Art 102
- B. Art 101
- C. Art 108
- D. Art 110

Q. Which Of The Following Article Empowers The President To Call For Joint Sitting Of Both Houses?

A. Art 102

B. Art 101

C. Art 108

D. Art 110

Article 108: If after a bill is passed by one House and transmitted to the other House:

- The other House rejects this bill, or
- The Houses do not agree on the amendments made to the bill, or
- More than six months elapse with the bill being received by the other House without it being passed.

**Q. Which Among The Given Exercised The Most Profound Influence
In Framing The Indian Constitution –**

- A. US Constitution
- B. British Constitution
- C. Irish Constitution
- D. The Government Of India Act, 1935

Q. Which Among The Given Exercised The Most Profound Influence In Framing The Indian Constitution –

- A. US Constitution
- B. British Constitution
- C. Irish Constitution

D. The Government Of India Act, 1935

Features Such As The Federal Scheme, Office Of Governor, Power Of Federal Judiciary, Emergency Powers, Rule Of Law, System Of Single Citizenship, Parliamentary Government Etc. Were Taken From **GOI Act 1935**.

Q. The 3-tier Of The Panchayati Raj System Consists Of

- A. Janapad Panchayat, Taluka Panchayat, Anchal Panchayat
- B. Gram Sabha, Anchal Panchayat, Panchayat Samiti
- C. Gram Panchayat, Block & Panchayat Samiti, Zilla Parishad
- D. Gram Sabha, Panchayat Samiti, Zilla Parishad

Q. The 3-tier Of The Panchayati Raj System Consists Of

- A. Janapad Panchayat, Taluka Panchayat, Anchal Panchayat
- B. Gram Sabha, Anchal Panchayat, Panchayat Samiti
- C. Gram Panchayat, Block & Panchayat Samiti, Zilla Parishad**
- D. Gram Sabha, Panchayat Samiti, Zilla Parishad

At the village level, it is called a Gram Panchayat. It is a local body working for the good of the village. The number of members varies. The block-level institution is called the Panchayat Samiti. The district-level institution is called the Zilla Parishad.

Q. From The Constitution Of Which Country, The Provision Of Federation Was Borrowed While Framing The Constitution Of India –

- A. UK
- B. USA
- C. Canada
- D. Switzerland

Q. From The Constitution Of Which Country, The Provision Of Federation Was Borrowed While Framing The Constitution Of India –

A. UK

B. USA

C. Canada

~~D. Switzerland~~ **D. Was From The Canadian Constitution That India Borrowed A Quasi-federal Form Of Government (A Federal System With A Strong Central Government) & The Idea Of Residual Powers.**

Q. Consider The Following Statements

The South-west Monsoon Originates In India Due To

1. Low Pressure In The Punjab Plain.
2. High Pressure In Areas South Of India.
3. Equatorial Low Being Filled Up By Descending Air Current.
4. The Himalayas.

Which Of The Statements Given Above Are Correct?

- (A) 1 And 4 (B) 1 And 2 (C) 1 And 3 (D) 2 And 4

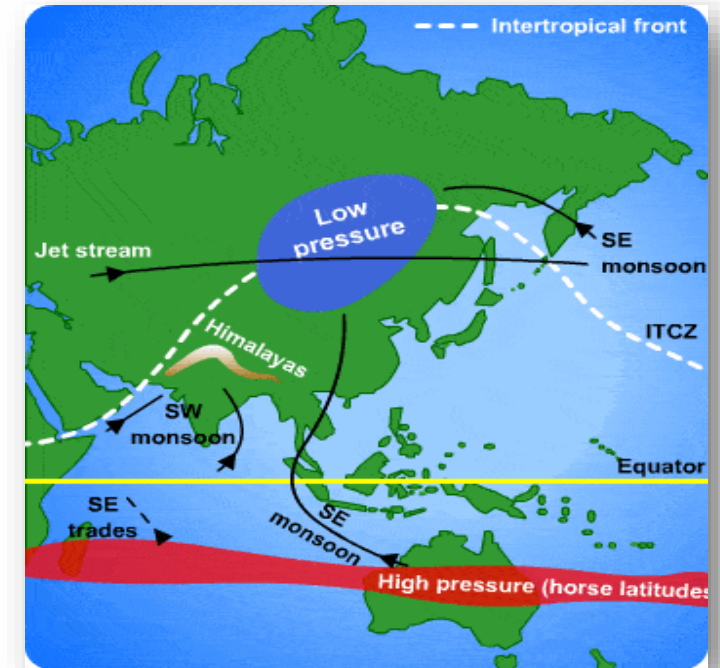
Q. Consider The Following Statements

The South-west Monsoon Originates In India Due To

1. Low Pressure In The Punjab Plain.
2. High Pressure In Areas South Of India.
3. Equatorial Low Being Filled Up By Descending Air Current.
4. The Himalayas.

Which Of The Statements Given Above Are Correct?

- (A) 1 And 4 (B) 1 And 2 (C) 1 And 3 (D) 2 And 4



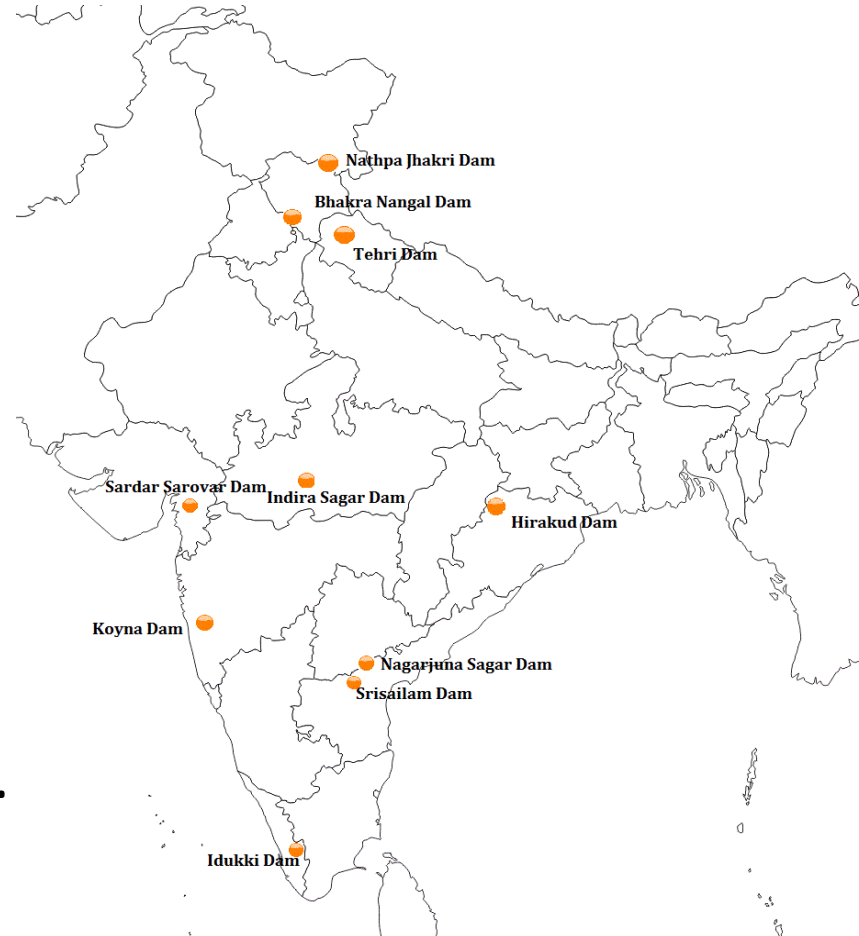
Q. The Reservoir GB Pant Sagar Is Located On Which River?

- (A) Betwa
- (B) Ghaghara
- (C) Kosi
- (D) Rihand

Q. The Reservoir GB Pant Sagar Is Located On Which River?

- (A) Betwa
- (B) Ghaghara
- (C) Kosi
- (D) Rihand**

Govind Ballabh Pant Sagar Is On The Rihand River Which Is The Tributary Of The Son River.



Q. Deltas Are Common In India For The East-flowing River Systems, Whereas They Are Nearly Absent On The West Coast, Because West-flowing Rivers

(A) Are Few

(B) Have Lesser Water Volume And Carry Less Run-off Silt

(C) Originate In Dry Areas

(D) Originate Largely In The Western Ghats And Have Short Distance To Cover To The Sea

Q. Consider The Following Statements Regarding Laterite Soils Of India

1. Laterite Soils Are Generally Red In Colour
2. Laterite Soils Are Rich In Nitrogen And Potash
3. Laterite Soils Are Well Developed In Rajasthan And UP
4. Tapioca And Cashew Nuts Grow Well In This Soil

Which Of The Statement Given Above Is Are Correct?

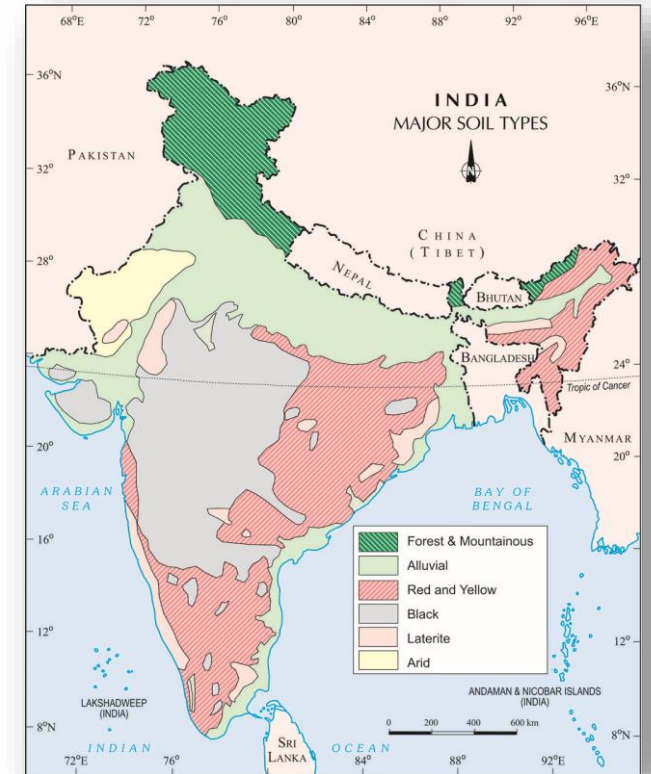
- (A) 1 Only (B) 2, 3 And 4 (C) 1 And 4 Only (D) 1, 2 And 4

Q. Consider The Following Statements Regarding Laterite Soils Of India

1. Laterite Soils Are Generally Red In Colour
2. Laterite Soils Are Rich In Nitrogen And Potash
3. Laterite Soils Are Well Developed In Rajasthan And UP
4. Tapioca And Cashew Nuts Grow Well In This Soil

Which Of The Statement Given Above Is Are Correct?

- (A) 1 Only (B) 2, 3 And 4 **(C) 1 And 4 Only** (D) 1, 2 And 4



Q. Match & Select The Correct Answer Using The Code Given Below The Lists :

(Farming Area)

(State)

A. Doab

1. Assam

B. Char

2. Karnataka

C. Maidan

3. Punjab

D. Terai

4. Uttar Pradesh

Codes :

A B C D

A B C D

A B C D

A B C D

(a) 3 2 1 4

(b) 3 1 2 4

(c) 4 1 2 3

(d) 4 2 1 3

Q. Match & Select The Correct Answer Using The Code Given Below The Lists :

(Farming Area)

(State)

A. Doab

1. Assam

B. Char

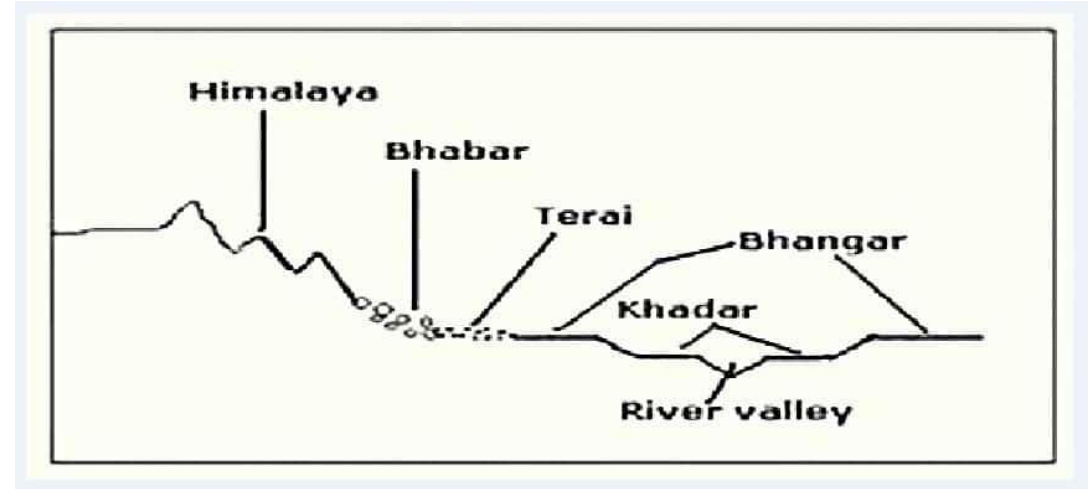
2. Karnataka

C. Maidan

3. Punjab

D. Terai

4. Uttar Pradesh



Codes :

A B C D

A B C D

A B C D

A B C D

(a) 3 2 1 4

(b) 3 1 2 4

(c) 4 1 2 3

(d) 4 2 1 3

[STORE](#) / [BUNDLE](#) / [NDA EXAM ONLINE ...](#)

NDA Exam Online Coaching 2024

NDA 1 2024: 🎓 Live Classes ▶ In-Depth Lectures 📖 Study Notes 🔥 Mock Tests 📰 Current Affairs ✂ Defence Current Affairs.

★★★★★ 5.0 (120)

Content 19

Search in bundle



FILTER BY TYPE ▾



NDA 1 2024 Live Batch - 2 (Enroll Now)

Course • 339 Lessons 1 Trial



NDA 1 2024 Live Batch - 1

Course • 479 Lessons 1 Trial



NDA Exam Overview

Course • 24 Lessons




NDA Exam Study Plan and Analysis

Course • 18 Lessons



NDA Previous Year Papers Solved



🕒 365 Days validity

₹ 5,999 ~~₹ 7,999~~ 25% OFF

BUY BUNDLE

START A FREE TRIAL

What's included

📁 19 Courses

Other Pricing Plans

Only for NDA 1 2024

180 Days Validity

[Details](#)

₹ 4,999 ~~₹ 5,999~~ 17% off

BUY NOW

[STORE](#) / [BUNDLE](#) / [SSB INTERVIEW ONLINE](#)

SSB Interview Online Coaching 2024

SSB Interview: 📺 Live Classes 🎥 In-Depth Lectures 📄 SSB Notes 🔥 Mock Tests 📅 Current Affairs 🇮🇳 Defence Current Affairs.

★★★★★ 5.0 (253)

Content 16

Search in bundle



FILTER BY TYPE ▾

**SSB Live Batch April 2024**Course • 969 Lessons 4 Trials**SSB Live Batch May 2024 - Enroll Now**Course • 1 Lessons 1 Trial**Basics of SSB Interview**

Course • 68 Lessons

**OIR Test - Verbal Reasoning - Part 1**

Course • 618 Lessons

**OIR Test - Verbal Reasoning - Part 2**

🕒 365 Days validity

₹ 6,999 ~~₹ 9,999~~ 30% OFF

BUY BUNDLE

START A FREE TRIAL

What's included

📁 16 Courses

Other Pricing Plans

Covers Only 1 SSB Interview.

30 Days Validity

🕒 [Details](#)₹ 4,999 ~~₹ 5,999~~ 17% off

BUY NOW

Courses We Offer

SSB INTERVIEW
For SSB, AFSB & NSB.

- 📺 Live Classes
- 📖 In-Depth Lectures
- 📄 SSB Notes
- 📝 Mock Tests
- 📰 Current Affairs
- ✕ Defence Current Affairs

USE CODE: **"WARRIOR10"**
FOR 10% OFF ON SSB COURSE

NDA 1 2024
For National Defence Academy

- 📺 Live Classes
- 📖 In-Depth Lectures
- 📄 Study Notes
- 📝 Mock Tests
- 📰 Current Affairs
- ✕ Defence Current Affairs

USE CODE: **"WARRIOR10"**
FOR 10% OFF ON NDA COURSE

CDS 1 2024
For IMA, AFA & INA

- 📺 Live Classes
- 📖 In-Depth Lectures
- 📄 Study Notes
- 📝 Mock Tests
- 📰 Current Affairs
- ✕ Defence Current Affairs

USE CODE: **"WARRIOR10"**
FOR 10% OFF ON CDS COURSE

CDS 1 2024
For OTA Chennai

- 📺 Live Classes
- 📖 In-Depth Lectures
- 📄 Study Notes
- 📝 Mock Tests
- 📰 Current Affairs
- ✕ Defence Current Affairs

USE CODE: **"WARRIOR10"**
FOR 10% OFF ON CDS COURSE

AFCAT 1 2024
Air Force Common Admission Test

- 📺 Live Classes
- 📖 In-Depth Lectures
- 📄 Study Notes
- 📝 Mock Tests
- 📰 Current Affairs
- ✕ Defence Current Affairs

USE CODE: **"WARRIOR10"**
FOR 10% OFF ON AFCAT COURSE

MNS 2024

LIVE CLASSES

JOIN NOW!

TERRITORIAL ARMY 2024

LIVE CLASSES

JOIN NOW!

ACC 2024

LIVE CLASSES

JOIN NOW!

Mock Tests We Offer

AFCAT EXAM TEST SERIES

★ ★ ★ 20+ MOCKS ★ ★ ★

2400 MINUTES

2400 QUESTIONS

NDA EXAM TEST SERIES

★ ★ ★ 20+ MOCKS ★ ★ ★

2400 MINUTES

2400 QUESTIONS

CDS EXAM TEST SERIES

★ ★ ★ 20+ MOCKS ★ ★ ★

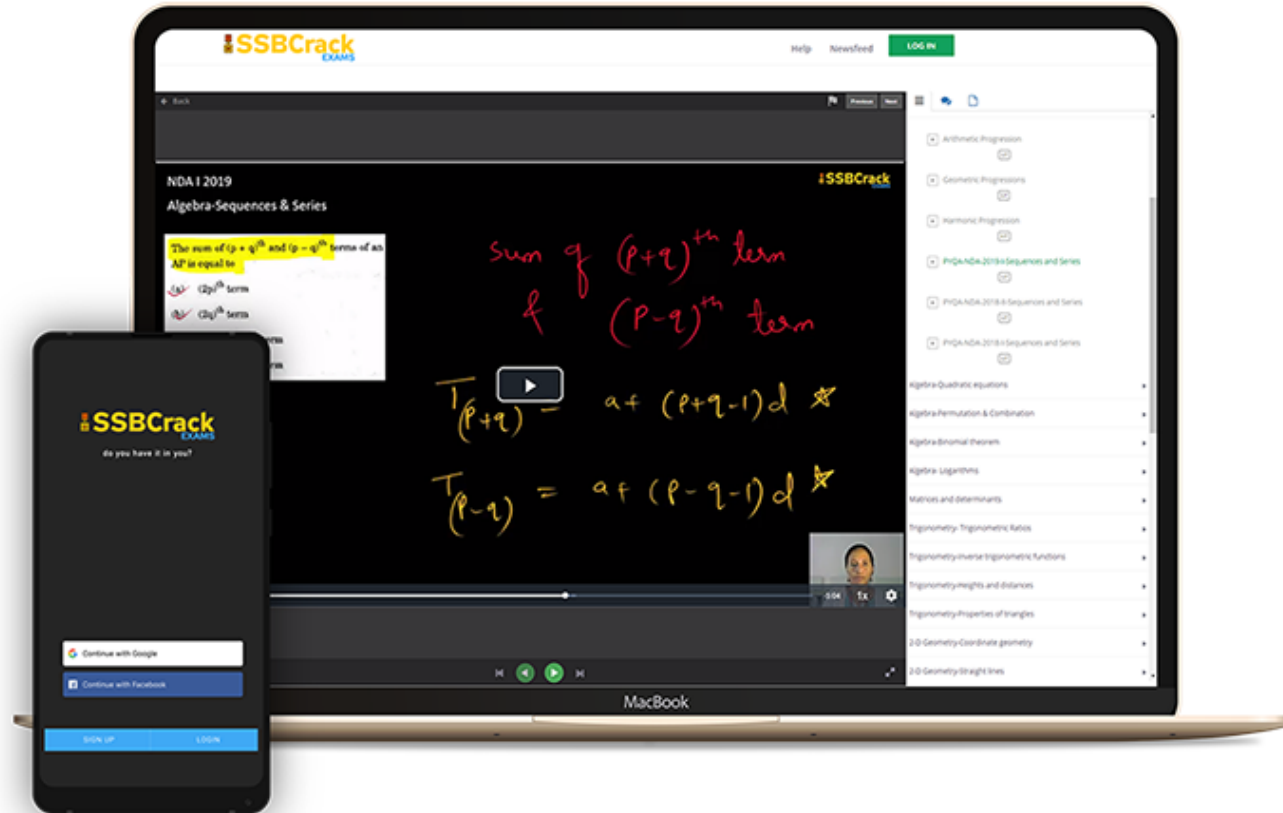
2400 MINUTES

2400 QUESTIONS

CDS EXAM OTA MOCK TEST SERIES

Talk to Defence Mentors

India's Most Popular Portal for Defence Exam Preparation



www.ssbcrackexams.com

CODE: WARRIOR10

get an extra **10%** off on all courses





NDA 2 2024

MAHA MARATHON #1

COMPLETE REVISION



28 AUG 2024
10AM TO 3PM



SSBCrack

LIVE CLASS



NDA 2 2024

MAHA MARATHON

28 - 31 AUG 2024

10AM TO 12PM

PHYSICS & MATHS - NAVJYOTI SIR

12PM TO 1PM

GS - SHIVANGI MA'AM

1PM TO 2PM

GK - RUBY MA'AM

2PM TO 3PM

ENGLISH - ANURADHA MA'AM

 **CALL US: 080-69185400**

 **GET IT ON
Google Play**

**DOWNLOAD
THE APP NOW**



NDA 2 2024 Marking Scheme

SECTION	NO. OF QUESTIONS	TOTAL MARKS	CORRECT ANSWER	WRONG ANSWER
Mathematics	120	300	2.5 Marks	0.83 Marks
GAT English	50	200	4 Marks	1.33 Marks
GAT GK	100	400	4 Marks	1.33 Marks
TOTAL	270	900		


Marking System in NDA 2 2024 GAT English Section

- 1 Question = 4 marks
- Negative marking = 1.33 marks for every incorrect answer
- Total no. of Questions = 50
- Total no. of Marks = 200 marks

SPOTTING ERRORS

Each item in this section has a sentence with three parts labelled as (a), (b) and (c). Read each sentence to find out whether there is any error in any underlined part and indicate your response on the Answer Sheet against the corresponding letter i.e., (a) or (b) or (c). If you find no error, your response should be indicated as (d).


Q) Everyone of us should realize that (a)/ any act of negligence will cause (b)/ a great harm to our country's security. (c)/ No error (d)



Q) Everyone of us should realize that (a)/ any act of negligence will cause (b)/ a great harm to our country's security. (c)/ No error (d)

Ans. (d)


Q) I am senior (a)/ than him (b)/ by two years. (c)/ No error (d)



Q) I am senior (a)/ than him (b)/ by two years. (c)/ No error (d)

Ans. (b)


Q) By the death of Rajeev Gandhi (a)/ a great statesman and politician (b)/ were lost. (c)/ No error (d)



Q) By the death of Rajeev Gandhi (a)/ a great statesman and politician (b)/ were lost. (c)/ No error (d)

Ans. (c)


Q) What is there (a)/ which is a secret (b)/ between you and me? (c)/ No error (d)



Q) What is there (a)/ which is a secret (b)/ between you and me? (c)/ No error (d)

Ans. (b)


Q) Milk is (a)/ the most perfect (b)/ food in the world. (c)/ No error (d)



Q) Milk is (a)/ the most perfect (b)/ food in the world. (c)/ No error (d)

Ans. (b)


Q) He will not escape (a)/ punishment unless (b)/ he does not speak the truth. (c)/
No error (d)



Q) He will not escape (a)/ punishment unless (b)/ he does not speak the truth. (c)/
No error (d)

Ans. (c)

Q) The crowd surged forward (a)/ to have a glimpse (b)/ of their favourite leader. (c)/
No error (d)




Q) The crowd surged forward (a)/ to have a glimpse (b)/ of their favourite leader. (c)/

No error (d)

Ans. (d)


Q) The speaker was (a)/ not only slow (b)/ but also inaudible as well. (c)/ No error
(d)



Q) The speaker was (a)/ not only slow (b)/ but also inaudible as well. (c)/ No error (d)

Ans. (c)


Q) The Prime Minister as well as his secretary were expected to (a)/ arrive in Chennai (b)/ on Saturday morning. (c)/ No error (d)



Q) The Prime Minister as well as his secretary were expected to (a)/ arrive in Chennai (b)/ on Saturday morning. (c)/ No error (d)

Ans. (a)

Q) She told (a)/ her mother that (b)/ she is busy. (c)/ No error (d)



Q) She told (a)/ her mother that (b)/ she is busy. (c)/ No error (d)


Ans. (c)

SYNONYMS

Each item in this section consists of sentences with an underlined word followed by four words or group of words. Select the option that is similar in meaning to the underlined word and mark your response on the Answer Sheet accordingly.

Q) The pact has been in effect for twenty years.

- (a) Treaty
- (b) Monarchy
- (c) Lease
- (d) Trend




Q) The pact has been in effect for twenty years.

- (a) Treaty
- (b) Monarchy
- (c) Lease
- (d) Trend

Ans. (a)

Q) The landscape changed abruptly after the snowfall.

- (a) Suddenly
- (b) Sharply
- (c) Favourably
- (d) Slightly




Q) The landscape changed abruptly after the snowfall.

- (a) Suddenly
- (b) Sharply
- (c) Favourably
- (d) Slightly

Ans. (a)

Q) Trees that block the view of oncoming traffic should be cut down.

- (a) Alter
- (b) Obstruct
- (c) Improve
- (d) Spoil



Q) Trees that block the view of oncoming traffic should be cut down.

- (a) Alter
- (b) Obstruct
- (c) Improve
- (d) Spoil

Ans. (b)


Q) A series of columns supporting a large porch is typical of medieval architecture.

(a) Statues

(b) Arches

(c) Pillars

(d) Murals



Q) A series of columns supporting a large porch is typical of medieval architecture.

(a) Statues

(b) Arches

(c) Pillars

(d) Murals

Ans. (c)


Q) Many of the villagers were isolated by heavy showers of rains.

(a) Destroyed

(b) Separated from others

(c) Battered

(d) Devasted



Q) Many of the villagers were isolated by heavy showers of rains.

(a) Destroyed

(b) Separated from others


(c) Battered

(d) Devasted

Ans. (b)

Q) A wise man puts past rancour behind and moves ahead.

- (a) Dislike
- (b) Hatred
- (c) Division
- (d) Criticism



Q) A wise man puts past rancour behind and moves ahead.

(a) Dislike

(b) Hatred


(c) Division

(d) Criticism

Ans. (b)

Q) The inspector was a vigilant young man.

- (a) smart
- (b) watchful
- (c) ambitious
- (d) intelligent



Q) The inspector was a vigilant young man.

- (a) smart
- (b) watchful
- (c) ambitious
- (d) intelligent

Ans. (b)


Q) He corroborated the statement of his brother.

(a) confirmed

(b) disproved

(c) condemned

(d) seconded



Q) He corroborated the statement of his brother.

(a) confirmed

(b) disproved


(c) condemned

(d) seconded

Ans. (a)

Q) Whatever the verdict of history may be, Chaplin will occupy a unique place in its pages.

- (a) judgment
- (b) voice
- (c) outcome
- (d) prediction




Q) Whatever the verdict of history may be, Chaplin will occupy a unique place in its pages.

- (a) judgment
- (b) voice
- (c) outcome
- (d) prediction

Ans. (a)

Q) The attitude of the Western countries towards the third world countries is rather callous to say the least.

- (a) passive
- (b) unkind
- (c) cursed
- (d) unfeeling



Q) The attitude of the Western countries towards the third world countries is rather callous to say the least.

- (a) passive
- (b) unkind
- (c) cursed
- (d) unfeeling


Ans. (b)

ANTONYMS

Each item in this section consists of sentences with an underlined word followed by four words or group of words. Select the option that is opposite in meaning to the underlined word and mark your response on the Answer Sheet accordingly.

Q) It is easy to understand his fuzzy thoughts.

- (a) Misty
- (b) Vague
- (c) Clear
- (d) Useful




Q) It is easy to understand his fuzzy thoughts.

- (a) Misty
- (b) Vague
- (c) Clear
- (d) Useful

Ans. (c)

Q) His family severed ties with him for marrying inter-caste.

- (a) Joined
- (b) Included
- (c) Detached
- (d) Disrupted



Q) His family severed ties with him for marrying inter-caste.

(a) Joined

(b) Included


(c) Detached

(d) Disrupted

Ans. (a)

Q) The guilty appealed to the jury to condone his punishment.

- (a) Accept
- (b) Forgive
- (c) Condemn
- (d) Criticize



Q) The guilty appealed to the jury to condone his punishment.

- (a) Accept
- (b) Forgive
- (c) Condemn
- (d) Criticize

Ans. (a)


Q) His candid remarks impressed the authorities

(a) Blunt

(b) Guarded

(c) Sincere

(d) Unconventional



Q) His candid remarks impressed the authorities

(a) Blunt

(b) Guarded


(c) Sincere

(d) Unconventional

Ans. (b)

Q) The habit of squandering money should not be encouraged.

- (a) discarding
- (b) hoarding
- (c) donating
- (d) stealing



Q) The habit of squandering money should not be encouraged.

(a) discarding

(b) hoarding

(c) donating

(d) stealing

Ans. (b)


Q) Like poverty, affluence can sometimes create its own problems.

(a) indigence

(b) opulence

(c) sorrow

(d) exuberance



Q) Like poverty, affluence can sometimes create its own problems.

(a) indigence

(b) opulence


(c) sorrow

(d) exuberance

Ans. (a)

Q) Adversity teaches man to be humble and self-reliant.

- (a) Sincerity
- (b) Animosity
- (c) Curiosity
- (d) Prosperity




Q) Adversity teaches man to be humble and self-reliant.

- (a) Sincerity
- (b) Animosity
- (c) Curiosity
- (d) Prosperity

Ans. (d)

Q) There is not a trace of vanity in her behaviour.

- (a) humility
- (b) selflessness
- (c) modesty
- (d) dignity




Q) There is not a trace of vanity in her behaviour.

- (a) humility
- (b) selflessness
- (c) modesty
- (d) dignity

Ans. (a)

Q) He is showing signs of senility.

- (a) virility
- (b) laziness
- (c) maturity
- (d) exhaustion



Q) He is showing signs of senility.

(a) virility

(b) laziness


(c) maturity

(d) exhaustion

Ans. (a)

Q) Throughout the evening, Rahul looked very doleful.

- (a) aggressive
- (b) cheerful
- (c) tired
- (d) involved



Q) Throughout the evening, Rahul looked very doleful.

(a) aggressive

(b) cheerful

(c) tired

(d) involved

Ans. (b)

IDIOMS AND PHRASES

Given below are some idioms/ phrases followed by four alternative meanings to each. Choose the response (a), (b), (c) or (d) which is the most appropriate expression and mark your response in the Answer Sheet accordingly.


Q) Nail colours to the mast

(a) put up a colourful mast

(b) refused to climb down

(c) took over the ship

(d) decided to abandon the ship



Q) Nail colours to the mast

(a) put up a colourful mast

(b) refused to climb down

(c) took over the ship

(d) decided to abandon the ship

Ans. (b)


Q) Batten down the hatches

(a) stay in-door

(b) prepare for a difficult situation

(c) go somewhere safe

(d) face the obstacles



Q) Batten down the hatches

(a) stay in-door

(b) prepare for a difficult situation

(c) go somewhere safe

(d) face the obstacles

Ans. (b)


Q) To fly off at a tangent

(a) gets carried away

(b) starts discussing something irrelevant

(c) loses her temper easily

(d) does not really understand anything



Q) To fly off at a tangent

(a) gets carried away

(b) starts discussing something irrelevant

(c) loses her temper easily

(d) does not really understand anything

Ans. (b)


Q) A bolt from the blue

(a) something unexpected

(b) something unpleasant

(c) something horrible

(d) (a) and (b)



Q) A bolt from the blue

(a) something unexpected

(b) something unpleasant

(c) something horrible

(d) (a) and (b)

Ans. (d)


Q) By leaps and bounds

(a) rapidly

(b) slowly

(c) peacefully

(d) strongly



Q) By leaps and bounds

(a) rapidly

(b) slowly


(c) peacefully

(d) strongly

Ans. (a)

Q) To emerge out of thin air

- (a) appear suddenly
- (b) descend gradually
- (c) fall down quickly
- (d) enter from space



Q) To emerge out of thin air

- (a) appear suddenly
- (b) descend gradually
- (c) fall down quickly
- (d) enter from space

Ans. (a)


Q) Take after

(a) follow

(b) imitate

(c) obey

(d) resemble



Q) Take after

(a) follow

(b) imitate

(c) obey

(d) resemble

Ans. (d)


Q) To give someone a piece of mind

(a) to be nice to someone

(b) to take a revenge on someone

(c) to reprimand someone

(d) to support someone



Q) To give someone a piece of mind

(a) to be nice to someone

(b) to take a revenge on someone

(c) to reprimand someone

(d) to support someone

Ans. (c)


Q) To keep the ball rolling

(a) to continue the work

(b) more information

(c) to do better

(d) new strategies



Q) To keep the ball rolling

(a) to continue the work

(b) more information


(c) to do better

(d) new strategies

Ans. (a)

Q) Take to one's heels

- (a) To measure up to one's standard
- (b) To shake in one's shoes
- (c) To run away
- (d) To run slowly



Q) Take to one's heels

- (a) To measure up to one's standard
- (b) To shake in one's shoes
- (c) To run away
- (d) To run slowly

Ans. (c)

CLOZE COMPREHENSION

In the following passages, at certain points you are given a choice of four words marked (a), (b), (c) and (d) one of which fits the meaning of the passages. Choose the best word out of the four. Mark the letter, viz., (a), (b), (c) or (d), relating to this word on your Answer sheet.

After his able Prime Minister's death, the king wanted one of the Prime Minister's three sons to take his place. The king wanted to choose the(1).....among them for the job. He(2).....the three sons to be brought(3).....him and set each of them the(4).....of filling a room using whatever(5).....they could so that there was.....(6).....space left even for ant. The(7).....sons set to work. The eldest(8).....filling his room with garbage which(9).....easy to acquire. The second son was(10).....and filled the room with cotton but the youngest remained silent and thought for a while. At the appointed time the king visited each room. The first two rooms were full but there was space for more to fit. When the king entered the third room, the last son lit a candle so the room was full of light. The king was pleased and appointed him as a Prime Minister.

Q1) (a) wisest (b) one (c) learned (d) favourite

0:20

After his able Prime Minister's death, the king wanted one of the Prime Minister's three sons to take his place. The king wanted to choose the(1).....among them for the job. He(2).....the three sons to be brought(3).....him and set each of them the(4).....of filling a room using whatever(5).....they could so that there was.....(6).....space left even for ant. The(7).....sons set to work. The eldest(8).....filling his room with garbage which(9).....easy to acquire. The second son was(10).....and filled the room with cotton but the youngest remained silent and thought for a while. At the appointed time the king visited each room. The first two rooms were full but there was space for more to fit. When the king entered the third room, the last son lit a candle so the room was full of light. The king was pleased and appointed him as a Prime Minister.

Q1) (a) wisest (b) one (c) learned (d) favourite

Ans. (a)

After his able Prime Minister's death, the king wanted one of the Prime Minister's three sons to take his place. The king wanted to choose the(1).....among them for the job. He(2).....the three sons to be brought(3).....him and set each of them the(4).....of filling a room using whatever(5).....they could so that there was.....(6).....space left even for ant. The(7).....sons set to work. The eldest(8).....filling his room with garbage which(9).....easy to acquire. The second son was(10).....and filled the room with cotton but the youngest remained silent and thought for a while. At the appointed time the king visited each room. The first two rooms were full but there was space for more to fit. When the king entered the third room, the last son lit a candle so the room was full of light. The king was pleased and appointed him as a Prime Minister.

Q2) (a) notifies (b) ordered (c) called (d) summoned

0:20

After his able Prime Minister's death, the king wanted one of the Prime Minister's three sons to take his place. The king wanted to choose the(1).....among them for the job. He(2).....the three sons to be brought(3).....him and set each of them the(4).....of filling a room using whatever(5).....they could so that there was.....(6).....space left even for ant. The(7).....sons set to work. The eldest(8).....filling his room with garbage which(9).....easy to acquire. The second son was(10).....and filled the room with cotton but the youngest remained silent and thought for a while. At the appointed time the king visited each room. The first two rooms were full but there was space for more to fit. When the king entered the third room, the last son lit a candle so the room was full of light. The king was pleased and appointed him as a Prime Minister.

Q2) (a) notifies (b) ordered (c) called (d) summoned

Ans. (b)

After his able Prime Minister's death, the king wanted one of the Prime Minister's three sons to take his place. The king wanted to choose the(1).....among them for the job. He(2).....the three sons to be brought(3).....him and set each of them the(4).....of filling a room using whatever(5).....they could so that there was.....(6).....space left even for ant. The(7).....sons set to work. The eldest(8).....filling his room with garbage which(9).....easy to acquire. The second son was(10).....and filled the room with cotton but the youngest remained silent and thought for a while. At the appointed time the king visited each room. The first two rooms were full but there was space for more to fit. When the king entered the third room, the last son lit a candle so the room was full of light. The king was pleased and appointed him as a Prime Minister.

Q3) (a) with (b) for (c) towards (d) before

0:20

After his able Prime Minister's death, the king wanted one of the Prime Minister's three sons to take his place. The king wanted to choose the(1).....among them for the job. He(2).....the three sons to be brought(3).....him and set each of them the(4).....of filling a room using whatever(5).....they could so that there was.....(6).....space left even for ant. The(7).....sons set to work. The eldest(8).....filling his room with garbage which(9).....easy to acquire. The second son was(10).....and filled the room with cotton but the youngest remained silent and thought for a while. At the appointed time the king visited each room. The first two rooms were full but there was space for more to fit. When the king entered the third room, the last son lit a candle so the room was full of light. The king was pleased and appointed him as a Prime Minister.

Q3) (a) with (b) for (c) towards (d) before

Ans. (d)

After his able Prime Minister's death, the king wanted one of the Prime Minister's three sons to take his place. The king wanted to choose the(1).....among them for the job. He(2).....the three sons to be brought(3).....him and set each of them the(4).....of filling a room using whatever(5).....they could so that there was.....(6).....space left even for ant. The(7).....sons set to work. The eldest(8).....filling his room with garbage which(9).....easy to acquire. The second son was(10).....and filled the room with cotton but the youngest remained silent and thought for a while. At the appointed time the king visited each room. The first two rooms were full but there was space for more to fit. When the king entered the third room, the last son lit a candle so the room was full of light. The king was pleased and appointed him as a Prime Minister.

Q4) (a) chance (b) option (c) task (d) request

0:20

After his able Prime Minister's death, the king wanted one of the Prime Minister's three sons to take his place. The king wanted to choose the(1).....among them for the job. He(2).....the three sons to be brought(3).....him and set each of them the(4).....of filling a room using whatever(5).....they could so that there was.....(6).....space left even for ant. The(7).....sons set to work. The eldest(8).....filling his room with garbage which(9).....easy to acquire. The second son was(10).....and filled the room with cotton but the youngest remained silent and thought for a while. At the appointed time the king visited each room. The first two rooms were full but there was space for more to fit. When the king entered the third room, the last son lit a candle so the room was full of light. The king was pleased and appointed him as a Prime Minister.

Q4) (a) chance (b) option (c) task (d) request

Ans. (c)

After his able Prime Minister's death, the king wanted one of the Prime Minister's three sons to take his place. The king wanted to choose the(1).....among them for the job. He(2).....the three sons to be brought(3).....him and set each of them the(4).....of filling a room using whatever(5).....they could so that there was.....(6).....space left even for ant. The(7).....sons set to work. The eldest(8).....filling his room with garbage which(9).....easy to acquire. The second son was(10).....and filled the room with cotton but the youngest remained silent and thought for a while. At the appointed time the king visited each room. The first two rooms were full but there was space for more to fit. When the king entered the third room, the last son lit a candle so the room was full of light. The king was pleased and appointed him as a Prime Minister.

Q5) (a) reason (b) wealth (c) purpose (d) means

0:20

After his able Prime Minister's death, the king wanted one of the Prime Minister's three sons to take his place. The king wanted to choose the(1).....among them for the job. He(2).....the three sons to be brought(3).....him and set each of them the(4).....of filling a room using whatever(5).....they could so that there was.....(6).....space left even for ant. The(7).....sons set to work. The eldest(8).....filling his room with garbage which(9).....easy to acquire. The second son was(10).....and filled the room with cotton but the youngest remained silent and thought for a while. At the appointed time the king visited each room. The first two rooms were full but there was space for more to fit. When the king entered the third room, the last son lit a candle so the room was full of light. The king was pleased and appointed him as a Prime Minister.

Q5) (a) reason (b) wealth (c) purpose (d) means

Ans. (d)

After his able Prime Minister's death, the king wanted one of the Prime Minister's three sons to take his place. The king wanted to choose the(1).....among them for the job. He(2).....the three sons to be brought(3).....him and set each of them the(4).....of filling a room using whatever(5).....they could so that there was.....(6).....space left even for ant. The(7).....sons set to work. The eldest(8).....filling his room with garbage which(9).....easy to acquire. The second son was(10).....and filled the room with cotton but the youngest remained silent and thought for a while. At the appointed time the king visited each room. The first two rooms were full but there was space for more to fit. When the king entered the third room, the last son lit a candle so the room was full of light. The king was pleased and appointed him as a Prime Minister.

Q6) (a) no (b) more (c) any (d) not

0:20

After his able Prime Minister's death, the king wanted one of the Prime Minister's three sons to take his place. The king wanted to choose the(1).....among them for the job. He(2).....the three sons to be brought(3).....him and set each of them the(4).....of filling a room using whatever(5).....they could so that there was.....(6).....space left even for ant. The(7).....sons set to work. The eldest(8).....filling his room with garbage which(9).....easy to acquire. The second son was(10).....and filled the room with cotton but the youngest remained silent and thought for a while. At the appointed time the king visited each room. The first two rooms were full but there was space for more to fit. When the king entered the third room, the last son lit a candle so the room was full of light. The king was pleased and appointed him as a Prime Minister.

Q6) (a) no (b) more (c) any (d) not

Ans. (a)

After his able Prime Minister's death, the king wanted one of the Prime Minister's three sons to take his place. The king wanted to choose the(1).....among them for the job. He(2).....the three sons to be brought(3).....him and set each of them the(4).....of filling a room using whatever(5).....they could so that there was.....(6).....space left even for ant. The(7).....sons set to work. The eldest(8).....filling his room with garbage which(9).....easy to acquire. The second son was(10).....and filled the room with cotton but the youngest remained silent and thought for a while. At the appointed time the king visited each room. The first two rooms were full but there was space for more to fit. When the king entered the third room, the last son lit a candle so the room was full of light. The king was pleased and appointed him as a Prime Minister.

Q7) (a) lazy (b) three (c) worthless (d) disappointed

0:20

After his able Prime Minister's death, the king wanted one of the Prime Minister's three sons to take his place. The king wanted to choose the(1).....among them for the job. He(2).....the three sons to be brought(3).....him and set each of them the(4).....of filling a room using whatever(5).....they could so that there was.....(6).....space left even for ant. The(7).....sons set to work. The eldest(8).....filling his room with garbage which(9).....easy to acquire. The second son was(10).....and filled the room with cotton but the youngest remained silent and thought for a while. At the appointed time the king visited each room. The first two rooms were full but there was space for more to fit. When the king entered the third room, the last son lit a candle so the room was full of light. The king was pleased and appointed him as a Prime Minister.

Q7) (a) lazy (b) three (c) worthless (d) disappointed

Ans. (b)

After his able Prime Minister's death, the king wanted one of the Prime Minister's three sons to take his place. The king wanted to choose the(1).....among them for the job. He(2).....the three sons to be brought(3).....him and set each of them the(4).....of filling a room using whatever(5).....they could so that there was.....(6).....space left even for ant. The(7).....sons set to work. The eldest(8).....filling his room with garbage which(9).....easy to acquire. The second son was(10).....and filled the room with cotton but the youngest remained silent and thought for a while. At the appointed time the king visited each room. The first two rooms were full but there was space for more to fit. When the king entered the third room, the last son lit a candle so the room was full of light. The king was pleased and appointed him as a Prime Minister.

Q8) (a) busily (b) start (c) son (d) began

0:20

After his able Prime Minister's death, the king wanted one of the Prime Minister's three sons to take his place. The king wanted to choose the(1).....among them for the job. He(2).....the three sons to be brought(3).....him and set each of them the(4).....of filling a room using whatever(5).....they could so that there was.....(6).....space left even for ant. The(7).....sons set to work. The eldest(8).....filling his room with garbage which(9).....easy to acquire. The second son was(10).....and filled the room with cotton but the youngest remained silent and thought for a while. At the appointed time the king visited each room. The first two rooms were full but there was space for more to fit. When the king entered the third room, the last son lit a candle so the room was full of light. The king was pleased and appointed him as a Prime Minister.

Q8) (a) busily (b) start (c) son (d) began

Ans. (d)

After his able Prime Minister's death, the king wanted one of the Prime Minister's three sons to take his place. The king wanted to choose the(1).....among them for the job. He(2).....the three sons to be brought(3).....him and set each of them the(4).....of filling a room using whatever(5).....they could so that there was.....(6).....space left even for ant. The(7).....sons set to work. The eldest(8).....filling his room with garbage which(9).....easy to acquire. The second son was(10).....and filled the room with cotton but the youngest remained silent and thought for a while. At the appointed time the king visited each room. The first two rooms were full but there was space for more to fit. When the king entered the third room, the last son lit a candle so the room was full of light. The king was pleased and appointed him as a Prime Minister.

Q9) (a) got (b) found (c) was (d) made

0:20

After his able Prime Minister's death, the king wanted one of the Prime Minister's three sons to take his place. The king wanted to choose the(1).....among them for the job. He(2).....the three sons to be brought(3).....him and set each of them the(4).....of filling a room using whatever(5).....they could so that there was.....(6).....space left even for ant. The(7).....sons set to work. The eldest(8).....filling his room with garbage which(9).....easy to acquire. The second son was(10).....and filled the room with cotton but the youngest remained silent and thought for a while. At the appointed time the king visited each room. The first two rooms were full but there was space for more to fit. When the king entered the third room, the last son lit a candle so the room was full of light. The king was pleased and appointed him as a Prime Minister.

Q9) (a) got (b) found (c) was (d) made

Ans. (c)

After his able Prime Minister's death, the king wanted one of the Prime Minister's three sons to take his place. The king wanted to choose the(1).....among them for the job. He(2).....the three sons to be brought(3).....him and set each of them the(4).....of filling a room using whatever(5).....they could so that there was.....(6).....space left even for ant. The(7).....sons set to work. The eldest(8).....filling his room with garbage which(9).....easy to acquire. The second son was(10).....and filled the room with cotton but the youngest remained silent and thought for a while. At the appointed time the king visited each room. The first two rooms were full but there was space for more to fit. When the king entered the third room, the last son lit a candle so the room was full of light. The king was pleased and appointed him as a Prime Minister.

Q10) (a) hasty (b) stunned (c) simpler (d) cleverer

0:20

After his able Prime Minister's death, the king wanted one of the Prime Minister's three sons to take his place. The king wanted to choose the(1).....among them for the job. He(2).....the three sons to be brought(3).....him and set each of them the(4).....of filling a room using whatever(5).....they could so that there was.....(6).....space left even for ant. The(7).....sons set to work. The eldest(8).....filling his room with garbage which(9).....easy to acquire. The second son was(10).....and filled the room with cotton but the youngest remained silent and thought for a while. At the appointed time the king visited each room. The first two rooms were full but there was space for more to fit. When the king entered the third room, the last son lit a candle so the room was full of light. The king was pleased and appointed him as a Prime Minister.

Q10) (a) hasty (b) stunned (c) simpler (d) cleverer

Ans. (d)


NDA Exam Online Coaching 2025

NDA 2025: 📺 Live Classes ▶ In-Depth Lectures 📄 Study Notes 🔥 Mock Tests 📅 Current Affairs ✂ Defence Current Affairs.

★★★★★ 5.0 (120)


Content 20

🔍
FILTER BY TYPE ▾




NDA 2 2024 Live Batch - 2

Course • 497 Lessons 1 Trial




NDA 1 2024 Live Batch - 2 (Enroll Now)

Course • 354 Lessons 1 Trial




NDA 1 2024 Live Batch - 1

Course • 479 Lessons 1 Trial



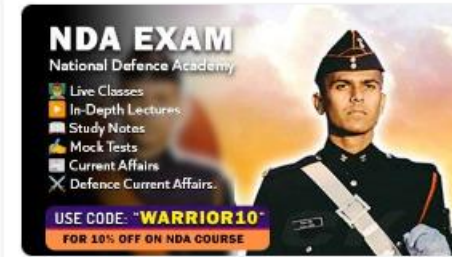
NDA Exam Overview

Course • 23 Lessons



NDA Exam Study Plan and Analysis

Course • 18 Lessons



🕒 365 Days validity

₹ 5,999 ~~₹ 7,999~~ 25% OFF

[BUY BUNDLE](#) [START A FREE TRIAL](#)

What's included

📁 20 Courses

Other Pricing Plans

Only for NDA 2 2024

[🔍 Details](#)

180 Days Validity

₹4,999 ~~₹5,999~~ 17% off

[BUY NOW](#)

SSB Interview Online Coaching 2024

SSB Interview: 📺 Live Classes 🎥 In-Depth Lectures 📄 SSB Notes 🗨️ Mock Tests 📅 Current Affairs 🗡️ Defence Current Affairs.

★★★★★ 5.0 (253)

Content 16

FILTER BY TYPE ▾

SSB Live Batch September 2024

Course • 955 Lessons 7 Trials

SSB Live Batch October 2024 - Enroll Now

Course • 1 Lessons 1 Trial

Basics of SSB Interview

Course • 68 Lessons

OIR Test - Verbal Reasoning - Part 1

Course • 618 Lessons

OIR Test - Verbal Reasoning - Part 2

Course • 401 Lessons



🕒 365 Days validity

₹ 6,999 ~~₹ 9,999~~ 30% OFF

[BUY BUNDLE](#) [START A FREE TRIAL](#)

What's included

📁 16 Courses

Other Pricing Plans

Covers Only 1 SSB Interview.

[Details](#)

30 Days Validity

₹ 4,999 ~~₹ 5,999~~ 17% off

[BUY NOW](#)

Bundles 12

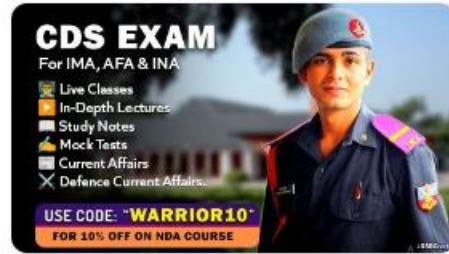
View All



SSB Interview Online Coaching 2024

16 Courses

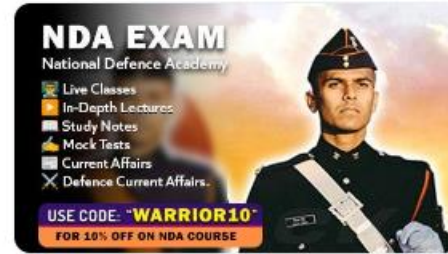
₹ 6,999 ~~₹ 9,999~~ 30% OFF



CDS Exam Online Coaching 2025

20 Courses

₹ 5,999 ~~₹ 7,999~~ 25% OFF



NDA Exam Online Coaching 2025

20 Courses

₹ 5,999 ~~₹ 7,999~~ 25% OFF



CDS Exam OTA Online Coaching 2025

19 Courses

₹ 5,499 ~~₹ 7,499~~ 27% OFF



AFCAT 2025

19 Courses

₹ 5,999

Test series 07

View All



NDA Mock Test Series 2024

40 Tests

₹ 499 ~~₹ 999~~ 50% OFF



AFCAT Mock Test Series 2024

20 Tests

₹ 499 ~~₹ 999~~ 50% OFF



CDS Exam Mock Test Series 2024

30 Tests

₹ 499 ~~₹ 999~~ 50% OFF



CDS Exam OTA Mock Test Series 2024

20 Tests

₹ 499 ~~₹ 999~~ 50% OFF

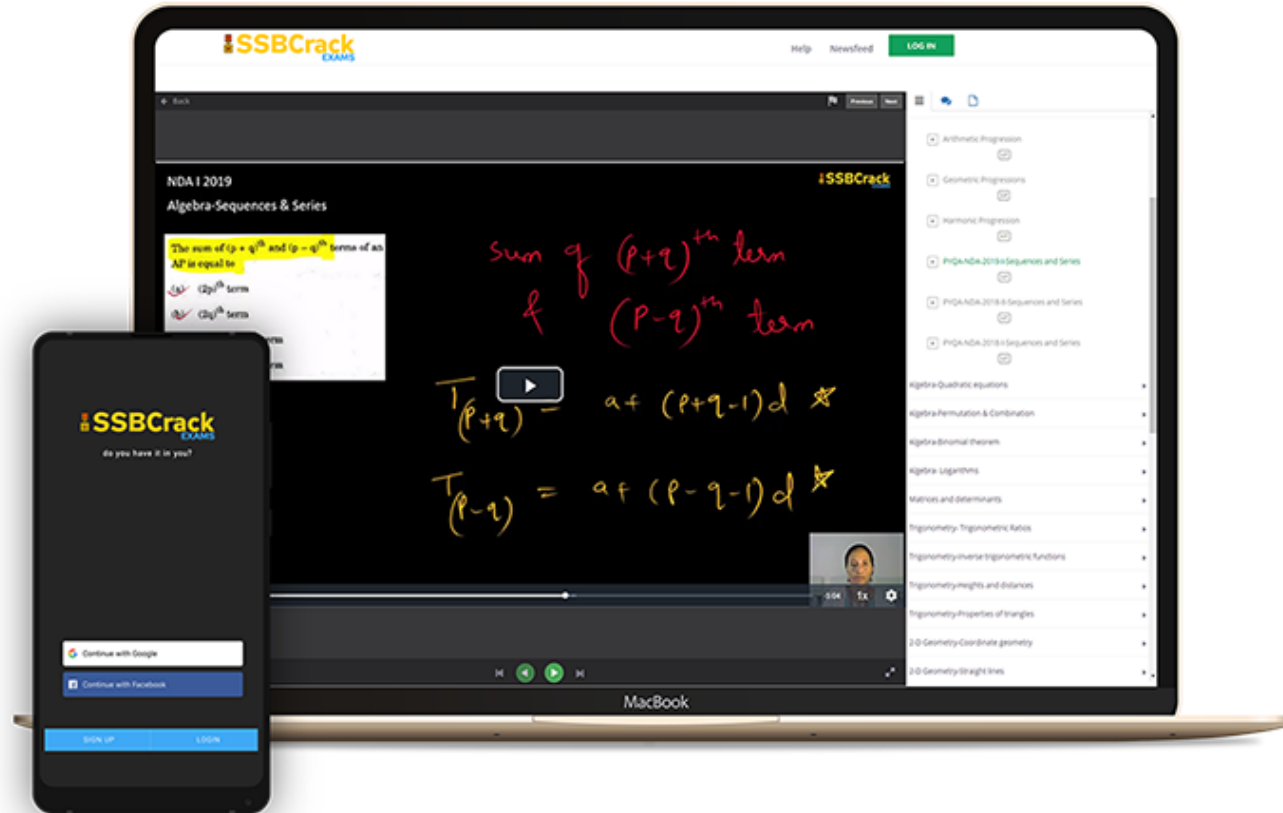


MNS Mock Test Series 2024

20 Tests

₹ 499

India's Most Popular Portal for Defence Exam Preparation



www.ssbcrackexams.com

CODE: WARRIOR10

get an extra **10%** off on all courses

